



Maha Bodhi School
2013 Semestral Assessment 2
Mathematics

Name : _____ ()

Date : 25 October 2013

Class : Pr 3 _____

Duration : 1 h 45 min

BOOKLET A

Section A (34 marks) .

Questions 1 to 17 carry 2 marks each.

For each question, four options are given. One of them is the correct answer.

Make your choice (1, 2, 3 or 4). Shade the oval (1, 2, 3 or 4) on the Optical Mark Sheet.

1. In 6923, the value of digit 9 is _____.

- (1) 9
- (2) 90
- (3) 900
- (4) 9000

2. What is the missing number in the pattern shown below?

1	2
2	4

2	3
3	18

3	4
4	48

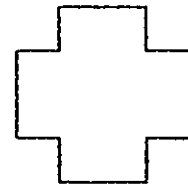
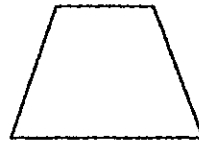
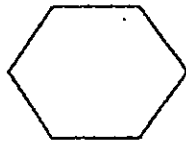
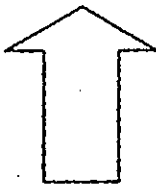
4	5
6	?

- (1) 15
- (2) 34
- (3) 120
- (4) 150

3. The sum of two numbers is 8928. The bigger number is 5982.
What is the difference between the two numbers?

- (1) 2946
- (2) 3036
- (3) 4464
- (4) 5892

4. Study the shapes below carefully. How many shape(s) is/are there that has/have both perpendicular and parallel lines?



- (1) 1
- (2) 2
- (3) 3
- (4) 4

5. A dress and three similar pairs of socks cost \$183.
If the dress cost \$99, how much was each pair of socks?

- (1) \$28
- (2) \$84
- (3) \$61
- (4) \$94

6. Which one of the fractions is greater than $\frac{1}{3}$?

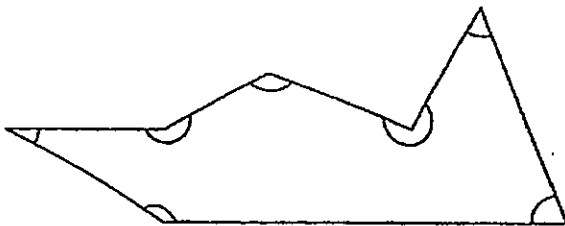
(1) $\frac{1}{6}$

(2) $\frac{1}{5}$

(3) $\frac{1}{4}$

(4) $\frac{1}{2}$

7. How many angles in the figure are greater than a right angle?



(1) 5

(2) 2

(3) 3

(4) 4

8. Which one of the following sets of coins makes up \$3?

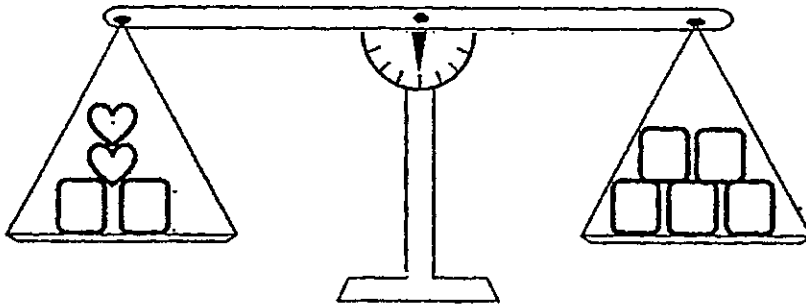
(1) 2 fifty-cent and 10 ten-cent coins

(2) 1 one-dollar and 20 five-cent coins

(3) 3 fifty-cent and 5 twenty-cent coins

(4) 5 twenty-cent and 20 ten-cent coins

9.



What is the mass of  if  is 350 g?

- (1) 525 g
 - (2) 875 g
 - (3) 1050 g
 - (4) 1750 g
10. Silas took 3 h 45 min to bake a cake. He finished baking at 2.50 p.m.
At what time did he start baking?
- (1) 6.35 a.m.
 - (2) 6.35 p.m.
 - (3) 11.05 a.m.
 - (4) 11.05 p.m.
11. Tom spent $\frac{1}{8}$ of his money on toys and $\frac{3}{4}$ of his money on books.
He saved the rest of his money. What fraction of his money did he save?
- (1) $\frac{1}{3}$
 - (2) $\frac{2}{3}$
 - (3) $\frac{1}{8}$
 - (4) $\frac{7}{8}$

12. Mr Tan and Ahmad have a total mass of 96 kg. Mr Tan's mass is thrice of Ahmad's mass. What is the mass of Ahmad?

- (1) 24 kg
- (2) 26 kg
- (3) 72 kg
- (4) 78 kg

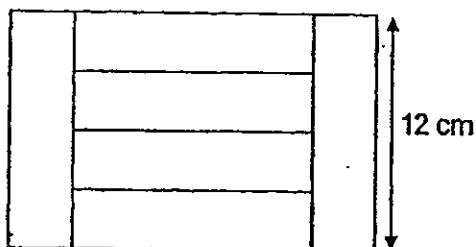
13. Gordan gave Klein 2323 beads. Klein gave Ashley 745 beads.
How many beads does Klein have now if he had 4671 beads at first?

- (1) 3065
- (2) 5416
- (3) 6249
- (4) 6994

14. A tank contained 4000 ml of water at first. Melvin poured 3450 ml of water into the tank and Ryan poured water from 4 bottles into the same tank.
If each bottle contained 330 ml of water, how much water was in the tank in the end?

- (1) 1320 ml
- (2) 5320 ml
- (3) 7450 ml
- (4) 8770 ml

15. The figure below is made up of six identical rectangles.
The area of one rectangle is _____ cm^2 .



- (1) 36
 (2) 48
 (3) 144
 (4) 216
16. What is the missing digit?

$$\begin{array}{r}
 4 \boxed{?} 5 \\
 \times \quad 7 \\
 \hline
 3325
 \end{array}$$

- (1) 6
 (2) 7
 (3) 3
 (4) 9
17. There were 35 fewer buttons in Bottle Y than Bottle X.
 40 buttons from Bottle X were poured into Bottle Y.
 How many more buttons were there in Bottle Y than Bottle X in the end?
- (1) 30
 (2) 40
 (3) 45
 (4) 75

Maha Bodhi School
2013 Semestral Assessment 2
Mathematics



Name : _____ ()

Class : Pr 3 _____

Duration : 1 h 45 min

Date : 25 October 2013

Parent's Signature : _____

Section A (34 marks)	
Section B (36 marks)	
Section C (20 marks)	
Total (90 marks)	

BOOKLET B

Section B (36 marks)

Questions 18 to 35 carry 2 marks each.

Write your answers in the blanks provided. Give your answers in the units stated.

Show your working in the space provided. Marks will be awarded for correct method shown.

18. \$50 – \$16.35 = _____

Ans: \$ _____

19. John has 694 sweets. After buying another 14 sweets, he has six times as many sweets as Sean. How many sweets does Sean have?

Ans: _____ sweets

20. Apples are sold at 5 for \$1. Mr Ang received \$25 for selling apples. How many apples did he sell?



Ans: _____ apples

21. The length of a square is 12 cm. What is its perimeter?

Ans: _____ cm

22. Bobby had \$7.60 in total. He had 12 fifty-cent coins. The rest of his money were twenty-cent coins. How many twenty-cent coins did he have?

Ans: _____ twenty-cent coins

23. Which fraction is greater?

$$\frac{3}{4} \text{ or } \frac{5}{6}$$

Ans: _____

24. Mrs Tan bought 1 packet of apple juice and 4 packets of orange juice.
Each packet of apple juice cost \$0.60.
Orange juice was sold at \$3.30 for 2 packets.
How much did she pay altogether?

Ans: \$ _____

25. Joel has \$761 and Peter has \$147.
How much money should Joel give to Peter so that each of them will have the same amount of money?

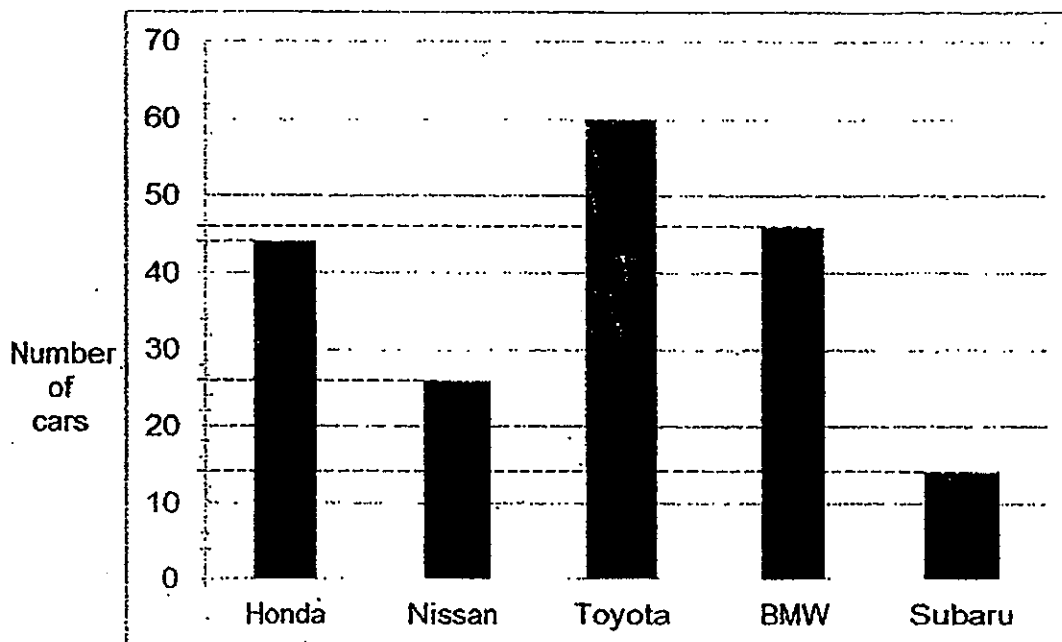
Ans: \$ _____

26. How many more equal parts must be shaded so that $\frac{3}{4}$ of the figure below is shaded?



Ans: _____

The bar graph below shows the number of cars of different brands sold in January. Study it carefully and answer Questions 27 and 28.



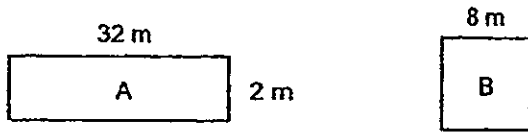
27. What is the total number of cars sold?

Ans: _____ cars

28. A total of 90 cars were sold.
Which two brands of cars could they be?

Ans: _____ and

29. Fill in the blank with greater than, smaller than or equal to.



The area of Rectangle A is _____ the area of Square B.

Ans: _____

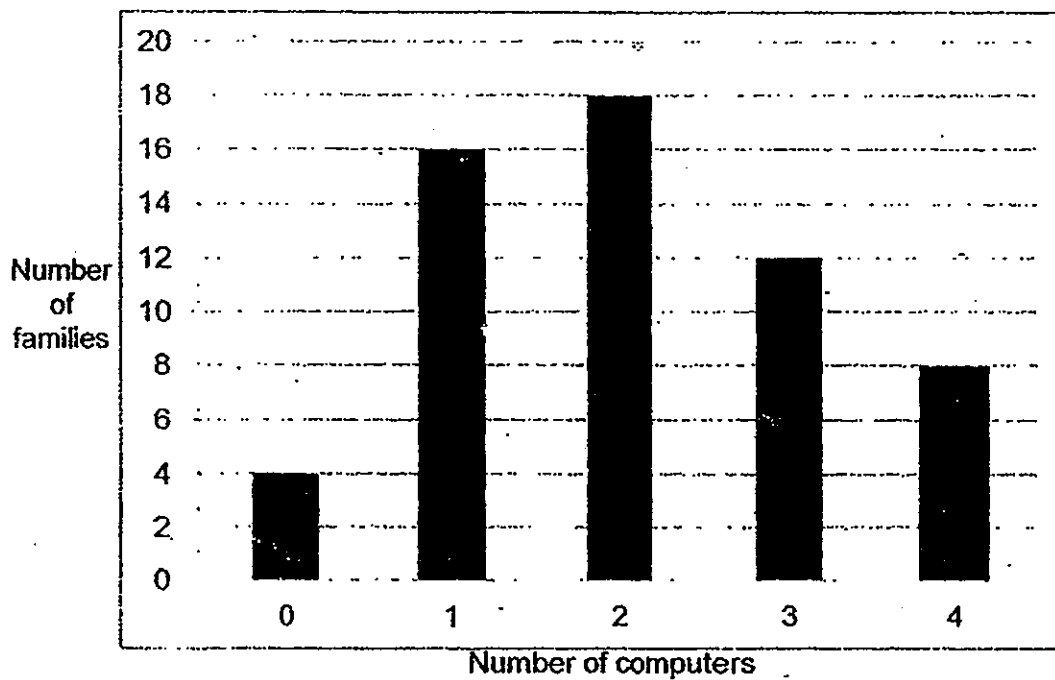
30. Arrange the fractions in order, beginning with the smallest.

Ans: _____, _____, _____, _____
smallest

31. The length of a rectangle is 4 times as long as its breadth. If the breadth is 8 cm long, what is the area of the rectangle?

Ans: _____ cm^2

32. The bar graph below shows the number of computers each family has..



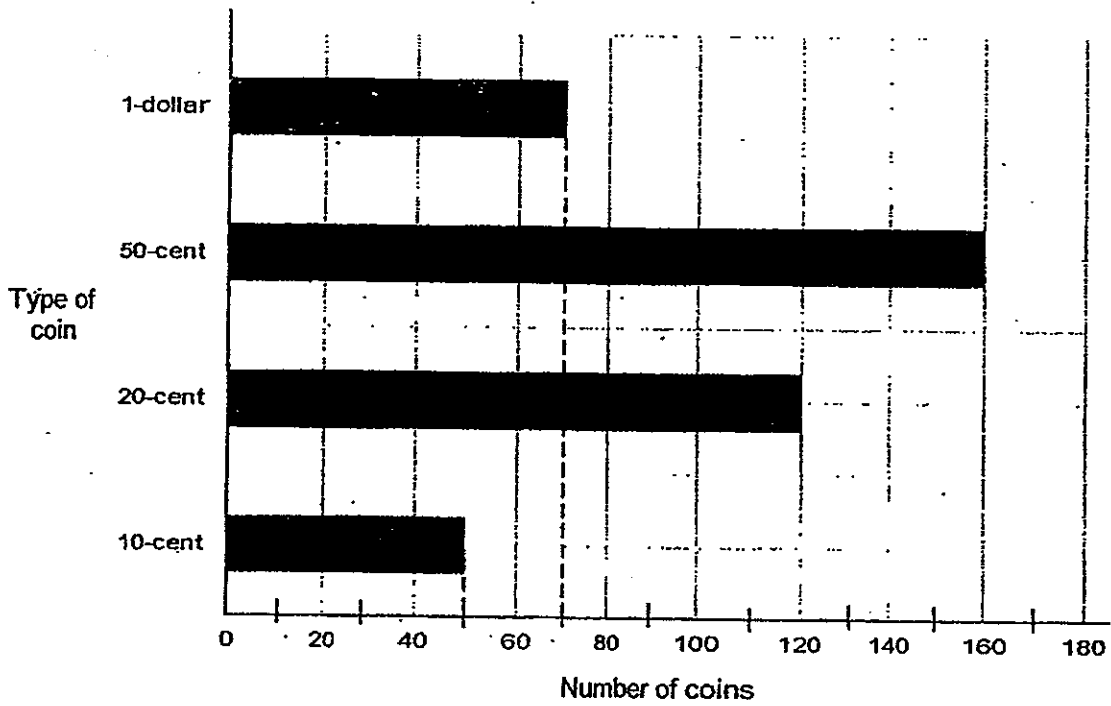
How many families have at least 2 computers?

Ans: _____ families

33. Johnny spent 2 h 35 min to practise his piano.
After that, he spent 1 h 40 min to complete his homework.
He completed his homework at 5.10 p.m.
At what time did he start practising his piano?

Ans: _____ p.m.

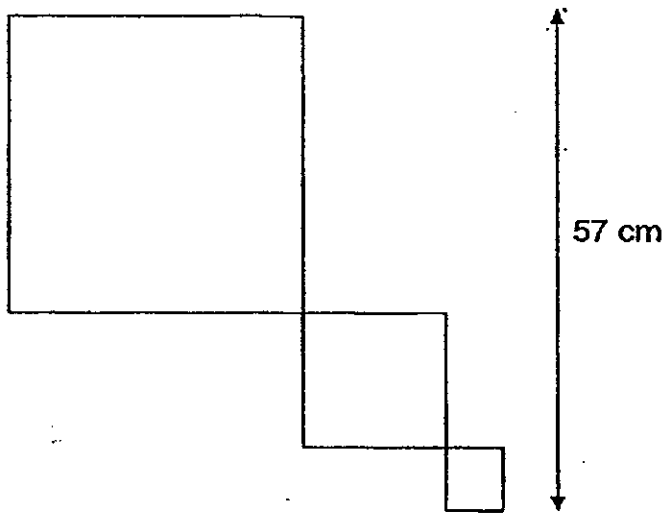
34. The bar graph below shows the number of coins collected by Ken.



How many more 10-cent coins must Ken collect so that the number of 10-cent coins will be the same as the total number of 50-cent and 1-dollar coins he has collected?

Ans: _____ more 10-cent coins

35. Peeling cut a wire and bent it to form 3 different squares as shown in the figure below.



What was the length of the wire used to form the figure?

Ans: _____ m _____ cm

Section C (20 marks)

Questions 36 to 40 carry 4 marks each.

Show your working clearly in the space below each question.

For each question, write your number sentences and final statement.

36. Lily and Sally have 807 stickers altogether. Lily has 155 stickers more than Sally.

(a) How many stickers does Sally have?

(b) How many stickers does Lily have?

37. The total mass of 2 bags of sand and 3 boxes of paper was 45 kg.

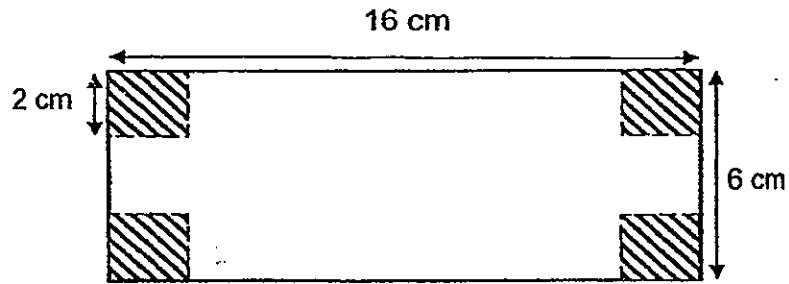
Each box of paper was 5 kg lighter than each bag of sand.

What was the mass of 1 bag of sand?

38. 5 pineapples and 3 watermelons cost \$29.
3 pineapples and 3 watermelons cost \$21,
How much does 1 pineapple cost ?

39. Daryl made 5000 ml of a fruity drink for a party. He used 900 ml of orange juice,
2300 ml of apple juice and added some water to make the fruity drink.
- (a) How much fruit juice did he use?
 - (b) How much water did he add?
- For parts (a) and (b), give your answers in litres and millilitres.

40. The figure below shows a rectangular piece of paper measuring 16 cm by 6 cm. Four similar squares of side 2 cm are cut out from the four corners of the piece of paper. What is the area of the remaining piece of paper?



*Remember to check your work!
Every mark counts.
-End of Paper -*



ANSWER SHEET

EXAM PAPER 2013

SCHOOL : MAHA BOHDI SCHOOL

SUBJECT : PRIMARY 3 MATHEMATICS

TERM : SA2

Q1	Q2	Q3	Q4	Q5	Q6	Q7	Q8	Q9	Q10	Q11	Q12	Q13	Q14	Q15	Q16	Q17
3	3	2	2	1	4	3	4	1	3	3	1	3	4	1	2	3

Section B

Q18) \$33.65

Q19) 118 sweets

Q20) 125 apples

Q21) 48cm

Q22) 8 twenty-cent coins

Q23) $\frac{5}{6}$

Q24) \$7.20

Q25) \$307

Q26) 6

Q27) 190 cars

Q28) Honda and BMW

Q29) equal to

Q30) $\frac{1}{5}$, $\frac{3}{10}$, $\frac{2}{5}$, $\frac{1}{2}$

Q31) 256cm^2

Q32) 38 families

Q33) 12:50pm

Q34) 180 more 10-cent coins

Q35) 2m 28cm

Section C

Q36) a) $807 - 155 = 652$

$652 \div 2 = 326$ (Ans)

b) $326 + 155 = 481$ (Ans)

Q37) $5 \times 3 = 15$

$45 + 15 = 60$

$60 \div 5 = 12\text{kg}$ (Ans)

Q38) $\$29 - \$21 = \$8$

$\$8 \div 2 = \4 (Ans)

Q39) a) $2300 + 900 = 3200\text{ml} = 3\text{L } 200\text{ml}$ (Ans)

b) $5000 - 3200 = 1800\text{ml} = 1\text{L } 800\text{ml}$ (Ans)

Q40) $2\text{cm} \times 2\text{cm} = 4\text{cm}^2$

$4\text{cm}^2 \times 4 = 16\text{cm}^2$

$16\text{cm} \times 6\text{cm} = 96\text{cm}^2$

$96\text{cm}^2 - 16\text{cm}^2 = 80\text{cm}^2$