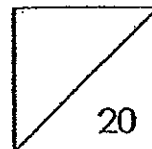


Ai Tong School
Primary 2 Mathematics
Term 2 (2012)
Practical Test – Length and Mass




Name: _____ () Date: _____

Class: 2 () Parent's Signature: _____

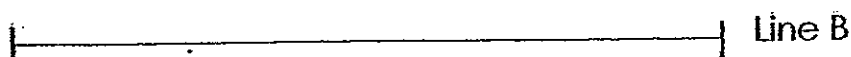
Station 1:

1. Place the unifix cubes along Line A. (1 mark)



Line A is about _____ cubes long.

2. Place the paper clips along Line B. (1 mark)



Line B is about _____ paper clips long.

3. Compare the lengths of Strip C and Strip D and circle the correct answer. (1 mark)

Strip C is (shorter than , longer than , equal to)
Strip D.

4. Compare the lengths of String E and String F and circle the correct answer. (1 mark)

String E is (shorter than , longer than , equal to)
String F.

Measure the lengths of Line G and Line H with a ruler and answer questions 5, 6 and 7. (2 marks each)

|-----| Line G

|-----| Line H

5. Line G is _____ cm long.

6. Line H is _____ cm long.

7. Line G is _____ cm longer than Line H.

Station 2:

8. Place the teddy bear and the pair of scissors each on the different side of the balance beam. (2 marks)

Which object is lighter? _____

9. Place the pair of scissors on one side of the balance beam and measure its mass using the unifix cubes. (2 marks)

The mass of the pair of scissors is about _____ unifix cubes.

Station 3:

Measure the mass of Weight A and Weight B with a weighing scale and answer questions 10, 11 and 12. (2 marks each)

10. The mass of Weight A is _____ grams.

11. The mass of Weight B is _____ grams.

12. Weight A is _____ grams heavier than Weight B.



EXAM PAPER 2012

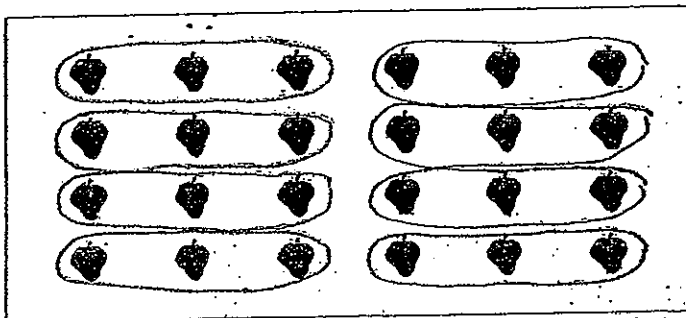
SCHOOL : AI TONG SCHOOL

SUBJECT : PRIMARY 2 - MATHEMATICS

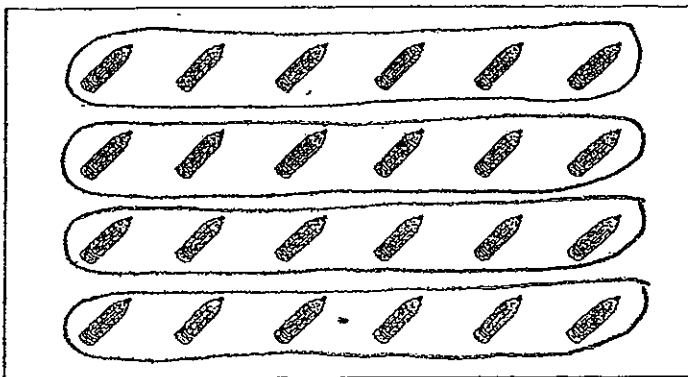
TERM : TERM 2

Multiplication and Division

1)



2)



3a) $3 \times 5 = 15$

3b) $15 \div 3 = 5$

4) 6

5) 9

6) 3

7) 10

8) 8 and 1

9) 20

10) \$16

11) $45 \div 5 = 9$

He used 9 boxes in all.

12) $32 \div 4 = 8$

He could fill 8 tubs.

13a) $21 \div 3 = 7$

She needs to buy 7 packs of apples.

13b) $7 \times 2 = 14$

She pays \$14 for all the apples.

14a) Triangle: 3 sticks

Square: 4 sticks

Rectangle: 6 sticks

14b) squares

15a) $40 \div 4 = 10$

There are 10 pupils .

15b) $40 \div 5 = 8$

Each pupil will get 8 sweets.

Length and Mass

1) Line A is about 6 cubes long.

2) Line B is about 4 paper clips long.

3) longer than

4) longer than

5) Line G is 11 cm long.

6) Line H is 5 cm long.

7) Line is 6 cm longer than Line H.

8) Teddy Bear

9) 6 unifix cubes

10) 320

11) 50

12) 370

