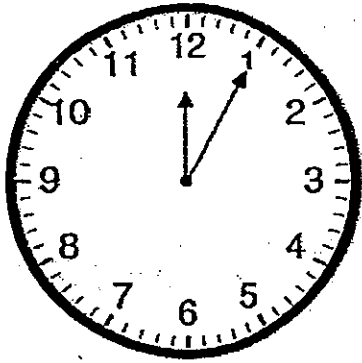


3



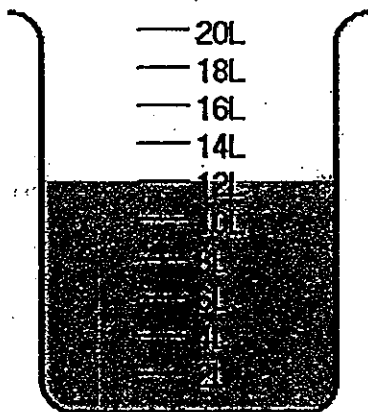
The clock above is 15 min faster than the actual time. What is the actual time?

- (1) 11.50 a.m.
- (2) 12.05 p.m.
- (3) 12.20 p.m.
- (4) 1.12 p.m.

()

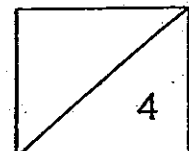
4

How many litres of water is needed to fill up the beaker to 20 ℓ?

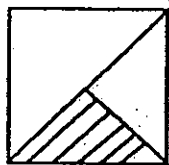


- (1) 8 ℓ
- (2) 12 ℓ
- (3) 20 ℓ
- (4) 32 ℓ

()



5 What fraction of the figure is shaded?



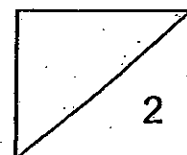
(1) $\frac{1}{5}$

(2) $\frac{1}{2}$

(3) $\frac{1}{3}$

(4) $\frac{1}{4}$

()



Section B: 12 marks (2 marks each)

Work out the following sums and write the answers in the spaces provided.

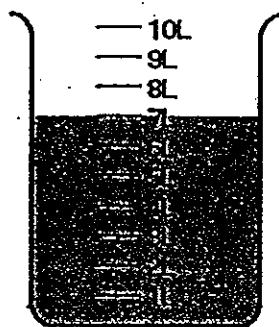
- 6 A burger cost \$4. Reuben bought a burger and gave the cashier \$10. How much change did Reuben receive?

Ans: \$ _____

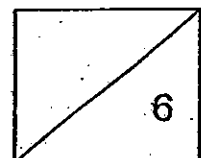
- 7 It takes 30 min for Peter to walk from his house to the school. How long does it take for Peter to walk to the school and back to his house?

Ans: _____ min

- 8 What is the volume of the water shown below?



Ans: _____ litres



- 9 A fish tank can hold up to 45ℓ of water. How many 5ℓ buckets does it take to fill up the fish tank?

Ans: _____

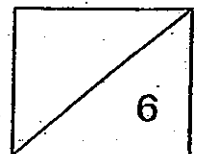
- 10 Mother bought a cake. She gave $\frac{1}{5}$ of the cake to each of her 2 sons. What fraction of the cake did she give to her sons?

Ans: _____

- 11 Arrange the following fractions in order, beginning with the smallest.

$$\frac{1}{4}, \frac{1}{2}, \frac{1}{3}$$

Ans: _____, _____, _____

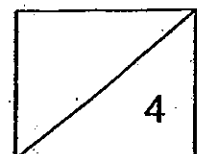


Section C: 8 marks (4 marks each)

Do the following sums. Show your workings and statements clearly.

12 Mr Raju ordered a pizza. He gave half of the pizza to his wife.

He then ate $\frac{3}{10}$ of the pizza. What fraction of the pizza was left?

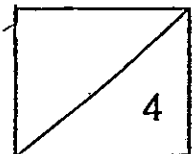


13 Mrs Tan baked a cake. She gave $\frac{2}{5}$ of the cake to her Sam. She then gave the rest of the cake to Susan.

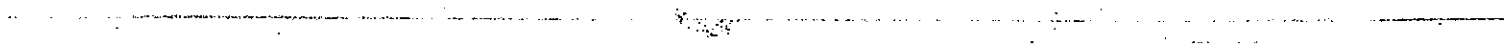
(a) Who received more of the cake?

(b) How much more of the cake did the person received?

END OF PAPER



Please check your work carefully.



ANSWER SHEET

EXAM PAPER 2013

SCHOOL : RED SWASTIKA SCHOOL

SUBJECT : PRIMARY 2 MATHEMATICS

TERM : TEST 3

| Q1 | Q2 | Q3 | Q4 | Q5 |
|----|----|----|----|----|
| 4 | 3 | 1 | 1 | 4 |

Section B

Q6) \$6

Q7) 60mins

Q8) 7 litres

Q9) 9

Q10) $\frac{3}{5}$

Q11) $\frac{1}{4}$, $\frac{1}{3}$, $\frac{1}{2}$

Section C

Q12) $\frac{10}{10} - \frac{3}{10} = \frac{7}{10}$

$\frac{5}{10} - \frac{3}{10} = \frac{2}{10}$ (Ans)

Q13) a) $\frac{5}{5} - \frac{2}{5} = \frac{3}{5}$

Susan received more

b) $\frac{3}{5} - \frac{2}{5} = \frac{1}{5}$ (Ans)

