



RAFFLES GIRLS' PRIMARY SCHOOL

Primary One: Mathematics

Practice 3

Numbers 0 to 10

Your Score Out of 20 marks	
-------------------------------	--

Name: _____ Pr 1 ()

Date: _____

SECTION A (5 × 1 mark)

For each question, four options are given. Choose the correct answer and write its number (1, 2, 3 or 4) in the brackets provided.


1. How many stars are there in the picture below?



- (1) 7
- (2) 8
- (3) 9
- (4) 10

()

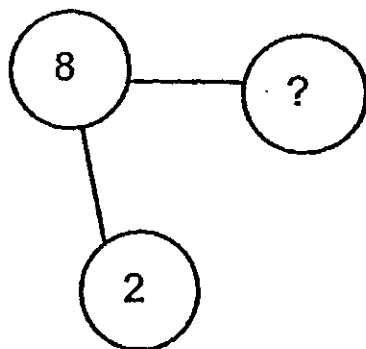
2. Look at the picture below. Choose the correct sentence.



- (1) There are more oranges than apples.
- (2) There are more apples than oranges.
- (3) There are fewer oranges than apples.
- (4) The number of apples and oranges are the same.

()

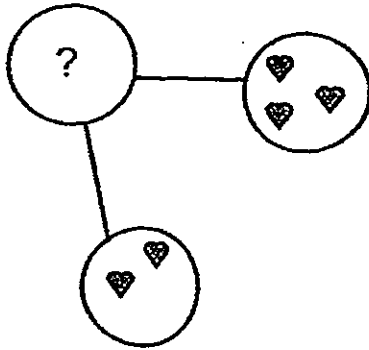
3. Complete the number bond below.



- (1) 0
- (2) 6
- (3) 10
- (4) 4

()

4. Look at the picture below. Choose the correct number.



(1) 1

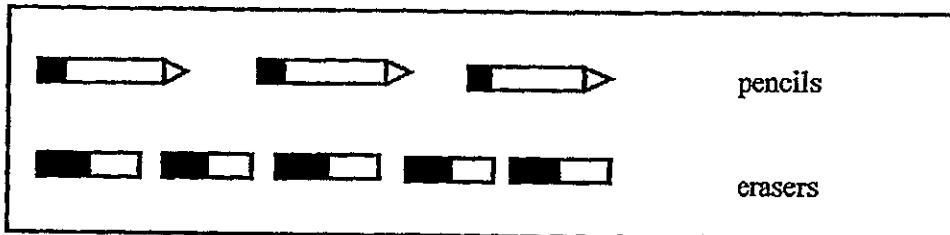
(2) 2

(3) 3

(4) 5

()

5. Look at the picture.



There are _____ more erasers than pencils.

(1) 1

(2) 2

(3) 3

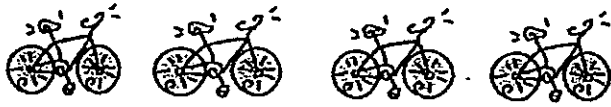
(4) 8

()

SECTION B (4 × 2 marks)

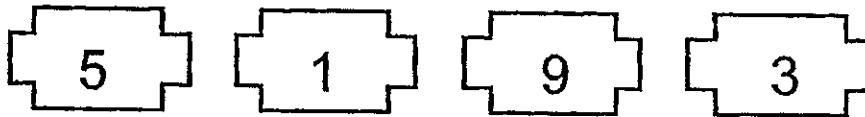
Read the questions carefully. Write the correct answers in the spaces provided.

6. Count and write the number in words.



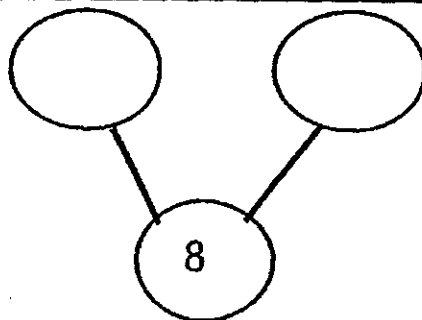

There are _____ bicycles.

7. Arrange these numbers in order. Begin with the smallest.



_____ , _____ , _____ , _____
smallest

8. Look at the picture below. Complete the number bond.



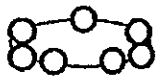
9. Circle two numbers that make 10.

1 3 5 7 2

SECTION C (7 marks)

Read the questions carefully. Write the correct answers in the spaces provided.

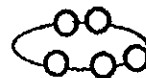
10. Beads are used to make Bracelets A, B and C.



Bracelet A



Bracelet B



Bracelet C

Fill in the blanks with A, B or C.

Amy has the **most** number of beads. She has Bracelet _____.

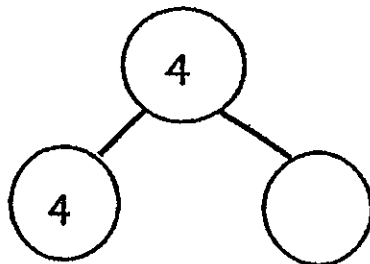
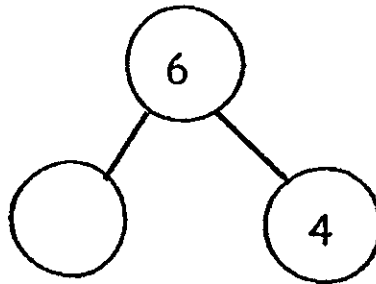
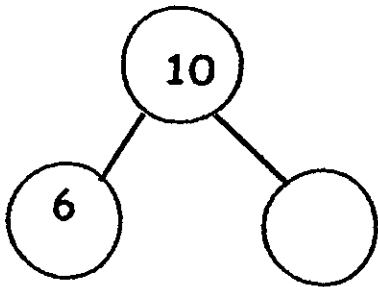
Lin has the **fewest** number of beads. She has Bracelet _____.

11. (a) _____ is 2 more than 4. (1 mark each)

(b) _____ is greater than 7 but less than 9.

(1 mark each)

12. Study the number bonds below. Fill in the missing numbers.



(1 mark each)

ANSWER SHEET

EXAM PAPER 2013

SCHOOL : RAFFLES GIRLS' PRIMARY SCHOOL

SUBJECT : PRIMARY 1 MATHEMATICS

TERM : TEST 3 (Numbers 0 to 10)

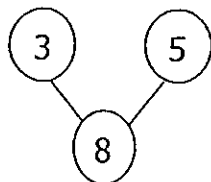
Q1	Q2	Q3	Q4	Q5
2	4	2	1	2

Section B

Q6) four

Q7) 1, 3, 5, 9

Q8)



Q9) 3, 10

Section C

Q10) A; C

Q11) a) 6

b) 8

Q12)

