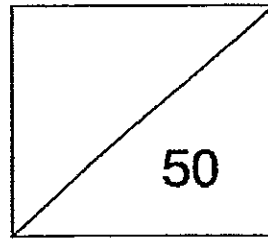


Henry Park Primary School

2013 End Year Review

Mathematics

Primary One



Name: _____ ()

Class: P 1 _____ Parent's signature: _____

Section A: MCQ (5 x 2 marks = 10 marks)

Read the questions carefully. Choose the correct answer and write its number in the brackets provided.

1. $43 + 36 =$ _____

(1) 73

(2) 75

(3) 79

(4) 89

2. What is 19 more than 52?

(1) 61

(2) 62

(3) 71

(4) 72

()

3. $80 - 35 = \underline{\hspace{2cm}}$

(1) 45

(2) 54

(3) 55

(4) 65

4. 5 groups of 4 = $\underline{\hspace{2cm}}$

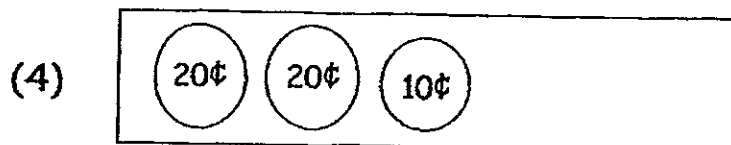
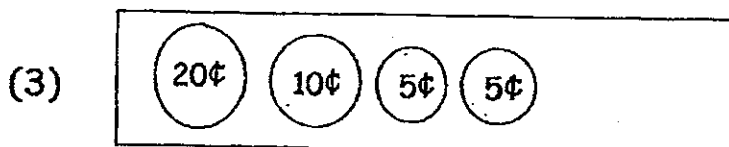
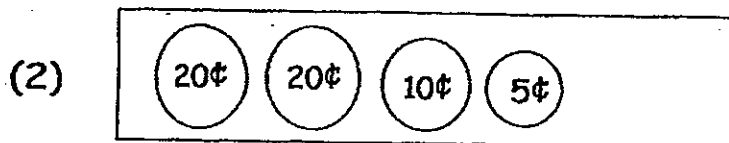
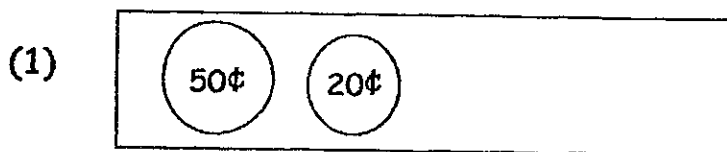
(1) $5 \times 5 \times 5 \times 5$

(2) $4 \times 4 \times 4 \times 4 \times 4$

(3) $4 + 4 + 4 + 4 + 4$

(4) $5 + 5 + 5 + 5 + 5$

5. Which of the boxes below shows the least amount of money?




Section B: Open-ended Questions (14 x 2 marks = 28 marks)

Fill in the correct answers in the spaces provided.

6. Write the numerals in words.

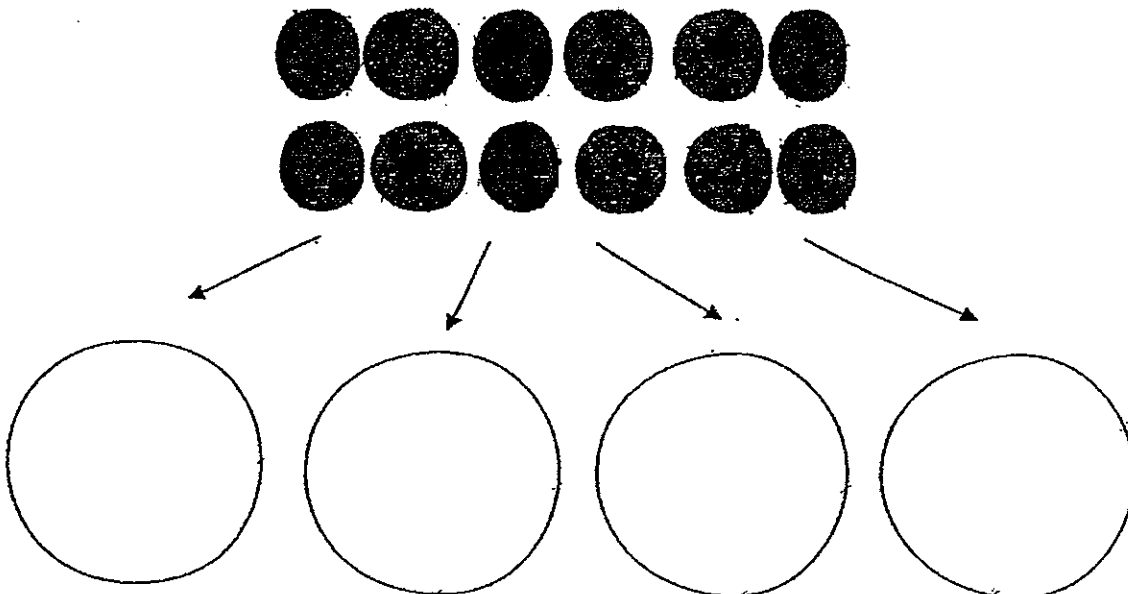
45	
100	

7. Look at the picture given below. How many stars are there altogether?




There are _____ stars altogether.

8. Joanna made 12 cookies. She puts all of them equally onto 4 plates. Draw the number of cookies on each plate.



9. Write the time shown on the clock.



The time shown is _____.

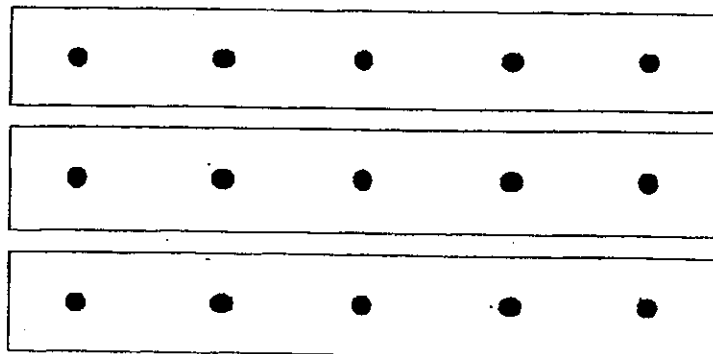
10. $100 - \underline{\hspace{2cm}} = 45$

11. Study the number pattern. Fill in the missing numbers.

(a) 100, 98, 96, _____, 92, _____

(b) 25, 30, 35, _____, 45, 50, _____

12. Based on the picture given below, write the numbers in the blanks.




3 groups of _____ = _____


13. $7 + 7 + 7 =$ _____


14. There are 18 eggs. Put them in groups of 6.

Circle to show the groups.



The picture graph below shows the favourite food of some children. Study the graph and answer questions 15 and 16.

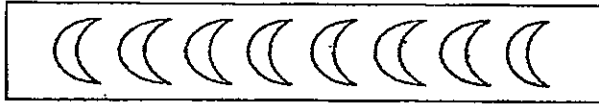


Each  stands for 1 child.

15. The most popular food is

16. more children like hamburger than nasi lemak.

17. Study the pictures below. Write down two addition and two subtraction sentences based on the pictures given below.




$$\underline{\quad} + \underline{\quad} = \underline{\quad}$$

$$\underline{\quad} - \underline{\quad} = \underline{\quad}$$

$$\underline{\quad} + \underline{\quad} = \underline{\quad}$$


$$\underline{\quad} - \underline{\quad} = \underline{\quad}$$

18. Tom, John and Mary woke up at different times on Saturday morning.




Who woke up the earliest?

19. Justin had \$10 in his wallet. He bought 2 different items from the bookshop and had \$4 left. Which 2 different items did he buy from the bookshop?



colour pencils
\$6



ruler
\$2



pen
\$3



pencil
\$1



notebook
\$4



scissors
\$5

Justin bought the

and

Section C: Problem Sums (3 x 4 marks = 12 marks)

Do these sums carefully. Write your equations and show your workings clearly.

20. There are 26 boys and 38 girls in a classroom.
How many more girls than boys are there in the classroom?

Working

There are _____ more girls than boys in the classroom.

21. Ken had \$50. After buying a bag, he had \$13 left.
How much did the bag cost?

Working


The bag cost \$_____.

22. Rachel has \$68. She has \$9 less than Sarah.
How much money does Sarah have?

Working

Sarah has \$ _____.

***** THE END *****



ANSWER SHEET

EXAM PAPER 2013

SCHOOL : HENRY PARK PRIMARY SCHOOL

SUBJECT : PRIMARY 1 MATHEMATICS

TERM : SA2 (2013 End Year Review)

Q1	Q2	Q3	Q4	Q5
3	3	1	3	3

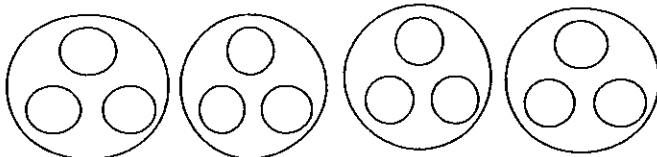
Section B

Q6)

45	Forty - five
100	One hundred

Q7) 16

Q8)



Q9) half past 1 / 1:30

Q10) 55

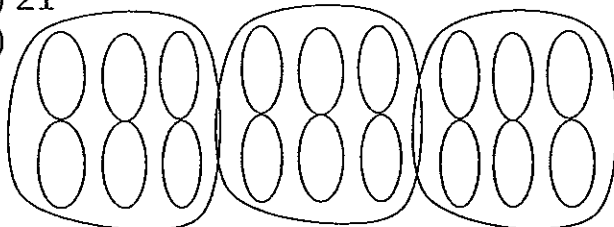
Q11) a) 100, 98, 96, 94, 92, 90

b) 25, 30, 35, 40, 45, 50, 55

Q12) 3 groups of 5 = 15

Q13) 21

Q14)



Q15) chicken rice

Q16) 3

Q17) $3 + 8 = 11$

$8 + 3 = 11$

$11 - 8 = 3$

$11 - 3 = 8$

Q18) John

Q19) notebook; ruler

Section C

Q20) $38 - 26 = 12$ more girls

Q21) $\$50 - \$13 = \$37$

Q22) $\$68 + \$9 = \$77$