

Pei Chun Public School
Modular Assessment 2 – 2012
Mathematics
Primary 1

Name: _____ () Date: 5 July 2012

Class: Primary 1 _____

Parent's Signature: _____

Time: 45 min

Marks:

Maths Teacher: _____



Section A (9 x 1 marks)




10 and _____ make 17.

2. Write in words.


13 _____

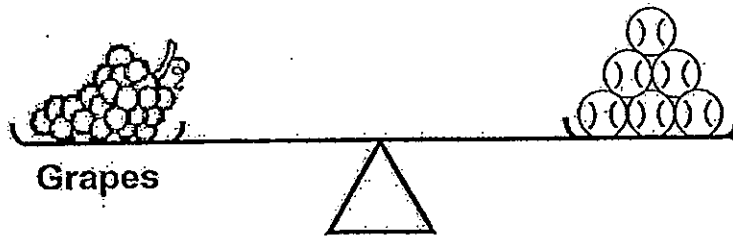
3. What is the shape of the shaded part?



The shape is a _____

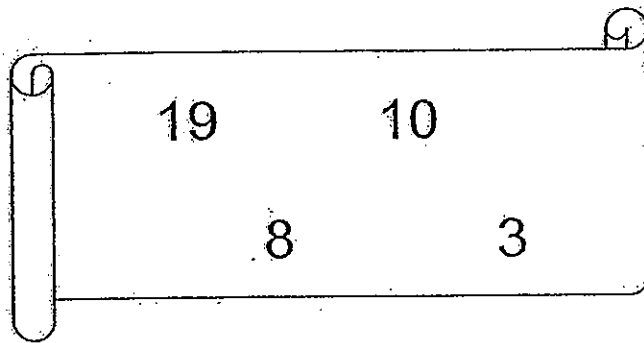
4. Study the picture carefully and answer the question.

Use  as 1 unit.



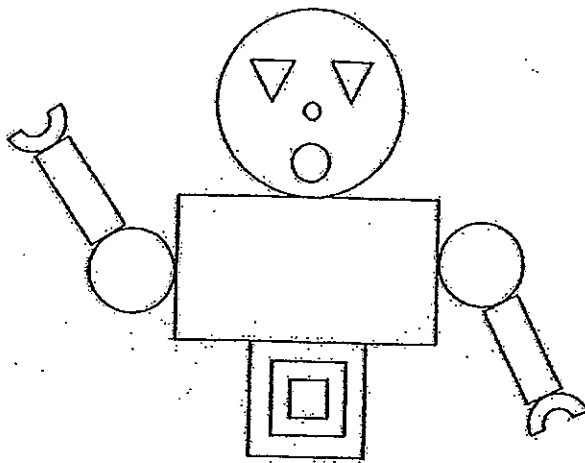
The mass of the grapes is _____ units.

5. Arrange these numbers from the smallest to the greatest.



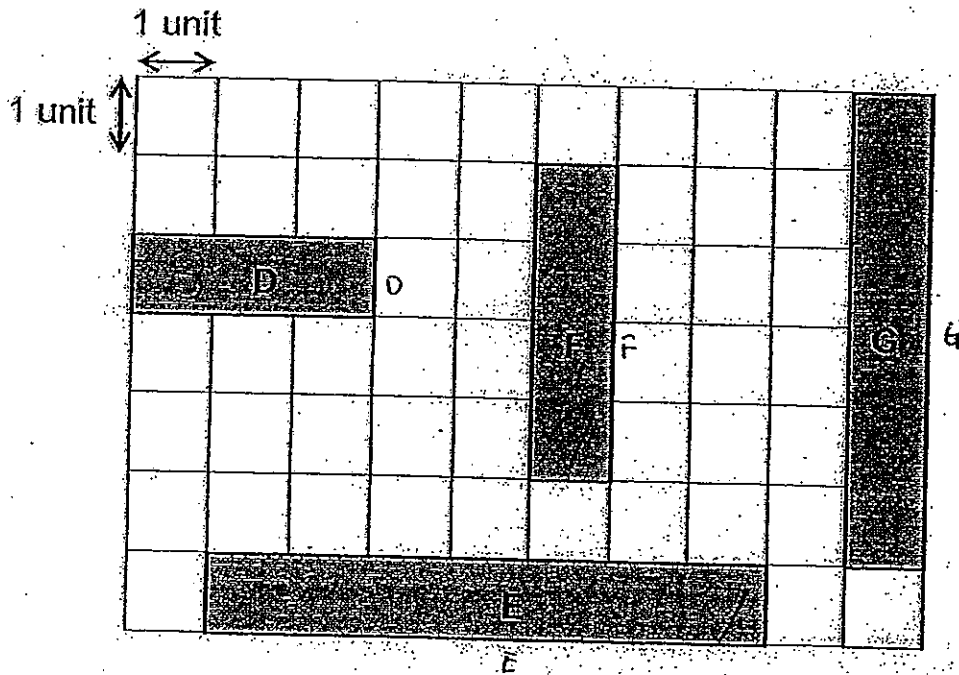
_____ smallest

6. Look at the picture below and fill in the blank.



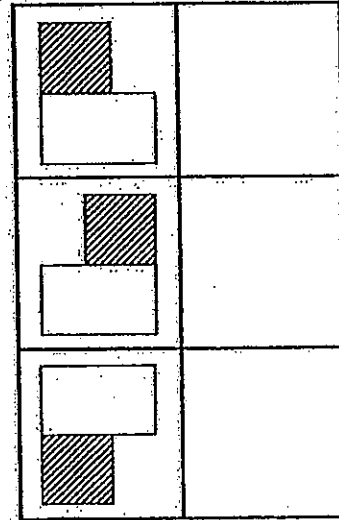
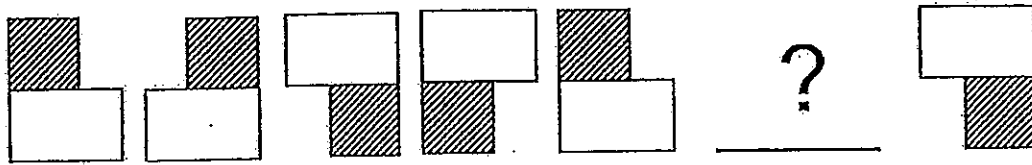
There are _____ circles.

7. Look at the picture carefully and fill in the blank.

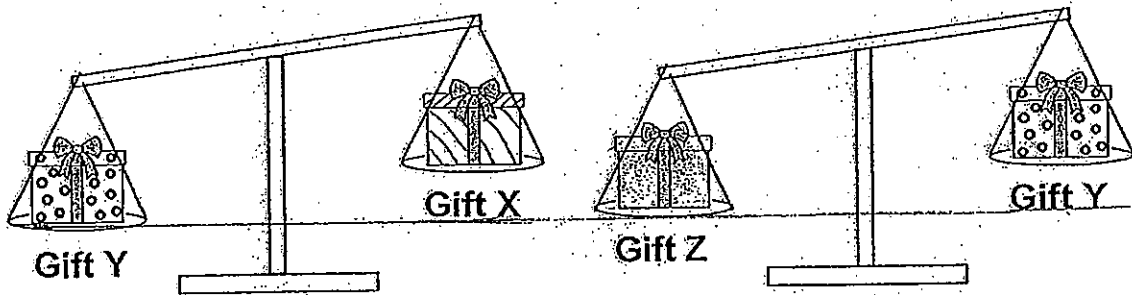


Bar _____ is the longest.

8. Tick the correct box to complete the pattern.



9. Study the pictures carefully and fill in the blank.



Gift _____ is the heaviest.

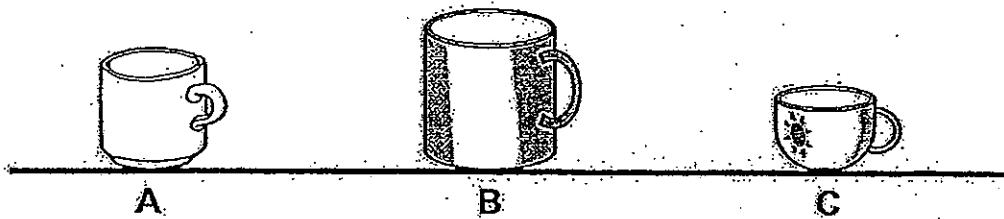
Section B (5 × 2 marks)

10. Do the sums.

(a) $17 - 3 =$

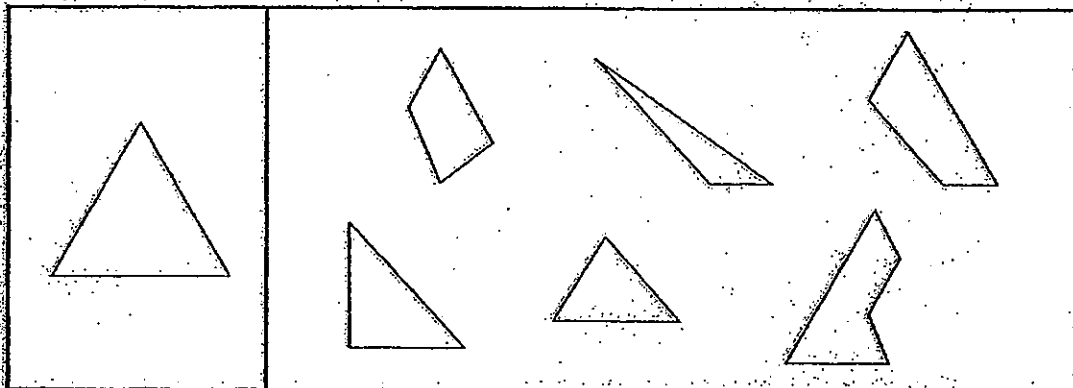
(b) $9 + 6 =$

11. Look at the picture carefully and circle the correct answer in the brackets.



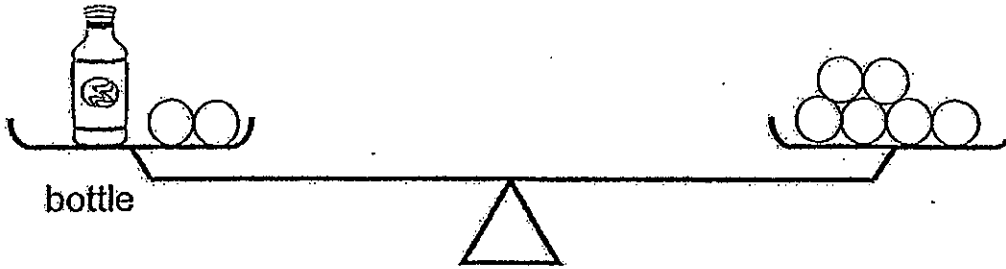
Cup A is (taller, shorter) than Cup B but (taller, shorter) than Cup C.

12. Circle the two pieces that can form the given shape on the left.



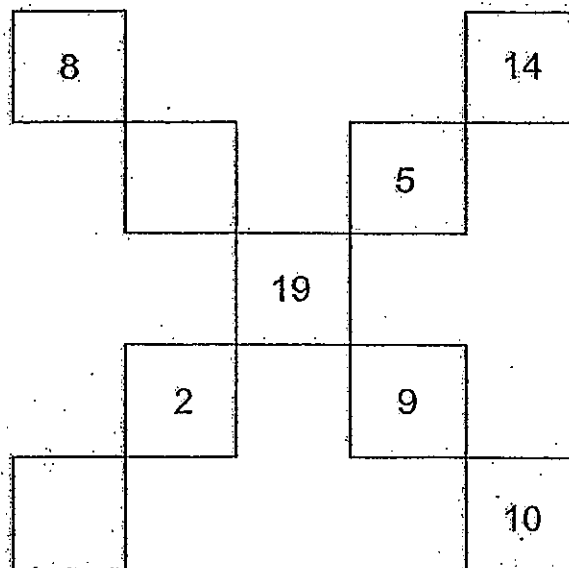
13. Look at the picture carefully and answer the question.

Use ○ as 1 unit.



The mass of the bottle is _____ units.

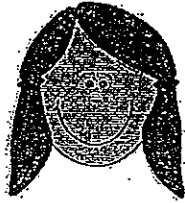
14. Study the pattern carefully and fill in the missing numbers in the boxes.




Section C (2 × 3 marks)

Work out the problem sums below. All working and answers must be clearly shown.

15.



Siti

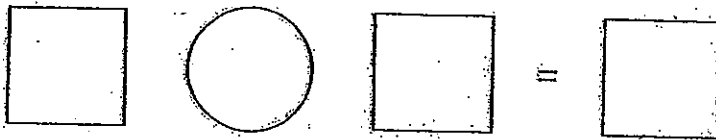


Jonathan

Siti has 16 cookies.


She has 2 more cookies than Jonathan.

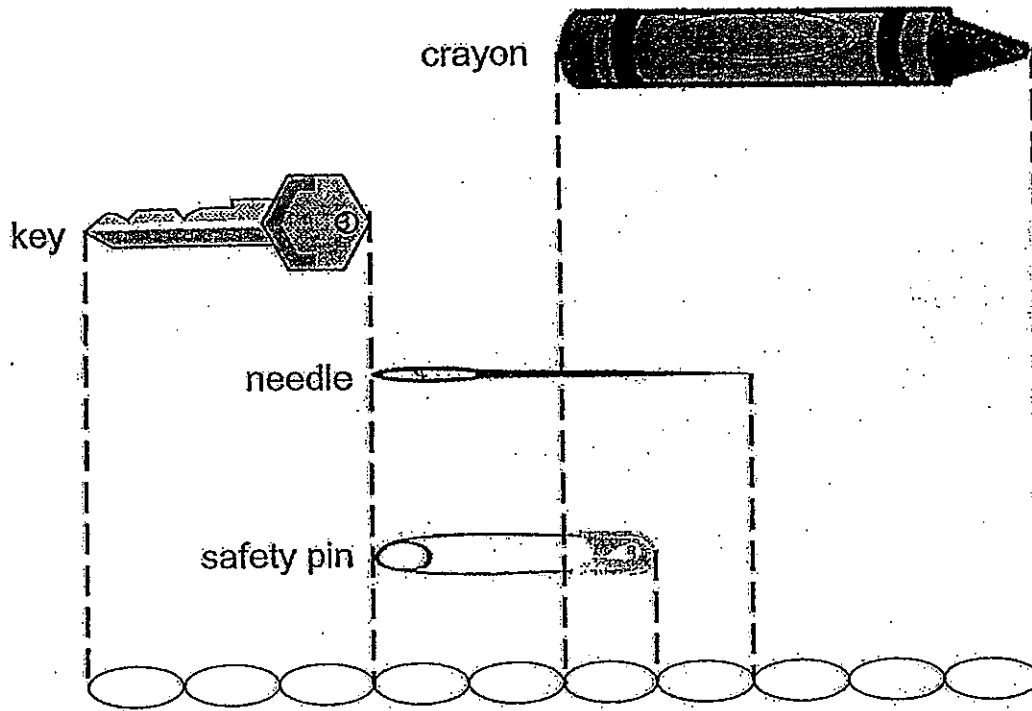
How many cookies does Jonathan have?



Jonathan has _____ cookies.

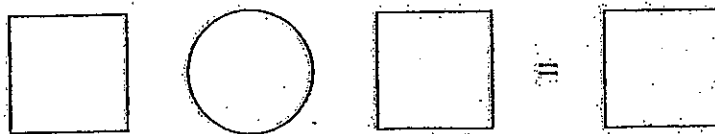
16. Look at the picture carefully and answer the questions.

Use  as 1 unit.



(a) The _____ is as long as the _____.

(b) How much shorter is the safety pin than the crayon?



The safety pin is _____ units shorter than the crayon.

End of Paper

ANSWER SHEET

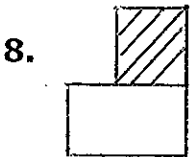
EXAM PAPER 2012

SCHOOL : PEI CHUN PUBLIC SCHOOL

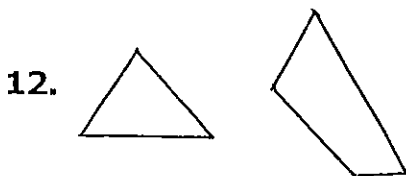
SUBJECT : PRIMARY 1-MATHEMATICS

TERM : SA1

1. 7
2. thirteen
3. rectangle
4. 6
5. 3,8,10,19
6. 5
7. E



9. Z
10. a)14
b)15
11. shorter, taller



13. 4
14. 11,17
15. 14
16. a) key, safety pin
b)2

