



**EAST SPRING SECONDARY SCHOOL**  
*Towards Excellence and Success*

Name: ..... ( )

Class: .....

**Preliminary Examination 2021**  
**Secondary 4 Express**

**CHEMISTRY**  
**Paper 1**

**6092/01**

**14 September 2021**  
**Tuesday**

**1 hour**  
**0800 - 0900**

Additional materials:  
 OTAS

**READ THESE INSTRUCTIONS FIRST**

Write in soft pencil.

Do not use staples, paper clips, glue or correction fluid.

Write your name and register number in the spaces provided and on the OTAS.

There are **forty** questions on this paper. Answer **all** questions. For each question there are four possible answers **A, B, C** and **D**.

Choose the **one** you consider correct and record your choice in **soft pencil** on the separate OTAS.

**Read the instructions on the OTAS very carefully.**

Each correct answer will score one mark. A mark will not be deducted for a wrong answer.

Any rough working should be done in this question paper.

A copy of the Periodic Table is printed on page 17.

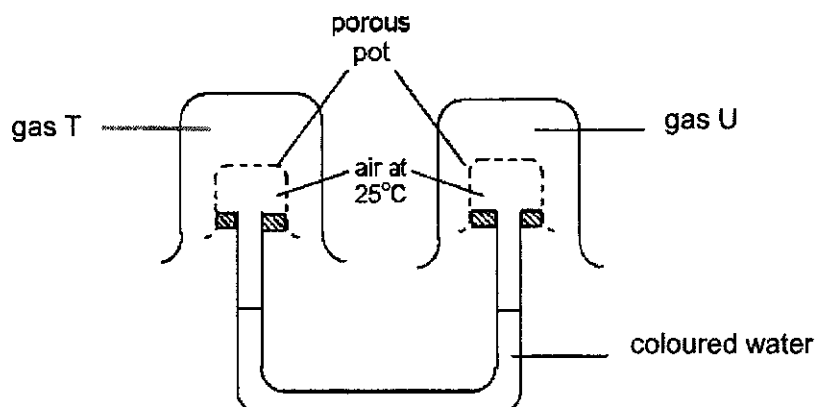
The use of an approved scientific calculator is expected, where appropriate.

This question paper consists of 17 printed pages including the cover page.



2

- 1 The rate of diffusion of two gases, T and U, was investigated using the experimental setup shown below.



Which pair of gases will produce the fastest movement in the water level?

	gas T	gas U
<b>A</b>	H <sub>2</sub>	NH <sub>3</sub>
<b>B</b>	CO <sub>2</sub>	H <sub>2</sub>
<b>C</b>	NH <sub>3</sub>	H <sub>2</sub>
<b>D</b>	CO <sub>2</sub>	NH <sub>3</sub>

- 2 A series of tests was carried out on gas A.

test	observations
damp blue litmus paper	turns red
bubbled through acidified silver nitrate	a white precipitate is formed
bubbled through acidified potassium manganate(VII) solution	no visible change is observed

What is gas A?

- A** ammonia
- B** carbon monoxide
- C** hydrogen chloride
- D** sulfur dioxide



- 6 Rubidium and bromine react together to form the ionic compound rubidium bromide.

Which statement is correct when rubidium bromide is being formed?

- A Each atom of rubidium receives an electron from a bromine atom.  
 B Each atom of rubidium shares a pair of electrons with a bromine atom.  
 C Each atom of rubidium shares an electron with a bromine atom.  
 D Each atom of rubidium gives an electron to a bromine atom.
- 7 The table below shows four different particles.

number of	particle			
	W	X	Y	Z
protons	6	8	8	11
neutrons	6	8	10	12
electrons	6	10	8	10

Which particles will form a covalent compound when chemically combined?

- A W and X      B W and Y      C X and Y      D X and Z
- 8 Which substance could be diamond?

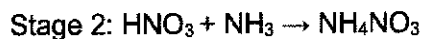
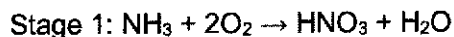
	melting point / °C	boiling point / °C	electrical conductivity when solid
A	-52	-2	poor
B	98	883	good
C	1084	2560	good
D	3550	4830	poor

- 9 7 g of a gaseous hydrocarbon occupies 6 dm<sup>3</sup> at room temperature and pressure.

What is the relative molecular mass of the hydrocarbon?

- A 7  
 B 24  
 C 28  
 D 42

- 10 The fertilizer, ammonium nitrate ( $\text{NH}_4\text{NO}_3$ ,  $M_r = 80$ ) is manufactured from ammonia ( $\text{NH}_3$ ,  $M_r = 17$ ) by a two-stage process.



What is the mass of ammonium nitrate produced from 17 kg of ammonia?

- A 40 kg  
B 80 kg  
C 120 kg  
D 160 kg
- 11 In an electrolysis experiment, the same quantity of electrons deposited 1 mole of copper and 2 mol of metal X. The charge on copper ion was 2+.

What was the charge on the metal X?

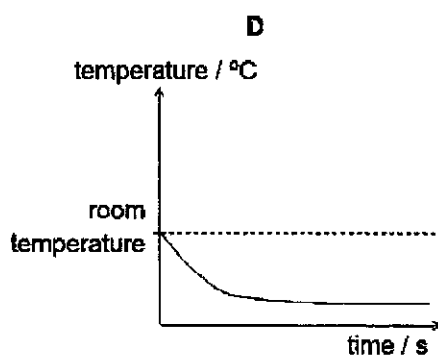
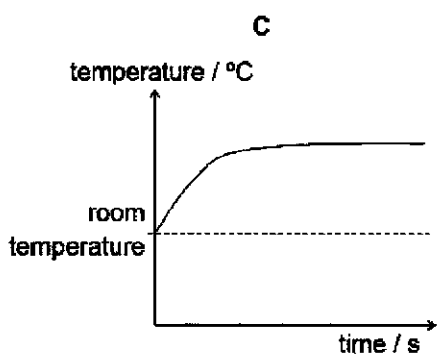
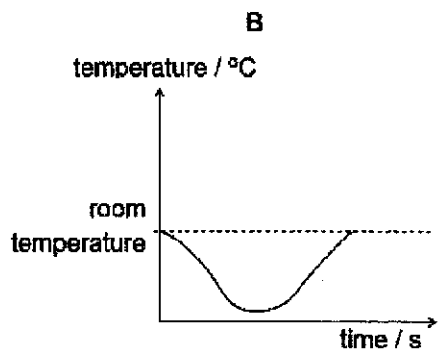
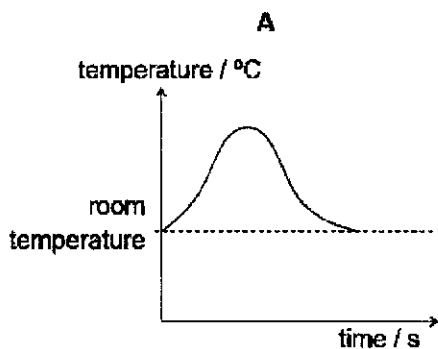
- A 1+  
B 2+  
C 3+  
D 4+
- 12 Three electrolytes are listed. Each is electrolysed using inert electrodes.
- 1 aqueous sodium chloride
  - 2 concentrated hydrochloric acid
  - 3 molten lead(II) bromide

For which electrolyte is a gas formed at both electrodes?

- A 2 only      B 3 only      C 1 and 2      D 1 and 3

- 13 The dissolving of ammonium chloride in water is an endothermic process.

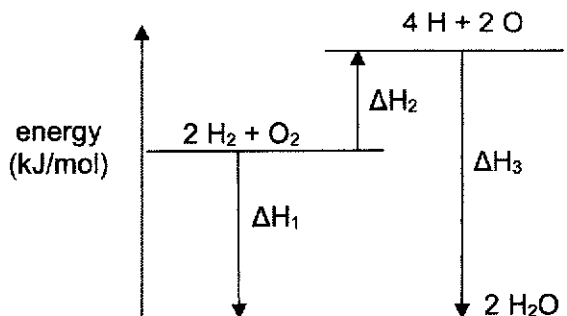
Which graph shows how the temperature alters as ammonium chloride is added to water and then the resulting solution is left to stand?



- 14 Hydrogen and oxygen react to form steam as shown in the equation below.



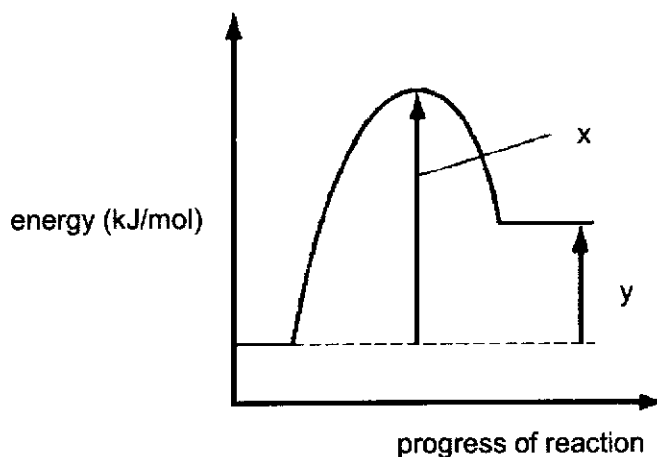
The following energy level diagram represents the reaction between hydrogen and oxygen to form steam:



Which of the following correctly represents the energy change for bond breaking and bond formation?

	bond breaking	bond formation
<b>A</b>	$\Delta H_1$	$\Delta H_2$
<b>B</b>	$\Delta H_2$	$\Delta H_3$
<b>C</b>	$\Delta H_2$	$\Delta H_1$
<b>D</b>	$\Delta H_1$	$\Delta H_3$

- 15 The energy profile diagram for a chemical reaction is shown below.

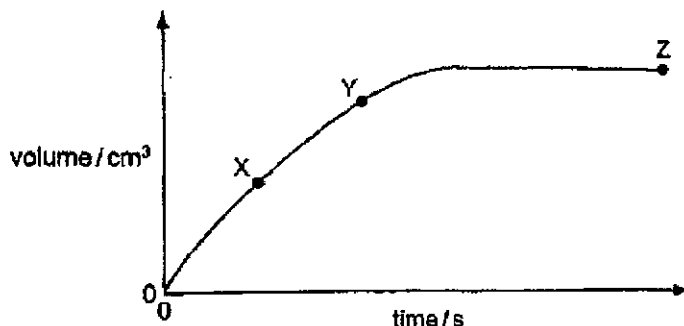


Which statement about the energy profile diagram is correct?

- A** The overall enthalpy change is equal to  $x + y$ .  
**B** The reaction is exothermic.  
**C** The value of  $x$  would decrease in the presence of catalyst.  
**D** The value of  $y$  would increase in the presence of catalyst.



- 16 The graph shows how the volume of hydrogen gas produced by the reaction between 25 cm<sup>3</sup> of 1.0 mol/dm<sup>3</sup> hydrochloric acid and an excess of magnesium varied with time.



Which statement is correct?

- A The reaction is faster at point Y than point X.
  - B All the magnesium has reacted at point Z.
  - C The volume of gas produced is doubled if 50 cm<sup>3</sup> of 1 mol/dm<sup>3</sup> of acid is used.
  - D The rate of reaction is the highest at point Z.
- 17 The reaction between copper and concentrated nitric acid is shown below.



Which statement about this reaction is correct?

- A Nitric acid is a reducing agent.
  - B Nitrogen is oxidised as it loses 1 oxygen atom.
  - C Copper is oxidised as it loses 2 electrons.
  - D The oxidation state of oxygen has changed.
- 18 The oxide of titanium, TiO<sub>2</sub>, is used as a 'whitener' in toothpaste. It is obtained from the ore iron(II) titanate, FeTiO<sub>3</sub>.

What is the oxidation state of Ti in iron(II) titanate, FeTiO<sub>3</sub>?

- A +1
- B +2
- C +3
- D +4

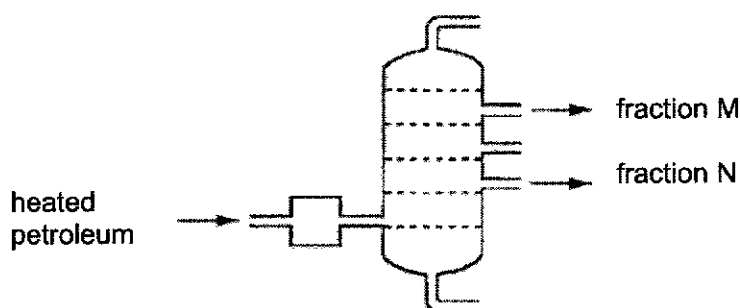
19 Some statements about sulfuric acid are given.

- 1 A white precipitate is formed when aqueous barium nitrate is added.
- 2 The solution turns anhydrous copper(II) sulfate from white to blue.
- 3 The addition of Universal Indicator shows that the solution has a pH value of less than 7.0.
- 4 The solution reacts with copper(II) oxide, forming a blue solution.

Which two statements confirm the acidic nature of the solution?

- A** 1 and 2  
**B** 1 and 3  
**C** 2 and 4  
**D** 3 and 4

20 The diagram shows the fractional distillation of petroleum.



Which row about fraction M and N are correct?

	M burns more easily than N	M has a higher boiling point than N	M is more viscous than N
<b>A</b>	true	false	false
<b>B</b>	true	true	false
<b>C</b>	false	true	true
<b>D</b>	false	false	true

21 A student has five reagents.

- dilute hydrochloric acid
- dilute sulfuric acid
- dilute nitric acid
- solid calcium carbonate
- solid copper(II) carbonate

How many soluble salts can be prepared from these reagents?

- A** 3  
**B** 4  
**C** 5  
**D** 6

22 X, Y and Z are elements in the third period of the Periodic Table.

The oxide of X, Y and Z are basic, amphoteric, and acidic respectively.

Which of the following correctly show X, Y and Z?

	X	Y	Z
A	Mg	Al	S
B	Ca	Zn	Se
C	Be	Al	N
D	Ca	Se	Zn

23 Which statement is correct about the elements in Group I of the Periodic Table?

- A** They are equally reactive.  
**B** They occur uncombined in nature.  
**C** They form chlorides of similar formulae.  
**D** They become less metallic as the relative proton(atomic) number increases.

24 Element R has the following properties.

- low melting and boiling point
- forms ionic compound when react with sodium
- has coloured vapour

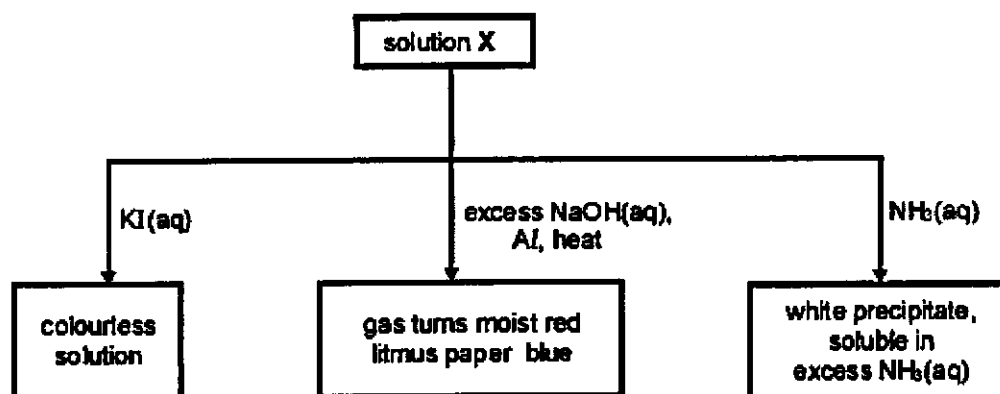
Which part of the Periodic Table does R belong to?

- A Group I  
 B Group II  
 C Group VII  
 D transition elements

25 Which element is least likely to form an oxide?

- A sodium  
 B iron  
 C carbon  
 D neon

26 The diagram below shows the reactions of solution X.



What are the ions present in solution X?

- A zinc ions and nitrate ions  
 B lead(II) ions and nitrate ions  
 C ammonium ions and chloride ions  
 D aluminium ions and nitrate ions

27 The first member of a homologous series is  $C_6H_6$ .

What is the formula of the next member?

- A  $C_7H_7$
- B  $C_7H_8$
- C  $C_8H_7$
- D  $C_8H_8$

28 Which statement is **not** correct for all metals?

- A They are good conductors of electricity.
- B They lose electrons to form positive ions.
- C They have high melting and boiling points.
- D They are good conductors of heat.

29 Which pair of elements cannot be used to form an alloy?

- A copper and zinc
- B magnesium and aluminium
- C iron and carbon
- D sodium and oxygen

30 Hydrogen is produced by the reaction of a metal A and a dilute acid B.

When the same gas is passed over an oxide of metal C, it reduced the metal oxide to its metal in the presence of heat.

Which row of substances would give these results?

	metal A	dilute acid B	metal C oxide
1	calcium	hydrochloric acid	lead(II) oxide
2	copper	hydrochloric acid	silver oxide
3	iron	sulfuric acid	copper(II) oxide
4	zinc	sulfuric acid	calcium oxide

- A 1 and 3 only
- B 1 and 4 only
- C 2 and 3 only
- D 2 and 4 only

31 Which pair of substances is correct?

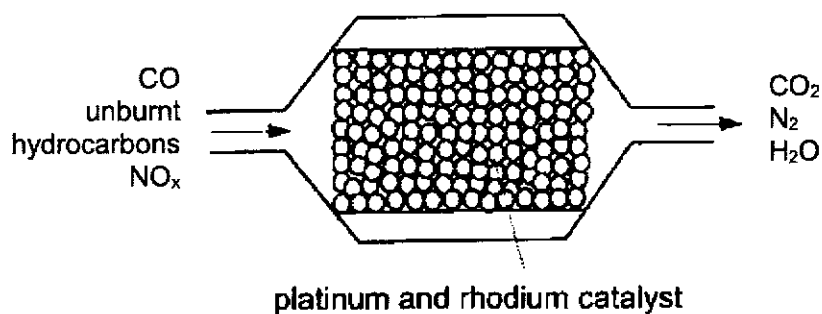
	substance added to blast furnace	main impurity in the iron ore
A	calcium oxide	iron(III) oxide
B	coke	sand
C	limestone	carbon
D	iron(III) oxide	coke

32 1 g of four different metals are reacted with excess sulfuric acid separately.  
Which metal will produce the greatest volume of gas upon completion of the reaction?

- A magnesium
- B iron
- C zinc
- D copper

33 The diagram below shows a section of a catalytic converter in the exhaust system of a car.

The harmful gases are converted into carbon dioxide, nitrogen and water vapour.

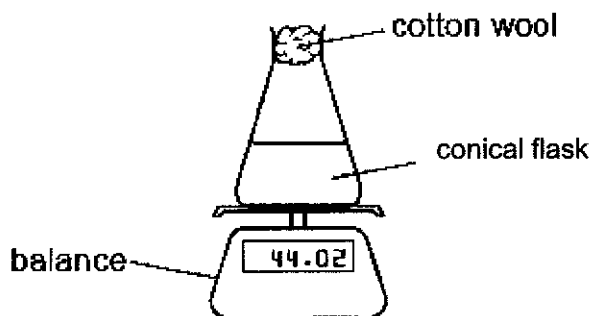


Which reactions take place in this catalytic converter?

- I Platinum and rhodium catalyse redox reactions.
- II Carbon monoxide and unburnt hydrocarbons react together.
- III Carbon monoxide and oxides of nitrogen react together.

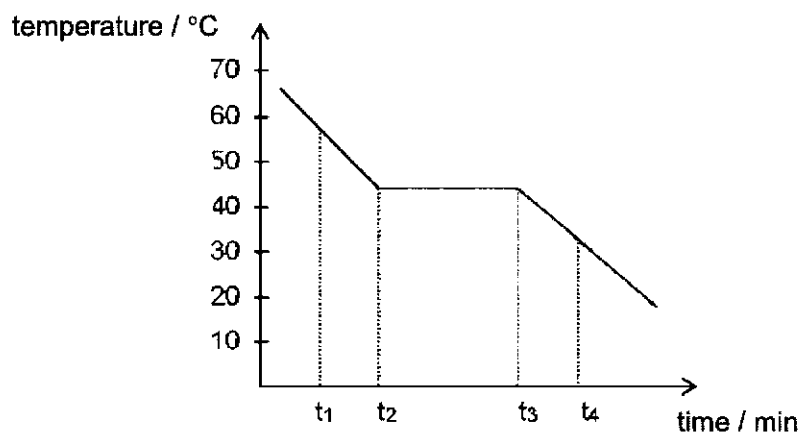
- A I and II only
- B II and III only
- C I and III only
- D I, II and III

- 34 The diagram below shows an experimental set-up used to determine the rate of reaction.



Which of the following reaction is **not** suitable for using the above experimental set-up to determine the rate of reaction?

- A  $\text{CaCO}_3 + 2\text{HNO}_3 \rightarrow \text{Ca}(\text{NO}_3)_2 + \text{CO}_2 + \text{H}_2\text{O}$   
 B  $\text{Mg} + \text{H}_2\text{SO}_4 \rightarrow \text{MgSO}_4 + \text{H}_2$   
 C  $\text{AgNO}_3 + \text{HCl} \rightarrow \text{AgCl} + \text{HNO}_3$   
 D  $\text{Ca} + 2\text{H}_2\text{O} \rightarrow \text{Ca}(\text{OH})_2 + \text{H}_2$
- 35 Stearic acid is a solid at room temperature. The cooling curve of stearic acid is as shown.



Which statement can be inferred from the graph?

- A At time interval  $t_1$  to  $t_2$ , heat is absorbed from the surroundings.  
 B At time interval  $t_2$  to  $t_3$ , all stearic acid exists as solid.  
 C At time interval  $t_2$  to  $t_3$ , crystals of stearic acid start to form.  
 D At time interval  $t_3$  to  $t_4$ , all the stearic acid molecules are irregularly arranged.

36 To reduce atmospheric pollution, the following gases from a coal-burning power station are treated with powdered calcium carbonate.

- 1 carbon monoxide, CO
- 2 nitrogen dioxide, NO<sub>2</sub>
- 3 sulfur dioxide, SO<sub>2</sub>

Which gases can be removed by the powdered calcium carbonate?

- A 1 and 2
- B 1 and 3
- C 2 and 3
- D 1, 2 and 3

37 Buffer solutions are mixtures that contain either

- a weak acid and its salt, or
- a weak base and its salt.

Which of the following pair of solutions can be used to prepare a buffer solution?

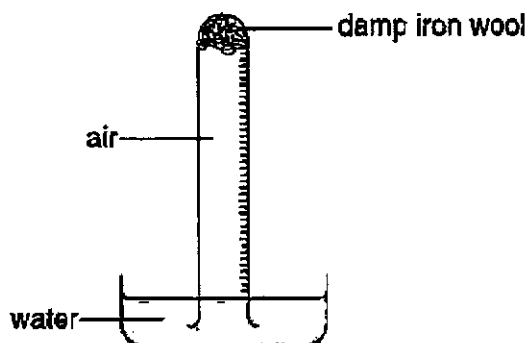
- A NaOH and MgCl<sub>2</sub>
- B HNO<sub>3</sub> and NaNO<sub>3</sub>
- C NH<sub>4</sub>OH and NH<sub>4</sub>NO<sub>3</sub>
- D HCl and NH<sub>4</sub>Cl

38 In the polymerisation of ethene to form poly(ethene), which does **not** change?

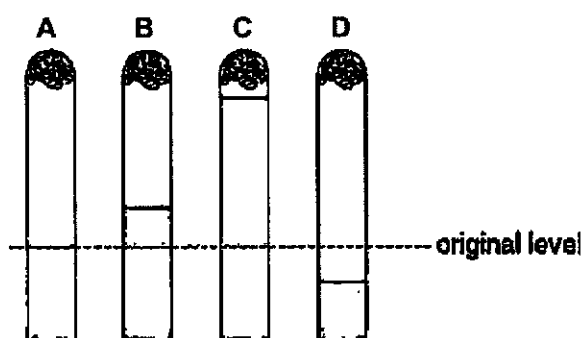
- A boiling point
- B density
- C empirical formula
- D molecular mass



- 39 The apparatus shown is set up and left for a week.



Where would the water level be at the end of the week?



- 40 Which of the following contains salts that are best prepared by titration?
- A copper(II) chloride, potassium nitrate, silver sulfate
  - B magnesium chloride, silver chloride, lithium sulfate
  - C sodium chloride, ammonium nitrate, potassium sulfate
  - D sodium chloride, copper(II) nitrate, barium sulfate

~ End of Paper ~

The Periodic Table of Elements

		Group																
I	II	III	IV	V	VI	VII	0					0						
3 Li lithium 7	4 Be beryllium 9	1 H hydrogen 1	5 B boron 11	6 C carbon 12	7 N nitrogen 14	8 O oxygen 16	9 F fluorine 19	10 Ne neon 20					2 He helium 4					
11 Na sodium 23	12 Mg magnesium 24	13 Al aluminium 27	14 Si silicon 28	15 P phosphorus 31	16 S sulphur 32	17 Cl chlorine 35.5	18 Ar argon 40					40						
19 K potassium 39	20 Ca calcium 40	21 Sc scandium 45	22 Ti titanium 48	23 V vanadium 51	24 Cr chromium 52	25 Mn manganese 55	26 Fe iron 56	27 Co cobalt 59	28 Ni nickel 59	29 Cu copper 64	30 Zn zinc 65	31 Ga gallium 70	32 Ge germanium 73	33 As arsenic 75	34 Se selenium 79	35 Br bromine 80	36 Kr krypton 84	
37 Rb rubidium 85	38 Sr strontium 88	39 Y yttrium 89	40 Zr zirconium 91	41 Nb niobium 93	42 Mo molybdenum 96	43 Tc technetium 101	44 Ru ruthenium 101	45 Rh rhodium 103	46 Pd palladium 106	47 Ag silver 108	48 Cd cadmium 112	49 In indium 115	50 Sn tin 119	51 Sb antimony 122	52 Te tellurium 128	53 I iodine 127	54 Xe xenon 131	55 Cs caesium 133
55 Ba barium 137	56 La lanthanoids	57 Ce cerium 139	58 Pr praseodymium 141	59 Nd neodymium 144	60 Pm promethium 147	61 Sm samarium 150	62 Eu europium 152	63 Gd gadolinium 157	64 Tb terbium 159	65 Dy dysprosium 163	66 Ho holmium 165	67 Er erbium 167	68 Tm thulium 169	69 Yb ytterbium 173	70 Lu lutetium 175	71 Rn radon 222	72 Fr francium 223	
87 Fr francium 223	88 Ra radium 226	89-103 actinoids	104 Rf rutherfordium 261	105 Db dubnium 262	106 Sg seaborgium 263	107 Bh bohrium 264	108 Hs hassium 265	109 Mt meitnerium 266	110 Ds darmstadtium 267	111 Rg roentgenium 268	112 Cn copernicium 269	113 Nh nihonium 270	114 Fl flerovium 271	115 Lv livermorium 272	116 Ts tennessine 273	117 Og oganesson 274	118 Uu unbinilium 275	

Key  
atomic number  
atomic symbol  
name  
relative atomic mass

The volume of one mole of any gas is 24 dm<sup>3</sup> at room temperature and pressure (r.t.p.)





# East Spring Secondary School

*Towards Excellence and Success*

Name: ..... ( )

Class: .....

## Preliminary Examination 2021 Secondary 4 Express

### Chemistry Paper 2

6092/2

Monday  
30 August 2021

1 hour 45 minutes  
0800 - 0945

#### READ THESE INSTRUCTIONS FIRST

Write your name, class and register number on all the work you hand in.

Write in dark blue or black pen.

You may use a HB pencil for any diagrams or graphs.

Do not use staples, paper clips, glue or correction fluid.

#### Section A

Answer **all** questions in the spaces provided.

#### Section B

Answer all **three** questions. The last question in the form either/or.

Answer all questions in the spaces provided.

The number of marks is given in brackets [ ] at the end of each question or part question.  
A copy of the Periodic Table is printed on page 21.

The use of an approved scientific calculation is expected, where appropriate.

Section	Marks
Section A	50
Section B	30
<b>Total</b>	<b>80</b>

---

This question paper consists of **21** printed pages including the cover page.

**Section A [50 marks]**Answer **all** questions in this section in the spaces provided.**A1** The equations A, B, C, D, E, F, G and H shows various chemical reactions.

- A:  $\text{CH}_4 + \text{O}_2 \rightarrow \text{CO}_2 + \text{H}_2\text{O}$   
 B:  $2\text{KI} + \text{Cl}_2 \rightarrow 2\text{KCl} + \text{I}_2$   
 C:  $2\text{HCl} + \text{CaO} \rightarrow \text{CaCl}_2 + \text{H}_2\text{O}$   
 D:  $2\text{Na} + \text{CuCl}_2 \rightarrow 2\text{NaCl} + \text{Cu}$   
 E:  $\text{Ba}(\text{NO}_3)_2 + \text{H}_2\text{SO}_4 \rightarrow \text{BaSO}_4 + 2\text{HNO}_3$   
 F:  $\text{C}_{20}\text{H}_{42} \rightarrow \text{C}_4\text{H}_{10} + \text{C}_{16}\text{H}_{32}$   
 G:  $\text{Fe}_2\text{O}_3 + 3\text{CO} \rightarrow 2\text{Fe} + 3\text{CO}_2$   
 H:  $\text{C}_2\text{H}_4 + \text{H}_2 \rightarrow \text{C}_2\text{H}_6$

Use the letters A, B, C, D, E, F, G and H to answer the following questions.

- (a) (i) Which equation shows neutralisation? .....
- (ii) Which equation shows addition? .....
- (iii) Which equation shows cracking? .....
- (iv) Which equation shows combustion? .....
- (v) Which equation shows displacement? .....
- (vi) Which equation shows precipitation? ..... [6]

**(b)** Iron is a transition metal produced from the reaction in equation G.Which of these statements about transition metals are **true** and which are **false**?

Put a tick (✓) in one box in each row.

	true	false
They form coloured compounds.		
They form compounds with only one oxidation state.		
They have low melting and boiling point.		
They conduct electricity.		

[2]

**[Total: 8]**

- A2** Table 2.1 shows some potassium oxyhalides and their thermal decomposition temperatures.

**Table 2.1**

potassium oxyhalide	formula	thermal decomposition temperature <sup>1</sup>
potassium chlorate	K <sub>3</sub> ClO	above 400 °C
potassium bromate	K <sub>3</sub> BrO	at 370 °C
potassium iodate		above 100 °C

<sup>1</sup> source from <https://pubchem.ncbi.nlm.nih.gov/>

- (a) (i) Complete Table 2.1 to show the chemical formula of potassium iodate. [1]

- (ii) What conclusion can you make from Table 2.1 about the relationship between reactivity of the halogen and the thermal decomposition temperature of the potassium oxyhalides?

.....  
 .....  
 ..... [1]

- (b) An aqueous solution of potassium chlorate is a good oxidising agent.

Describe a chemical test to confirm the oxidising properties of potassium chlorate and state the result.

test: .....

result: ..... [2]

- (c) When potassium chlorate reacts as an oxidising agent, the chlorate ions are reduced to chloride ions, as shown in the equation below.



Use ideas about oxidation state to explain why the chlorate ion, ClO<sub>3</sub><sup>-</sup> is reduced.

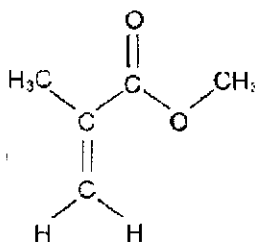
.....  
 .....  
 ..... [2]

[Total: 6]

4

**A3** Methyl methacrylate (MMA) is an ingredient used widely in the preparation of artificial acrylic nails. It is a volatile liquid that has been described as fragrant and fruity.

Fig. 3.1 shows the structural formula of MMA.



**Fig. 3.1**

(a) Name the functional group that is responsible for the fragrant and fruity smell.

..... [1]

(b) Draw the full structural formulae of the two organic compounds that are used to make MMA.

[2]

(c) Methyl methacrylate can undergo addition polymerisation to form plastic, that has high optical clarity, high transparency, and UV stability.

(i) Describe two differences between addition polymerisation and condensation polymerisation.

.....  
 .....  
 .....  
 .....

[2]

(ii) Name the polymer.

..... [1]

(iii) Draw part of the structure of the polymer containing three repeating units.

[1]

**[Total:7]**

A4 Fig. 4.1 shows some of the processes in the carbon cycle.

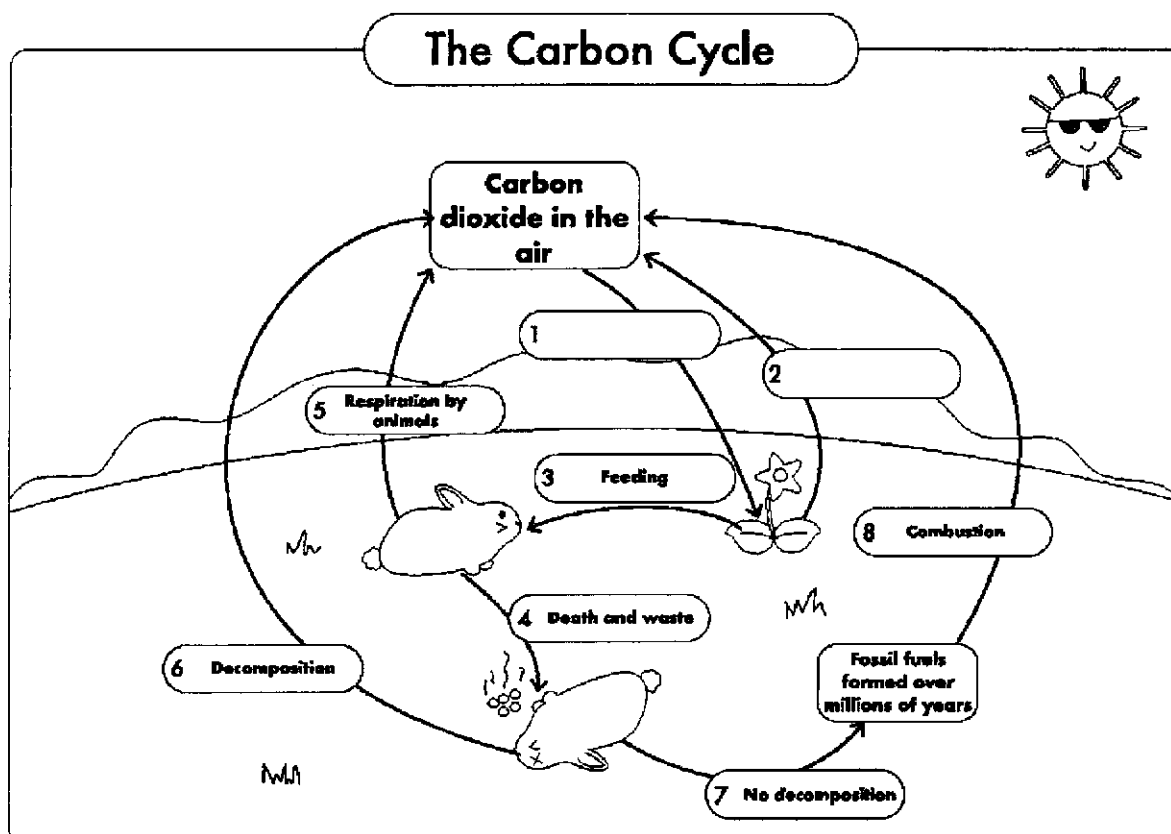


Fig. 4.1

(a) (i) Complete Fig. 4.1 by naming process 1 and process 2.

process 1: ..... process 2: ..... [2]

(ii) Describe, with the help of chemical equations, how the amount of carbon dioxide is regulated in the atmosphere through process 1 and process 2?

.....  
 .....  
 .....  
 .....  
 .....  
 .....  
 ..... [3]



6

(b) When fossil fuels undergo combustion, it increases the amount of carbon dioxide in the air.

Suggest an alternative source of clean fuel to replace fossil fuel.

Explain your reasoning.

.....  
.....

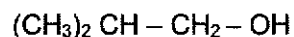
[2]

**[Total:7]**

A5 The following are 2 isomers of an alcohol, X and Y.



**X**



**Y**

(a) (i) Define *isomer*.

.....  
 ..... [1]

(ii) Name isomer X.

..... [1]

(b) Draw the full structural formula for isomer Y.

[1]

(c) Isomer X can be manufactured in the lab from an alkene.


(i) State the conditions needed to make isomer X from alkene.

.....  
 ..... [2]

(ii) Name the alkene that can be used to make isomer X.

..... [1]

(iii) The reaction is exothermic. Draw a labelled energy profile diagram of this reaction, indicating the activation energy and enthalpy change.



[3]

[Total:9]

- A6** To prepare a pure sample of magnesium nitrate salt, a student carried out a reaction using magnesium carbonate powder and dilute nitric acid as shown in the equation below.



The student wants to obtain 20 g of pure magnesium nitrate crystals,  $\text{Mg}(\text{NO}_3)_2 \cdot 6\text{H}_2\text{O}$ , at the end of the experiment.

- (a)** The student needs to add excess magnesium carbonate to the dilute nitric acid.

Explain why excess magnesium carbonate was added.

.....  
..... [1]

- (b)** Briefly state the steps required to obtain pure magnesium nitrate crystals after excess magnesium carbonate is added to nitric acid.

.....  
.....  
.....  
.....  
.....  
.....  
..... [3]

(c) The percentage yield for this method of salt preparation is typically around 80% to 90%.

The student managed to obtain 80% yield for his experiment.

- (i) Calculate the theoretical mass of magnesium nitrate crystals he needs to produce 20 g of the crystals,

theoretical mass of magnesium nitrate crystals: ..... g [1]

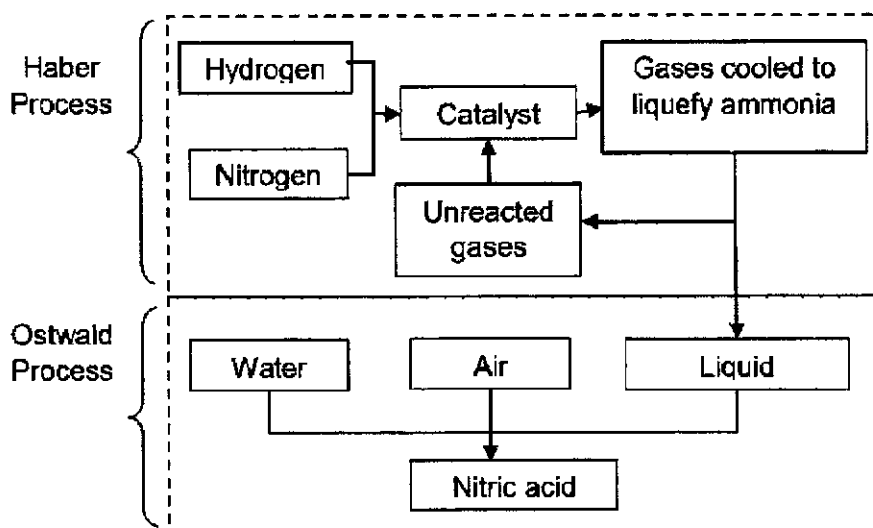
- (ii) Calculate the volume of 1 mol/dm<sup>3</sup> nitric acid needed to produce 20 g of pure magnesium nitrate crystal.

[M<sub>r</sub> of Mg(NO<sub>3</sub>)<sub>2</sub>·6H<sub>2</sub>O: 256]

volume of nitric acid needed= ..... dm<sup>3</sup> [3]

**[Total: 8]**

- A7** Fig. 7.1 shows two important industrial processes that produce substances used as starting reactants, for many other reactions used to manufacture compounds found in agricultural materials and explosives.



**Fig. 7.1**

- (a) State the source of each gas used in the Haber Process.

hydrogen: .....

nitrogen: ..... [2]

- (b) State the conditions required for Haber process.

.....

..... [1]

- (c) Suggest why air is not used as a raw material in the Haber Process.

.....

..... [1]

- (d) When the products of Haber and Ostwald processes react together, a new compound is formed.

Suggest one use of the compound.

..... [1]

**[Total: 5]**

### Section B

Answer all **three** questions in this section.

The last question is in the form of an either/or and only one of the alternatives should be attempted.

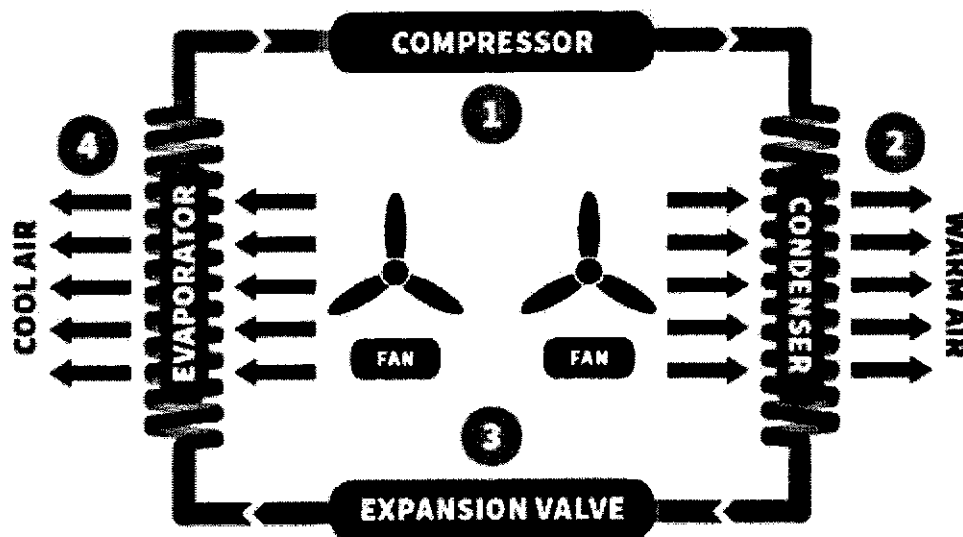
#### B8 How an air-conditioner system works in a home

##### Air-Conditioner

Air conditioners contain a refrigerant inside copper coils. As the refrigerant absorbs heat from the indoor air, it changes from a low-pressure gas to a high-pressure vapour in the compressor. The air conditioning components then send the refrigerant outside where a fan blows hot air over the coils and expels it to the exterior of the air-conditioner system.

The refrigerant is then expelled through expansion valves to be cooled down and turns back into a low-pressure gas. Another fan located inside the home blows air over the cool coils to distribute the resulting cold air throughout the home.

Fig. 8.1 shows how the refrigerant moves through the four components (compressor, condenser, expansion valve and evaporator) in an air conditioner system to produce cool air.



source: CEN.ACS.ORG Aug 14/21,2017

Fig. 8.1

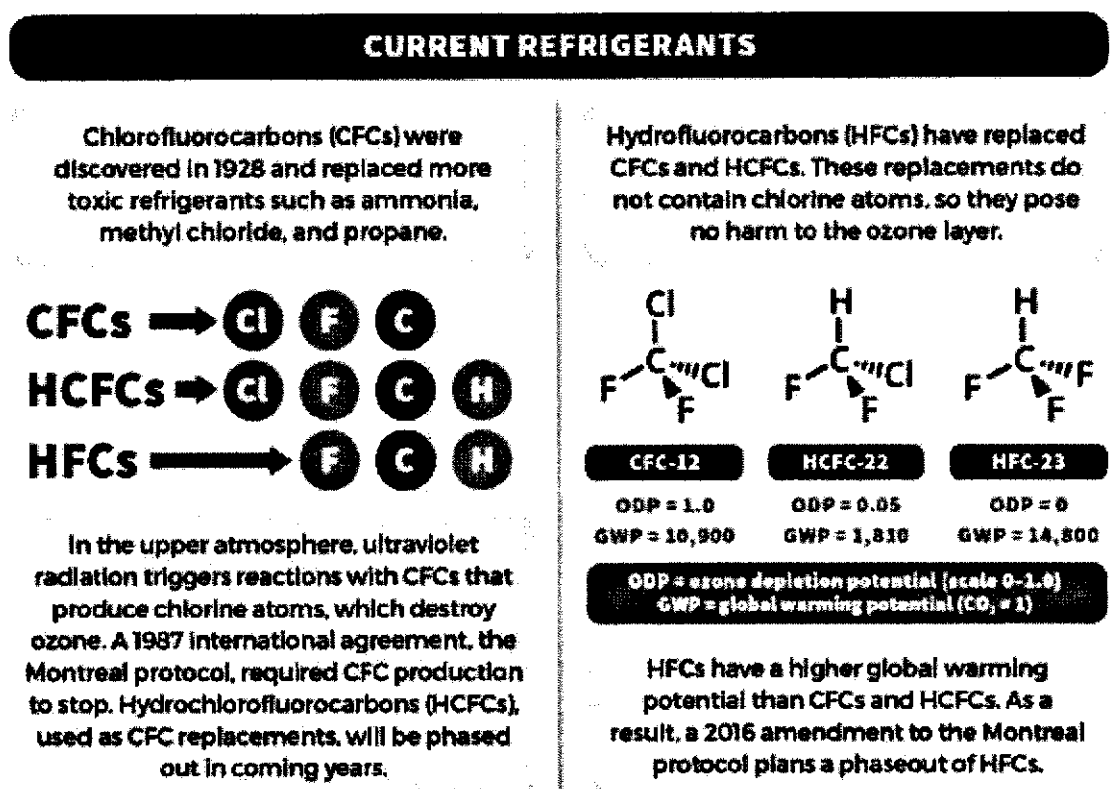
##### Refrigerants

A refrigerant is a compound typically found in either a liquid or gaseous state. It readily absorbs heat from the environment and can provide refrigeration or air conditioning when combined with other components such as compressors and evaporators.

Refrigerant play an important role in air conditioning, refrigeration, and freezing technology.

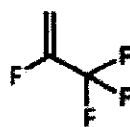
Despite their important role, refrigerants have been known to cause air pollution, and scientists have been working on greener options to replace refrigerants.

Fig. 8.2 shows the different refrigerants used and possible replacements.



### THE NEXT GENERATION

Hydrofluoroolefin (HFO) refrigerants could replace HFCs. They have a lower global warming potential, but they are also more expensive.



**HFO-1234yf**

ODP = 0  
GWP = 4



**CO<sub>2</sub>**

ODP = 0  
GWP = 1

Some car air-conditioning units use HFO-1234yf. But scientists are concerned that it is flammable, so some manufacturers are using carbon dioxide instead. Some experimental systems in development do not use any refrigerant gases to cool air.

source: CEN.ACS.ORG Aug 14/21,2017

Fig. 8.2

(a) With reference to Fig. 8.1, complete the table below.

component	process
compressor	Refrigerant vapour gets pressurized and increased in its temperature.
	The cold mist travel through coils. Air blown over the coils gets cooled. Heat from the air vaporise the refrigerant.
	The liquid refrigerant is forced through this component. This turns the liquid into a mist and rapidly cools it.
	The hot high-pressure vapour moves through coils and lose heat which gets vented outside by a fan.

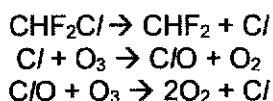
[2]

(b) Describe the change in movement and arrangement of refrigerant particles in the compressor.

.....  
 ..... [2]

(c) In the upper atmosphere, ultraviolet rays trigger the hydrochlorofluorocarbon, HCFC-22, found in refrigerants, to produce chlorine atoms

The chlorine atoms produced from HCFC-22 then destroy the ozone layer in several equations as shown below.



Use the above equations to write an overall equation for the reaction.

..... [1]

(d) HFC-23 is a powerful greenhouse gas that can be produced from methane.

(i) Draw a dot-and-cross diagram to show the bonding in HFC-23.  
 Show all electrons.

[2]



(ii) Describe how HFC-23 may be produced from methane.

.....  
.....  
.....

[2]

(e) During the 3rd International Symposium on Engineering and Earth Sciences held last year, a perfect refrigerant is defined to be environmentally friendly with zero Ozone Depletion Potential (ODP) and low Global Warming Potential (GWP). It should also be non-toxic and non-flammable.

Using data from Fig. 8.2, suggest a perfect refrigerant that can be used.

Explain your reasoning.

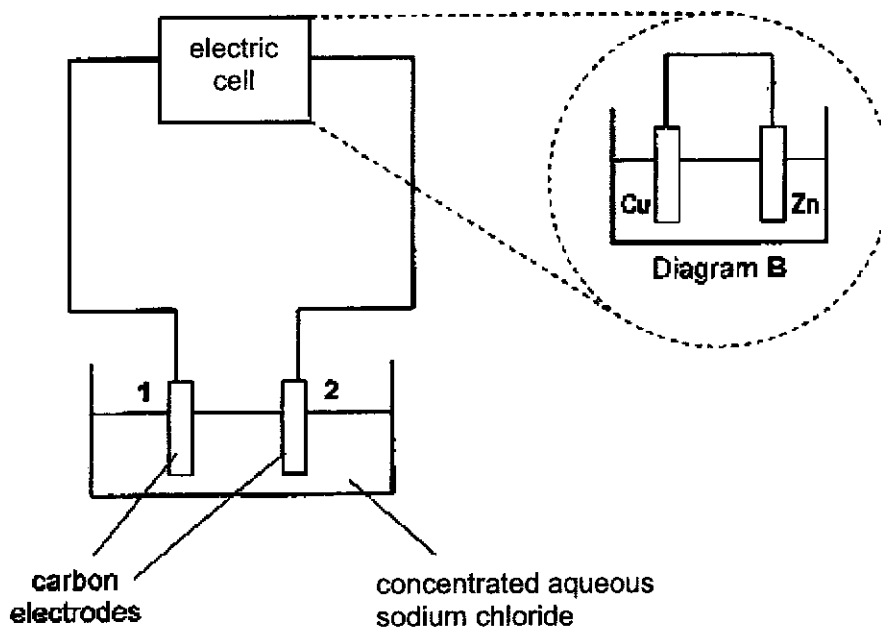
.....  
.....  
.....

[3]

[Total: 12]

- B9** Fig. 9.1 shows the experimental set-up for the electrolysis of concentrated aqueous sodium chloride. A few drops of Universal Indicator is added to the sodium chloride solution before the start of the experiment.

The actual electric cell used in this set-up is shown in Diagram B.



**Fig. 9.1**

- (a) Write the ionic half equations for the reaction that happens at cathode and anode during electrolysis of concentrated aqueous sodium chloride.

cathode:.....

anode:..... [2]

- (b) As the electrolysis proceeds, some changes are observed in the concentrated aqueous sodium chloride.

State the changes observed.

Explain why the changes were observed.

.....  
 .....  
 .....  
 ..... [2]

(c) (i) Show the direction of electron flow in Diagram B of Fig. 9.1. [1]

(ii) With reference to your answer in (c)(i), which of the carbon electrodes, 1 or 2, used in the experiment is the anode?

..... [1]

(d) The electrolyte in the electric cell as shown in Diagram B is aqueous copper(II) sulfate solution.

(i) Describe the observation at copper electrode in Diagram B.

.....  
..... [1]

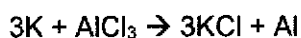
(ii) Suggest how the voltage for this electrolysis experiment can be increased.

.....  
..... [1]

[Total:8]

**EITHER**

**B10** In the early 19th century, a chemist, Frederich Wöhler, isolated aluminium metal by reacting potassium with aluminium chloride at high temperature as shown below.



- (a) Would the enthalpy change for the reaction be positive or negative?

Explain your answer.

.....  
 ..... [2]

- (b) Suggest why it was essential that Frederich Wöhler kept water away from his reacting chemicals.

.....  
 ..... [1]

- (c) Explain why he used the dangerous and expensive potassium to prepare aluminium rather than the safe and cheaper copper.

.....  
 .....  
 ..... [2]

- (d) A modern scientist recommended performing Frederich Wöhler's experiment in an atmosphere filled with inert argon.

Explain, with reference to electronic structure, why argon can provide an inert environment for the reaction.

.....  
 ..... [1]

- (e) After the successful isolation of aluminium by Frederick Wöhler, aluminium was widely used to manufacture other useful substances such as Magnox. Magnox is used in nuclear reactors.

The aluminium atoms in Magnox form a metallic structure with magnesium. Fig. 10.1 represents a simple illustration of the bonding in Magnox.

- (i) Use your knowledge of atomic structure and metallic bonding to label the boxes.

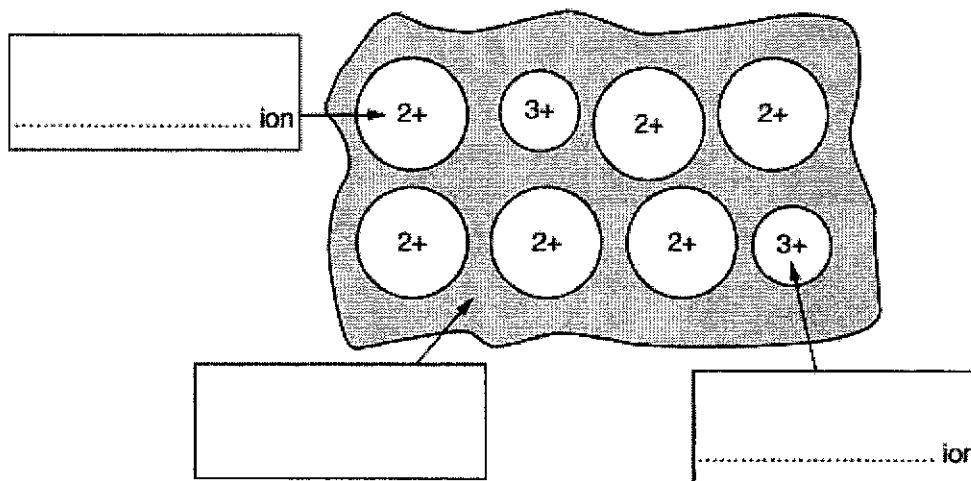


Fig. 10.1

- (ii) Explain why Magnox is harder than pure magnesium. [2]

.....  
 .....  
 .....

[2]

[Total: 10]

OR

**B10** A student carried out some experiments to investigate the reactivity of four metals, iron, X, calcium and Y.

Tables 10.1 and 10.2 show the results of the experiments.

Table 10.1

metal	iron	X	calcium	Y
observations when metal is added to aqueous iron(II) nitrate	no visible reaction	iron is deposited, no gas evolved	iron is deposited and a gas is evolved	no visible reaction

Table 10.2

metal oxides	Fe <sub>2</sub> O <sub>3</sub>	XO	CaO	Y <sub>2</sub> O
observation when metal oxide is heated strongly	no visible reaction	no visible reaction	no visible reaction	metal Y is formed

(a) What is the order of reactivity for the four metals, X, Y, iron, and calcium?

most reactive .....

.....

.....

least reactive .....

[1]

(b) Write an ionic equation for the reaction when metal X is added to aqueous iron(II) nitrate.

..... [1]

(c) When calcium is placed in a beaker of aqueous iron(II) nitrate, iron is deposited and a gas is evolved.

(i) Name the gas evolved in this reaction.

..... [1]

(ii) Explain how the gas named in (c)(i) is formed when calcium is added to aqueous iron(II) nitrate.

.....

..... [1]

(d) Suggest the identity of metal X and explain your answer.

identity: .....

explanation: .....

..... [3]

(e) Metal Y oxide has a formula  $Y_2O$ . It has another oxide with the formula of  $Y_4O_4$ . Its oxides are coloured. Y is often used as a catalyst in a few reactions.

(i) State the oxidation state of Y in  $Y_2O$ .

..... [1]

(ii) Suggest the identity of Y and explain your answer.

.....

.....

..... [2]

[Total: 10]

The Periodic Table of Elements

		Group																																																																																																																																																																																																																																																																																																																																																																																																																																																																													
I	II	III	IV	V	VI	VII	0																																																																																																																																																																																																																																																																																																																																																																																																																																																																								
3 Li lithium 7	4 Be beryllium 9	11 Na sodium 23	12 Mg magnesium 24	13 Al aluminium 27	14 Si silicon 28	15 P phosphorus 31	16 S sulfur 32	17 Cl chlorine 35.5	18 Ar argon 40	19 K potassium 39	20 Ca calcium 40	21 Sc scandium 45	22 Ti titanium 48	23 V vanadium 51	24 Cr chromium 52	25 Mn manganese 55	26 Fe iron 56	27 Co cobalt 59	28 Ni nickel 59	29 Cu copper 64	30 Zn zinc 65	31 Ga gallium 70	32 Ge germanium 73	33 As arsenic 75	34 Se selenium 79	35 Br bromine 80	36 Kr krypton 84	37 Rb rubidium 85	38 Sr strontium 88	39 Y yttrium 89	40 Zr zirconium 91	41 Nb niobium 93	42 Mo molybdenum 96	43 Tc technetium -	44 Ru ruthenium 101	45 Rh rhodium 103	46 Pd palladium 106	47 Ag silver 108	48 Cd cadmium 112	49 In indium 115	50 Sn tin 119	51 Sb antimony 122	52 Te tellurium 128	53 I iodine 127	54 Xe xenon 131	55 Cs caesium 133	56 Ba barium 137	57-71 lanthanoids	72 Hf hafnium 178	73 Ta tantalum 181	74 W tungsten 184	75 Re rhenium 186	76 Os osmium 190	77 Ir iridium 192	78 Pt platinum 195	79 Au gold 197	80 Hg mercury 201	81 Tl thallium 204	82 Pb lead 207	83 Bi bismuth 209	84 Po polonium -	85 At astatine -	86 Rn radon -	87 Fr francium -	88 Ra radium -	89-103 actinoids	104 Rf rutherfordium -	105 Db dubnium -	106 Sg seaborgium -	107 Bh bohrium -	108 Hs hassium -	109 Mt meitnerium -	110 Ds darmstadtium -	111 Rg rogersium -	112 Cn copernicium -	113 Nh nihonium -	114 Fl flerovium -	115 Lv livermorium -	116 Ts tennessium -	117 Og oganessonium -	118 Lr lawrencium -	119 Uu unbinilium -	120 Uub unbinilium -	121 Uut ununilium -	122 Uuq ununilium -	123 Uuq ununilium -	124 Uuq ununilium -	125 Uuq ununilium -	126 Uuq ununilium -	127 Uuq ununilium -	128 Uuq ununilium -	129 Uuq ununilium -	130 Uuq ununilium -	131 Uuq ununilium -	132 Uuq ununilium -	133 Uuq ununilium -	134 Uuq ununilium -	135 Uuq ununilium -	136 Uuq ununilium -	137 Uuq ununilium -	138 Uuq ununilium -	139 Uuq ununilium -	140 Uuq ununilium -	141 Uuq ununilium -	142 Uuq ununilium -	143 Uuq ununilium -	144 Uuq ununilium -	145 Uuq ununilium -	146 Uuq ununilium -	147 Uuq ununilium -	148 Uuq ununilium -	149 Uuq ununilium -	150 Uuq ununilium -	151 Uuq ununilium -	152 Uuq ununilium -	153 Uuq ununilium -	154 Uuq ununilium -	155 Uuq ununilium -	156 Uuq ununilium -	157 Uuq ununilium -	158 Uuq ununilium -	159 Uuq ununilium -	160 Uuq ununilium -	161 Uuq ununilium -	162 Uuq ununilium -	163 Uuq ununilium -	164 Uuq ununilium -	165 Uuq ununilium -	166 Uuq ununilium -	167 Uuq ununilium -	168 Uuq ununilium -	169 Uuq ununilium -	170 Uuq ununilium -	171 Uuq ununilium -	172 Uuq ununilium -	173 Uuq ununilium -	174 Uuq ununilium -	175 Uuq ununilium -	176 Uuq ununilium -	177 Uuq ununilium -	178 Uuq ununilium -	179 Uuq ununilium -	180 Uuq ununilium -	181 Uuq ununilium -	182 Uuq ununilium -	183 Uuq ununilium -	184 Uuq ununilium -	185 Uuq ununilium -	186 Uuq ununilium -	187 Uuq ununilium -	188 Uuq ununilium -	189 Uuq ununilium -	190 Uuq ununilium -	191 Uuq ununilium -	192 Uuq ununilium -	193 Uuq ununilium -	194 Uuq ununilium -	195 Uuq ununilium -	196 Uuq ununilium -	197 Uuq ununilium -	198 Uuq ununilium -	199 Uuq ununilium -	200 Uuq ununilium -	201 Uuq ununilium -	202 Uuq ununilium -	203 Uuq ununilium -	204 Uuq ununilium -	205 Uuq ununilium -	206 Uuq ununilium -	207 Uuq ununilium -	208 Uuq ununilium -	209 Uuq ununilium -	210 Uuq ununilium -	211 Uuq ununilium -	212 Uuq ununilium -	213 Uuq ununilium -	214 Uuq ununilium -	215 Uuq ununilium -	216 Uuq ununilium -	217 Uuq ununilium -	218 Uuq ununilium -	219 Uuq ununilium -	220 Uuq ununilium -	221 Uuq ununilium -	222 Uuq ununilium -	223 Uuq ununilium -	224 Uuq ununilium -	225 Uuq ununilium -	226 Uuq ununilium -	227 Uuq ununilium -	228 Uuq ununilium -	229 Uuq ununilium -	230 Uuq ununilium -	231 Uuq ununilium -	232 Uuq ununilium -	233 Uuq ununilium -	234 Uuq ununilium -	235 Uuq ununilium -	236 Uuq ununilium -	237 Uuq ununilium -	238 Uuq ununilium -	239 Uuq ununilium -	240 Uuq ununilium -	241 Uuq ununilium -	242 Uuq ununilium -	243 Uuq ununilium -	244 Uuq ununilium -	245 Uuq ununilium -	246 Uuq ununilium -	247 Uuq ununilium -	248 Uuq ununilium -	249 Uuq ununilium -	250 Uuq ununilium -	251 Uuq ununilium -	252 Uuq ununilium -	253 Uuq ununilium -	254 Uuq ununilium -	255 Uuq ununilium -	256 Uuq ununilium -	257 Uuq ununilium -	258 Uuq ununilium -	259 Uuq ununilium -	260 Uuq ununilium -	261 Uuq ununilium -	262 Uuq ununilium -	263 Uuq ununilium -	264 Uuq ununilium -	265 Uuq ununilium -	266 Uuq ununilium -	267 Uuq ununilium -	268 Uuq ununilium -	269 Uuq ununilium -	270 Uuq ununilium -	271 Uuq ununilium -	272 Uuq ununilium -	273 Uuq ununilium -	274 Uuq ununilium -	275 Uuq ununilium -	276 Uuq ununilium -	277 Uuq ununilium -	278 Uuq ununilium -	279 Uuq ununilium -	280 Uuq ununilium -	281 Uuq ununilium -	282 Uuq ununilium -	283 Uuq ununilium -	284 Uuq ununilium -	285 Uuq ununilium -	286 Uuq ununilium -	287 Uuq ununilium -	288 Uuq ununilium -	289 Uuq ununilium -	290 Uuq ununilium -	291 Uuq ununilium -	292 Uuq ununilium -	293 Uuq ununilium -	294 Uuq ununilium -	295 Uuq ununilium -	296 Uuq ununilium -	297 Uuq ununilium -	298 Uuq ununilium -	299 Uuq ununilium -	300 Uuq ununilium -	301 Uuq ununilium -	302 Uuq ununilium -	303 Uuq ununilium -	304 Uuq ununilium -	305 Uuq ununilium -	306 Uuq ununilium -	307 Uuq ununilium -	308 Uuq ununilium -	309 Uuq ununilium -	310 Uuq ununilium -	311 Uuq ununilium -	312 Uuq ununilium -	313 Uuq ununilium -	314 Uuq ununilium -	315 Uuq ununilium -	316 Uuq ununilium -	317 Uuq ununilium -	318 Uuq ununilium -	319 Uuq ununilium -	320 Uuq ununilium -	321 Uuq ununilium -	322 Uuq ununilium -	323 Uuq ununilium -	324 Uuq ununilium -	325 Uuq ununilium -	326 Uuq ununilium -	327 Uuq ununilium -	328 Uuq ununilium -	329 Uuq ununilium -	330 Uuq ununilium -	331 Uuq ununilium -	332 Uuq ununilium -	333 Uuq ununilium -	334 Uuq ununilium -	335 Uuq ununilium -	336 Uuq ununilium -	337 Uuq ununilium -	338 Uuq ununilium -	339 Uuq ununilium -	340 Uuq ununilium -	341 Uuq ununilium -	342 Uuq ununilium -	343 Uuq ununilium -	344 Uuq ununilium -	345 Uuq ununilium -	346 Uuq ununilium -	347 Uuq ununilium -	348 Uuq ununilium -	349 Uuq ununilium -	350 Uuq ununilium -	351 Uuq ununilium -	352 Uuq ununilium -	353 Uuq ununilium -	354 Uuq ununilium -	355 Uuq ununilium -	356 Uuq ununilium -	357 Uuq ununilium -	358 Uuq ununilium -	359 Uuq ununilium -	360 Uuq ununilium -	361 Uuq ununilium -	362 Uuq ununilium -	363 Uuq ununilium -	364 Uuq ununilium -	365 Uuq ununilium -	366 Uuq ununilium -	367 Uuq ununilium -	368 Uuq ununilium -	369 Uuq ununilium -	370 Uuq ununilium -	371 Uuq ununilium -	372 Uuq ununilium -	373 Uuq ununilium -	374 Uuq ununilium -	375 Uuq ununilium -	376 Uuq ununilium -	377 Uuq ununilium -	378 Uuq ununilium -	379 Uuq ununilium -	380 Uuq ununilium -	381 Uuq ununilium -	382 Uuq ununilium -	383 Uuq ununilium -	384 Uuq ununilium -	385 Uuq ununilium -	386 Uuq ununilium -	387 Uuq ununilium -	388 Uuq ununilium -	389 Uuq ununilium -	390 Uuq ununilium -	391 Uuq ununilium -	392 Uuq ununilium -	393 Uuq ununilium -	394 Uuq ununilium -	395 Uuq ununilium -	396 Uuq ununilium -	397 Uuq ununilium -	398 Uuq ununilium -	399 Uuq ununilium -	400 Uuq ununilium -	401 Uuq ununilium -	402 Uuq ununilium -	403 Uuq ununilium -	404 Uuq ununilium -	405 Uuq ununilium -	406 Uuq ununilium -	407 Uuq ununilium -	408 Uuq ununilium -	409 Uuq ununilium -	410 Uuq ununilium -	411 Uuq ununilium -	412 Uuq ununilium -	413 Uuq ununilium -	414 Uuq ununilium -	415 Uuq ununilium -	416 Uuq ununilium -	417 Uuq ununilium -	418 Uuq ununilium -	419 Uuq ununilium -	420 Uuq ununilium -	421 Uuq ununilium -	422 Uuq ununilium -	423 Uuq ununilium -	424 Uuq ununilium -	425 Uuq ununilium -	426 Uuq ununilium -	427 Uuq ununilium -	428 Uuq ununilium -	429 Uuq ununilium -	430 Uuq ununilium -	431 Uuq ununilium -	432 Uuq ununilium -	433 Uuq ununilium -	434 Uuq ununilium -	435 Uuq ununilium -	436 Uuq ununilium -	437 Uuq ununilium -	438 Uuq ununilium -	439 Uuq ununilium -	440 Uuq ununilium -	441 Uuq ununilium -	442 Uuq ununilium -	443 Uuq ununilium -	444 Uuq ununilium -	445 Uuq ununilium -	446 Uuq ununilium -	447 Uuq ununilium -	448 Uuq ununilium -	449 Uuq ununilium -	450 Uuq ununilium -	451 Uuq ununilium -	452 Uuq ununilium -	453 Uuq ununilium -	454 Uuq ununilium -	455 Uuq ununilium -	456 Uuq ununilium -	457 Uuq ununilium -	458 Uuq ununilium -	459 Uuq ununilium -	460 Uuq ununilium -	461 Uuq ununilium -	462 Uuq ununilium -	463 Uuq ununilium -	464 Uuq ununilium -	465 Uuq ununilium -	466 Uuq ununilium -	467 Uuq ununilium -	468 Uuq ununilium -	469 Uuq ununilium -	470 Uuq ununilium -	471 Uuq ununilium -	472 Uuq ununilium -	473 Uuq ununilium -	474 Uuq ununilium -	475 Uuq ununilium -	476 Uuq ununilium -	477 Uuq ununilium -	478 Uuq ununilium -	479 Uuq ununilium -	480 Uuq ununilium -	481 Uuq ununilium -	482 Uuq ununilium -	483 Uuq ununilium -	484 Uuq ununilium -	485 Uuq ununilium -	486 Uuq ununilium -	487 Uuq ununilium -	488 Uuq ununilium -	489 Uuq ununilium -	490 Uuq ununilium -	491 Uuq ununilium -	492 Uuq ununilium -	493 Uuq ununilium -	494 Uuq ununilium -	495 Uuq ununilium -	496 Uuq ununilium -	497 Uuq ununilium -	498 Uuq ununilium -	499 Uuq ununilium -	500 Uuq ununilium -

Key  
atomic number  
atomic symbol  
name  
relative atomic mass

lanthanoids

actinoids

The volume of one mole of any gas is 24 dm<sup>3</sup> at room temperature and pressure (r.t.p.)





**East Spring Secondary School  
Science Department  
Secondary 4E Pure Chemistry Marking Scheme  
Preliminary Examination 2021**

**Paper 1 - Multiple Choice Questions (40 x 1mark)**

1	B	11	A	21	C	31	B
2	C	12	C	22	A	32	A
3	B	13	B	23	C	33	C
4	D	14	B	24	C	34	C
5	A	15	C	25	D	35	C
6	D	16	C	26	A	36	C
7	B	17	C	27	-	37	C
8	D	18	D	28	C	38	-
9	C	19	D	29	D	39	B
10	A	20	-	30	A	40	C

**East Spring Secondary School**  
**Science Department**  
**Secondary 4E Pure Chemistry Marking Scheme**  
**Preliminary Examination 2021**

**A1** The following show eight chemical reactions.

- A:  $\text{CH}_4 + \text{O}_2 \rightarrow \text{CO}_2 + \text{H}_2\text{O}$   
 B:  $2\text{KI} + \text{Cl}_2 \rightarrow 2\text{KCl} + \text{I}_2$   
 C:  $2\text{HCl} + \text{CaO} \rightarrow \text{CaCl}_2 + \text{H}_2\text{O}$   
 D:  $2\text{Na} + \text{CuCl}_2 \rightarrow 2\text{NaCl} + \text{Cu}$   
 E:  $\text{Ba}(\text{NO}_3)_2 + \text{H}_2\text{SO}_4 \rightarrow \text{BaSO}_4 + 2\text{HNO}_3$   
 F:  $\text{C}_{20}\text{H}_{42} \rightarrow \text{C}_4\text{H}_{10} + \text{C}_{16}\text{H}_{32}$   
 G:  $\text{Fe}_2\text{O}_3 + 3\text{CO} \rightarrow 2\text{Fe} + 3\text{CO}_2$   
 H:  $\text{C}_2\text{H}_4 + \text{H}_2 \rightarrow \text{C}_2\text{H}_6$

Which reaction is

- (a) (i) Which equation shows neutralisation? C  
 (ii) Which equation shows addition? H  
 (iii) Which equation shows cracking? F  
 (iv) Which equation shows combustion? A  
 (v) Which equation shows displacement? B or D [1] each  
 (vi) Which equation shows precipitation? E

(b) Which states about transition metals are true and which are false?

Put a tick (✓) in one box in each row.

	true	false
They form coloured compound.	✓	
They only have one oxidation state.		✓
They have low melting and boiling point.		✓
They conduct electricity.	✓	

1c-3c [1]  
4c [2]

A2 The table show some potassium oxyhalide and the temperature they undergo thermal decomposition.

potassium oxyhalide	formula	thermal decomposition temperature <sup>1</sup>
potassium chlorate	K <sub>3</sub> ClO	above 400 °C
potassium bromate	K <sub>3</sub> BrO	at 370 °C
potassium iodate	<u>K<sub>3</sub>I<sub>2</sub>O</u>	above 100 °C

<sup>1</sup> source from <https://pubchem.ncbi.nlm.nih.gov/>

(a) (i) Complete the table above with the chemical formula of potassium iodate. [1]

(ii) What conclusion can you make from the table about the relationship between reactivity of halogen and the temperature the potassium oxyhalide decompose on heating?

The less reactive the halogen, the lower is the thermal decomposition temperature. [1]

accept any other reasonable conclusion

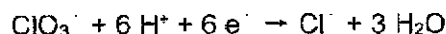
(b) An aqueous solution of potassium chlorate(V) is a good oxidising agent.

Describe a chemical test to confirm the oxidising properties of potassium chlorate(V) and state the result.

test: Add aqueous potassium iodide / KI to a solution to potassium chlorate(V).

result: colourless solution turns brown solution [2]

(c) When potassium chlorate(V) reacts as an oxidising agent, the chlorate(V) ions are reduced to chloride ions.



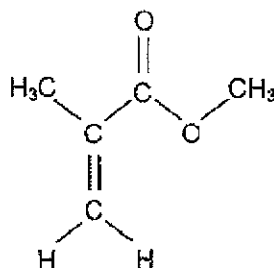
Explain, in terms of oxidation state, why the chlorate(V) ion, ClO<sub>3</sub><sup>-</sup> is reduced.

Chlorine in chlorate(V) is reduced because oxidation state of chlorine decrease [1]  
from +5 in ClO<sub>3</sub><sup>-</sup> to -1 in Cl<sup>-</sup>. [1]

[2]

**A3** Methyl methacrylate (MMA) is an ingredient used widely in the preparation of artificial acrylic nails. It is a volatile liquid that has been described as fragrant and fruity.

The structural formula of MMA is



(a) Name the functional group that is responsible for the fragrant and fruity smell.

ester

[1]

(b) Draw the full structural formulae of the two organic compounds that are used to make MMA.

[2]

(c) Methyl methacrylate can undergo addition polymerisation to form plastic, that has high optical clarity, high transparency, and UV stability.

(i) Describe two differences between addition polymerisation and condensation polymerisation.

addition polymerisation involves alkene / one functional group but condensation polymerisation involves 2 different functional groups [1]

addition polymerisation does not lose any atom or molecule during formation but condensation polymerisation will eliminate/lose a small molecule like water or hydrogen chloride for example. [1]

[2]

(ii) Name the polymer.

poly(methyl methacrylate) / polymethyl methacrylate [1]

[1]

(iii) Draw part of the structure of the polymer containing three repeating unit.

(iv) Suggest a use for this polymer.

contact lens, glaze, window, lamp fixture, shield, acrylic sheet, denture, aquarium,

[1]

accept any suitable answer in line with the properties and commercial usage [1]

(v) A sample of the polymer was analysed and found to have an average relative molecular mass of 25 200.

What is the number of monomer units that are used to form the polymer?

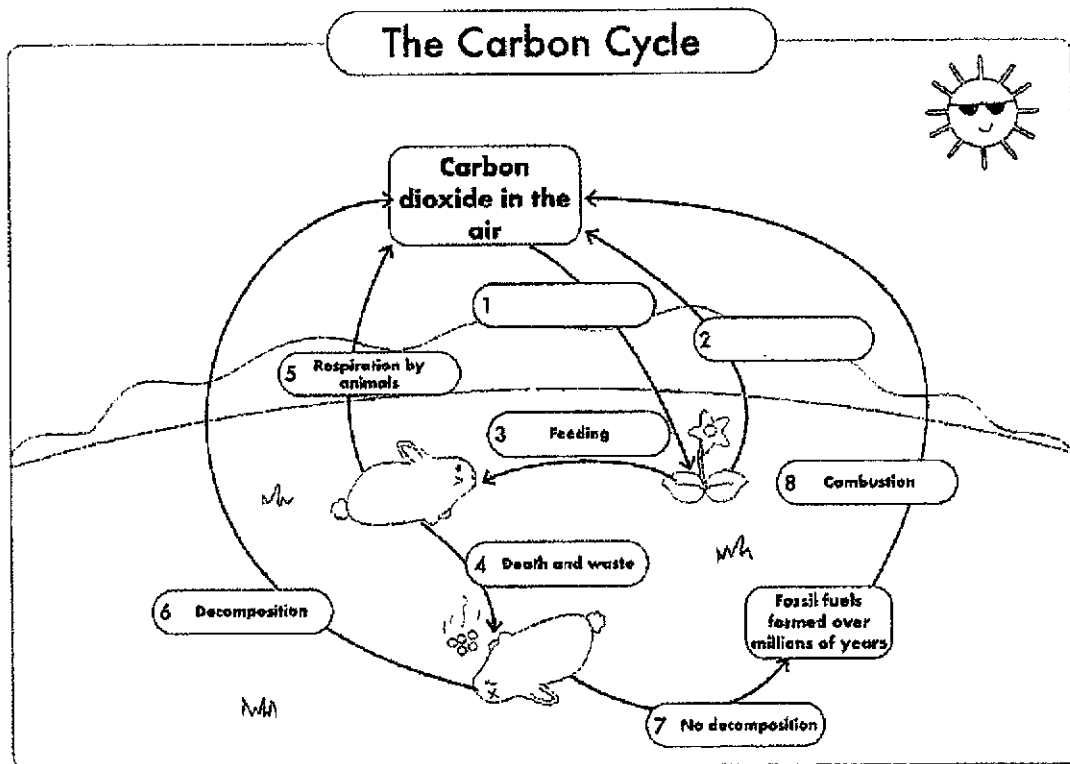
Mr of Methyl methacrylate:  $5(12) + 8 + 2(16) = 100$

number of monomer:  $25200/100 = 252$

[2]



[Total: 10]

A4 The diagram shows the possible processes in the carbon cycle.



- (a) (i) Complete the diagram above by stating the process 1 and process 2.  
 process 1: photosynthesis                      process 2: respiration                      [2]

- (ii) Describe, with the help of chemical equations, how carbon dioxide is regulated in the atmosphere by the carbon cycle by process 1 and process 2?



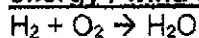
Process 2/ respiration increase / add the carbon dioxide in the atmosphere

Process 1 /photosynthesis remove carbon dioxide from the atmosphere

This cycle continues to regulate the amount of carbon dioxide in the atmosphere [3]

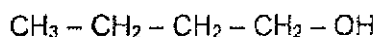
- (b) When fossil fuel undergo combustion, it increases the carbon dioxide in the air.

Name an alternative source of clean fuel to replace fossil fuel and support with reason.  
hydrogen / electricity / fuel cell / geothermal / hydroelectricity / nuclear energy / wind energy

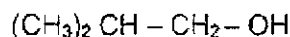


When hydrogen burns, it produces on water only, no carbon dioxide is produced so it is an alternative source of clean fuel. / Does not produce any harmful substance. [1]

A5 The following are 2 isomers of an alcohol, X and Y.



X



Y

(a) (iii) Define *isomer*.

Isomers have the same molecular formulae but different molecular structure

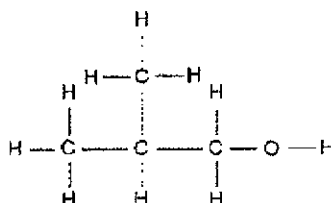
[1]

(iv) Name isomer X.

butanol

[1]

(b) Draw the full structural formula for isomer Y.



[1]

(c) Isomer X can be manufactured in the lab from an alkene.

(i) State the conditions needed to make isomer X.

High temperature, catalyst, high pressure / 600 °C, phosphoric acid 65 atm

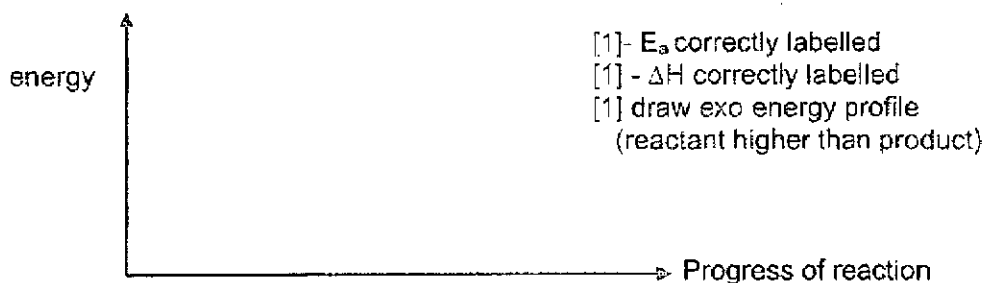
[2]

(ii) Name the alkene that can be used to make isomer X.

butene / methylpropene / 2 methylpropene

[1]

(iii) The reaction is exothermic. Draw a labelled energy profile diagram of this reaction, indicating the activation energy and enthalpy change.





- A6** To prepare a pure sample of magnesium nitrate salt, a student carried out reaction using magnesium carbonate powder and dilute nitric acid.



The student wants to obtain 20 g of the pure magnesium nitrate crystals,  $\text{Mg}(\text{NO}_3)_2 \cdot 6\text{H}_2\text{O}$ , at the end of the experiment.

- (a) The student needs to add excess magnesium carbonate to the dilute nitric acid. Explain how will doing so ensure the purity of the product obtained.

[1]

This is to ensure all the acid has reacted and not contaminate the salt crystal.

- (b) Briefly state the steps required to obtain pure magnesium nitrate crystals after adding excess magnesium carbonate to nitric acid.

Filter out the excess unreacted magnesium carbonate solid

Heat the filtrate to 1/3 its volume to obtain hot saturated solution

Cool the filtrate to allow magnesium nitrate crystals to form gradually

Filter to collect the salt crystals

Wash with a little distilled water

Dry between filter paper

(1c-2c [1], 3c-5c[2], 6c[3])

[3]

- (c) The percentage yield for this method of salt preparation is typically around 80%. Assuming the same percentage yield for this experiment, calculate,

- (i) the theoretical mass of magnesium nitrate crystal needed to yield 20 g of the crystal,

$$20 \text{ g} / 0.8 = \underline{25 \text{ g}} [1]$$

theoretical mass of magnesium nitrate crystal: ..... g

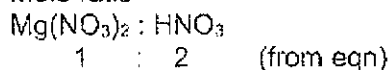
- (ii) the volume of 1M nitric acid needed to produce 20 g of pure magnesium nitrate crystal. ( $\text{Mg}(\text{NO}_3)_2 \cdot 6\text{H}_2\text{O}$ , 256)

to produce 20g we need theoretical mass of 25g to 80% yield.

we are to calculate based on theoretical mass 25g

1. convert to mole 25 g of  $\text{Mg}(\text{NO}_3)_2 \cdot 6\text{H}_2\text{O}$  to mole:  $25 / (24 + 2\{14 + 3(16)\} + 6(18)) = 25 / 256 = \underline{0.0977 \text{ mole}} [1]$

2. Mole ratio



$$0.0977 : (0.0977 \times 2 = \underline{0.1954 \text{ mol}}) [1]$$

[4]

3. convert to the quantity needed (vol of acid)

mole/ vol = concentration

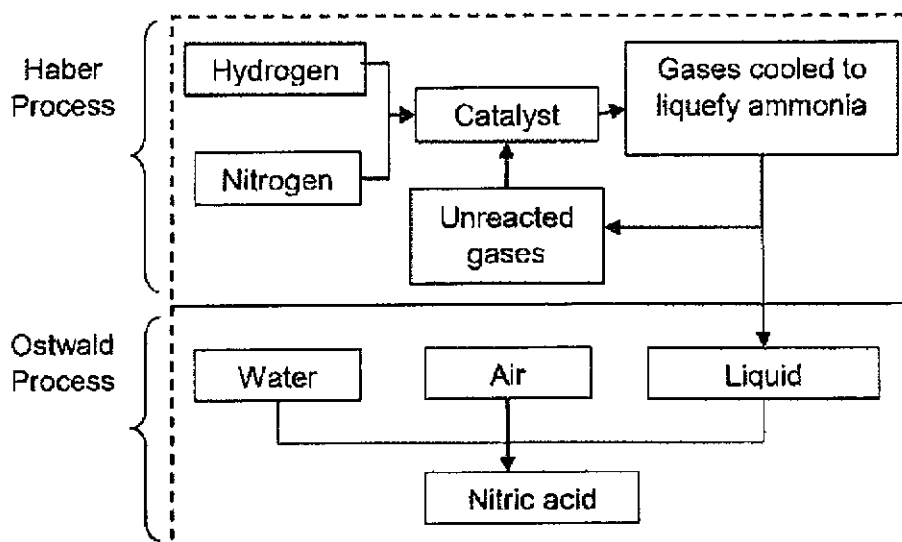
mole/ conc = vol

$$0.1954 / 1\text{M} = 0.1954 \text{ dm}^3$$

$$\approx \underline{0.195 \text{ dm}^3 (3 \text{ dp})} [1]$$

Volume of nitric acid needed= .....  $\text{cm}^3$

- A7 The diagram below shows two important industrial processes producing compounds for many other industries to manufacture compounds such as plastics, agricultural materials and explosives.



- (a) State the source for each gas used for Haber Process.

hydrogen: cracking of long chain hydrocarbon [1]

nitrogen: fractional distillation of liquefied air[1] [2]

- (b) State the conditions required for Haber process.

250 atm, 400- 450 °C, iron catalyst [1]

- (c) Suggest why air is not used as a raw material in the Haber Process.

oxygen in the air will react with the hydrogen /and nitrogen to form other products [1]  
/ Air consists of impurities that will contaminate the catalyst / product.

- (d) When the products of Haber and Ostwald processes reacted together, a new compound is formed.

Suggest one use of the compound.

Fertiliser [1]

accept any other suitable answers: herbicides, and insecticides; and in the manufacture of nitrous oxide, an absorbent for nitrogen oxides, an ingredient of freezing mixtures, explosives, an oxidizer in rocket propellants, and a nutrient for yeast and antibiotics.

B8 (a) With reference to Fig 8.1, complete the table below.

components	process
compressor	Refrigerant vapour gets pressurized and increased in its temperature.
<u>evaporator</u>	The cold mist travel through coils. Air blown over the coils gets cooled. Heat from the air vaporise the refrigerant.
<u>expansion valves</u>	The liquid refrigerant is forced through component. This turns the liquid into a mist and rapid cools it.
<u>condenser</u>	The hot high-pressure vapour moves through coils and lose heat which gets vented outside by fan.

[2]

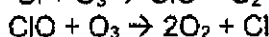
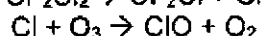
(b) Describe the change in movement and arrangement of refrigerant particles in the compressor.

pressurized: particles become closer together [1]

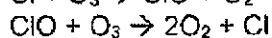
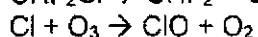
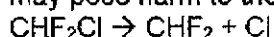
increase in temperature: particles moving at higher speed[1]

[2]

(c) In the upper atmosphere, the ultraviolet trigger chlorofluorocarbon, CFC, to produce chlorine atom and destroy ozone in several steps:



Suggest, with the help of an overall equation, how hydrochlorofluorocarbon, HCFC-22, may pose harm to the ozone layer in the upper atmosphere.



[1]

(d) Powerful greenhouse gas, HFC-23, can be produced from methane.

(i) Draw a dot-and-cross diagram of HFC-23, show all the electron arrangements.

[1] correct pair of electron shared

[1] correction electronic configuration

[2]

(ii) Describe how HFC-23 may be manufacture from methane. [2]

by substitution [1] of fluorine gas under UV light [1]

(e) During 3rd International Symposium on Engineering and Earth Sciences held last year, a perfect refrigerant is defined to be environment friendly with zero ODP (Ozone Depletion Potential) and low GWP (Global Warming Potential), it should be safe (non-toxic, non-flammable).

Suggest a perfect refrigerant and support with data in Fig 8.2.

carbon dioxide [1]

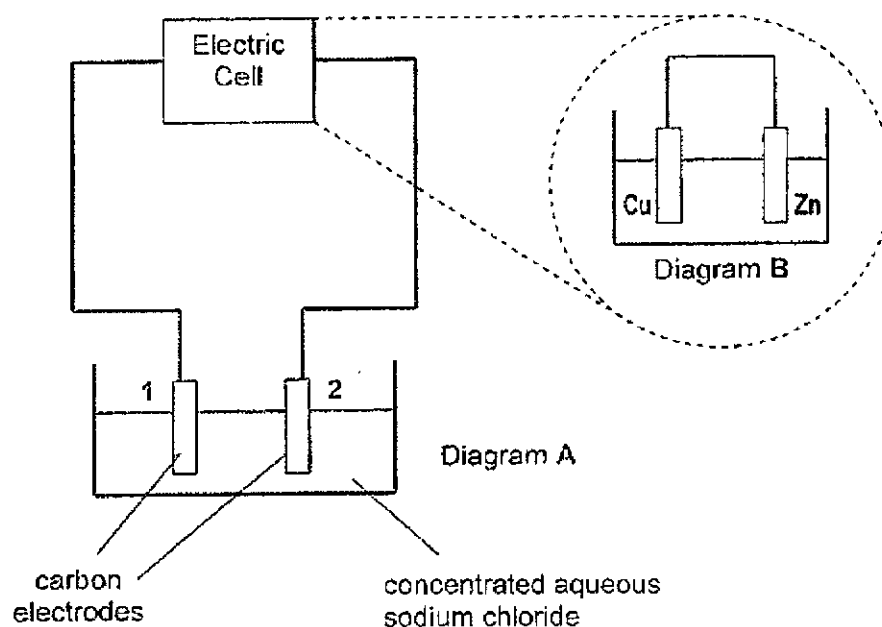
It has zero ODP, low GWP of 1 and it is non-toxic and non-flammable.

[1] describe

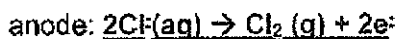
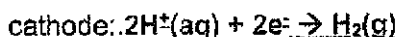
[1] quote data

[3]

**B9** Diagram A below shows the electrolysis of concentrated aqueous sodium chloride while Diagram B shows the actual electric cell used in the electrolysis. A few drops of Universal Indicator is added to the sodium chloride solution before the start of the experiment.



(a) Write the half-equation for reaction at diagram A:



[2]

(b) State and explain the observations made on the electrolyte in diagram A as the experiment proceeds.

Observation: electrolyte will be turn from green to blue/indigo/violet solution [1]  
 reason: As more hydrogen ions and chloride ions are preferential discharge, more sodium and hydroxide ions are left behind, electrolyte become more alkaline [1]. so Universal indicator will turn blue

[2]

(c) (i) Draw on Fig 9.1, the direction of electron flow in diagram B. (from Zn to Cu)  
Accept if student draws on Fig. 9.1, but must be from cathode 1 to 2

(ii) Hence, which electrode in diagram A is anode?

[2]

Electrode 1

(d) The electrolyte in diagram A is aqueous copper(II) sulfate solution.

(iii) Describe the observation at copper electrode in diagram B.

increase in mass / size / reddish brown solid deposition

(iv) Suggest how to increase the voltage in diagram A.

change Zn to Mg

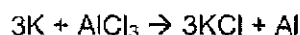
Accept any suitable answers: change Cu to silver, have more electric cell

[2]

[Total:8]

## EITHER

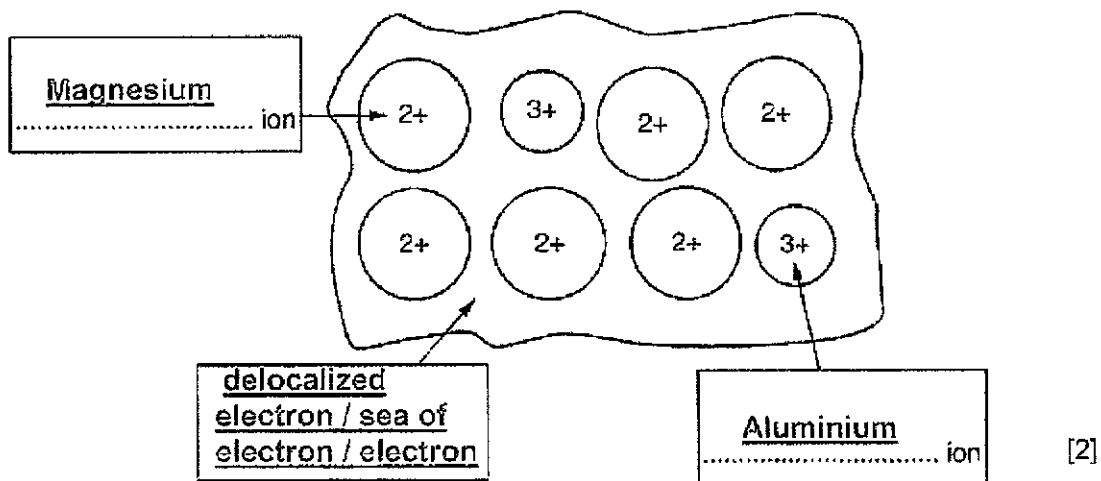
**B10** In the early 19th century, a chemist, Frederick Wöhler, isolated aluminium metal by reacting potassium with aluminium chloride at high temperature.



- (a) (i) Would the enthalpy change for the reaction be positive or negative?  
positive[1] [2]
- (ii) Explain your answer in part (a) (i).  
Heat is supplied at high temperature suggest the reaction absorb energy [1]  
from the surrounding, so it is endothermic reaction with positive enthalpy change
- (b) Suggest why it was essential that Frederick Wöhler kept water away from his reacting chemicals.  
water will react with potassium vigorously producing a lot of heat. [1]
- (c) Explain why he used the dangerous and expensive potassium to prepare aluminium rather than the safe and cheaper copper.  
copper may be cheap and safe but it not more reactive than aluminium in the metal reactivity series, it is unable to displace / reduce aluminium from its chloride.[1]  
Potassium is more reactive than aluminium, it can displace / reduce the less reactive [2]  
aluminium from its chloride. [1]  
Potassium is more reactive than copper1 [1]
- (d) A modern scientist recommended performing Frederick Wöhler's experiment in an atmosphere filled with inert argon.  
Explain, in terms of electronic structure, why argon can provide an inert environment for the reaction.  
Argon has full outermost shell/ 2.8.8. It is unreactive it will not react with the potassium. [1]  
(need to refer to electronic structure and state it is unreactive)

(f) The aluminium atoms in Magnox form a metallic structure with magnesium. The figure below represents a simple illustration of the bonding in Magnox.

(i) Use your knowledge of atomic structure and metallic bonding to label the boxes.



(ii) Explain why Magnox is harder than pure magnesium.

There is Aluminium atom of different size disrupt the regular arrangement of pure magnesium metal atoms, preventing the layers of magnesium atoms from sliding past each other easily when force is applied.

1c-  
3c  
[1]  
4c  
[2]

OR

B10 The results of an experiment with iron, magnesium and two other metals X and Y and their oxides are summarised in the following tables.

	iron	X	calcium	Y
action of metal on aqueous iron(II) nitrate	no visible reaction	iron is deposited.	iron is deposited and a gas is evolved	no visible reaction

	Fe <sub>2</sub> O <sub>3</sub>	XO	CaO	Y <sub>2</sub> O
action of heat on metal oxide	no visible reaction	no visible reaction	no visible reaction	metal Y is formed

(a) What is the order of reactivity for the four metals, X, Y, iron, and calcium?

most reactive      Calcium

X

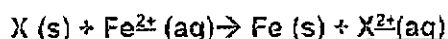
Iron

least reactive

Y

[1]

(b) Write an ionic equation, with state symbol, for the reaction when X is placed in aqueous iron(II) nitrate.



corr  
eqn [1]

(c) When calcium is placed in a beaker of aqueous iron(II) nitrate, iron is deposited and a gas is evolved.

(i) Name this gas.

Hydrogen

[1]

(ii) Explain how the gas is formed

Reactive calcium react with the water in the aqueous salt solution to form hydrogen gas

[1]

(d) Suggest the identity of metal X and explain your answer.

Zinc.

[1]

It is less reactive than calcium, and more reactive than iron.

The charge of the metal ion is 2+.

3c - 2  
1-2c - 1

No gas is evolved when reacted with water, so cannot be magnesium / must be less reactive than magnesium.



(e) Metal Y oxide has a formula  $Y_2O$ . It has another oxide with the formula of  $Y_4O_4$ . Its oxides are coloured. Y is often used as a catalyst in a few reactions.

(i) State the oxidation state of Y in  $Y_2O$ .

+1

[1]

(ii) Suggest the identity of Y and explain your answer.

Y can be silver [1] because Y does not displace iron(II) nitrate so lower reactivity than iron / metal oxide decompose to forms metal on heating suggest it is silver / from the formula  $Y_2O$  suggest metal Y has a +1 charge

Accept any reasonable explanation that include low reactivity metal and + 1 charge

