

Name:	Index No.:	Class:
-------	------------	--------

## PRESBYTERIAN HIGH SCHOOL



### ADDITIONAL MATHEMATICS Paper 1

4049/01

17 August 2022

Wednesday

2 hours 15 min

PRESBYTERIAN HIGH SCHOOL PRESBYTERIAN HIGH SCHOOL PRESBYTERIAN HIGH SCHOOL PRESBYTERIAN HIGH SCHOOL  
 PRESBYTERIAN HIGH SCHOOL PRESBYTERIAN HIGH SCHOOL PRESBYTERIAN HIGH SCHOOL PRESBYTERIAN HIGH SCHOOL  
 PRESBYTERIAN HIGH SCHOOL PRESBYTERIAN HIGH SCHOOL PRESBYTERIAN HIGH SCHOOL PRESBYTERIAN HIGH SCHOOL  
 PRESBYTERIAN HIGH SCHOOL PRESBYTERIAN HIGH SCHOOL PRESBYTERIAN HIGH SCHOOL PRESBYTERIAN HIGH SCHOOL  
 PRESBYTERIAN HIGH SCHOOL PRESBYTERIAN HIGH SCHOOL PRESBYTERIAN HIGH SCHOOL PRESBYTERIAN HIGH SCHOOL

### 2022 SECONDARY FOUR EXPRESS PRELIMINARY EXAMINATIONS

#### INSTRUCTIONS TO CANDIDATES

DO NOT OPEN THIS QUESTION PAPER UNTIL YOU ARE TOLD TO DO SO.

Write your name, index number and class on the spaces provided above.

Write in dark blue or black pen. You may use a pencil for any diagrams or graphs.

Do not use staples, paper clips, highlighters, glue or correction fluid.

Answer all questions.

Write your answers on the spaces provided below each question.

Give non exact numerical answers correct to 3 significant figures or 1 decimal place in the case of angles in degrees, unless a different level of accuracy is specified in the question.

The use of an approved scientific calculator is expected, where appropriate.

You are reminded of the need for clear presentation in your answers.

Omission of essential working will result in loss of marks.

The number of marks is given in brackets [ ] at the end of each question or part question.

The total number of marks for this paper is 90.

<i>For Examiner's Use</i>															
Qn	1	2	3	4	5	6	7	8	9	10	11	12	13	14	Marks Deducted
Marks															
<b>Category</b>	Accuracy	Units	Symbols	Others											
<b>Question No.</b>															

<b>Total Marks</b>
90

Setter: Mr Tan Lip Sing  
 Vetter: Mr Gregory Quek

This question paper consists of 23 printed pages and 1 blank pages.



**Mathematical Formulae****1. ALGEBRA****Quadratic Equation**

For the equation  $ax^2 + bx + c = 0$ ,

$$x = \frac{-b \pm \sqrt{b^2 - 4ac}}{2a}$$

**Binomial Theorem**

$$(a + b)^n = a^n + \binom{n}{1} a^{n-1} b + \binom{n}{2} a^{n-2} b^2 + \dots + \binom{n}{r} a^{n-r} b^r + \dots + b^n,$$

where  $n$  is a positive integer and  $\binom{n}{r} = \frac{n!}{(n-r)! r!} = \frac{n(n-1)\dots(n-r+1)}{r!}$

**2. TRIGONOMETRY****Identities**

$$\sin^2 A + \cos^2 A = 1.$$

$$\sec^2 A = 1 + \tan^2 A.$$

$$\operatorname{cosec}^2 A = 1 + \cot^2 A$$

$$\sin(A \pm B) = \sin A \cos B \pm \cos A \sin B$$

$$\cos(A \pm B) = \cos A \cos B \mp \sin A \sin B$$

$$\tan(A \pm B) = \frac{\tan A \pm \tan B}{1 \mp \tan A \tan B}$$

$$\sin 2A = 2 \sin A \cos A$$

$$\cos 2A = \cos^2 A - \sin^2 A = 2 \cos^2 A - 1 = 1 - 2 \sin^2 A$$

$$\tan 2A = \frac{2 \tan A}{1 - \tan^2 A}$$

**Formulae for  $\Delta ABC$** 

$$\frac{a}{\sin A} = \frac{b}{\sin B} = \frac{c}{\sin C}.$$

$$a^2 = b^2 + c^2 - 2bc \cos A.$$

$$\Delta = \frac{1}{2} ab \sin C.$$

**Answer all questions in the space provided.**

- 1 The area of a triangle is given as  $1+2\sqrt{5}$  cm<sup>2</sup>. The base of the triangle is given as  $3-\sqrt{5}$  cm. Without using a calculator, express the height of the triangle, in cm, in the form  $a+b\sqrt{5}$ , where  $a$  and  $b$  are rational numbers. [3]

- 2 Find the  $y$ -coordinates of the points for which the line  $x - 2y = 3$  meets the curve  $xy + 6 = 2x$ .  
[3]

5

- 3 Express  $-x^2 + 8x + 5$  in the form  $a(x+b)^2 + c$  and hence state the coordinates of the turning point of the curve  $y = -x^2 + 8x + 5$ . [4]

- 4 Integrate  $\frac{4}{2-5x} + \frac{2}{x^3} + e^{4x}$  with respect to  $x$ . [4]

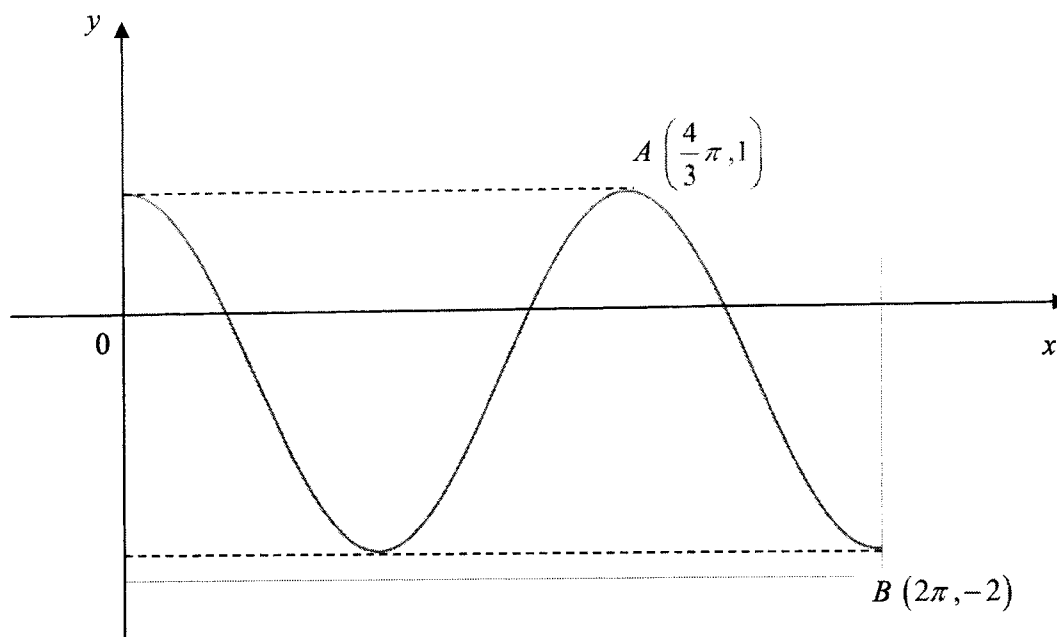
- 5 Express  $\frac{9x^2 - 34x + 27}{(x-1)(x-2)^2}$  as the sum of three partial fractions. [6]



- 6 (a) The expression  $ax^3 + 13x^2 + bx - 5$  is exactly divisible by  $x - 1$  but gives a remainder of 49 when divided by  $x - 2$ . Find the value of  $a$  and of  $b$ . [4]

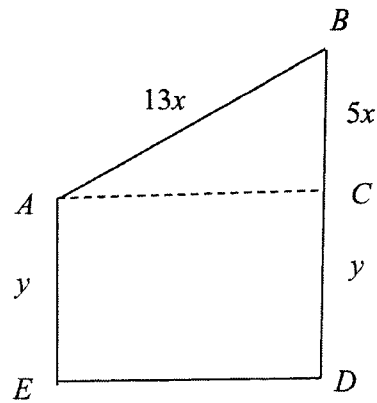
- (b) The cubic polynomial  $f(x)$  is such that the coefficient of  $x^3$  is  $-2$  and the roots of the equation  $f(x) = 0$  are  $-1$ ,  $2$  and  $k$ . Given that  $f(x)$  has a remainder of 80 when divided by  $x + 3$ , find the value of  $k$ , given that  $k$  is a positive number. [3]

- 7 The diagram shows the graph of the curve  $y = a \cos bx + c$  for  $0 \leq x \leq 2\pi$ . The curve has a maximum point at  $A$  and a minimum point at  $B$ . The coordinates of  $A = \left(\frac{4}{3}\pi, 1\right)$  and  $B = (2\pi, -2)$ .



- (a) State the period of the curve. [1]
- (b) Find the value of  $a$ ,  $b$  and  $c$ . [3]
- (c) Find the range of values of  $k$  for which  $a \cos bx + c = k$  has three solutions. [2]

8



A piece of wire,  $l$  cm long, is bent to form the shape  $ABCDE$  as shown in the diagram.  $ACDE$  is a rectangle with  $AE = y$  cm and  $\triangle ABC$  is a right-angled triangle with  $AB = 13x$  cm and  $BC = 5x$  cm.

(a) Express  $l$  in terms of  $x$  and  $y$ .

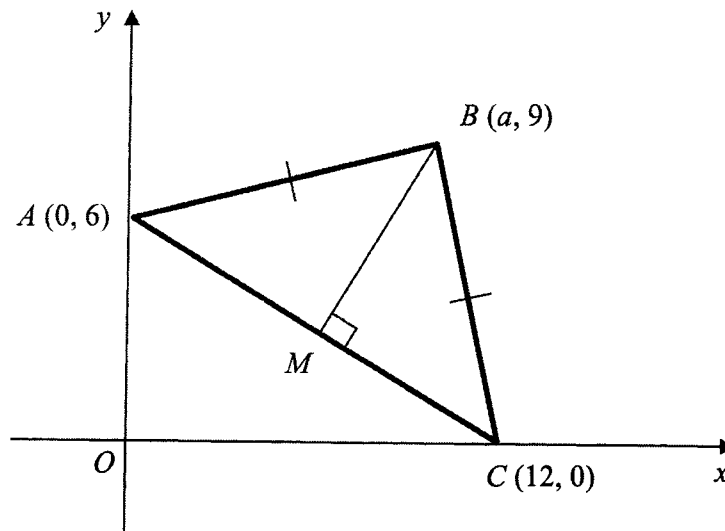
[1]

(b) Given that the area enclosed is  $96 \text{ cm}^2$ , show that  $l = 25x + \frac{16}{x}$ .

[3]

- (c) Find the value of  $x$  for which  $l$  has a stationary value and determine the nature of this stationary value. [3]

9



The diagram shows a triangle  $ABC$ , where  $A$  is  $(0, 6)$ ,  $B$  is  $(a, 9)$  and  $C$  is  $(12, 0)$ .  $AB$  is equal to  $BC$  and  $M$  is the midpoint of  $AC$ .

(a) Find the coordinates of  $M$ . [1]

(b) Find the equation of the perpendicular bisector of  $AC$ . [4]

(c) Find the value of  $a$ .

[2]

(d) Calculate the area of the triangle  $ABC$ .

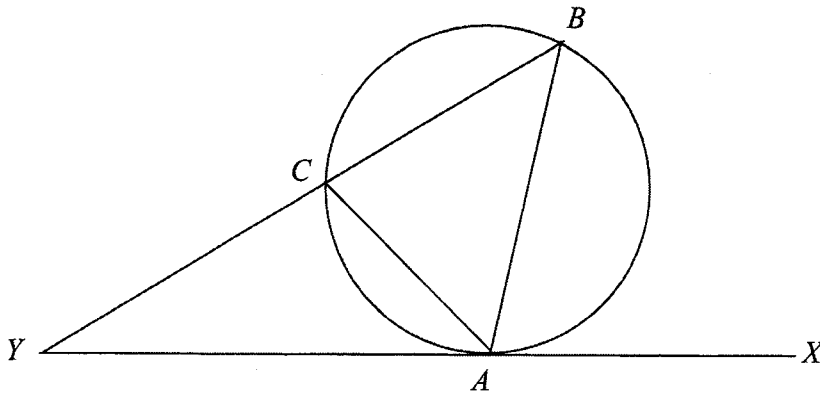
[2]

- 10 (a) Prove the identity  $\frac{1 - \cos 2A}{1 + \cos 2A} = \tan^2 A$  . [3]

(b) Hence solve the equation  $\frac{1 - \cos 2A}{1 + \cos 2A} = 2 \tan A$  for  $0^\circ < A < 360^\circ$ . [4]



11



The diagram shows a triangle  $ABC$  inscribed in a circle.  $XY$  is a tangent to the circle at point  $A$  and  $AC$  bisects angle  $BAY$ .

(a) Prove that triangle  $ABC$  is isosceles.

[2]

(b) Prove that triangle  $AYC$  is similar to triangle  $BYA$ .

[3]

(c) Hence, show that  $AY^2 = CY \times BY$

[2]

- 12 (a) Given that  $3^{x+1} \times 2^{2x+1} = 2^{x+2}$ , evaluate  $6^x$ . [4]

(b) Express  $y$  in terms of  $x$  if  $\log_2 y = \log_8 x - \log_2 4$  .

[4]

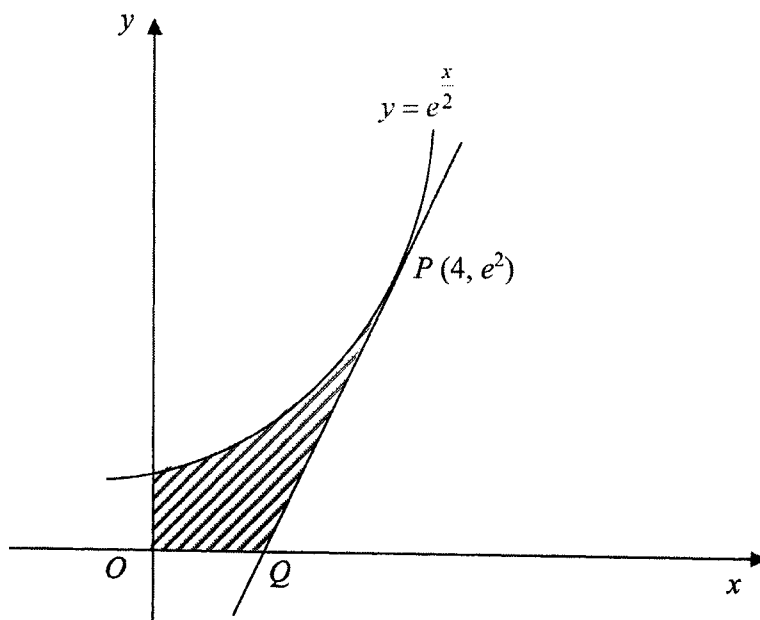
13 A curve has the equation  $y = (x-3)\sqrt{2x+3}$ , where  $x > -\frac{3}{2}$ .

(a) Show that  $\frac{dy}{dx}$  can be expressed in the form  $\frac{kx}{\sqrt{2x+3}}$  and state the value of  $k$ . [4]

(b) Find the equation of the tangent when  $x = 11$ . [3]

(c) Find the rate of change of  $x$  at the instant when  $x = 11$ , given that  $y$  is increasing at a rate of 5 units per second at this instant. [2]

14



The diagram shows part of the curve  $y = e^{\frac{x}{2}}$ . The tangent to the curve at  $P(4, e^2)$  meets the  $x$ -axis at  $Q$ .

(a) Find the coordinates of  $Q$ .

[5]

Continuation of working space for question 14a.

- (b) Find the area of the shaded region bounded by the curve, the coordinate axes and the tangent to the curve at  $P$ , leaving your answer in terms of  $e$ . [5]



**BLANK PAGE**

**END OF PAPER**

Name:	Index No.:	Class:
-------	------------	--------

## PRESBYTERIAN HIGH SCHOOL



### ADDITIONAL MATHEMATICS Paper 2

4049/02

18 August 2022

Thursday

2 hours 15 minutes

*PRESBYTERIAN HIGH SCHOOL PRESBYTERIAN HIGH SCHOOL PRESBYTERIAN HIGH SCHOOL PRESBYTERIAN HIGH SCHOOL  
PRESBYTERIAN HIGH SCHOOL PRESBYTERIAN HIGH SCHOOL PRESBYTERIAN HIGH SCHOOL PRESBYTERIAN HIGH SCHOOL  
PRESBYTERIAN HIGH SCHOOL PRESBYTERIAN HIGH SCHOOL PRESBYTERIAN HIGH SCHOOL PRESBYTERIAN HIGH SCHOOL  
PRESBYTERIAN HIGH SCHOOL PRESBYTERIAN HIGH SCHOOL PRESBYTERIAN HIGH SCHOOL PRESBYTERIAN HIGH SCHOOL  
PRESBYTERIAN HIGH SCHOOL PRESBYTERIAN HIGH SCHOOL PRESBYTERIAN HIGH SCHOOL PRESBYTERIAN HIGH SCHOOL*

### 2022 SECONDARY FOUR EXPRESS / FIVE NORMAL PRELIMINARY EXAMINATIONS

#### INSTRUCTIONS TO CANDIDATES

DO NOT OPEN THIS QUESTION PAPER UNTIL YOU ARE TOLD TO DO SO.

Write your name, index number and class in the spaces at the top of this page.

Write in dark blue or black pen.

You may use a pencil for any diagrams or graphs.

Do not use staples, paper clips, highlighters, glue or correction fluid.

Answer **all** the questions.

Give non-exact numerical answers correct to 3 significant figures, or 1 decimal place in the case of angles in degrees, unless a different level of accuracy is specified in the question.

The use of an approved scientific calculator is expected, where appropriate.

You are reminded of the need for clear presentation in your answers.

The number of marks is given in brackets [ ] at the end of each question or part question.

The total number of marks for this paper is 90.

Qn	1	2	3	4	5	6	7	8	9	10	Marks Deducted
Marks											

Category	Accuracy	Units	Symbols	Others
Question No.				

<b>Total Marks</b>
90

Setter: Mr Gregory Quek

Vetter: Mr Tan Lip Sing

This question paper consists of **19** printed pages (including this cover page) and **1** blank page.

**Mathematical Formulae****1. ALGEBRA****Quadratic Equation**

For the equation  $ax^2 + bx + c = 0$ ,

$$x = \frac{-b \pm \sqrt{b^2 - 4ac}}{2a}.$$

**Binomial Theorem**

$$(a+b)^n = a^n + \binom{n}{1} a^{n-1} b + \binom{n}{2} a^{n-2} b^2 + \dots + \binom{n}{r} a^{n-r} b^r + \dots + b^n,$$

where  $n$  is a positive integer and  $\binom{n}{r} = \frac{n!}{(n-r)! r!} = \frac{n(n-1)\dots(n-r+1)}{r!}$

**2. TRIGONOMETRY****Identities**

$$\sin^2 A + \cos^2 A = 1.$$

$$\sec^2 A = 1 + \tan^2 A.$$

$$\operatorname{cosec}^2 A = 1 + \cot^2 A$$

$$\sin(A \pm B) = \sin A \cos B \pm \cos A \sin B$$

$$\cos(A \pm B) = \cos A \cos B \mp \sin A \sin B$$

$$\tan(A \pm B) = \frac{\tan A \pm \tan B}{1 \mp \tan A \tan B}$$

$$\sin 2A = 2 \sin A \cos A$$

$$\cos 2A = \cos^2 A - \sin^2 A = 2 \cos^2 A - 1 = 1 - 2 \sin^2 A$$

$$\tan 2A = \frac{2 \tan A}{1 - \tan^2 A}$$

**Formulae for  $\Delta ABC$** 

$$\frac{a}{\sin A} = \frac{b}{\sin B} = \frac{c}{\sin C}.$$

$$a^2 = b^2 + c^2 - 2bc \cos A.$$

$$\Delta = \frac{1}{2} ab \sin C.$$

**Answer all the questions in the spaces provided.**

- 1** Show that the equation  $2e^x + 9 = 18e^{-x}$  has only one solution and find its value correct to 2 significant figures. [5]

2 A polynomial  $f(x)$  is defined as  $x^3 - 13x^2 + 49x - 57$ .

(a) Show that  $x = 3$  is a root of the equation  $f(x) = 0$ . [1]

(b) It is given that the two other roots of  $f(x) = 0$  are  $x_1 = a + b\sqrt{c}$  and  $x_2 = a - b\sqrt{c}$ , where  $a$ ,  $b$  and  $c$  are positive integers. Find the exact values of  $x_1$  and  $x_2$ . [4]

(c) Express  $x_1^3 - x_2^3$  in the form  $d\sqrt{c}$ , where  $d$  is a positive integer. [3]

- 3 The equation of a curve is  $y^2 + mx^2 = m$ , where  $m$  is a positive constant.
- (a) Find the largest integer value of  $m$  for which the line  $x - y = 3$  does not meet the curve. [5]
- (b) If the line  $x - y = 3$  is a tangent to the curve at point  $P$ , deduce the value of the constant  $m$ . Hence find the coordinates of  $P$ . [3]

4 It is given that  $\left(x + \frac{k}{x^2}\right)^n$  is a binomial expansion, where  $k$  and  $n$  are positive constants.

(a) Write down the first 4 terms in the expansion of  $\left(x + \frac{k}{x^2}\right)^5$ , in terms of  $k$ , in descending powers of  $x$ . [2]

(b) Hence or otherwise, find the value(s) of  $k$  if the coefficient of  $x^2$  in the expansion of  $(5x^3 + 3)\left(x + \frac{k}{x^2}\right)^5$  is 5. [3]

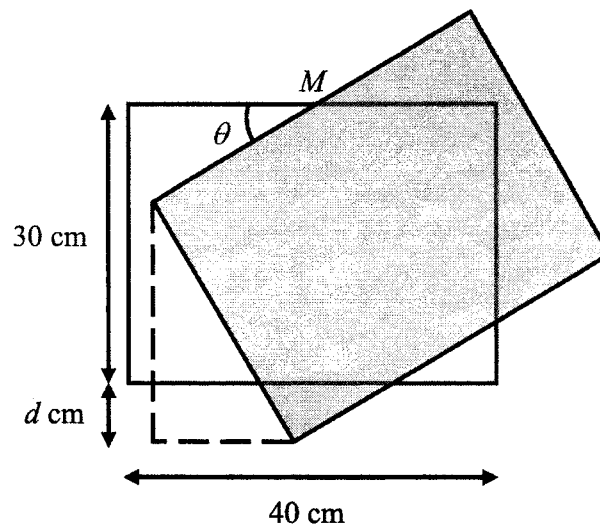
- (c) By considering the general term in the binomial expansion of  $\left(x + \frac{k}{x^2}\right)^n$ , show that for the term independent of  $x$ , the value of the constant  $n$  is a multiple of 3. [3]



5 (a) Given that  $y = \frac{\ln 2x}{5x}$ , show that  $\frac{dy}{dx} = \frac{1 - \ln 2x}{5x^2}$ . [4]

(b) Hence find the value of  $\int_1^2 \frac{\ln 2x}{x^2} dx$ . [4]

6



The diagram shows a rectangular picture frame 40 cm by 30 cm hung on the wall. The picture frame is rotated through an angle  $\theta$  about the midpoint,  $M$  of the top edge.

- (a) Show that the vertical displacement,  $d$  cm, of the picture frame below its original bottom edge is given by

$$d = 20 \sin \theta + 30 \cos \theta - 30. \quad [2]$$

(b) Express  $d$  in the form  $R \sin(\theta + \alpha) - 30$ , where  $R > 0$  and  $0^\circ \leq \alpha \leq 90^\circ$ . [4]

(c) Find the value of  $d$  and the corresponding value of  $\theta$  that will give the greatest vertical displacement of the picture frame below its original bottom edge. [3]

7 A particle moves in a straight line such that its velocity,  $v$  m/s, is given by  $v = \frac{1}{2} - 2e^{-\frac{t}{2}}$ , where  $t$  is the time in seconds after leaving a fixed point  $O$ .

(a) State the value that  $v$  approaches as  $t$  becomes very large. Justify your answer. [2]

(b) Find the initial acceleration of the particle. [2]

(c) Find the value of  $t$  when the particle is instantaneously at rest. [2]


(d) Find the total distance travelled by the particle in the interval  $0 \leq t \leq 10$ . [4]

- 8 The value of a car,  $\$V$ , after  $t$  years following 2014 can be modelled by the formula  $V = ab^t$ , where  $a$  and  $b$  are constants. The table shows the value of the car in the years following 2014.

Year	2016	2018	2020	2022
$t$ (years)	2	4	6	8
$V$ (\$)	52100	43800	37100	31600

- (a) Given that  $\lg V$  is the variable for the vertical axis, express the formula in a form suitable for drawing a straight line graph. [2]

**(b)** Draw a straight line graph to show that the model is reasonable. [4]



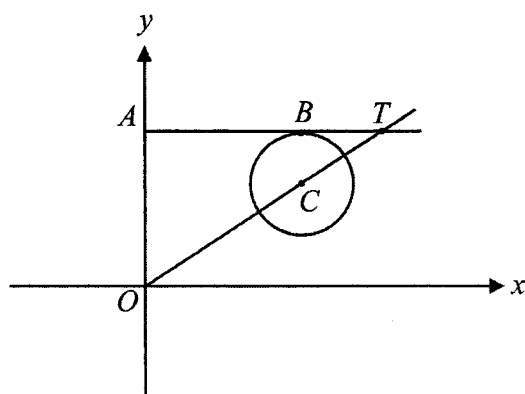
Use the graph in part **(b)** to estimate, correct to 3 significant figures,

**(c)** the value of the constants  $a$  and  $b$ , [3]

**(d)** the value of the car in the year 2024. [2]



9



- (a) The equation of circle with centre  $C$  is given by  $x^2 + y^2 - 6x - 4y + 12 = 0$ .  
Find the radius of the circle and the coordinates of its centre  $C$ . [3]

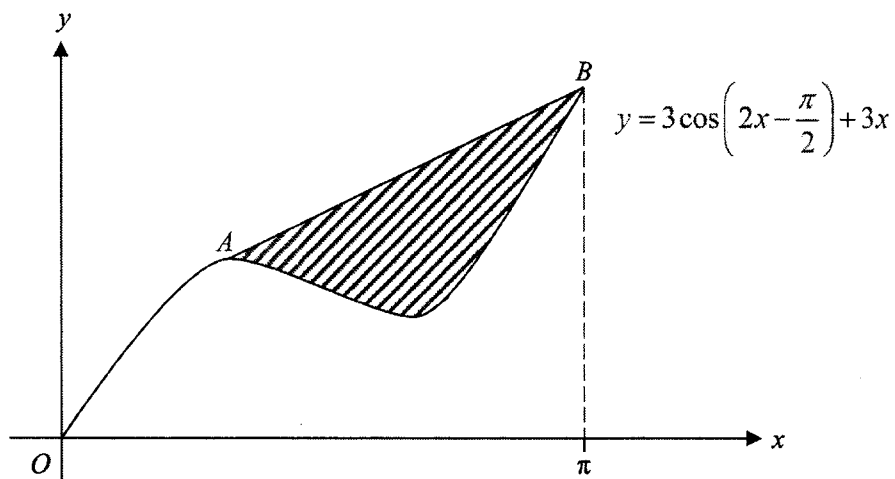
- (b)  $AB$  is a horizontal tangent to the circle at point  $B$ . Given that the line  $OC$  produced meets the line  $AB$  produced at point  $T$ , find the coordinates of  $T$ . [3]

(c) Show that triangle  $AOT$  and triangle  $BCT$  are similar. [3]

(d) Find the ratio  $OC : CT$ . [1]

(e) Find the angle  $ATO$  in degrees. [1]

10



The diagram shows the curve  $y = 3 \cos\left(2x - \frac{\pi}{2}\right) + 3x$  for  $0 \leq x \leq \pi$  radians.

The point  $A$  is the maximum point of the curve and  $AB$  is a straight line.

- (a) Show that the coordinates of  $A$  are  $\left(\frac{\pi}{3}, \frac{3\sqrt{3}}{2} + \pi\right)$  and coordinates of  $B$  are  $(\pi, 3\pi)$ . [5]

- (b) Hence find the area of the shaded region, leaving your answer in terms of  $\pi$ . [7]

**END OF PAPER**