



CATHOLIC HIGH SCHOOL
SEMESTRAL ASSESSMENT TWO (2017)
PRIMARY FIVE
MATHEMATICS
PAPER 1
(BOOKLET A)

Name : _____ ()

Class : Primary 5 _____

Date : 30 October 2017

Total Time for Booklets A and B: 1 hour

15 questions

20 marks

INSTRUCTIONS TO CANDIDATES

Do not turn over this page until you are told to do so.

Follow all instructions carefully.

Answer all questions.

Shade your answers in the Optical Answer Sheet (OAS) provided.

The use of calculators is **NOT** allowed.

Booklet A and B consist of 11 printed pages excluding the cover page.

Questions 1 to 10 carry 1 mark each. Questions 11 to 15 carry 2 marks each. For each question, four options are given. One of them is the correct answer. Make your choice (1, 2, 3 or 4). Shade the oval (1, 2, 3 or 4) on the Optical Answer Sheet. All diagrams are not drawn to scale. (20 marks)

1. $325\,709 = 300\,000 + \underline{\hspace{2cm}} + 5000 + 700 + 9$. What is the missing number?

- (1) 20
- (2) 200
- (3) 2000
- (4) 20 000

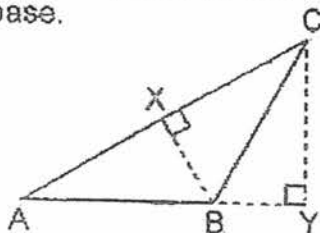
2. What is six hundred and forty thousand and seventy-eight in numerals?

- (1) 604 078
- (2) 604 780
- (3) 640 078
- (4) 640 780

3. Express 9 kg 5 g in g.

- (1) 905 g
- (2) 950 g
- (3) 9 005 g
- (4) 9 050 g

4. In the figure below, ABC is a triangle. Identify the height of triangle ABC when AC is the base.



- (1) BX
- (2) BY
- (3) CX
- (4) CY

5. $5 : 6 = 60 : \underline{\hspace{2cm}}$. Find the missing number in the blank.

- (1) 12
 - (2) 50
 - (3) 61
 - (4) 72
-

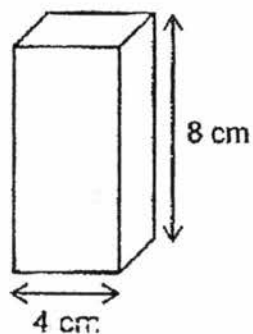
6. Express $2\frac{3}{5}$ as a decimal.

- (1) 2.3
 - (2) 2.35
 - (3) 2.53
 - (4) 2.6
-

7. Find the value of $12 \div 600$.

- (1) 0.02
 - (2) 0.2
 - (3) 0.5
 - (4) 50
-

8. A cuboid of height 8 cm has a square base of edge 4 cm. What is its volume?



- (1) 32 cm^3
 - (2) 64 cm^3
 - (3) 128 cm^3
 - (4) 256 cm^3
-

9. Express 0.7% as a decimal.

- (1) 0.007
 - (2) 0.07
 - (3) 7
 - (4) 70
-

10. Some mango syrup and water are mixed in the ratio of 4 : 9. The volume of water used in the mixture is 72 ml. What is the total volume of the mixture?

- (1) 8 ml
 - (2) 13 ml
 - (3) 32 ml
 - (4) 104 ml
-

11. Which of the following fractions is closest to 1?

- (1) $\frac{3}{4}$
 - (2) $\frac{7}{8}$
 - (3) $\frac{5}{6}$
 - (4) $\frac{4}{3}$
-

12. A container was 35% filled with water. The capacity of the container was 40 l. How much water was needed to fill the container completely?

- (1) 14 l
 - (2) 26 l
 - (3) 30 l
 - (4) 65 l
-

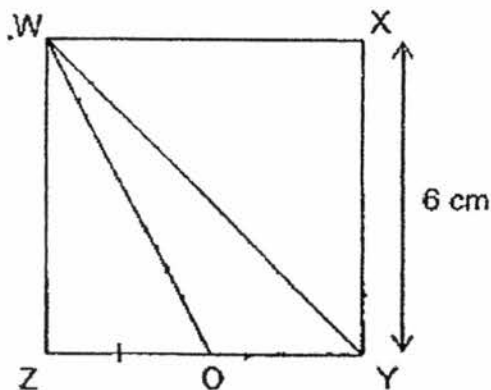
13. The table shows the charges for bicycle rental.

Bicycle for rental	
For the first hour	\$8
For every additional $\frac{1}{2}$ hour or part thereof	\$2

Peter rented a bicycle from 8.30 a.m. to 11.15 a.m. on the same day.
How much did he pay for the rental?

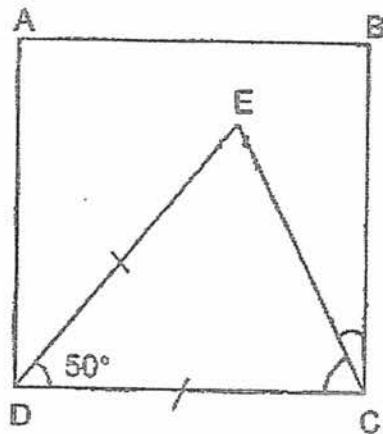
- (1) \$10
- (2) \$12
- (3) \$14
- (4) \$16

-
14. WXYZ is a square of side 6 cm. OY = OZ. Find the area of triangle WYO.



- (1) 9 cm^2
- (2) 18 cm^2
- (3) 24 cm^2
- (4) 36 cm^2

15. In the figure below, ABCD is a square. $DE = DC$ and $\angle EDC = 50^\circ$. Find $\angle ECB$.



- (1) 15°
- (2) 25°
- (3) 40°
- (4) 65°

END OF BOOKLET A



CATHOLIC HIGH SCHOOL
SEMESTRAL ASSESSMENT TWO (2017)
PRIMARY FIVE
MATHEMATICS
PAPER 1
(BOOKLET B)

Name : _____ ())

Class : Primary 5 _____

Date : 30 October 2017

Total Time for Booklets A and B: 1 hour

15 questions

25 marks

Booklet A	
Booklet B	
Total	

INSTRUCTIONS TO CANDIDATES

Do not turn over this page until you are told to do so.

Follow all instructions carefully.

Answer all questions.

Write your answers in this booklet.

The use of calculators is **NOT** allowed.

Booklet A and B consist of 11 printed pages excluding the cover page.

Questions 16 to 20 carry 1 mark each. Write your answers in the spaces provided. Do not write in this space
For questions which require units, give your answers in the units stated.
All diagrams are not drawn to scale. (5 marks)

16. Find the value of $\frac{3}{8} - \frac{1}{12}$

Ans: _____

17. Find the value of 5.04×80

Ans: _____

18. Find the value of $72 - (9 \times 6) \div 10$

Ans: _____

19. Express $5\frac{1}{2}$ as a percentage.

Do not write
in this space

Ans: _____ %

20. Express 36 : 48 : 27 in its simplest form.

Ans: _____

Total marks for questions 16 to 20

5

Questions 21 to 30 carry 2 marks each. Show your working clearly and write your answers in the spaces provided. For questions which require units, give your answers in the units stated. All diagrams are not drawn to scale. (20 marks)

Do not write
in this space

21. A rope is 6 m long. It is cut into 4 shorter pieces of equal length. Find the length of each such shorter piece of rope. Give your answer as a fraction in the simplest form.

Ans: _____ m

22. Samuel is 8 years old and his mother is 35 years old now. In how many years' time will Samuel's mother be four times his age?

Ans: _____ years

23. Ahmad took 32 min to complete a race. David was 12 min faster than Ahmad. How long did David take to complete the race?

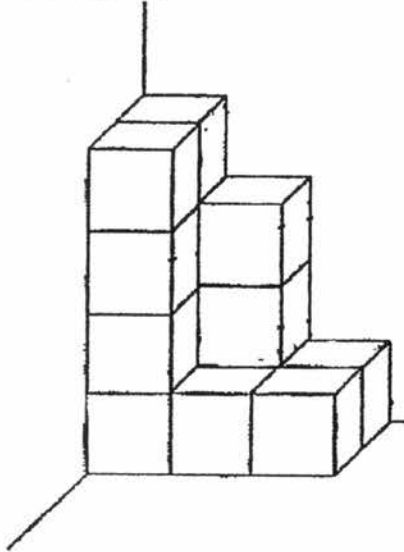
Ans: _____ min

24. Mabel took 2 minutes to fold 3 paper stars. How many minutes did she take to fold 45 paper stars?

Do not write in this space

Ans: _____ min

25. The following solid figure is made up of 1-cm cubes. How many cubes are there in the figure?



Ans: _____

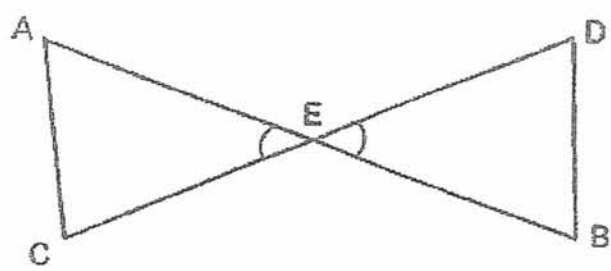
26. The following figure is made up of identical squares. What percentage of the whole figure is shaded?



Ans: _____ %

27. In the figure below, AB and CD are straight lines. The two straight lines meet at point E.

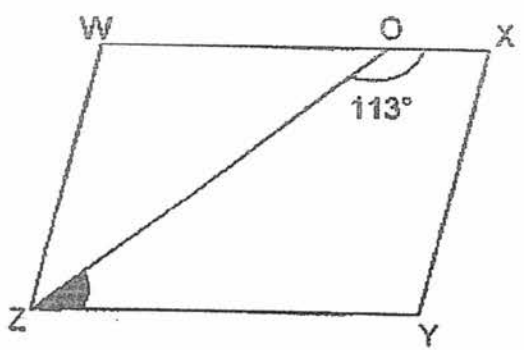
Do not write in this space



Each statement below is either true or false based on the above figure. For each statement, put a tick (✓) in the correct column.

Statement	True	False
(a) $\angle AEC = \angle BED$		
(b) The sum of all the angles in triangle AEC and EDB is 360° .		

28. In the figure below, WXYZ is a parallelogram. OZ is a straight line. Given that $\angle ZOY = 113^\circ$, find the value of $\angle ZOY$.

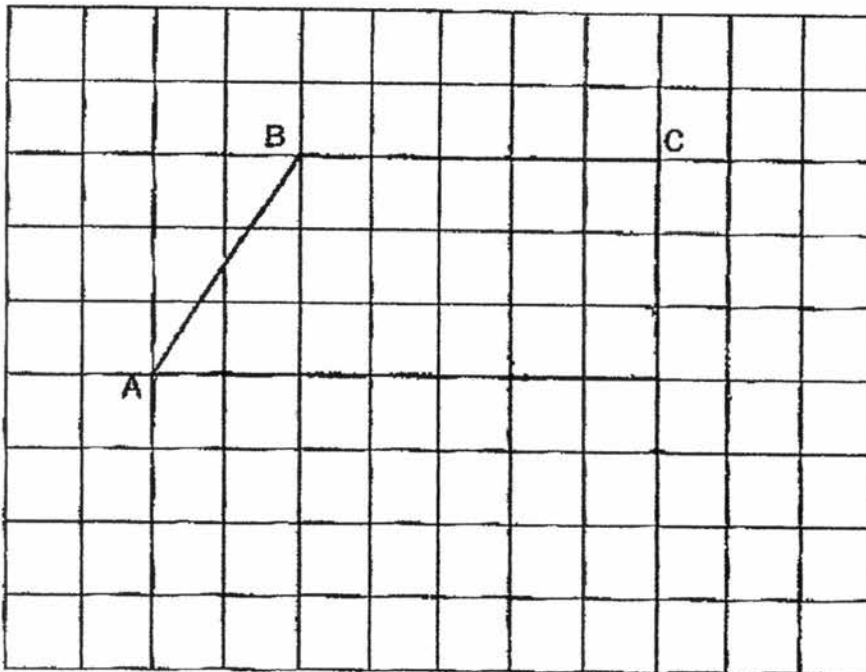


Ans: _____ °

29. Jack and Rachel shared a sum of \$90. Rachel had \$26. Find the ratio of the amount of money Jack had to the amount of money Rachel had. Give your answer in the simplest form. Do not write in this space

Ans: _____

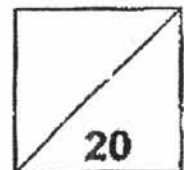
30. In the square grid, AB and BC form two sides of a trapezium ABCD.
 (a) Measure and write down the size of $\angle ABC$.
 (b) Complete the drawing of trapezium ABCD, given that $\angle ADC$ is 90°



Ans: (a) _____

Total marks for questions 21 to 30

END OF BOOKLET B
 - END OF PAPER 1 -





CATHOLIC HIGH SCHOOL
SEMESTRAL ASSESSMENT TWO (2017)
PRIMARY FIVE
MATHEMATICS
PAPER 2

Name : _____ ()

Class : Primary 5 _____

Date : 30 October 2017

Total Time: 1 h 30 min

17 questions

55 marks

Parent's Signature: _____

Paper 1 Booklet A	20
Paper 1 Booklet B	25
Paper 2	55
Total Marks	100

INSTRUCTIONS TO CANDIDATES

Do not turn over this page until you are told to do so.

Follow all instructions carefully.

Answer all questions.

Write your answers in this booklet.

The use of an approved calculator is expected, where appropriate.

This booklet consists of 13 printed pages excluding the cover page.

Questions 1 to 5 carry 2 marks each. Show your working clearly in the space below each question and write your answers in the spaces provided. For questions which require units, give your answers in the units stated. All diagrams are not drawn to scale. (10 marks)

Do not write
in this space

1. One round of a jogging trail measured 800 m. During a race of 12 rounds, Gary stopped to drink water after completing 9 rounds. How far was he from the finish line? Give your answer in kilometres.

Ans: _____ km

2. Mrs. Chong used $2\frac{1}{2}$ kg of flour to bake chocolate cookies. She used $1\frac{2}{3}$ kg more flour to bake raisin cookies than chocolate cookies. How many kilograms of flour did she use altogether?

Ans: _____ kg

(Go on to the next page)

3. 100 g of minced meat cost \$0.40. Joseph bought $3\frac{1}{4}$ kg of minced meat. How much did he pay for the minced meat?

Do not write
in this space

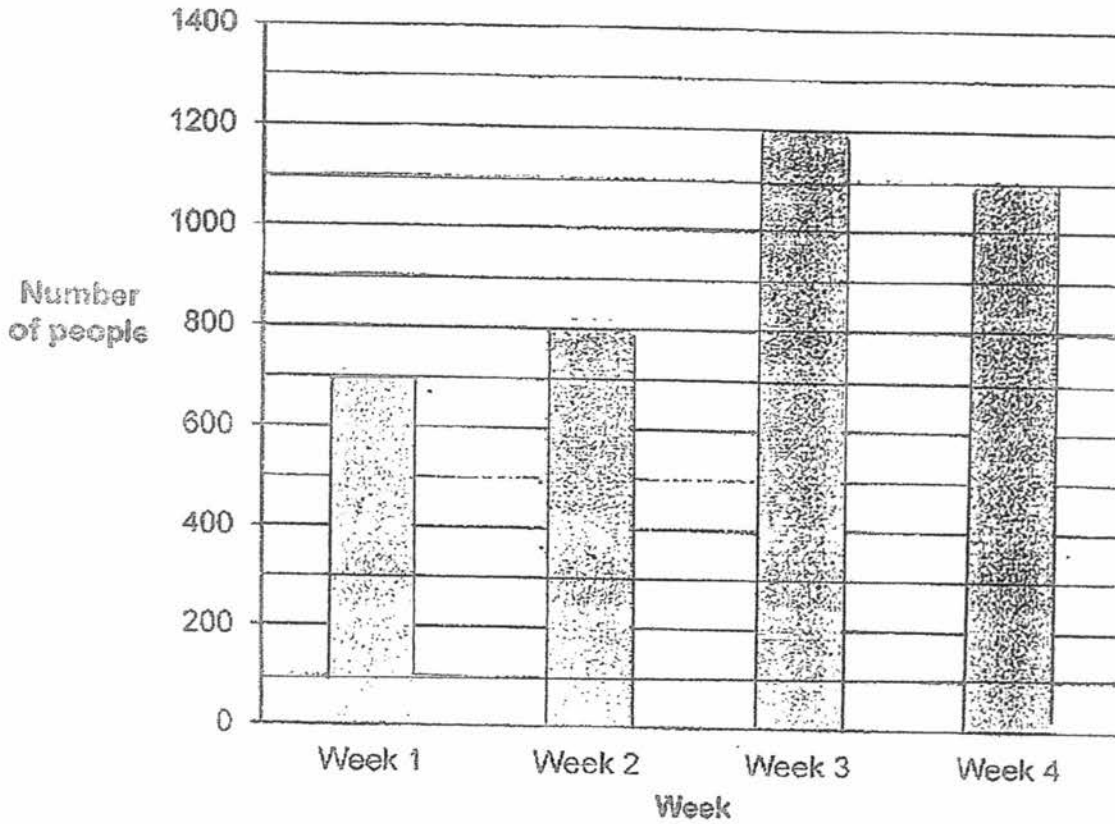
Ans: \$ _____

4. Helen took a \$13 500 loan from the bank. She paid 2.5% interest to the bank in the first year. How much interest did Helen pay in the first year?


Ans: \$ _____

(Go on to the next page)

5. The bar graph shows the number of people who visited the art museum over four weeks. What was the average number of people who visited the art museum over the four weeks? Do not write in this space



Ans: _____



(Go on to the next page)

For questions 6 to 17, show your working clearly in the space provided for each question and write your answers in the spaces provided. The number of marks available is shown in brackets [] at the end of each question or part-question.

(45 marks)

Do not write
in this space

6. 2 adults and 20 children bought tickets to watch an opera show. Each adult ticket cost \$8 more than each child ticket. They paid a total of \$588. What was the cost of 1 child ticket?

Ans: _____ [3]

7. Audrey has some \$2 and \$10 notes in the ratio of 6 : 1. She has a total of \$242. How many \$2 notes does she have?

Ans: _____ [3]

(Go on to the next page)

8. A cubical tank of edge 12 cm was $\frac{5}{8}$ -filled with water. 1 l of water was removed from the tank. How much water was left in the tank? Give your answer in litres.

Do not write
in this space

Ans: _____ [3]

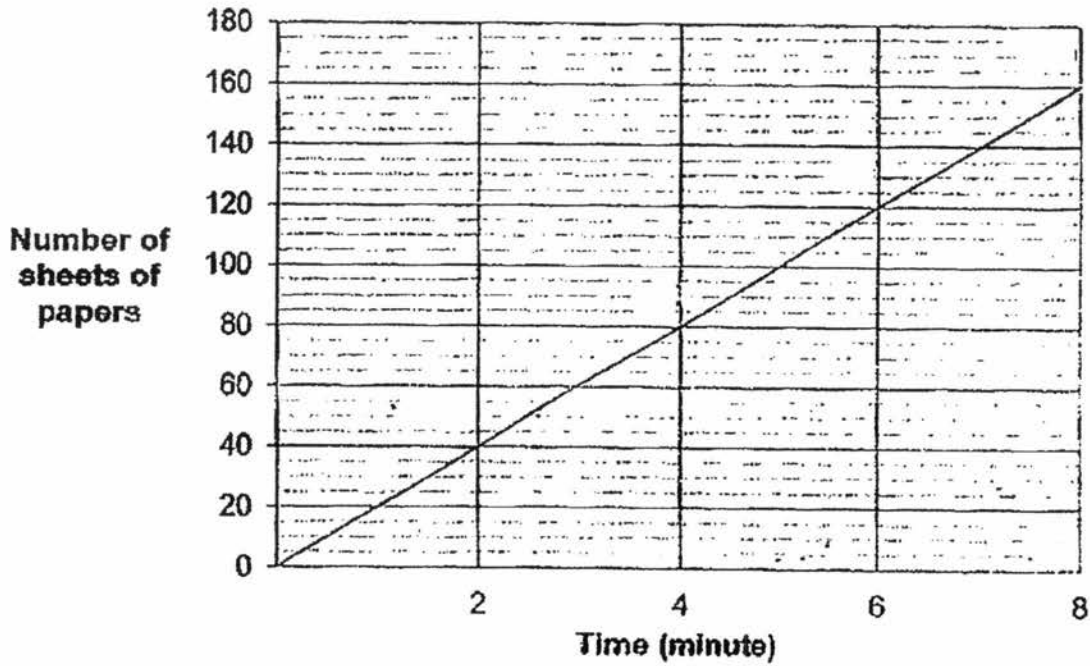
9. The average mass of 3 boys is 45.1 kg. A girl with a mass of 51.1 kg joins them. Find the average mass of the 4 children.

Ans: _____ [3]

(Go on to the next page)

10. The line graph below shows the number of sheets of paper a printer can print over 8 minutes.

Do not write
in this space



- (a) How many sheets of paper can the printer print in 8 minutes?
(b) At this rate, how much time would the printer take to print 480 sheets of paper?

Ans: (a) _____ [1]

(b) _____ [2]

(Go on to the next page)

11 The ratio of the number of red marbles to green marbles in a box is 12 : 5. There are 343 more red marbles than green marbles. Do not write
in this space

(a) What fraction of the total number of marbles in the box is red?

(b) How many marbles are there in the box altogether?

Ans: (a) _____ [1]

(b) _____ [3]



(Go on to the next page)

12. Alan had 160 balloons. Bernard had twice as many balloons as Alan. Bernard gave away some balloons. Alan then bought thrice as many balloons as the number of balloons Bernard gave away. In the end, they had the same number of balloons left.


Do not write
in this space

(a) How many balloons did Alan buy?

(b) What percentage of Bernard's balloons was given away?

Ans: (a) _____ [3]

(b) _____ [1]



(Go on to the next page)

13. Fiona bought some stickers. She gave $\frac{1}{4}$ of the stickers to her brother and $\frac{3}{7}$ of the remaining stickers to her sister. After her mother gave her 560 stickers, she then had the same number of stickers that she bought at first. How many stickers did Fiona buy?

Do not write
in this space

Ans: _____ [4]

(Go on to the next page)

14. The total mass of 4 cartons of coke and 2 cartons of milo was 52.9 kg.
The total mass of 8 cartons of coke and 5 cartons of milo was 113.05 kg.
Find the mass of 12 cartons of coke.

Do not write
in this space

Ans: _____ [4]

(Go on to the next page)

15. Siti wanted to buy 30 markers but she was short of \$14. If she buys 22 markers she would have \$18 left. How much money did Siti have?


Do not write
in this space

Ans: _____ [4]

(Go on to the next page)

Do not write
in this space

16. At a sale, a shop sold bars of chocolate as shown in the flyer.



Usual Price : \$6 each


SALE

Buy 1 bar of chocolate at 10% discount
Or
Buy 2 or more bars at 25% discount

- (a) Jojo bought a bar of chocolate at the sale. How much did she pay?
- (b) Kevin has \$25. What is the maximum number of bars of chocolate he can buy with \$25?

Ans: (a) _____ [2]

(b) _____ [3]



(Go on to the next page)

17. Joshua spent $\frac{1}{8}$ of his monthly salary and an additional \$50 on food. He spent $\frac{2}{5}$ of the remainder and an additional \$70 on household expenses. He was left with \$2630. How much was Joshua's monthly salary?

Do not write
in this space

Ans: _____ [5]

**-END OF PAPER 2-
CHECK YOUR WORK**

YEAR : 2017
LEVEL : PRIMARY 5
SCHOOL : CATHOLIC HIGH SCHOOL
SUBJECT : MATHEMATICS
TERM : SA2

Paper 1 (Booklet A)

Q1	4	Q4	1	Q7	1	Q10	4	Q13	4
Q2	3	Q5	4	Q8	3	Q11	2	Q14	1
Q3	3	Q6	4	Q9	1	Q12	2	Q15	2

Paper 1 (Booklet B)

Q16 $\frac{9}{24} - \frac{2}{24} = \frac{7}{24}$

ANS: $\frac{7}{24}$

Q17 $5.04 \times 80 = \underline{403.2}$

Q18 $72 - (9 \times 6) + 10 = 72 - 54 + 10$

$= 18 + 10$

$= \underline{28}$

Q19 $5\frac{1}{2} = \underline{550\%}$

Q20 $36 : 48 : 27 = \underline{12 : 16 : 9}$

Q21 $6m \div 4 = 1.5m$

$1.5m = 1\frac{1}{2}m$

ANS: $1\frac{1}{2}m$

Q22 $35 - 8 = 27$

$27 \div 3 = 9$

$9 - 8 = \underline{1}$

Q23 $32 - 12 = \underline{20}$

Q24 $45 \div 3 = 15$

$15 \times 2 = \underline{30}$

Q25 $2 + 3 + 3 + 6 = \underline{14}$

Q26 $\frac{13}{20} = \frac{65}{100} = \underline{65\%}$

Q27 a) True

b) True

Q28 $180^\circ - 113^\circ = \underline{67^\circ}$

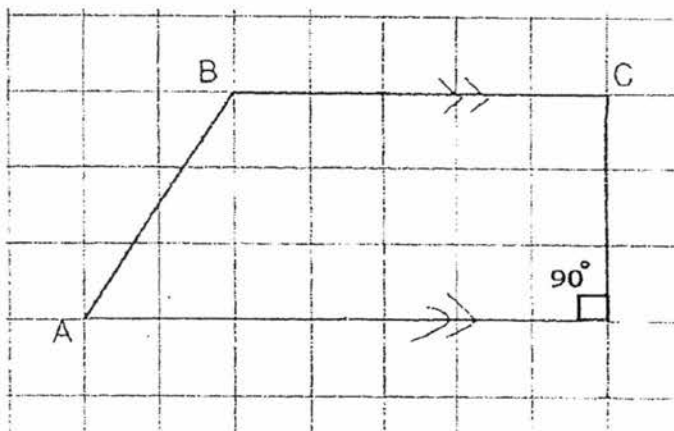
Q29 $90 - 26 = 64$

J : R

64 : 26

32 : 13

Q30 a)



b) 124°

Paper 2

Q1 $800\text{m} \times 12 = 9600\text{m}$
 $= 9.6\text{km}$

$800\text{m} \times 9 = 7200\text{m}$
 $= 7.2\text{km}$

$9.6\text{km} - 7.2\text{km} = \underline{2.4\text{km}}$

Q2 $2\frac{1}{2}\text{kg} \times 2 = 5\text{kg}$

$5\text{kg} + 1\frac{2}{3}\text{kg} = 6\frac{2}{3}\text{kg}$

ANS: $6\frac{2}{3}\text{kg}$

Q3 $100\text{g} = \frac{1}{10}\text{kg}$

$3\frac{1}{4}\text{kg} \div \frac{1}{10}\text{kg} = \frac{65}{2}$

$\frac{65}{2} \times \$0.40 = \underline{\$13}$

Q4 $\$13500 \times 2.5\% = \underline{\$337.50}$

Q5 $700 + 800 + 1200 + 1100 = 3800$

$3800 \div 4 = \underline{950}$

Q6 $\$566 - (\$8 + \$8) = \550

$\$550 \div \$22 = \$25$

Q7 $\$2 \times 6 + \$10 = \$22$

$\$242 \div \$22 = 11$

$11 \times 6 = \underline{66}$

Q8 $12\text{cm} \times 12\text{cm} \times 12\text{cm} \times \frac{5}{6} = 1440\text{cm}^3$

$= 1.44\text{l}$

$1.44\text{l} - 1.0\text{l} = \underline{0.44\text{l}}$

Q9 $45.1\text{kg} \times 3 = 135.3\text{kg}$

$$135.3\text{kg} + 51.1\text{kg} = 186.4\text{kg}$$

$$186.4\text{kg} \div 4 = \underline{46.6\text{kg}}$$

Q10 a) 160

$$480 \div 40 = 12$$

$$12 \times 2 = \underline{24(b)}$$

Q11 a) $\frac{12}{17}$

$$343 \div 7 = 49$$

$$49 \times 17 = \underline{833(b)}$$

Q12 $160 \div 4 = 40$

$$40 \times 3 = \underline{120(a)}$$

$$\frac{1}{8} = \underline{12.5\%(b)}$$

Q13 $560 \div 16 = 35$

$$35 \times 28 = \underline{980}$$

Q14 $4c + 2m = 52.9 \text{ kg}$

$$8c + 5m = 113.05\text{kg}$$

$$20c + 10m = 264.5\text{kg}$$

$$16c + 10m = 226.1\text{kg}$$

$$264.5\text{kg} - 226.1\text{kg} = 38.4\text{kg}$$

$$38.4\text{kg} \div 4 = 9.6\text{kg}$$

$$9.6\text{kg} \times 12 = \underline{115.2\text{kg}}$$

Q15 $\$18 + \$14 = \$32$

$$30 - 22 = 8$$

$$\$32 \div 8 = \$4$$

$$\$4 \times 30 - \$14 = \underline{\$106}$$

Q16 a) $\$6 \times 90\% = \underline{\$5.40}$

b) Before discount 2 bars --- $\$12$

After discount 2 bars --- $\$9$

Number of sets can Jojo buy --- $\$25 \div \$9 = 2$ sets Remainder $\$9$

2 sets --- 4 chocolates

$\$9$ can buy 1 chocolate

Therefore, he can buy total of 5 chocolates bar.

Q17 $2630 + 70 = 2700$

$$2700 \div 3 \times 5 = 4500$$

$$4500 \div 7 \times 8 = \underline{5200}$$