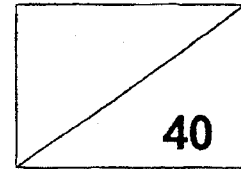


1.6.

Red Swastika School  
Primary 4  
Class Test 2  
Mathematics



Name: \_\_\_\_\_ ( )

Date: 11 August 2023

Class: Pr 4 / \_\_\_\_\_

Duration: 50 minutes

Parent's Signature: \_\_\_\_\_

Questions 1 to 10 carry 2 marks each. For each question, four options are given. One of them is the correct answer. Make your choice (1, 2, 3 or 4) and write its number in the brackets provided. (20 marks)

1 What is the value of the digit 5 in 87.654?

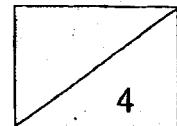
- (1) 5
- (2) 0.5
- (3) 0.05
- (4) 0.005

( )

2 Which of the following is equal to  $2\frac{5}{7}$ ?

- (1)  $\frac{10}{7}$
- (2)  $\frac{17}{7}$
- (3)  $\frac{19}{7}$
- (4)  $\frac{25}{7}$

( )



3 Which letter below is **not** symmetrical?

**T O W N**

- (1) T
- (2) O
- (3) W
- (4) N

( )

4 Which of the following decimals is the smallest?

- (1) 4.132
- (2) 4.123
- (3) 4.321
- (4) 4.231

( )

5

$$7.2 = 7 + \frac{1}{\boxed{?}}$$

What is the missing number in the box?

- (1) 5
- (2) 2
- (3) 10
- (4) 100

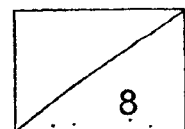
( )

6

Mark is 1.55 m tall.  
He is 0.4 m shorter than Alan.  
What is Alan's height?

- (1) 1.15 m
- (2) 1.51 m
- (3) 1.59 m
- (4) 1.95 m

( )



7 Lynn bought 5 kg of cherries. She gave the cashier \$100 and received \$32 change. Find the cost of 1 kg of cherries.

(1) \$13.60

(2) \$20.00

(3) \$26.40

(4) \$68.00

( )

8 Gopal saved \$2.50 for every \$8 he had. If he had \$72, how much did he save?

(1) \$74.50

(2) \$22.50

(3) \$20.00

(4) \$9.00

( )

9 May and her 3 friends bought a cake that cost \$24.60. The cost was shared equally among May and her friends. How much did each person pay for the cake?

(1) \$6.15

(2) \$8.20

(3) \$72.80

(4) \$98.40

( )

10 David spent  $\frac{4}{9}$  of his money and had \$80 left. How much money did he have at first?

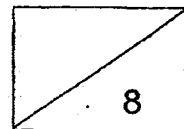
(1) \$16

(2) \$20

(3) \$144

(4) \$180

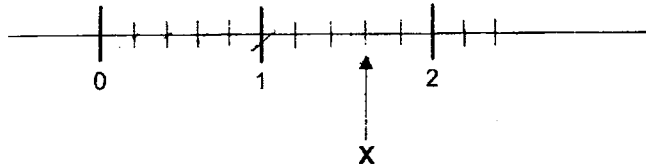
( )



Questions 11 to 16 carry 2 marks each. Write your answers in the spaces provided. For questions which require units, give your answers in the units stated. (12 marks)

---

11a Write the fraction represented by X.



Ans: \_\_\_\_\_ [1]

11b Arrange the following numbers from the smallest to the largest.

$$3.5, 3.05, 3\frac{1}{100}$$

Ans: \_\_\_\_\_ [1]  
(smallest)

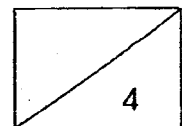
---

12a Write  $4\frac{7}{20}$  as a decimal.

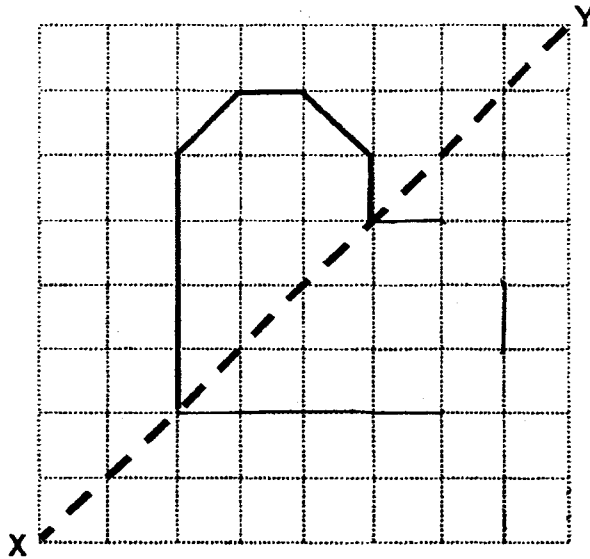
Ans: \_\_\_\_\_ [1]

12b Express 5.2 as a mixed number in its simplest form.

Ans: \_\_\_\_\_ [1]



- 13 Complete the symmetric figure below with XY as the line of symmetry.

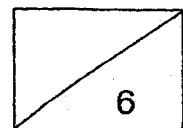


- 14 Linda wanted to buy a notebook that cost \$3.90 and a pen that cost \$1.50. After checking her wallet, she found that she was short of \$0.60. How much money was in her wallet?

Ans: \$ \_\_\_\_\_

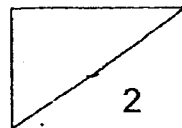
- 15 A bag of potatoes is  $\frac{2}{5}$  kg heavier than a bag of tomatoes. The bag of tomatoes has a mass of  $\frac{5}{8}$  kg. What is the mass of the bag of potatoes? Leave your answer in mixed number.

Ans: \_\_\_\_\_ kg



- 16 Juliet baked some chocolate and oatmeal cookies.  
She baked 12 chocolate cookies and  $\frac{5}{8}$  of the cookies were oatmeal.  
Her mother gave her another 8 oatmeal cookies.  
What fraction of the cookies were chocolate?

Ans: \_\_\_\_\_



For Questions 17 and 18, show your workings clearly in the space below each question and write your answers in the spaces provided. (8 marks)

---

17 In a bakery, the cost of a muffin and a pie is as shown below.



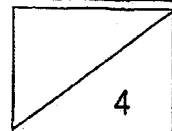
Muffin  
\$2.40



Pie  
\$3.60

Mrs Toh bought an equal number of muffins and pies and paid \$54. How much did Mrs Toh pay for the muffins?

Ans: \_\_\_\_\_ [4]



18 Bryan had some money. He spent  $\frac{1}{2}$  of his money on a watch,  $\frac{1}{5}$  of his money on two T-shirts and saved the rest. He saved \$60.

a) What fraction of his money did he save?

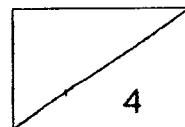
Ans: a) \_\_\_\_\_ [1]

b) How much does each T-shirt cost?

Ans: b) \_\_\_\_\_ [3]

---

**END OF PAPER**  
Have you checked your work?





SCHOOL : RED SWASTIKA PRIMARY SCHOOL

LEVEL : PRIMARY 4

SUBJECT : MATH

TERM : TEST 2 2023

CONTACT :

---

Q1	Q2	Q3	Q4	Q5	Q6	Q7	Q8	Q9	Q10
3	3	4	2	1	4	1	2	1	3

11)	a) $\frac{3}{5}$  b) $3\frac{1}{100}$ , 3.05, 3.5
12)	a) 4.350  b) $5\frac{1}{5}$
13)	
14)	\$4.80

15)	$1\frac{1}{40}$ kg
16)	$\frac{3}{10}$
17)	\$21.60
18)	a) $\frac{3}{10}$ b) \$20