

**Nanyang Primary School**  
**Primary 4**  
**Mathematics**  
**Term 1 Combined Topical Test 2022**



Name: \_\_\_\_\_ ( )

Class: Primary 4 ( )

Date: \_\_\_\_\_

Parent's Signature: \_\_\_\_\_

Marks:

/50

Duration: 1 hour

**Section A**

Questions 1 to 5 carry 2 marks each. For each question, four options are given. One of them is the correct answer. Make your choice (1, 2, 3 or 4) and write your answer (1, 2, 3 or 4) in the bracket ( ) provided.

(10 marks)

1. In 34 765, the digit 7 is in the \_\_\_\_\_ place.

- |               |                       |
|---------------|-----------------------|
| (1) tens      | (2) hundreds          |
| (3) thousands | (4) ten thousands ( ) |

2. 36 tens + 84 thousands is the same as \_\_\_\_\_.

- |            |              |
|------------|--------------|
| (1) 84 360 | (2) 84 036   |
| (3) 8760   | (4) 8436 ( ) |

3. 94 601 = \_\_\_\_\_ + 601

- |               |                     |
|---------------|---------------------|
| (1) 94 × 10   | (2) 94 × 100        |
| (3) 94 × 1000 | (4) 94 × 10 000 ( ) |

4. Estimate the value of  $4513 - 971$  by first rounding each number to the nearest thousand.

- (1) 3000                              (2) 3500  
(3) 4000                              (4) 4100                              (      )

5. Which of the following is a common factor of 12 and 32?

- (1) 8    (2) 6  
(3) 3    (4) 4    (      )

**Section B**

Questions 6 to 17 carry 2 marks each. Show your working clearly and write your answers in the spaces provided. For questions which require units, give your answers in the units stated.

(24 marks)

6. Find the quotient when 8412 is divided by 9.

Ans: \_\_\_\_\_

7. Find the missing number in the box.

$$123 \times 40 = 123 \times \boxed{?} \times 10$$

Ans: \_\_\_\_\_

8. A given number is a multiple of 8 and a factor of 48.  
It is between 20 and 40.  
What is the number?

Ans: \_\_\_\_\_

---

9. Round the following numbers to the nearest hundred.

(a) 9 950

(b) 23 439

Ans: (a) \_\_\_\_\_

(b) \_\_\_\_\_

---

10. Find the product of 236 and 47.

Ans: \_\_\_\_\_

---

11. Write the following in numerals.

(a) Ninety-six thousand and eighteen

(b) Thirty-one thousand, two hundred and seventy.

Ans: (a) \_\_\_\_\_

(b) \_\_\_\_\_

---

12. Use the 5 digits below to form the greatest 5-digit odd number.  
Use each digit once only.

4   9   6   7   3

Ans: \_\_\_\_\_

---

13. A number when divided by 6 gives a quotient of 345 and a remainder of 2. What is the number?

Ans: \_\_\_\_\_

---

14. There are 20 girls standing in a row. Every 2nd girl is wearing a hair pin. Every 3rd girl is wearing a hat. How many girls wear both a hair pin and a hat?

Ans: \_\_\_\_\_

---

15. There are 354 people at a party. Each table can only have 5 seats. What is the smallest number of tables needed at the party?

Ans: \_\_\_\_\_

---

16. Susan has 4364 stickers. May has 2468 stickers. How many stickers must Susan give May so that they have the same number of stickers in the end?

Ans: \_\_\_\_\_

---

17. Look at the pattern below.

SAFETYSAFETYSAFETY...

What letter is in the 44<sup>th</sup> position?

Ans: \_\_\_\_\_

---

**Section C**

For questions 18 to 21, show your working clearly and write your answers in the spaces provided. The number of marks available is shown in brackets [ ] at the end of each question or part-question.

(16 marks)

18. A number has 10 as a factor.

Each statement below is either true, false or not possible to tell from the information given. For each statement, put a tick ( ✓ ) in the correct column.

Statement	True	False	Not possible to tell
The number is a multiple of 5.			
The number is an odd number.			
The number is a multiple of 12.			
The number has 4 as a factor.			

[4]

19. Mrs Samy collected a total of \$486 from selling some chocolate muffins and 63 banana muffins. She sold the chocolate muffins at \$3 each and the banana muffins at \$4 each. How many chocolate muffins did she sell?

Ans: \_\_\_\_\_ [4]

20. Sam had 6 times as much money as Karl. Karl had \$128 less than Andy. Both Karl and Andy had a total of \$800.
- (a) How much money did Karl have?
- (b) Sam then bought 8 identical lego sets with all his money. How much did each lego set cost?

Ans: (a) \_\_\_\_\_ [2]

(b) \_\_\_\_\_ [2]

---



21. At a funfair, the number of children was 2 times the number of women. The number of women was 2 times the number of boys. There were 486 girls.
- (a) How many children were there?
- (b) Each girl bought 20 game tokens. How many game tokens did all the girls buy?

Ans: (a) \_\_\_\_\_ [2]

(b) \_\_\_\_\_ [2]

---

End of Paper



**Manyang Primary School**  
**Primary 4**  
**Mathematics**  
**Term 1 Combined Topical Test 2022**

Name: \_\_\_\_\_ ( )  
 Class: Primary 4 ( )  
 Date: \_\_\_\_\_ Parent's Signature: \_\_\_\_\_  
 Duration: 1 hour

Mark: **150**

**Section A**

Questions 1 to 6 carry 2 marks each. For each question, four options are given. One of them is the correct answer. Mark your choice (1, 2, 3 or 4) and write your answer (1, 2, 3 or 4) in the bracket ( ) provided.

(10 marks)

- In 84 785, the digit 7 is in the \_\_\_\_\_ place.  
 (1) tens (2) hundreds (3) thousands (4) ten thousands (2)
- 360 87 000 is the same as \_\_\_\_\_.  
 (1) 84 200 (2) 84 030 (3) 8700 (4) 8430 (3)
- $84\ 801 = 74\ 000 + 601$   
 (1)  $84 \times 10$  (2)  $84 \times 100$   
 (3)  $84 \times 1000$  (4)  $84 \times 10\ 000$  (3)

- A given number is a multiple of 6 and a factor of 48. It is between 20 and 40. What is the number?  
 Multiples of 6: 6, 12, 18, 24, 30, 36, 42  
 Factors of 48: 1, 2, 3, 4, 6, 8, 12, 16, 24, 48  
 Ans: **24**

- Round the following numbers to the nearest hundred.  
 (a) 8850  
 (b) 23 430  
 Ans: (a) **9000**  
 (b) **23 400**

- Find the product of 230 and 47.  

$$\begin{array}{r} 230 \\ \times 47 \\ \hline 1610 \\ 9200 \\ \hline 10920 \end{array}$$
  
 Ans: **10 920**

- Estimate the value of  $4513 - 871$  by first rounding each number to the nearest thousand.  
 (1) 3000 (2) 3500  
 (3) 4000 (4) 4500 (3)
- Which of the following is a common factor of 12 and 32?  
 $12 \rightarrow 1, 2, 3, 4, 6, 12$   
 $32 \rightarrow 1, 2, 4, 8, 16, 32$   
 (1) 3 (2) 6 (3) 4 (4) 8 (4)

**Section B**  
 Questions 6 to 17 carry 2 marks each. Show your working clearly and write your answers in the spaces provided. For questions which require units, give your answers in the units stated. (24 marks)

- Find the quotient when 8412 is divided by 9.  

$$\begin{array}{r} \times 934 \\ 9 \overline{) 8412} \\ \underline{81} \phantom{00} \\ 31 \phantom{0} \\ \underline{27} \phantom{0} \\ 42 \\ \underline{36} \\ 6 \end{array}$$
  
 $8412 \div 9 = 934 R 6$   
 Ans: **934**
- Find the missing number in the box.  
 $122 \div 40 = 123 \div \boxed{?} \times 10$   
 $\frac{122}{40} = \frac{123 \times 10}{?}$   
 $? = \frac{123 \times 10 \times 40}{122} \approx 4000$   
 Ans: **4**

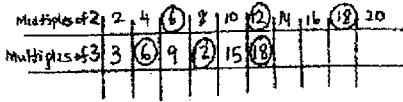
- Write the following in numerals.  
 (a) Ninety-six thousand and eighty  
 (b) Thirty-one thousand, two hundred and seventy  
 Ans: (a) **96 080**  
 (b) **31 270**

- Use the digits below to form the greatest 5-digit odd number. Use each digit only.  
 4, 0, 8, 7, 3  
 Ans: **97 643**

- A number when divided by 6 gives a quotient of 345 and a remainder of 2. What is the number?  

$$\begin{array}{r} \boxed{?} \div 6 = 345 R 2 \\ 345 \times 6 = 2070 \\ 2070 + 2 = 2072 \text{ (Ans)} \end{array}$$
  
 Ans: **2072**

14. There are 20 girls standing in a row. Every 2nd girl is wearing a hair pin. Every 3rd girl is wearing a hat. How many girls wear both a hair pin and a hat?



Ans: 3

15. There are 354 people at a party. Each table can only have 5 seats. What is the smallest number of tables needed at the party?

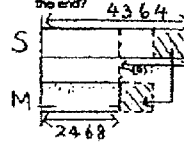
$$354 \div 5 = 70 R4$$

$$70 + 1 = 71 \text{ (Ans)}$$

$$\begin{array}{r} \times 70 \\ 51354 \\ - 25 \phantom{0} \\ \hline 04 \phantom{0} \\ - 0 \\ \hline 4 \phantom{0} \end{array}$$

Ans: 71

16. Susan has 4364 stickers. May has 2468 stickers. How many stickers must Susan give May so that they have the same number of stickers in the end?



$$4364 - 2468 = 1896$$

$$1896 \div 2 = 948 \text{ (Ans)}$$

Ans: 948

17. Look at the pattern below.

SAFETYSAFETYSAFETY...

What letter is in the 44<sup>th</sup> position?

$$44 \div 6 = 7 R(2)$$

7 sets of (SAFETY)

42<sup>nd</sup> Position - Y

43<sup>rd</sup> Position - S

44<sup>th</sup> Position - A

Ans: A

**Section C**

For questions 18 to 21, show your working clearly and write your answers in the spaces provided. The number of marks available is shown in brackets [ ] at the end of each question or part-question. (18 marks)

18. A number has 10 as a factor.

Each statement below is either true, false or not possible to tell from the information given. For each statement, put a tick (✓) in the correct column.

Statement	True	False	Not possible to tell
The number is a multiple of 5.	✓		
The number is an odd number.		✓	
The number is a multiple of 12.			✓
The number has 4 as a factor.			✓

[4]

19. Mrs Selmy collected a total of \$486 from selling some chocolate muffins and 83 banana muffins. She sold the chocolate muffins at \$3 each and the banana muffins at \$4 each. How many chocolate muffins did she sell?

$$\text{Banana muffins} \rightarrow 83 \times \$4$$

$$= \$252$$

$$\text{Chocolate muffins} \rightarrow \$486 - \$252$$

$$= \$234$$

$$\text{Number of chocolate muffins} \rightarrow \$234 \div \$3$$

$$= 78 \text{ (Ans)}$$

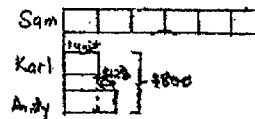
$$\begin{array}{r} 63 \\ \times 4 \\ \hline 252 \\ \hline 486 \\ - 252 \\ \hline 234 \\ \times 3 \\ \hline 702 \\ - 234 \\ \hline 234 \\ - 234 \\ \hline 0 \end{array}$$

Ans: 78 [5]

20. Sam had 6 times as much money as Karl. Karl had \$128 less than Andy. Both Karl and Andy had a total of \$800.

(a) How much money did Karl have?

(b) Sam then bought 8 identical lego sets with all his money. How much did each lego set cost?



$$2 \text{ units} = \$800 - \$128$$

$$= \$672$$

(a) 1 unit =  $\$672 \div 2$

$$= \$336 \text{ (Ans)}$$

$$\text{Sam} \rightarrow \$336 \times 6$$

$$= \$2016$$

$$1 \text{ lego set} \rightarrow \$2016 \div 8$$

$$= \$252 \text{ (Ans)}$$

$$\begin{array}{r} 786 \\ - 128 \\ \hline 672 \\ \times 336 \\ \hline 2016 \\ \times 336 \\ \hline 2016 \\ - 1632 \\ \hline 4128 \\ - 4032 \\ \hline 96 \\ - 96 \\ \hline 0 \end{array}$$

Ans (a) \$336 [2]

(b) \$252 [2]

21. At a fairs, the number of children was 2 times the number of women. The number of women was 2 times the number of boys. There were 486 girls.

(a) How many children were there?

(b) Each girl bought 20 game tokens. How many game tokens did all the girls buy?

Children  $\overbrace{\text{B:G G:G}}^{486}$

Women  $\underbrace{\quad}_{2\text{units}}$

$3\text{units} = 486$

$1\text{unit} = 486 \div 3$

$= 162 \text{ (Boys)}$

(a) Children  $\rightarrow 162 + 486$

$= 648 \text{ (Ans)}$

(b) Total Tokens  $\rightarrow 486 \times 20$

$= 9720 \text{ (Ans)}$

$$\begin{array}{r} 162 \\ 3 \overline{) 486} \\ \underline{-36} \phantom{0} \\ 86 \\ \underline{-84} \\ 20 \end{array}$$
  

$$\begin{array}{r} 162 \\ + 486 \\ \hline 648 \end{array}$$
  

$$\begin{array}{r} 486 \\ \times 20 \\ \hline 9720 \end{array}$$

Ans: (a) 648 [2]

(b) 9720 [2]

End of Paper

