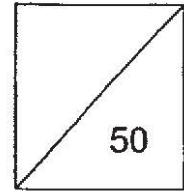




HENRY PARK PRIMARY SCHOOL
MATHEMATICS
PRIMARY 4
TERM REVIEW 2



Name : _____ ()

Class : P4 _____

Date : _____

Duration of Paper: 55 minutes

Parent's Signature : _____

Section A : (5 x 2 marks = 10 marks)

Choose the correct answer and write its number in the brackets provided.

1. What is the value of the digit 8 in 57.498?

- (1) 0.008
- (2) 0.08
- (3) 0.8
- (4) 8

()

2. Uncle Joe weighs 92.678 kg. Round his mass to 2 decimal places.

- (1) 92.67 kg
- (2) 92.68 kg
- (3) 92.70 kg
- (4) 93.00 kg

()

3. Find the sum of 23.06 and 7.9.

- (1) 23.85
- (2) 30.15
- (3) 30.96
- (4) 31.50

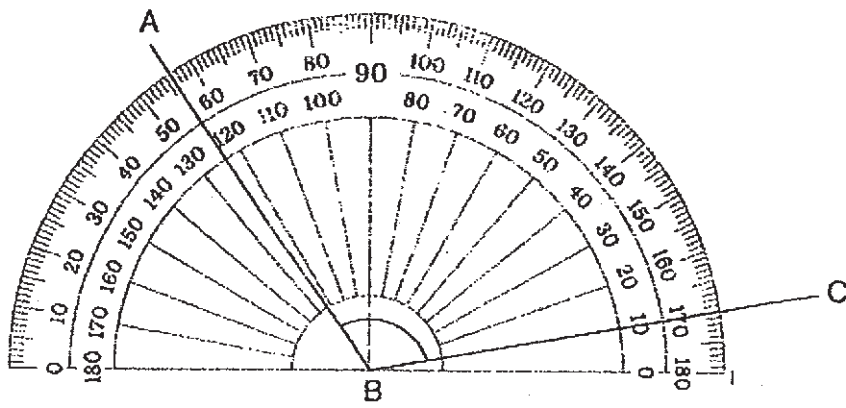
()

4. Subtract 0.08 from 5.4.

- (1) 4.6
- (2) 4.96
- (3) 5.32
- (4) 5.48

()

5. What is the size of $\angle ABC$?



- (1) 46°
- (2) 56°
- (3) 114°
- (4) 124°

()

Section B: (10 x 2 marks = 20 marks)

Read the questions carefully and write the correct answer in the blanks provided. Show all workings clearly.

6. Arrange the following numbers in order from the greatest to the smallest.

2.08 , 0.28 , 0.82 , 8.02


, , ,

Greatest

7. What is $4.08 + 5.92$?

8. What is the second common multiple of 6 and 9?

9. Look at the number line below. What is the decimal represented by the letter A?



10. Express 7.40 as a fraction. Reduce your answer to the simplest form.

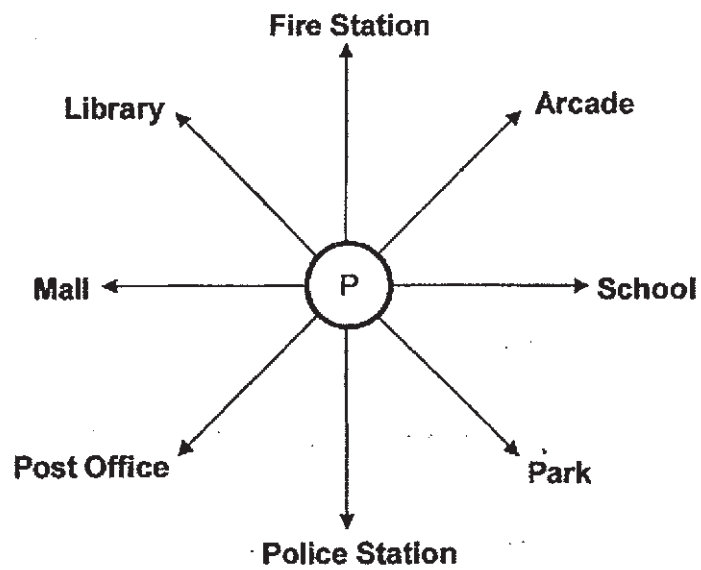
11. Miss Lee bought a ribbon 2 m long. She cut it into two pieces. The first piece was 1.15 m long. What was the length of the second piece of ribbon?

m

12. What is the missing number?

$$\boxed{?} + 7.9 = 15.7$$

13. Anna is standing at point P. After turning 225° anticlockwise, she is facing the park. Where was Anna facing at first?



14. A bookshop opens at 9.45 a.m. and closes at 5.30 p.m. each day. How long does the bookshop stay open each day? Give your answer in hours and minutes.

min

15. Ken is given the following cards as shown below:

$\frac{15}{1000}$

23 tenths

$4\frac{9}{100}$

He chooses a card which has the greatest value and another card which has the smallest value. What is the total value of these two selected cards? Round your answer to 1 decimal place.

--

Section C: Problem Sums (5 x 4 = 20 marks)

Read the following problem sums carefully. You may draw models to help you. Show all workings clearly and write your answers in the spaces provided.

16. Ben spent 2 hours 35 minutes on his Music lesson and spent the next 40 minutes on his swimming lesson. He started his Music lesson at 10.20 a.m.
- a) At what time did Ben finish his swimming lesson?
- b) How long did Ben spend in total for his Music and swimming lesson?

Working

Ans : a) _____ [2]

b) _____ [2]

17. Shop A, Shop B and Shop C sold a total of 2385 books in May and June. Shop A sold twice as many books as Shop B. Shop C sold thrice as many books as Shop A.
- a) How many books did Shop B sell?
- b) The total number of books sold in June is four times as many as the total number of books sold in May. How many books did the shops sell in May?

Working

Ans : a) _____ [2]

b) _____ [2]

18. Jack collected 180 bottle caps. Jack collected 3 times as many bottle caps as Peter. Andy collected 76 bottle caps less than Jack. How many more bottle caps did Andy collect than Peter?

Working

Ans : _____ [4]

19. Bala had \$56.25. His grandmother gave him \$80. He spent \$59.70 on a watch. How much money had he left?
Round your answer to the nearest ten dollars.

Working

Ans : _____ [4]

20. Meiling's age this year is a factor of 66. Four years ago, her age was a multiple of 6. What is Meiling's age this year?

Working

Ans : _____ [4]

- End of Paper -

SCHOOL : HENRY PARK PRIMARY SCHOOL

LEVEL : PRIMARY 4

SUBJECT : MATH

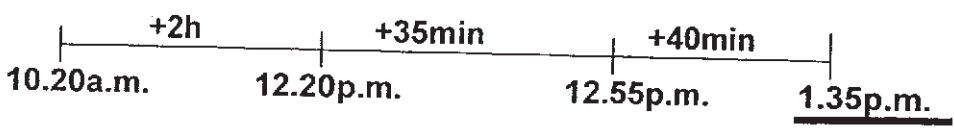
TERM : 2019 CA2

BOOKLET A

Q 1	Q2	Q3	Q4	Q5
1	2	3	3	3

BOOKLET B

Q6)	8.02 , 2.08 , 0.82 , 0.28
Q7)	10
Q8)	36
Q9)	5.17
Q10)	$7\frac{2}{5}$
Q11)	.85m
Q12)	7.8
Q13)	Fire-Station
Q14)	7h 45min
Q15)	4.1

Q16)	<p>a)</p>  <p>b) $2\text{h } 35\text{min} + 40\text{min} = 3\text{h } 15\text{min}$</p>
Q17)	<p>a) $2385 \div 9 = 265$ b) $2385 \div 5 = 477$</p>
Q18)	<p>$180 \div 3 = 60$ $180 - 76 = 104$ $104 - 60 = 44$</p>
Q19)	<p>$56.25 + 80 = 136.25$ $136.25 - 59.70 = 76.55$ $76.55 \approx \\$80$</p> <p><u>Method 2</u></p> <p>$80 - 59.70 = 20.30$ $56.25 + 20.30 = 76.55$ $76.55 \approx \\$80$</p> <p><u>Method 3</u></p> <p>$59.70 - 56.25 = 3.45$ $80 - 3.45 = 76.55$ $76.55 \approx \\$80$</p>
Q20)	<p>$66 = 1 \times 66$ 2×33 $3 \times (22)$ 6×11 ANS: 22</p>