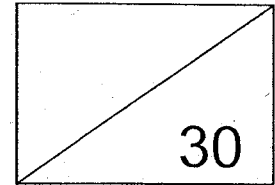


Red Swastika School
Primary 3
Class Test 1
Mathematics



Name: _____ ()

Date: 28 February 2018

Class: _____

Duration: 50 minutes

Parent's Signature: _____

Section A: 5 Questions (2 marks each)

Choose the correct answer and write its number in the brackets provided.

1. Find the difference between 6598 and 325.

- (1) 3348
- (2) 6273
- (3) 6873
- (4) 6923

()

2. What is 63 tens more than 7942?


- (1) 7312
- (2) 7879
- (3) 8005
- (4) 8572

()

3. What is the greatest 4-digit odd number that can be formed using the digits 4, 5, 2 and 8?

- (1) 2458
- (2) 2485
- (3) 8425
- (4) 8542

()



4. In the number 1349, the value of the digit _____ is the smallest.

- (1) 1
- (2) 9
- (3) 3
- (4) 4

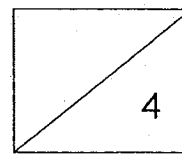
()

5. What is the missing number?

2785, 2970, 3155, 3340, _____, 3710, 3895

- (1) 3155
- (2) 3425
- (3) 3525
- (4) 3625

()

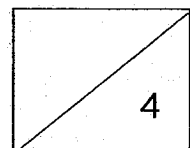


10. I am a 3-digit number.
The digit in my ones place is the greatest even number.
The digit in my tens place is 3 less than the digit in my ones place.
The digit in my hundreds place is 2 more than the digit in my tens place.
What number am I?

Ans: _____

11. The sum of 3 numbers is 9133. If the first number is 987 and the second number is 3340, what is the third number?

Ans: _____



Section C: 2 Questions (4 marks each)

Do the following sums. Show your workings and statements clearly.

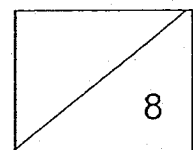
12. Mr Lee had 3200 ducks and chicken for sale. He had 796 ducks and the rest were chickens. How many more chickens than ducks did Mr Lee have?


Ans: _____

13. Javier has 2343 books. Susan has 589 more books than Javier. How many books do they have altogether?

Ans: _____

End of paper





EXAM PAPER 2018 (P3)

SCHOOL : RED SWASTIKA

SUBJECT : MATHEMATICS

TERM : CA1

Q1	Q2	Q3	Q4	Q5
2	4	3	2	3

6) five thousand, eight hundred and twelve

7) 6021

8) 4884, 8448, 8484, 8844

9) 11

10) 758

11) 4860

12) $3200 - 796 = 2404$

$$2404 - 796 = 1608$$

13) $2343 + 589 = 2932$

$$2932 + 2343 = 5275$$

