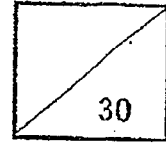




Pei Hwa Presbyterian Primary School
Mathematics
Primary 3
Weighted Assessment 1



Name : _____ ()

Class: _____

Date : _____

Parent's Signature: _____

Section A: Multiple Choice Questions (10 marks)

Questions 1 to 5 carry 2 marks each.

For each question, four options are given. One of them is the correct answer.

Make your choice (1, 2, 3 or 4) and write your choice (1, 2, 3 or 4) in the brackets provided.

1 Which of the following is nine thousand, eight hundred and fifty in numerals?

(1) 985

(2) 9085

(3) 9805

(4) 9850

()

2 What is the missing number in the box?

$$9105 = 9000 + \boxed{?} + 5$$

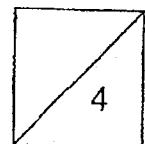
(1) 1000

(2) 100

(3) 10

(4) 1

()



3 Which of the following is false?

(1) $920 < 4100$

(2) $1300 > 1100$

(3) $3690 < 3660$

(4) $5082 < 5089$

()

4 Find the difference between 3984 and 7002.

(1) 3018

(2) 3988

(3) 4982

(4) 4988

()

5 Joselin bought a table for \$72.15.
She gave the cashier two \$50 notes.
How much change should she get?

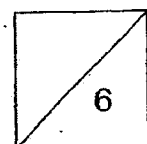
(1) \$32.95

(2) \$32.15

(3) \$28.95

(4) \$27.85

()



Section B: Short-answer Questions (12 marks)

Questions 6 to 11 carry 2 mark each.

Show your working clearly in the space below each question and write your answers in the spaces provided. For questions which require units, give your answers in the units stated.

6 Look at the following number pattern. What are the missing numbers?

928, 925, 920, 917, 912, _____, _____

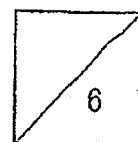
Ans: _____, _____

7 Find the sum of the values of the digits '5' in the numbers 5847 and 250.

Ans: _____

8 Write two numbers that will give a sum of 1142.

Ans: _____ and _____



- 9 Wayne formed some numbers from the digits.



Two of the numbers he formed were 1098 and 1908.

Each statement is either true or false from the information given.
Put a tick (✓) to indicate your answer.

	True	False
a) In 1098, the digit 9 is in the hundreds place.		
b) $1908 > 1098$		
c) The greatest possible 4-digit number he can form is 9108.		

-
- 10 Serena bought a pencil box for \$28.50.
She bought a bag that cost \$15.90 more.
How much did she pay for the bag?

Ans: \$ _____

-
- 11 Jason has \$6.50.
a) Which food item can he buy?
b) How much change should he get?



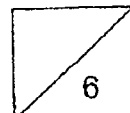
Burger
\$7.50



Fries
\$4.40

a) food: _____

b) change: \$ _____



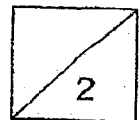
Section C: (8 marks)

For questions 12 and 14, show your working clearly and write your answers in the spaces provided. The number of marks available is shown in the brackets [] at the end of each question or part-question.

- 12 Thomas has 392 Book Bug cards.
He has 67 fewer Book Bug cards than Sharyn.
How many Book Bug cards does Sharyn have?

Working

Ans: _____ [2]

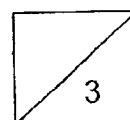


Working

- 13 There were 8009 children and 9008 adults at a party.
- (a) Were there more children or adults at the party?
 - (b) Find the difference between the number of children and adults at the party.

Ans: (a) _____ [1]

(b) _____ [2]




14 Candy had \$50.

She wanted to buy a chocolate cake for her mother's birthday.

The prices of a chocolate cake sold in Shop A and B are shown below.

(a) Which shop should she buy from?

(b) Find the difference in the price of the chocolate cakes sold in these two shops.



Price of
chocolate cake
in Shop A:
\$49.85

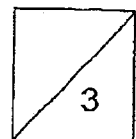


Price of
chocolate cake
in Shop B:
\$64.50

Ans: (a) _____ [1]

(b) _____ [2]

Working



End of paper



YEAR : 2023
 LEVEL : PRIMARY 3
 SCHOOL : PEI HWA PRESBYTERIAN PRIMARY SCHOOL
 SUBJECT : MATHEMATICS
 TERM : WEIGHTED ASSESSMENT 1 & 2

WEIGHTED ASSESSMENT 1

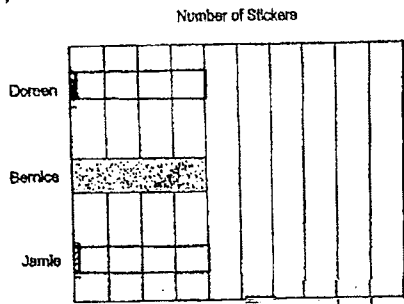
Q1	4	Q2	2	Q3	3	Q4	1	Q5	4
Q6	909, 904	Q7	5050	Q8	1000 and 142	Q9	a) False b) True c) False	Q10	\$44.40
Q11	\$44.40	Q12	392 + 67 = 459 Sharyn had 459 book bug cards.	Q13	9008 - 8009 = 999 a) adults b) 999	Q14	\$64.50 is more than \$50.00 64.50 - 49.85 = \$4.65 a) Shop A b) \$14.65		

WEIGHTED ASSESSMENT 2

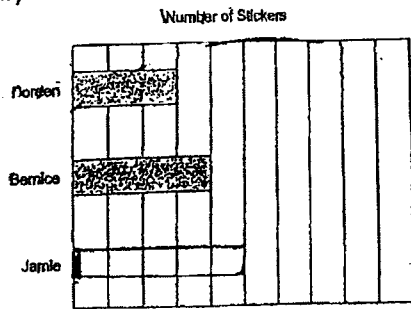
Q1	3	Q2	2	Q3	3	Q4	4	Q5	1
Q6	1	Q7	2	Q8	2	Q9	4	Q10	4
Q11	4	Q12	a) less b) more	Q13	3	Q14	9 x 5 = \$45	Q15	105 ÷ 7 = 15
Q17	a) 16 b) 8	Q16	720 - 24 = 696 She gave 696 of beads to each of her 4 friends.	Q18	c) Ben d) Oliver	Q19	a) False b) True	Q20	a) 23 + 15 = 38 b) 3D
Q21	a) 80 + 64 = 144 b) 144 x 6 = 864	Q22	a) 235 x 7 = 1645 b) 235 - 61 = 174 174 ÷ 6 = 29						

Q23

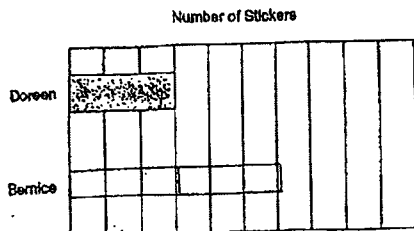
a)



b)



c)



d) Circle *Doreen*