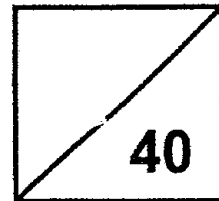




ROSYTH SCHOOL
2018 P2 HOLISTIC ASSESSMENT 2
MATHEMATICS
TOPICAL TEST



Name: _____

Class: Pr 2- _____ Register No. _____

Duration: 50 mins

Date: 11th May 2018

Parent's Signature: _____

Instructions to Pupils:

1. Do not open this booklet until you are told to do so.
2. Follow all instructions carefully.
3. This paper consists of 3 parts, Sections A, B and C.
4. ANSWER ALL THE QUESTIONS.
5. Check all answers carefully.

	Maximum	Marks Obtained
Section A	12	
Section B	16	
Section C	12	
Total	40	

* This paper consists of 9 printed pages altogether (including the cover page).
This paper is not to be reproduced in part or whole without the permission of the Principal.

SECTION A (6 x 2 marks)

There are 6 questions in this section.

Read the questions carefully. Choose the correct answer.

Write its number 1, 2, 3 or 4 in the brackets provided.

1. 9 twos = _____

(1) 9

(2) 7

(3) 11

(4) 18

()

2. 30 apples are packed equally into 5 bags.
There are _____ apples in each bag.

(1) 6

(2) 7

(3) 8

(4) 9

()

3. The height of the classroom door is about _____.

(1) 2 cm

(2) 2 m

(3) 20 cm

(4) 20 m

()

4. $758 + 215 =$ _____

(1) 543

(2) 563

(3) 943

(4) 973

()

5. 7 groups of 4 = x 4

(1) 4

(2) 7

(3) 11

(4) 28

()

6. A plate of chicken rice costs _____.



(1) \$ 2.30

(2) \$ 2.32

(3) \$ 4.20

(4) \$ 4.30

()


SECTION B (8 x 2 marks)

There are 8 questions in this section.

Read the questions carefully. Write your answer in the box provided.

Show all your workings clearly.

7.

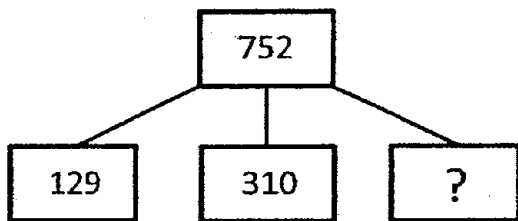


There are groups of

8. Alice adds 3 numbers together to get 752.

Two of the numbers are 129 and 310.

What is the third number?



Ans:

9. Circle the most expensive item.



\$ 83.50

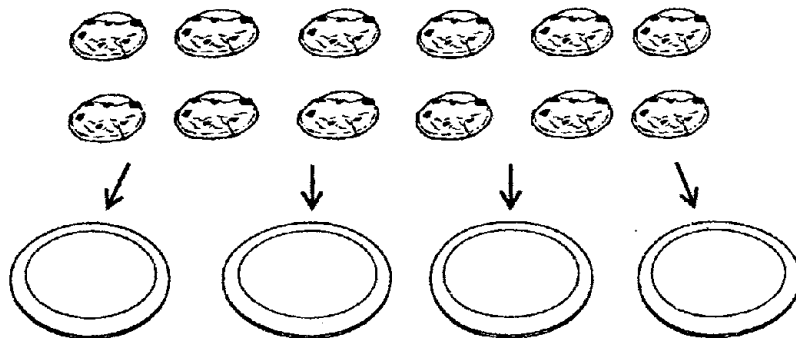


\$ 83.05




\$ 85.30

10. 12 cookies are placed onto 4 equal plates.
How many cookies are there on each plate?



Ans:

Study the graph carefully.

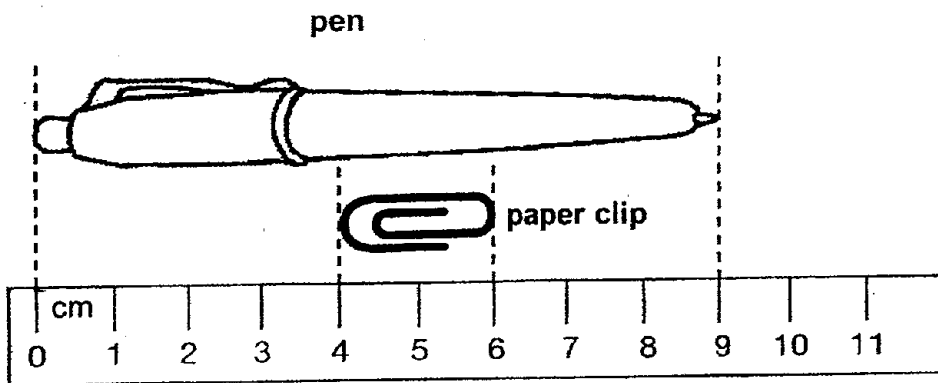


11. Siti sold books in a month.

12. Brian sold more books than Li Yan.

Study the picture below carefully.

Use the picture to answer questions 13 and 14.



13. The length of the pen is _____.

Ans: cm

14. The paper clip is _____ shorter than the pen.

Ans: cm

SECTION C (3 x 4 marks)

There are 3 questions in this section.

Read the questions carefully. Write your number sentences.

Show all your workings clearly.

15. Ben bought a shirt and a watch.

The watch cost \$93.

The shirt cost \$42 less than the watch.

(a) How much did the shirt cost?

(b) How much did he spend altogether?

Working

(a) The shirt cost \$ _____.

(b) Ben spent \$ _____ altogether.

Working

16. There are 320 children.

146 are boys and the rest are girls.

(a) How many girls are there?

(b) How many more girls than boys are there?

(a) There are _____ girls.

(b) There are _____ more girls than boys.

17. Sam has 10 boxes of toys.

There are 4 toys in each box.

(a) How many toys are there altogether?

(b) He packs all the toys into bags of 5.

How many bags of toys are there?

Working

(a) There are _____ toys.

(b) There are _____ bags.

End of paper
Have you checked your work?
Rosyth School

