

Pei Chun Public School
Semestral Assessment – 2016
Mathematics
Primary 2

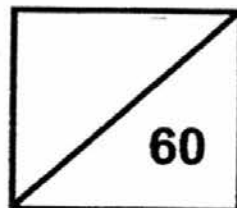
Name: _____ () Date: 25 October 2016

Class: Primary 2 ____

Time: 1 h 30 min

Marks:

Maths Teacher: _____



Section A (5 × 2 marks)

For each question, choose the correct answer and write its number in the brackets provided.

1. What is nine hundred and seventeen in numeral?

(1) 907

(2) 917

(3) 970

(4) 971

()

2. What is the missing number in the box?

$$800 + \boxed{} + 4 = 864$$

(1) 6

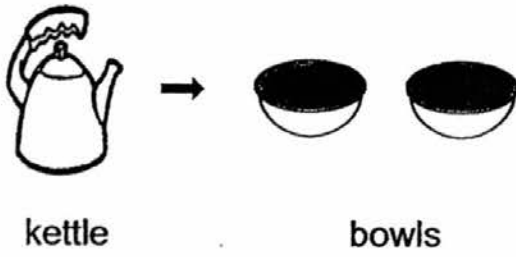
(2) 60

(3) 64

(4) 600

()

3. A kettle of water can fill exactly two bowls.



How many bowls of water can 3 such kettles fill?

(1) 6

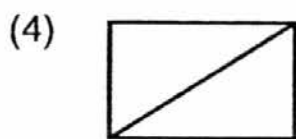
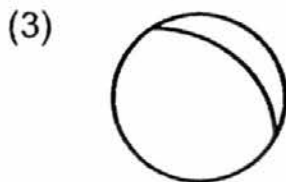
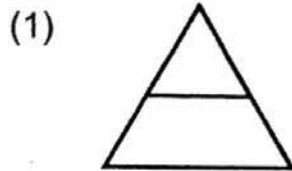
(2) 5

(3) 3

(4) 4


()

4. Which one of the following shapes is divided into equal parts?



()

5. The afternoon session of a school starts at 12.25 p.m.
Minah was 15 minutes late for school.
What time did she reach school?



()

Section B (12 × 1 mark)

Questions 6 to 17 carry 1 mark each. For questions that require units, give your answers in the units stated.

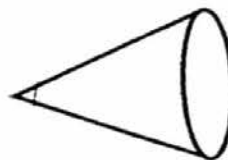

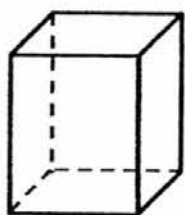
6. Write the missing number in the blank.

$$6 \text{ hundreds} + 3 \text{ ones} = \underline{\hspace{2cm}}$$



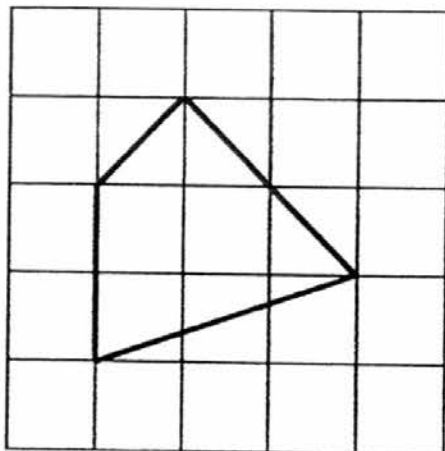
7. Write the missing number in the blank.

$$4 + 4 + 4 + 4 + 4 = \underline{\hspace{2cm}} \times 4$$

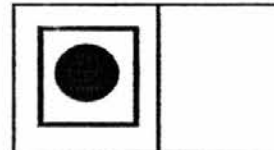


8. Circle the solid that has 1 flat face and 1 curved surface.




9. Copy the shape below to the square grid on the right.




10. Tick (✓) the correct answer in the box provided.



11. The 2 clocks below show the starting time and the ending time of a movie. How long is the movie?




Start



End

_____ h

12. What fraction of the figure below is **not** shaded?



13. Arrange the fractions in order. Begin with the greatest fraction.

$\frac{5}{7},$

$\frac{3}{7},$

$\frac{6}{7}$

_____, _____, _____
greatest

14. Circle the stars to show 6 threes.



15. Which is the cheapest item (A , B or C)?

Item A



\$1.25

Item B



\$1.75

Item C



\$1.15

Item _____

16. Ali wakes up every morning at the time shown below.



What time does he wake up every morning?

_____ a.m.

17. Siti spent \$9 on 3 different toys below.

Circle the 3 toys that Siti bought.



\$1.50



\$1



\$3



\$5



\$5.50

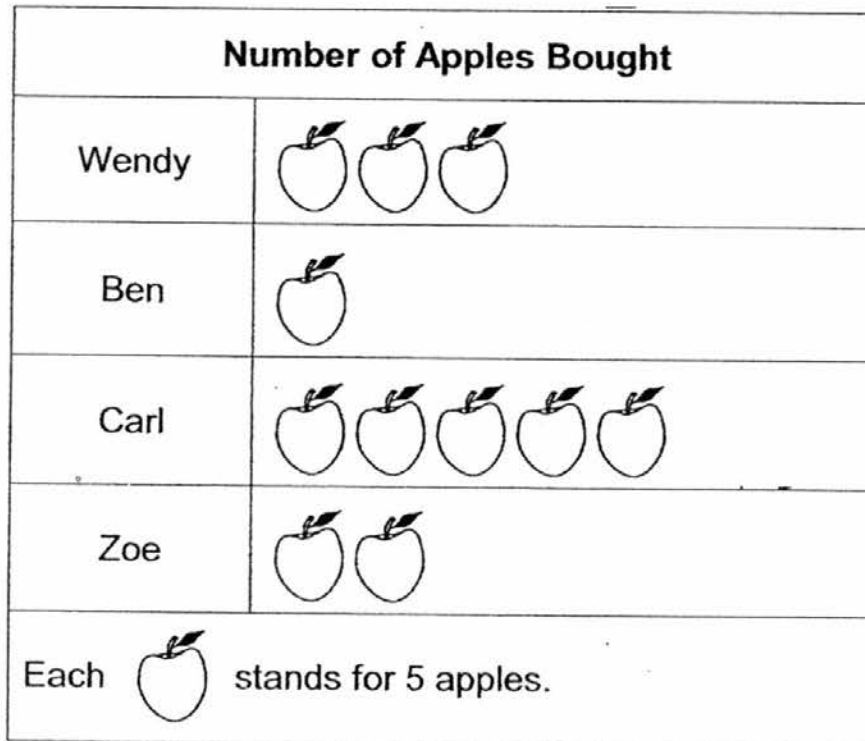


\$9

Section C (8 × 2 marks)

Questions 18 to 25 carry 2 marks each. Show your working clearly in the space below each question. Write your answers in the blanks provided. For questions that require units, give your answers in the units stated.

18. The picture graph shows the number of apples bought by four people.




- (a) How many apples did Carl buy?

_____ apples


- (b) How many people bought **fewer** than 15 apples?

_____ people


19. The pattern below is made up of black and white squares.



Pattern 1



Pattern 2



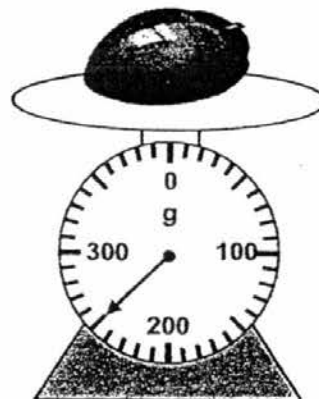
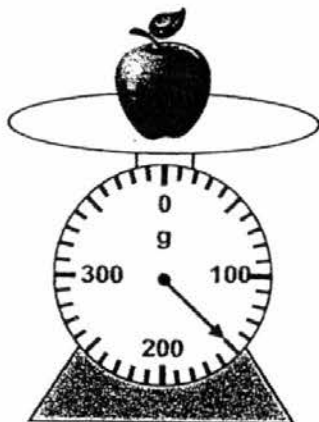
Pattern 3

(a) What is the total number of squares in Pattern 5?

(b) In which pattern will there be 6 black squares?

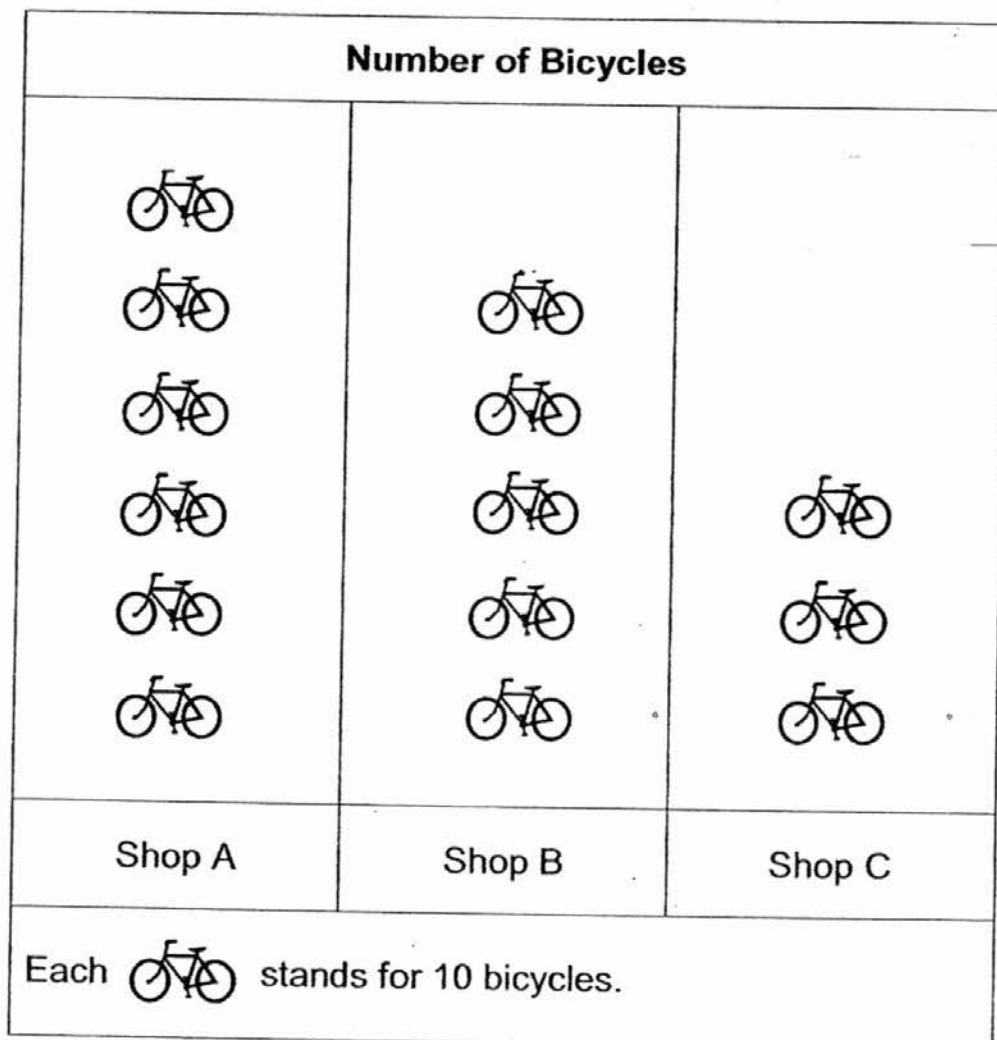
Pattern _____

20. What is the difference in mass between the apple and the mango?



_____ g

21. The graph below shows the number of bicycles sold by 3 shops.



Which 2 shops sold a total of 90 bicycles?

Shop _____ and Shop _____


22. Ravi bought some candies for \$1.20.
He received the change shown below.




How much money did Ravi give the cashier?

\$ _____

23. The picture graph shows the number of stickers collected by 4 pupils.

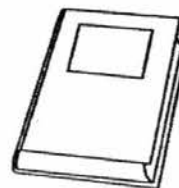


The 4 pupils collected 30 stickers altogether.

How many stickers does each  stand for?

_____ stickers

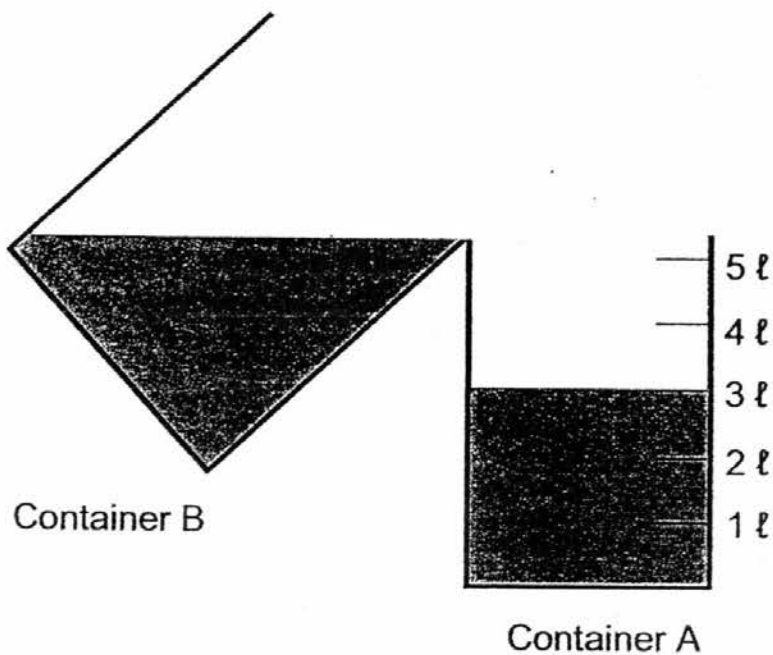
24. Mr Chew wants to buy 7 books at \$3 each.
He has \$10 in his wallet.
How much **more** money does he need?



\$3 each

\$ _____

25. There were 3 ℓ of water in container A at first.
Ali poured some water from container B into container A until
container A is filled with 5 ℓ of water.
There were 4 ℓ of water left in container B.
How many litres of water were there in Container B at first?



_____ ℓ

Section D (22 marks)

For questions 26 to 31, show your working clearly and write your answers in the spaces provided. The number of marks available is shown in brackets [] at the end of each question or part-question.

26. Alice had 300 beads.

After making some necklaces, she had 165 beads left.

How many beads were used to make the necklaces? [3]

She used _____ beads to make the necklaces.

27. The prices of a farm tour tickets are as shown below.

Ticket Prices	
Adult	\$10
Child	\$6

- (a) How much will the tickets for 3 children cost? [2]

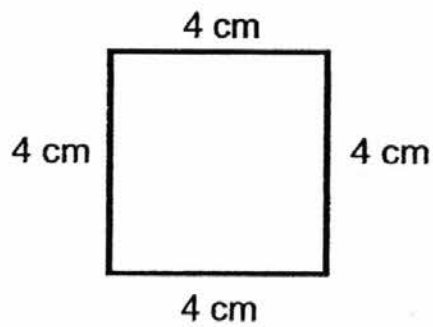
The tickets for 3 children will cost \$_____.

- (b) Mr and Mrs Lok went on the farm tour with their 3 children. How much did they pay altogether? [2]

They paid \$_____ altogether.

28. Mark had a piece of string.

After making the square as shown below, he had 24 cm of the string left.



- (a) What was the length of the string used to make the square? [2]

The length of the string used was _____ cm.

- (b) How long was the piece of string? [2]

The string was _____ cm long.

29. Mrs Uma bought 50 cupcakes. She gave 18 cupcakes to her neighbour and put the rest equally into 4 boxes. How many cupcakes were there in each box?

[3]

There were _____ cupcakes in each box.

30. A baker had 8 kg of flour at first.
After buying some more flour, he had a total of
35 kg of flour.

(a) How much flour did he buy?

[2]

He bought _____ kg of flour.

(b) The flour was sold in packets of 3 kg. How many
packets of flour did he buy?

[2]

He bought _____ packets of flour.

31. Mary has a mass of 36 kg.
Peter is 9 kg heavier than Mary.
John is as heavy as Peter.

(a) How heavy is John?

[2]

John is _____ kg.

(b) What is the total mass of the 3 children?

[2]

Their total mass is _____ kg.

End of Paper

Set by : Mrs Yazid and Mdm Wong Wan Sian

EXAM PAPER 2016

LEVEL : P2
SCHOOL : PEI CHUN PUBLIC SCHOOL
SUBJECT : MATHEMATICS (SEMESTRAL ASSESSMENT)
TERM : 25 October 2016

SECTION A

Q1	Q2	Q3	Q4	Q5
2	2	1	4	3


SECTION B

Q6. 603 Q7. 5

Q8.



Q9.



Q10.




Q11. 2 hours

Q12. $\frac{5}{8}$

Q13. $\frac{6}{7}$, $\frac{5}{7}$, $\frac{3}{7}$


Q14.



Q15. Item C

Q16. 8.15 a.m.

Q17.



SECTION C

Q18. a) 25

b) 2

Q19. a) 10

b) Pattern 6

Q20. $250 - 150 = 100$ g

Q21. A and C

Q22. $1.20 + 0.80 = \$2$

Q23. $30 \div 10 = 3$

Q24. $7 \times 3 = 21$

$21 - 10 = \$11$

Q25. $5 - 3 = 2$

$2 + 4 = 6$

SECTION D

Q26. $300-165=135$

Q27. a) $3 \times 6 = \$18$ b) $20 + 18 = \$38$

Q28. a) $4 \times 4 = 16\text{cm}$ b) $24 + 16 = 40\text{cm}$

**Q29. $50 - 18 = 32$
 $32 \div 4 = 8$**

Q30. a) $35 - 8 = 27 \text{ kg}$ b) $27 \div 3 = 9$

Q31. a) $36 + 9 = 45 \text{ kg}$ b) $36 + 45 + 45 = 126 \text{ kg}$

THE END