

**Methodist Girls' School (Primary)**

**End - of - Year Examination 2007**

**Primary Two**

**Mathematics**

**Name:** \_\_\_\_\_ (            )

**Class:** Primary 2. \_\_\_\_\_

**Date:** \_\_\_\_\_

**Parent's Signature:** \_\_\_\_\_

<b>Sections A and B</b>	<b>80</b>
<b>Section C</b>	<b>20</b>
<b>TOTAL</b>	<b>100</b>

Section A (15 x 2m)

Choose the correct answer for each question and write its number in the brackets provided.

1. 672 is 100 more than \_\_\_\_\_.

- (1) 572
- (2) 662
- (3) 682
- (4) 772

( )

2. Which letter below has both curved and straight lines?

**A M R E**

- (1) A
- (2) M
- (3) R
- (4) E

( )

3. Sharon drinks 4 litres of orange juice in a week.  
How many litres of orange juice does she drink in 7 weeks?

- (1) 11
- (2) 18
- (3) 24
- (4) 28

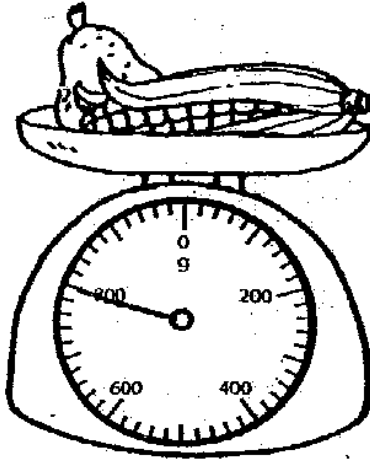
( )

4. Add 4 tens to 247. The answer is \_\_\_\_\_.

- (1) 207
- (2) 243
- (3) 251
- (4) 287

( )







5. The mass of the pear is 200 g.



What is the mass of the corn?

- (1) 60 g
- (2) 60 kg
- (3) 600 g
- (4) 600 kg

( )

6. If      stand for 15 toy cars, then  stands for \_\_\_\_\_ toy cars.

- (1) 10
- (2) 20
- (3) 3
- (4) 5

( )

7.  $560 + 300 = \boxed{\phantom{000}} - 100$


What is the missing number in the box?

- (1) 660
- (2) 760
- (3) 860
- (4) 960

( )

The picture graph below shows the number of presents that 4 children have.

Study the graph carefully. Answer Questions 8 and 9.



Each  stands for 3 presents.

8. Who has the most number of presents?
- (1) Mike  
(2) Lynn  
(3) Peter  
(4) Sumei ( )
9. Lynn has \_\_\_\_\_ more presents than Sumei.
- (1) 6  
(2) 2  
(3) 3  
(4) 4 ( )
10. Which of the following is not the same as  $2 \times 4$  ?
- (1)  $1 \times 8$   
(2)  $2 + 2 + 2 + 2$   
(3)  $3 + 2 + 2 + 1$   
(4)  $4 \div 4 + 4 + 4$  ( )

11.

Which of the following is the largest fraction?

(1)  $\frac{5}{7}$

(2)  $\frac{2}{7}$

(3)  $\frac{6}{7}$

(4)  $\frac{4}{7}$

( )

12.

The time is \_\_\_\_\_.



(1) 1.10

(2) 1.50

(3) 2.50

(4) 10.08

( )

13.

How many semicircles are there in a circle?

(1) 1

(2) 2

(3) 3

(4) 4

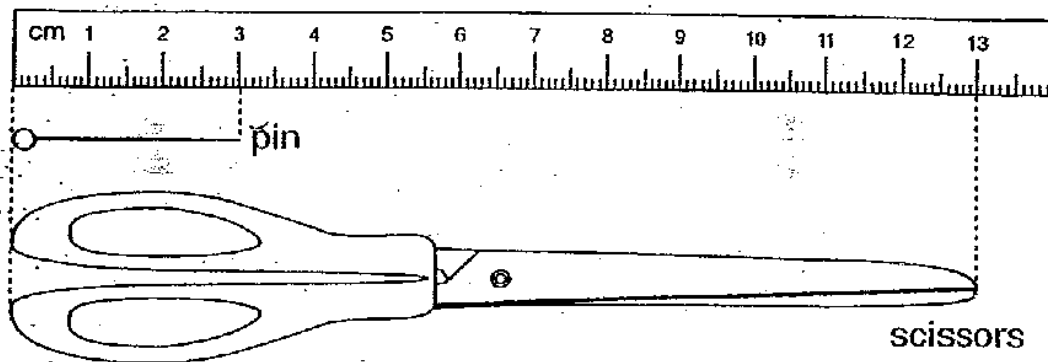
( )

14. Rebecca has \$23 more than Jane.  
If Rebecca has \$58, how much money does Jane have?

- (1) \$ 25
- (2) \$ 35
- (3) \$ 71
- (4) \$ 81

( )

15.



The pair of scissors is \_\_\_\_\_ cm longer than the pin.

- (1) 9
- (2) 10
- (3) 13
- (4) 16

( )

**Section B (25 x 2m)**

Write the correct answers in the blanks provided. Show your working.

16. 622 is \_\_\_\_\_ less than 632.

17.  $3 + 3 + 3 + 3 + 3 + 3 + 3 =$  \_\_\_\_\_  $\times 3$

18.  $\frac{2}{9} + \frac{4}{9} =$  \_\_\_\_\_

19.  $\frac{3}{11}$  and \_\_\_\_\_ make 1 whole.

20. \$1.00 = \_\_\_\_\_ twenty-cent coins

21. After selling 179 curry puffs, Uncle Raj had 52 curry puffs left. How many curry puffs did he have at first?  
\_\_\_\_\_

22. Wen Jie scored 85 marks for English, 90 marks for Maths and 75 marks for Chinese. What was his total score for the 3 subjects?  
\_\_\_\_\_

23. Write the missing number in the box.

	5	2	7
+	4	<div style="border: 1px solid black; width: 30px; height: 20px; display: inline-block;"></div>	8
	9	6	5

24. Aunt Susie bought 6 bottles of orange juice.  
She paid \$60 altogether.  
How much did 1 bottle of orange juice cost?

\$ \_\_\_\_\_

25. A taxi has 4 wheels.  
How many wheels do 8 taxis have altogether?

\_\_\_\_\_

26. Study the picture below.



\$8.00



\$4.60

What is the total cost of the doll and the box of crayons?


\$ \_\_\_\_\_



27. A movie started at 5 p.m.  
It lasted for 2 hours.  
What time did the movie end?

\_\_\_\_\_ p.m.

28. Draw the minute hand to show the time on the clock.



6.45

29. Study the question and fill in the blank.




$$5 \times \text{flower} = 35$$

$$4 + 9 = \text{phone}$$

$$\text{flower} + \text{phone} = \underline{\hspace{2cm}}$$

The picture graph below shows the number of pupils who have different pets in a class.

Study it and answer Questions 30 to 32.

Cat	
Dog	
Hamster	


Each  stands for 2 pupils.

30. The \_\_\_\_\_ is the most popular pet.

31. \_\_\_\_\_ pupils keep cats as pets.

32. \_\_\_\_\_ more pupils keep hamster than dog as pets .

33.



The figure above has \_\_\_\_\_ straight lines and  
\_\_\_\_\_ curved lines.

All the water in these containers is used to fill up the mugs completely.

Study the pictures below and answer Questions 34 and 35.



Vase



Bottle



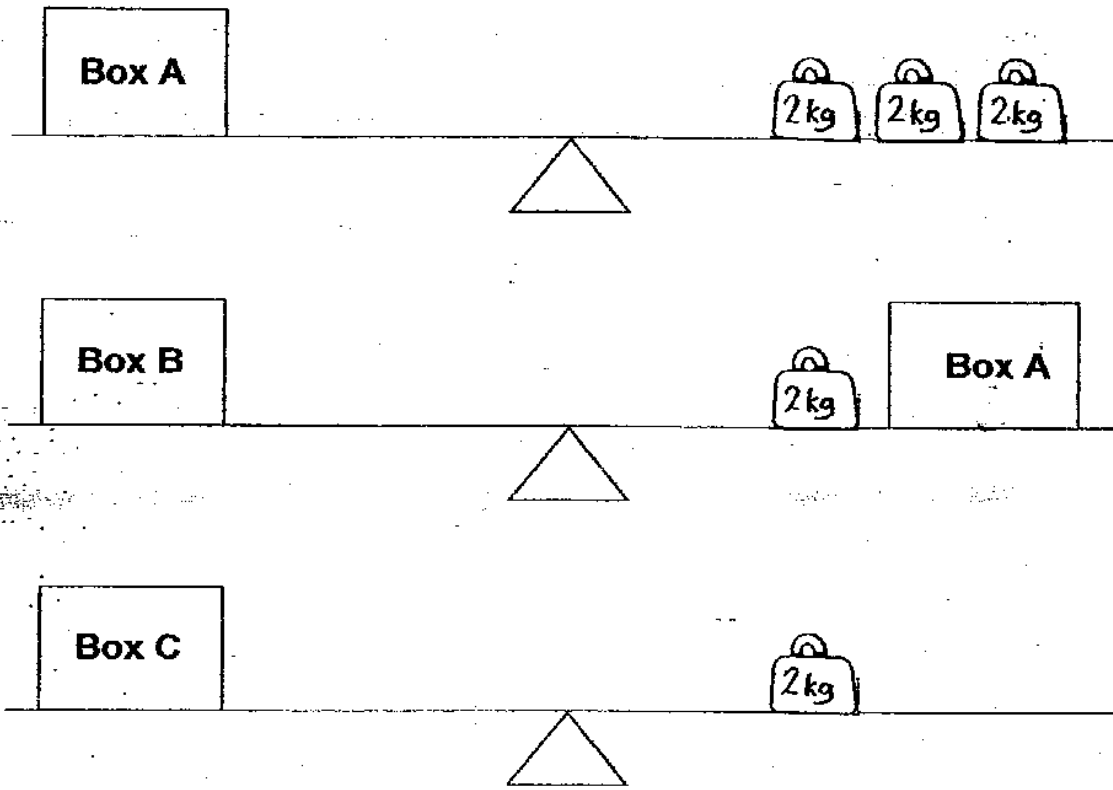
Kettle



34. The \_\_\_\_\_ has the most amount of water.

35. The kettle has \_\_\_\_\_ more mugs of water than the vase.

36. Study the picture below.




Box \_\_\_\_\_ is the heaviest.

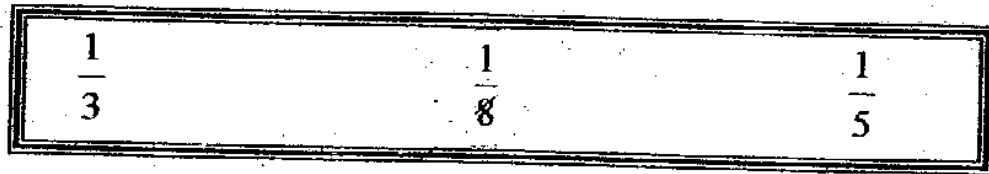
37. Draw the missing shape in the pattern.



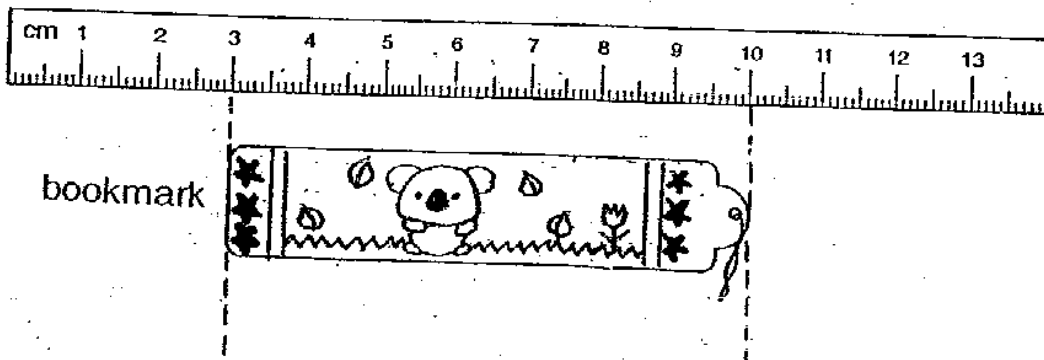
38. What fraction of this shape is shaded?



39. Circle the smallest fraction.



40. Study the picture below carefully.



The length of the bookmark is \_\_\_\_\_ cm.

Section C (5 x 4m)

Solve these problems. Show your working clearly.

41. Daniel and Raju have 175 stickers altogether.  
Raju has 63 stickers.  
How many more stickers does Daniel have than Raju?

Daniel has \_\_\_\_\_ stickers more than Raju.

42. Aunt Susan baked 4 pizzas.  
Each pizza was cut into 6 slices.  
Her children ate 9 slices of pizza.  
How many slices of pizza were left?

\_\_\_\_\_ slices of pizza were left.

43. A tank contained 45 litres of water.  
Matthew poured another 5 pails of water into it.  
Each pail contained 3 litres of water.  
How much water is in the tank now?

There is \_\_\_\_\_ litres of water in the tank now.


44. Randy had \$100.  
He bought a towel for \$8 and a pair of jeans for \$65.  
How much money had he left?

He had \_\_\_\_\_ left.

45. Mrs Li took her 8-year old twin daughters to the cinema to watch a movie together.  
How much did she have to pay altogether?

	
<b>Movie Tickets</b>	
<b>Adult</b>	<b>\$10</b>
<b>Child</b>	<b>\$ 6</b>

Mrs Li paid \_\_\_\_\_ altogether.



**-END OF PAPER-**  
**-PLEASE CHECK YOUR WORK CAREFULLY-**



# ANSWER SHEET

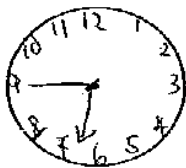
M G S PRIMARY SCHOOL - PRIMARY 2 MATHEMATICS 2007  
SEMESTRAL ASSESSMENT (2)

1. 1
2. 3
3. 4
4. 4
5. 3
6. 3
7. 4
8. 1
9. 1

10. 4
11. 3
12. 2
13. 2
14. 2
15. 2
16. 10
17. 7
18. 6/9
19. 8/11
20. 5

21.  $179 + 52 = 231$
22.  $85 + 90 = 175$   
 $175 + 75 = 250$

23. 3
24. \$10
25. 32
26. \$12.60
27. 7.00p.m.
- 28.



29. 20
30. Hamster
31. 8
32. 10
33. 4, 4
34. Kettle
35. 5
36. B
37.
38. 1/4
39. 1/8
40. 7cm

41)  $175 - 63 = 112$   
 $175 - 112 = 63$   
 $112 - 63 = 49$   
Daniel has 49 stickers more than Raju.

42)  $6 \times 4 = 24$   
 $24 - 9 = 15$   
15 slices of pizza were left.

43)  $5 \times 3 = 15$   
 $15 + 45 = 60$   
There is 60 litres of water in the tank now.

44)  $8 + 65 = 73$   
 $100 - 73 = 27$   
He had \$27 left.

45)  $6 \times 2 = 12$   
 $12 + 10 = 22$   
Mrs Li paid \$22 altogether.