

TAO NAN SCHOOL

HOLISTIC ASSESSMENT MATHEMATICS REVIEW (2)

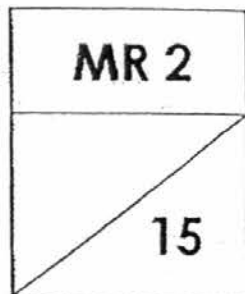
Name: _____ ()

Class : Pr 2 ()

Duration : 35 minutes

Date: _____

Parent's signature : _____



Section A (6 x 1 mark)

Choose the correct answer.

Write its number in the brackets provided.

1. $2 + 2 + 2 + 2 + 2 + 2 + 2 + 2 + 2 =$ _____ $\times 2$

(1) 8

(2) 9

(3) 10

(4) 18

()

2. **3** **x** **= 18**

What is the missing number?

(1) 6

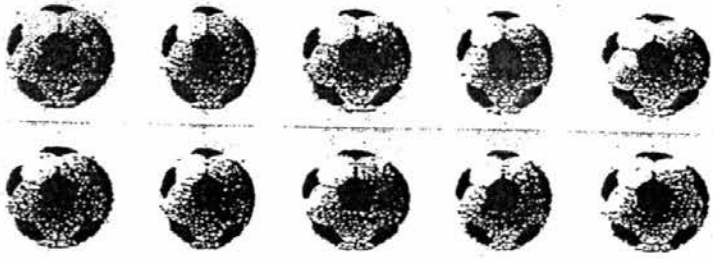
(2) 7

(3) 15

(4) 21

()

3. Look at the picture below. Which number sentence shows that 10 balls are put equally into 5 baskets?



(1) $10 + 5$


(2) $10 - 5$

(3) 10×5

(4) $10 \div 5$

()

4. A tricycle has 3 wheels.
How many wheels do 4 tricycles have?



(1) 7


(2) 12

(3) 15

(4) 16

()

5. Three oranges are sold for \$2.



Mr Ng spends \$ _____ if he buys 6 oranges.

(1) 6

(2) 12

(3) 3

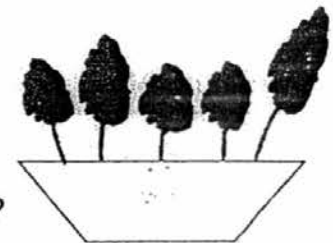
(4) 4

()

6. Sharon has 3 vases.

She puts 5 flowers into each vase.

How many flowers does she have altogether?



(1) 5

(2) 8

(3) 15

(4) 25

()

Section B (5 x 1 mark)

Read the questions carefully.

Write the correct answers in the spaces provided.

7. Complete the number pattern.

20 , 24 , 28 , , 36


8. If  +  = 6,

then  x  =

Look at the numbers below.



Write a **multiplication** and a **division** sentence using the given numbers.

9.  =

10.  =

11. What is the missing number?

Number of packets	2	4	7	8
Number of sweets	4	8	?	16

The missing number is

Section C (2 x 2 marks)

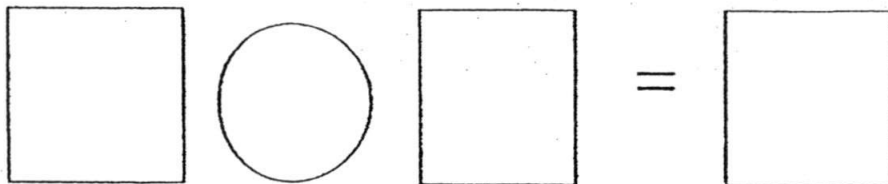

Read the questions carefully.

Write your answers in the spaces provided.

12. Mr Tan buys 25 mangoes.

He puts them equally into 5 baskets.

How many mangoes are there in each basket?

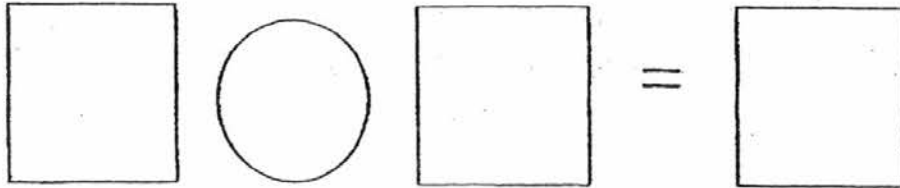


There are _____ mangoes in each basket.

13. A sticker album has 4 pages.

There are 6 stickers on each page.

How many stickers are there altogether?



There are _____ stickers altogether.

End Of Paper