

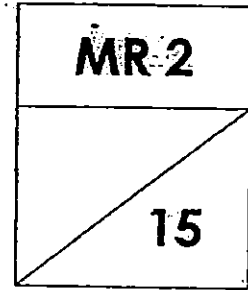
Name: \_\_\_\_\_ ( )

Class : Pr 2 ( )

Duration : 30 minutes

Date: 20 May 2015

Parent's signature : \_\_\_\_\_



**Section A** (6 x 1 mark)

**Choose the correct answer.**

**Write its number in the brackets provided.**

1. What is the same as 2 groups of 4 ?

(1) 6

(2) 2

(3) 8

(4) 16

( )

2. **5** x  = **25**

What is the missing number?

(1) 5

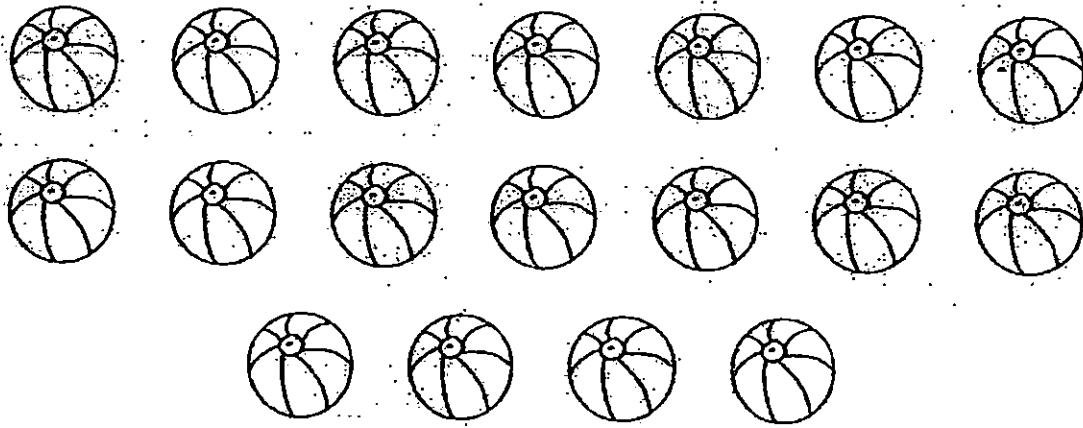
(2) 6

(3) 20

(4) 30


( )

3. Look at the picture below. We can put 18 balls into \_\_\_\_\_.



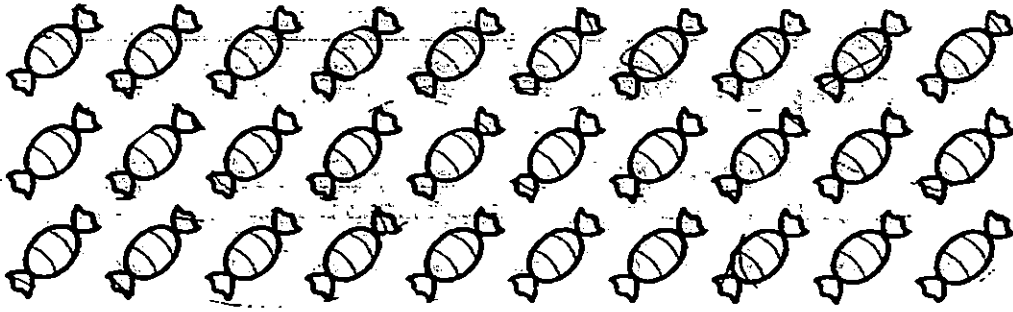
- (1) 3 groups of 5
- (2) 3 groups of 6
- (3) 4 groups of 4
- (4) 4 groups of 5 ( )

4. A dog has 4 legs.  
How many legs do 8 dogs have?



- (1) 12
- (2) 24
- (3) 32
- (4) 48 ( )

5. 10 children share 30 sweets equally.



Each child gets \_\_\_\_\_ sweets.

(1) 10

(2) 20

(3) 3

(4) 4

( )

6. A box of chocolates costs \$5.

Mabel has \$45.

How many boxes of chocolates can she buy?



\$5

(1) 50

(2) 40

(3) 8

(4) 9

( )

Read the questions carefully.

Write the correct answers in the boxes provided.

7.  $16 = \boxed{\phantom{00}}$  groups of 4


8. What is the missing number?

Number of bags	1	2	6	8	9
Number of oranges	10	20	60	?	90

The missing number is

Look at the picture below.

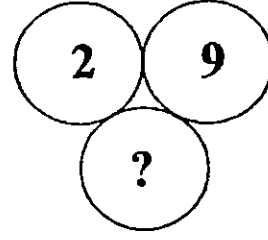
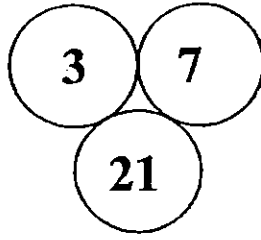
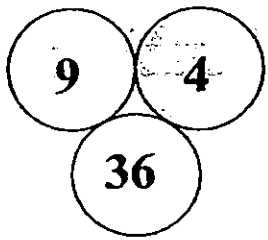
Then write a multiplication equation and a division equation about the doughnuts.



9.   $\times$   =

10.   $\div$   =

11. Study the pictures carefully and fill in the missing number.



The missing number is

**Section C** (2 x 2 marks)

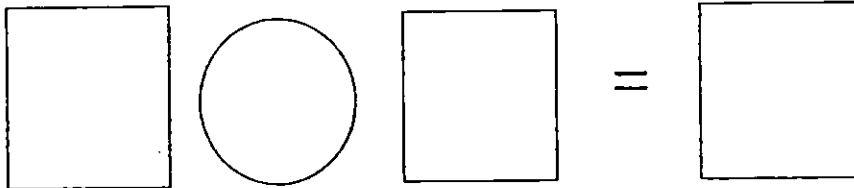
**Read the questions carefully.**

**Write your answers in the spaces provided.**

12. Pizza Parlour had 10 pizzas on display.

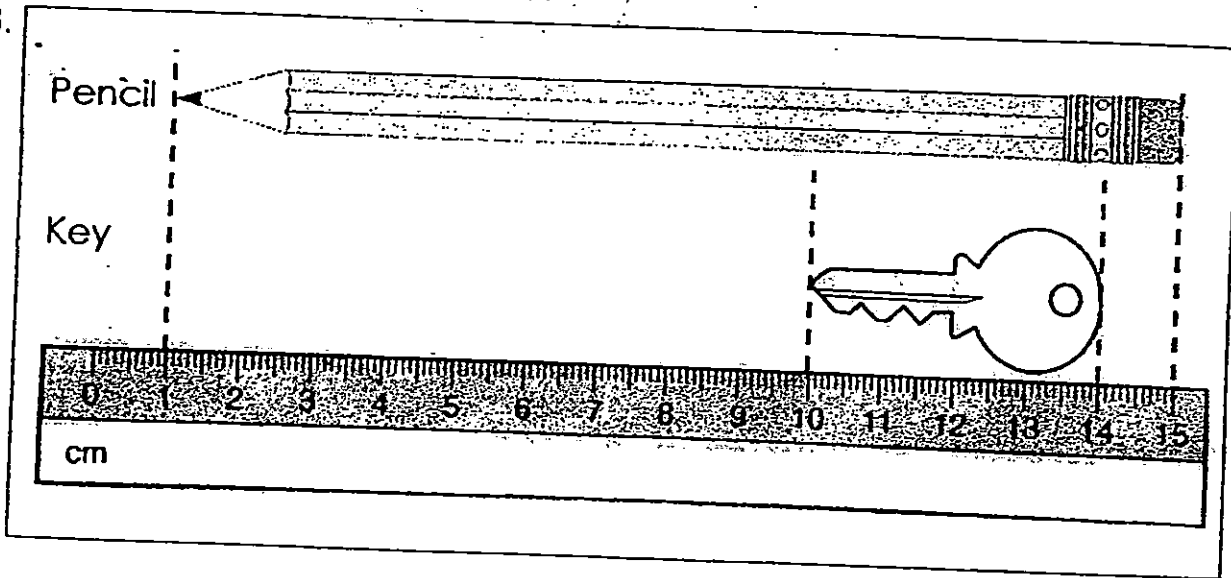
Each pizza was cut into 5 equal slices.

How many slices of pizzas were there altogether?



There were \_\_\_\_\_ slices of pizzas altogether.

3.



The pencil is \_\_\_\_\_ cm longer than the key.

- (1) 9
- (2) 10
- (3) 14
- (4) 15

( )

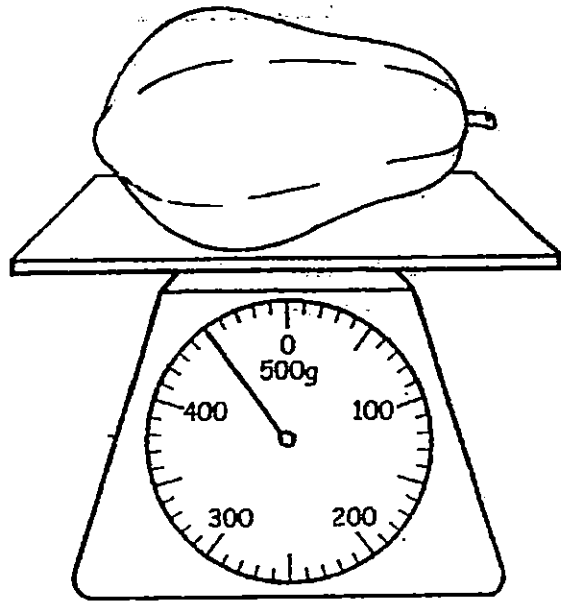

4.

Which of the following is the same as  $60 \div 10$  ?

- (1)  $30 \div 5$
- (2)  $28 \div 4$
- (3)  $24 \div 3$
- (4)  $18 \div 2$

( )

5. The mass of the papaya is \_\_\_\_\_ g heavier than the apple.



(1) 250

(2) 350

(3) 450

(4) 650

( )

6. Mrs Lim awarded stickers to 10 of her pupils.  
Each pupil received 2 stickers.  
How many stickers did Mrs Lim award in total?

(1) 5

(2) 8

(3) 12

(4) 20

( )

**Section B** (5 x 1 mark)

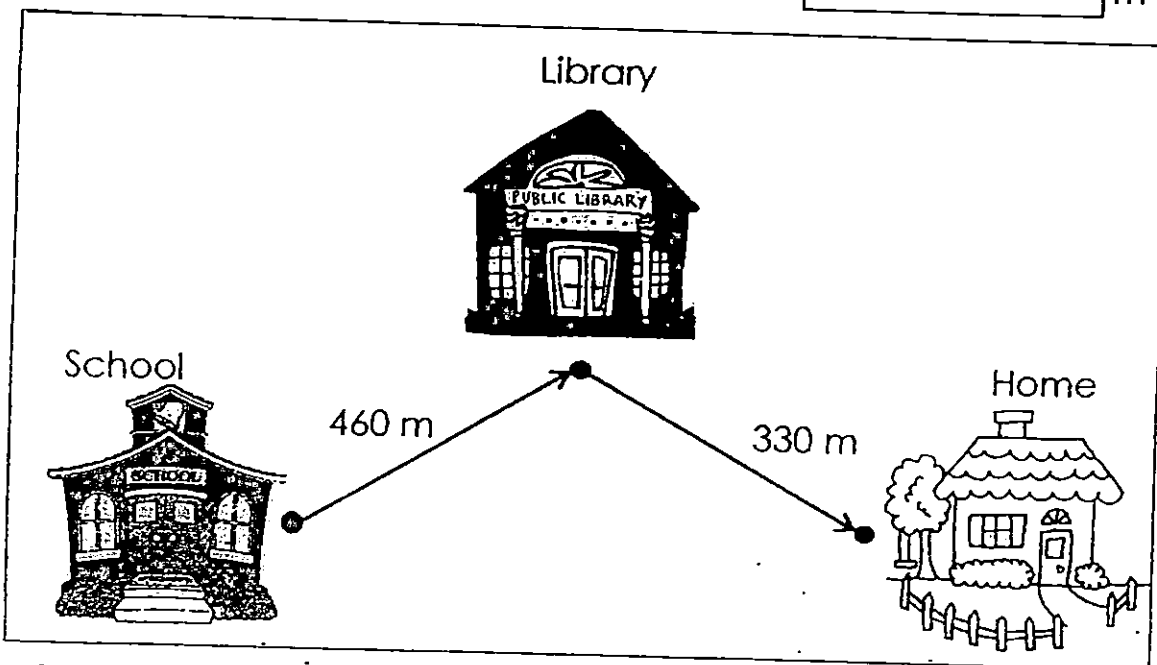
**Read the questions carefully.**

**Write the correct answers in the spaces provided.**

7. What is 10 more than 299?

8. Write the number 748 in words.

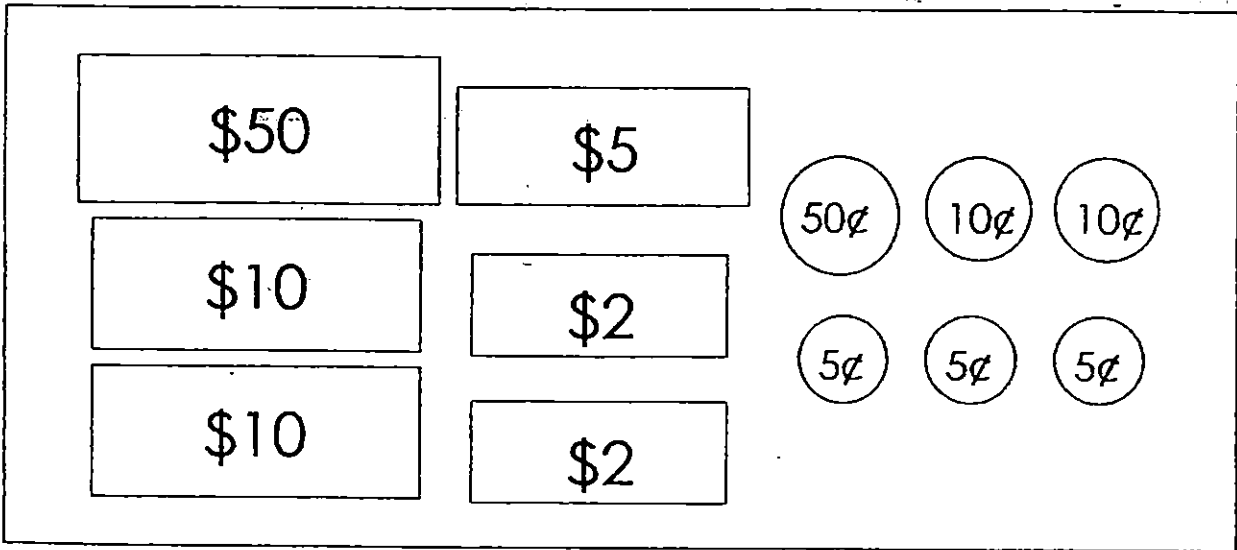
9. After school, Lionel walked to the library to borrow some books. Then, he walked home from the library. How far did he walk in total?


 m



10. What is the amount of money shown below?  
Write your answer in the box.

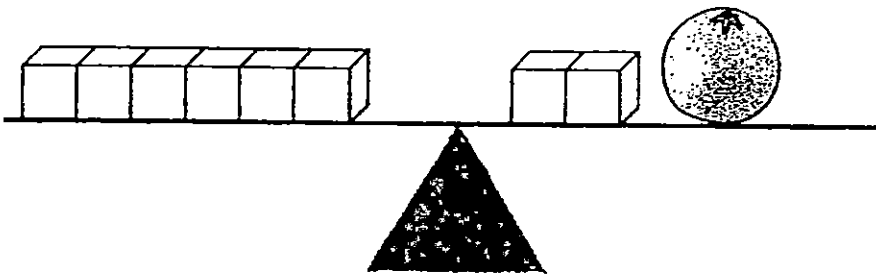
\$



11. The mass of  is 8g.

What is the mass of the orange?

g

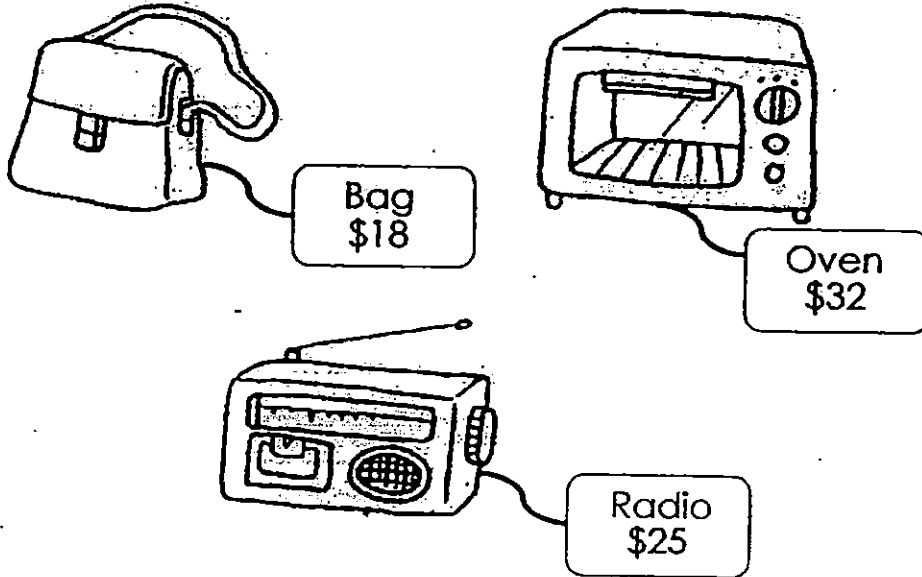


**Section C** (1 X 4 marks)

**Read the questions carefully.**

**Show your working and number sentences clearly.**

12.



- (a) Elton bought an oven.  
He gave the cashier a fifty-dollar note.  
How much change did he receive?

Working

He received a change of \$ \_\_\_\_\_

- (b) Angela bought a bag.  
Brendon bought a radio.  
How much did they spend in total?

Working

They spent \$ \_\_\_\_\_ altogether.

**The End**



## EXAM PAPER 2015

LEVEL : PRIMARY 2

SCHOOL : TAO NAN SCHOOL

SUBJECT : MATHEMATICS

TERM : REVIEW (3)

Q 1	Q 2	Q 3	Q 4	Q 5	Q 6
2	3	2	1	1	4

Q7. 309

Q8. Seven hundred and forty-eight

Q9. 790m

Q10. \$79.85

Q11. 32g

Q12. a) He received a change of \$18.  $\rightarrow \$50 - \$32 = \$18$

b) They spent \$43 altogether.  $\rightarrow \$18 + \$25 = \$43$