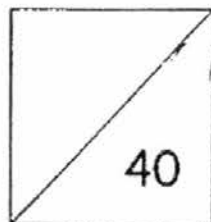




HENRY PARK PRIMARY SCHOOL
MATHEMATICS
PRIMARY 2 (TERM 3)
TOPICAL QUIZ 4



Name: _____ () Date: _____

Class: Pr 2 _____ Parent's Signature: _____

Section A: Multiple Choice Questions (4 × 1 mark = 4 marks)

Choose the correct answer and write its number in the brackets provided.

1. 325¢ is the same as _____.

(1) \$3.25

(2) \$32.05

(3) \$32.50

(4) \$325

()

2. 25¢ and _____ make \$1.00.

(1) 75¢

(2) 100¢

(3) 125¢

(4) 130¢

()

3. $6 + 6 + 6 + 6 + 6 =$ _____

(1) 5×6

(2) 6 fives

(3) 6 groups of 5

(4) 36

()

4. How many corners does a rectangle have?

(1) 1

(2) 2

(3) 3

(4) 4

()

Section B: Open - Ended Questions

Questions 5 to 14 carry 1 mark each. Questions 15 to 19 carry 2 marks each. Fill in your answers in the boxes provided.

5. Circle the correct amount of money to show \$3.65.



6. $30¢ + \$0.90 =$ _____

\$

7. What is the total amount of money in the box?



\$

8. Share 18 sweets equally among 6 children.

How many sweets does each child get?

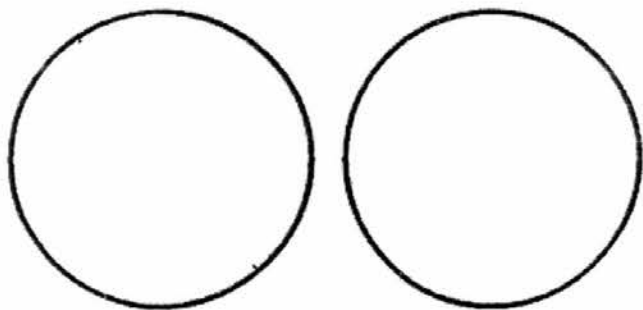
Circle to show your groupings.



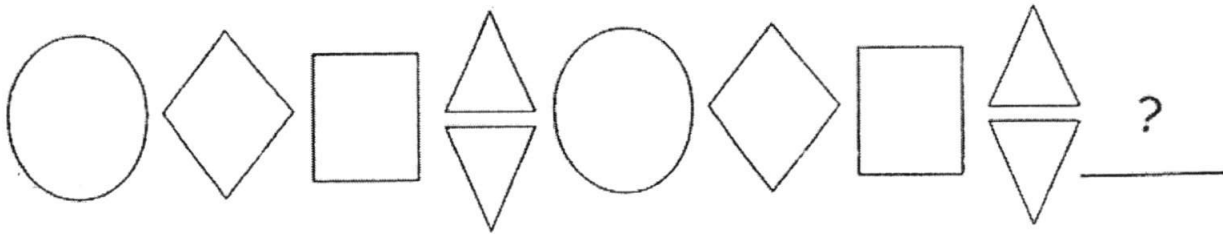
9. 8 fours = _____

10. I have 3 sides. None of my sides are curved lines. What shape am I?

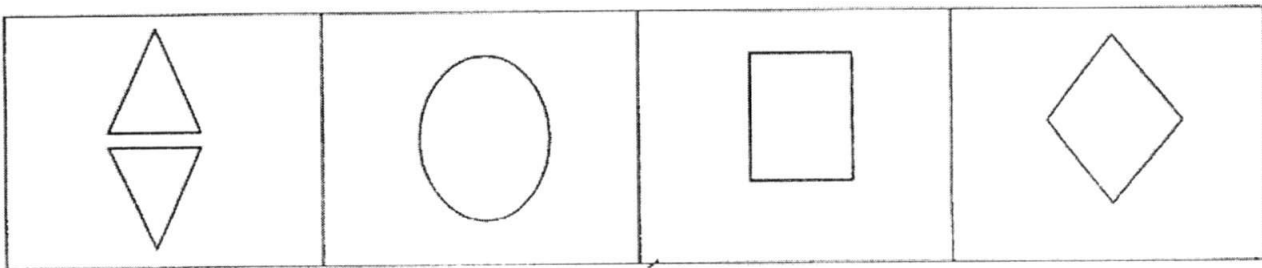
11. How many semicircles make 2 circles?



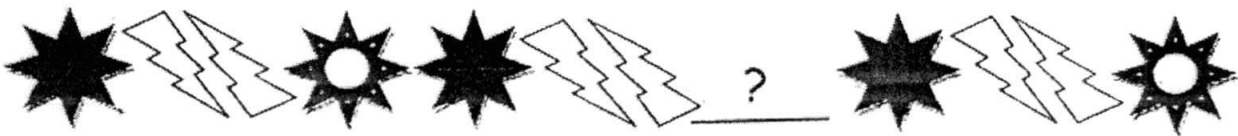
12.




Circle the next shape.



13.



Circle the next shape.



14. Denise has 1 fifty-cent coin, 2 twenty-cent coins and 5 ten-cent coins in her purse. How much money does she have? (Give your answers in cents only)

15.

Chair A



\$46.70

Chair B



\$49.90

Chair C



\$49.75


- a) Which chair costs the most?

Chair _____

- b) Arrange the chairs in order, beginning with the cheapest.


Chair _____, Chair _____, Chair _____

16. Look at the pictures given below. Write the multiplication and division equations in the box provided.



_____	x	_____	=	_____
_____	x	_____	=	_____
_____	÷	_____	=	_____
_____	÷	_____	=	_____

17. Count the number of square(s) and triangle(s) used to form the picture below.




square(s)

triangle(s)

18. Keith helped Mr Teo tidy up the PE room by putting 36 balls into 4 baskets. How many balls were there in one basket?

balls

19. Write the names of the shapes that you can find in the figure below.



Section C: Word Problems

Questions 20 to 23 carry 4 marks each.

Read each question carefully. Show your equations and word statements clearly in the spaces provided.

20. Amy bought two marbles and a paper aeroplane for 85¢.

A marble costs \$0.20.

How much did the paper aeroplane cost?

Working

21. There are 6 eggs in one tray. Mrs Lee buys 4 trays of eggs to bake for a funfair. How many eggs does Mrs Lee need?

Working

-
22. Jerry went to a bookstore and bought two items.
He bought a pencil case for \$13 and a storybook for \$18.
He gave the cashier a fifty-dollar note.
How much change did he receive?

Working

23. Jenny had 31 fiction books and 49 non-fiction books.

a) How many books did Jenny have altogether?

Working

23. Jenny packed all her books equally onto 8 shelves.

b) How many books were there on each shelf?

Working

- End of Paper -

Setters: Ms Ferlicia Lim, Mrs Mona Leong & Mdm Faaizah

EXAM PAPER 2016 (P2)

SCHOOL : HENRY PARK PRIMARY SCHOOL

SUBJECT : MATHEMATICS

TERM : CA2


Q1	Q2	Q3	Q4						
1	1	1	4						

Q5) \$1, \$1, \$1, \$0.50, \$0.10, \$0.05

Q6) \$1.20

Q7) \$20.25

Q8)



Q9) 32

Q10) triangle

Q11) 4

Q12) circle

Q13)



Q14) 140c

Q15) (a) Chair B

(b) Chair A, Chair C, Chair B

Q16) $4 \times 3 = 12$
 $3 \times 4 = 12$
 $12 \div 3 = 4$
 $12 \div 4 = 3$

Q17) 3 square(s)
4 triangle(s)

Q18) $36 \div 4 = 9$ balls

Q19) rectangle
quarter circles

Q20) $\$0.20 + \$0.20 = \$0.40$
 $\$0.85 - \$0.40 = \$0.45$
The paper aeroplane cost \$0.45.

Q21) $6 \times 4 = 24$
Mrs Lee needs 24 eggs.

Q22) $18 + 13 = 31$
 $50 - 31 = 19$
Jerry received \$19 change.

Q23) (a) $31 + 49 = 80$
Jenny has 80 books altogether.

(b) $80 \div 8 = 10$
There are 10 books on each shelf.