



RAFFLES GIRLS' PRIMARY SCHOOL

Primary One Mathematics 2018

Review Assessment 4-1

Time

Name: \_\_\_\_\_ ( ) Pr 1 ( )

Date: \_\_\_\_\_


Your score out of 8 marks	
Parent's Signature	

**SECTION A (2 × 1 mark)**

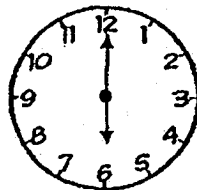
For each question, four options are given. Choose the correct answer and write its number (1, 2, 3 or 4) in the brackets provided.

1. Which one of the following clocks shows 7 o'clock?


(1)



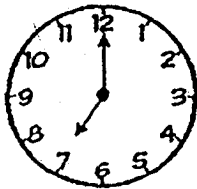
(2)



(3)

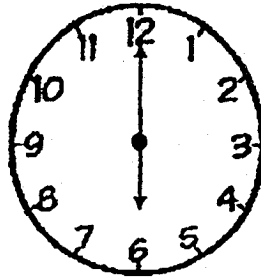


(4)



( )

2. The time on the clock shows \_\_\_\_\_.



- (1) 6 o'clock
- (2) 12 o'clock
- (3) half past 12
- (4) half past 6

( )

**SECTION B (3 × 2 marks)**

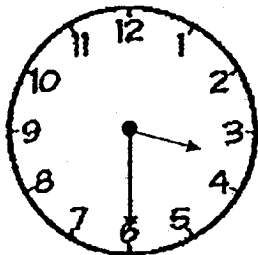
Read the questions carefully.

Write the correct answers in the spaces provided.

Look at the clocks.

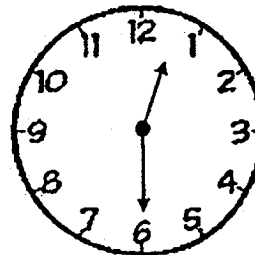
Write the correct time using 'o'clock' or 'half past'.

3a.



\_\_\_\_\_


3b.



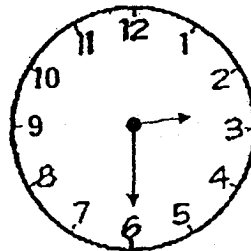
\_\_\_\_\_

4. Colour the clock faces that show the correct time.

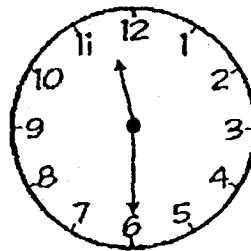
a) half past 5



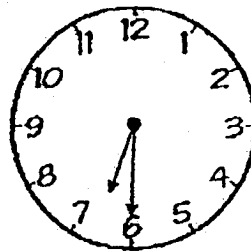
b) half past 2




c) half past 12




d) half past 6



5. Fill in the boxes with the correct times. Use 'o'clock' or 'half past'.



a. John plays basketball at



b. Jack and Jill plays a game of chess at

**EXAM PAPER 2018 (P1)**

**SCHOOL : RGS**

**SUBJECT : MATHEMATICS**

**TERM : Review Assessment 4-1**

Q1	Q2
4	1

**Q3) a) half past 3**

**b) half past 12**

**Q4) b , d**

**Q5) a) half past 9**

**b) 8 o'clock**

