

# METHODIST GIRLS' SCHOOL (PRIMARY)

Founded in 1887



## PRIMARY 1 MINI TEST MATHEMATICS TERM 4, 2018

Total Time: 1 hour

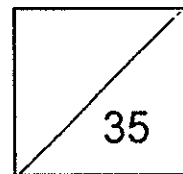
### INSTRUCTIONS TO CANDIDATES

Do not turn over this page until you are told to do so.  
Follow all instructions carefully.  
Answer all questions.

Name: \_\_\_\_\_ ( )

Class: Primary 1. \_\_\_\_\_

Date: 25 October 2018




This booklet consists of 14 printed pages including this page.

Section A ( 25 x 1 m )

Read the questions carefully. Write the answers in the boxes provided.

1. Count the smiley faces and write the **number** in the box below.




2.  tens 15 ones = 45

3. Write the number in words.

79	
----	--

(Go on to the next page)

- 3

4.

$$\begin{array}{r} 34 \\ + 4 \square \\ \hline 78 \end{array}$$

-

8

5.

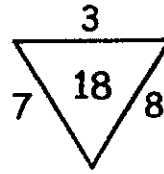
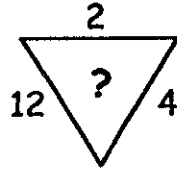
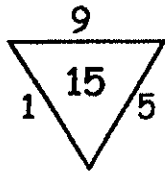
$$\begin{array}{r} 69 \\ - 2 \square \\ \hline 47 \end{array}$$

6. Look at the number pattern below.  
Fill in the missing numbers.

27	30	33	36		42	45	48		54
----	----	----	----	--	----	----	----	--	----

(Go on to the next page)

7. Look at the pattern below. What is the missing number in the triangle?



The missing number is

8.  $48 + 16 = 5 \text{ tens } \square \text{ ones}$

9.  $90 - 43 = \square$

10.  $67 - \square = 29$


11.  $\square$  is 5 more than 51

(Go on to the next page)

5

12. 87 is 3 more than

13. Look at the picture below and answer the question.  
How many books are there?




groups of 3 =

14.

$$\times 2 = 2 + 2 + 2 + 2$$

(Go on to the next page)

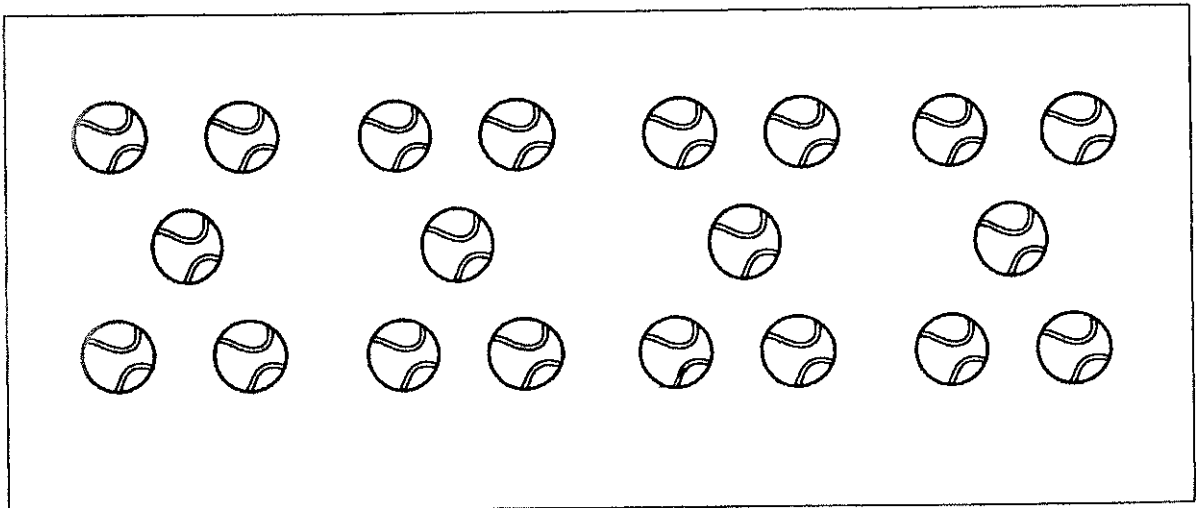
15. Write a multiplication equation for the picture below.  
How many stars are there?






Number of stars:

$$\square \times \square = \square$$

16. Circle the balls to show 4 fives.



(Go on to the next page)


17.  +  = 

 ×  = 

The missing number is

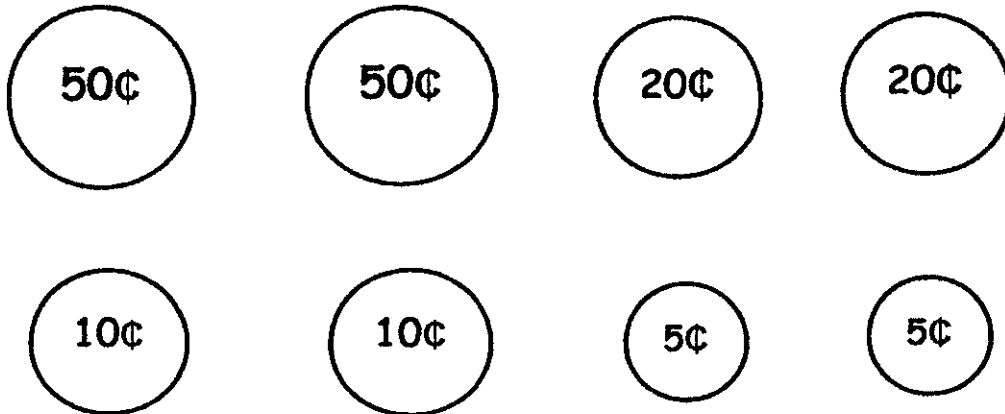
18. Uncle Tan bought a box of 18 oranges. He repacked the oranges equally into 3 bags.

Circle the oranges to show how many there were in each bag.

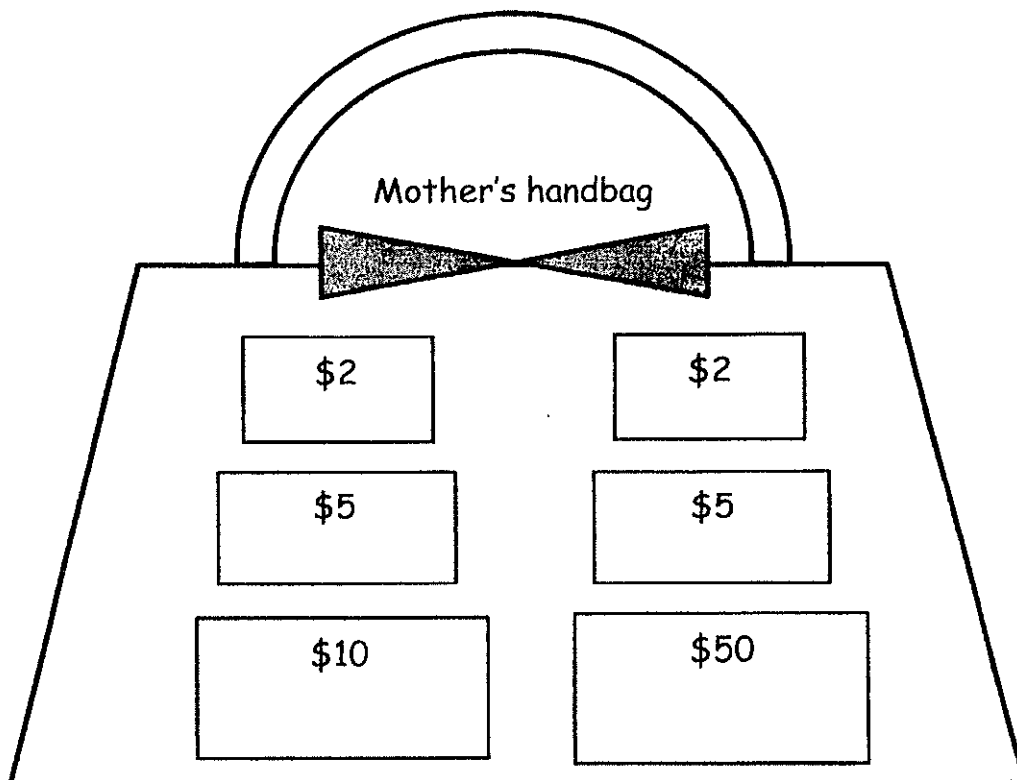


(Go on to the next page)

19. Ali buys a bun for 85¢. Circle the coins he must use to pay for the bun.



20. Count the amount of money in Mother's handbag.

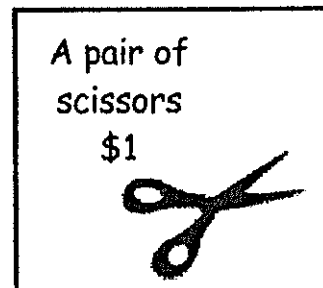




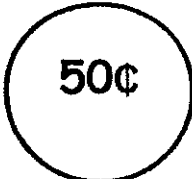
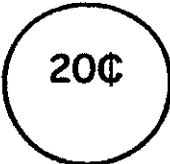
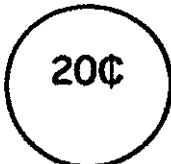
Mother has \$  in her handbag.

(Go on to the next page)



Look at the pictures below and answer Questions 21 and 22.



21. Minh has    in her purse. If she


spends all her money, she can buy

22. Andy had \$1 to spend. After buying the item, he had 40¢ left. Which item did Andy buy?

Andy bought



(Go on to the next page)

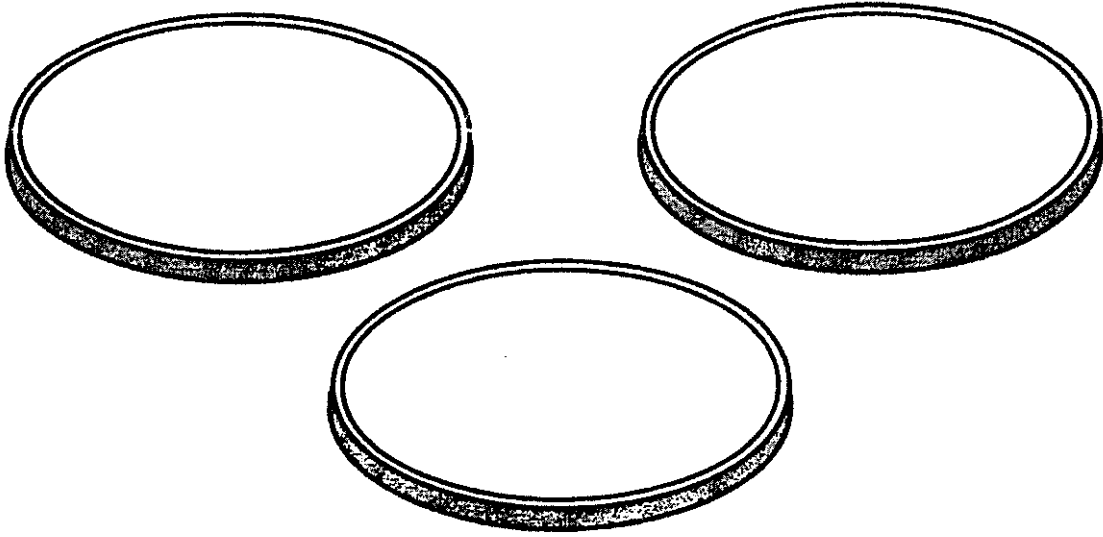
23. Rani has 16 buttons and 4 teddy bears. She sews all the buttons equally onto the 4 teddy bears.



There are  buttons on each bear.


(Go on to the next page)

24. Brenda baked a total of 12 cookies . She placed them **equally** onto 3 trays. Draw and show the number of cookies  on each tray.



Each tray has  cookies.

25. Jane gave the shopkeeper \$50 to pay for the most expensive toy below. She received some change. How much change did she get?



Her change was \$ .

(Go on to the next page)

Section B (5 x 2 m)

Do the sums below. All working must be shown clearly.

26. Mrs Zul had 45 chicks in her farm. She bought 24 more chicks.  
How many chicks did Mrs Zul have altogether?

$$\square \quad \bigcirc \quad \square = \square$$

Mrs Zul had \_\_\_\_\_ chicks altogether.

27. Jane has a total of 83 pink and blue balloons.  
There are 45 pink balloons.  
How many blue balloons are there?


$$\square \quad \bigcirc \quad \square = \square$$

There are \_\_\_\_\_ blue balloons.

Working

(Go on to the next page)

28. Mr Lee gave \$90 to the cashier to pay for a pair of shoes.  
How much change did he get back?



A pair of shoes  
\$81

$$\square \ominus \square = \square$$

He got back \$ \_\_\_\_\_.

29. Sue Lin paid \$22 for a book and a bag.  
The cashier returned her \$28 change.  
How much money did she have **at first**?


$$\square \oplus \square = \square$$

Sue Lin had \$ \_\_\_\_\_ at first.

Working

(Go on to the next page)

30. Betty baked 5 cakes. She used 4 eggs for each cake. How many eggs did she use altogether?



$$\square \times \square = \square$$

Betty used \_\_\_\_\_ eggs altogether.

-The End-  
Remember to check your paper! ☺

**Answer Sheets**  
**MGS Pri 1 2018 Term 3 MATHS**

- 1)28
- 2)thirty-eight
- 3)37
- 4)21
- 5)29
- 6)23
- 7)31
- 8)18
- 9)30,22
- 10)21
- 11)24
- 12)13,21,33,38
- 13) $3-13=25$
- 14)15
- 15)half past 8
- 16)7 o'clock
- 17)chloe
- 18)Devi and bibi
- 19)17
- 20)5
- 21)Tulips
- 22) They are Orchids,Lilies and Tulips

**SECTION B**

- 23) $29+5=34$  Penny bought 34 cups altogether
- 24) $36-11=25$  Zara drew 25 yellow flowers
- 25)  $30-14=16$  There are 16 more puppies than dogs
- 26) $15+17=32$  Mrs Lee has 32 buns at first

# Answer Sheets

## MGS Pri 1 2018 Term 4 MATHS

1)56

2)3

3)seventy-nine

4)4

5)2

6)39,51

7)18

8)14

9)47

10)38

11)56

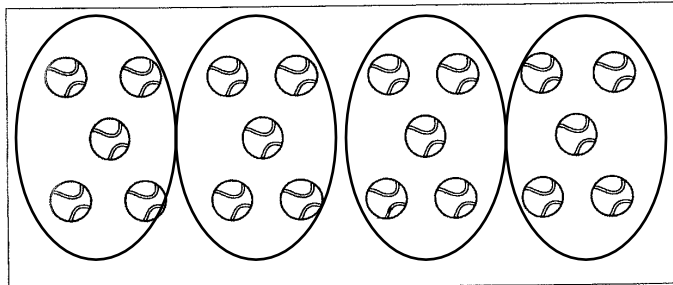
12)84

13)5 groups of 3=15

14)4

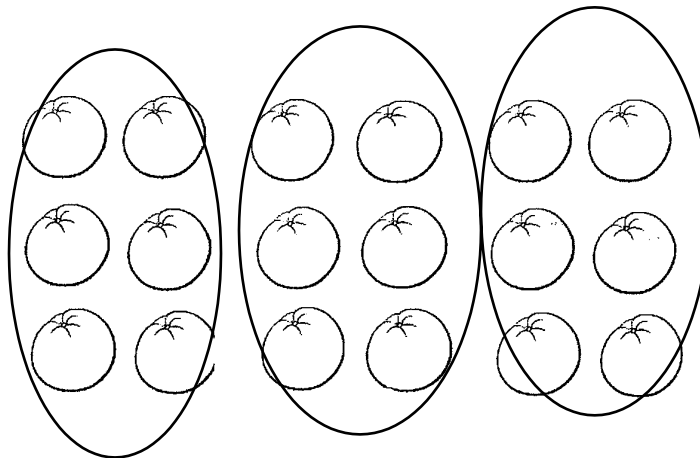
15) $3 \times 3 = 9$

16)

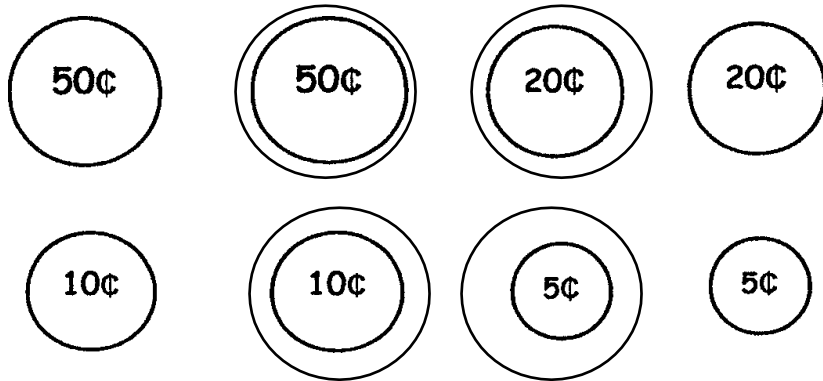


17)8

18)







19)

20)74

21)a pen

22)Andy bought a pencil

