

PEI HWA PRESBYTERIAN PRIMARY SCHOOL
SECOND SEMESTRAL ASSESSMENT 2007
MATHEMATICS
PRIMARY 1

Name : _____ ()
Class : _____
Date : _____
Parent's Signature : _____

Total time for Section A, B and C : 1 hour 30 minutes


Section	Type	Maximum Marks	Marks Obtained
A	Multiple-Choice	20	
B	Short-Answer	52	
C	Word Problems	28	
Grand Total		100	

- Do not open this booklet until you are told to do so.
- Follow all instructions carefully.
- Answer all questions and show your workings clearly.
- Check your work carefully.

Section A : Multiple Choice Questions (10 x 2 = 20 marks)

Choose the correct answer and write its number(1,2,3 or 4) in the brackets provided.

1) Count and write the number of faces.



- (1) 8
- (2) 7
- (3) 6
- (4) 4

()

2) $7 + 2 =$ _____

- (1) 5
- (2) 8
- (3) 9
- (4) 10

()

3) $48 =$ _____

- (1) 8 tens 4 ones
- (2) 1 tens 48 ones
- (3) 40 tens 8 ones
- (4) 4 tens 8 ones

()

4) $69 - 4 =$ _____

- (1) 29
- (2) 63
- (3) 65
- (4) 73

()

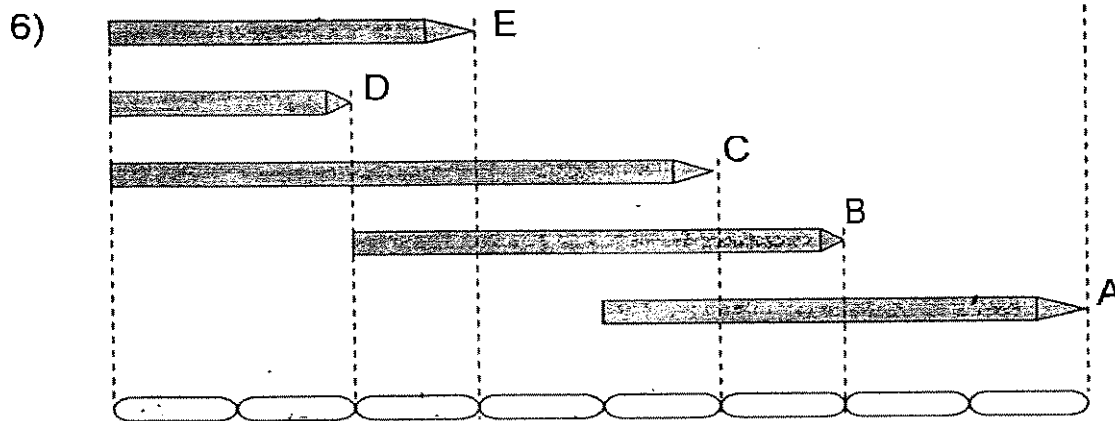
5) Look at the picture below.



Which one of the following subtraction sentences is **correct** ?

- (1) $7 - 3 = 4$
- (2) $8 - 3 = 5$
- (3) $9 - 4 = 5$
- (4) $9 - 5 = 4$

()

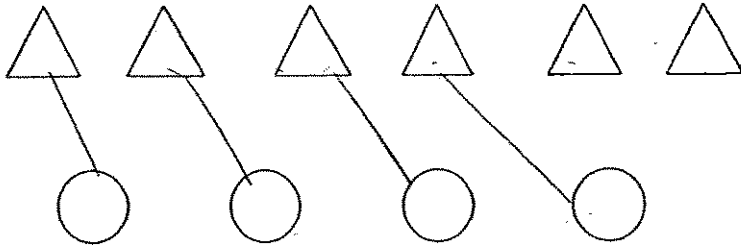


Pencil A is as long as Pencil _____.

- (1) E
- (2) D
- (3) C
- (4) B

()

7) How many more triangles than circles are there?



- (1) 1
- (2) 2
- (3) 9
- (4) 10

8) Fill in the missing numbers.

63 , _____ , _____ , **33** , **23**

- (1) 64 , 65
- (2) 62 , 61
- (3) 53 , 43
- (4) 73 , 83

9) Rani had some marbles.

She gave 5 marbles to her brother.

She had 8 marbles left.

How many marbles did Rani have at first?

- (1) 12
- (2) 2
- (3) 3
- (4) 13

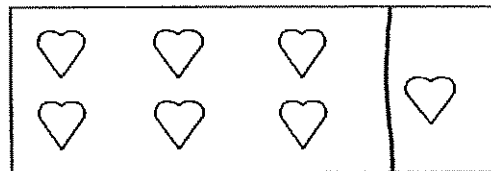
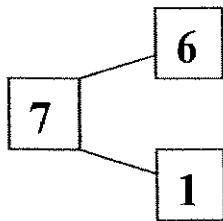
10) How many 50-cent coins can be exchanged for a five-dollar note?

- (1) 10
- (2) 2
- (3) 8
- (4) 4

()

Section B : Write your answers in the blanks provided. (26 x 2 = 52marks)

11) Using the number bond below, draw a line to show the two parts.



12) _____ - 6 = 3

13) Count the stars.

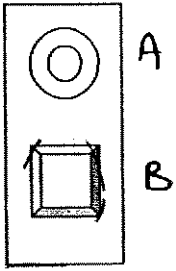
Fill in the missing numbers.



10 and _____ make _____.

14) What comes next in the pattern?

Circle the correct answer.




15) Write 53 in words.

Answer : _____


16) 72

$+ 27$

17) Circle the apples to get 4 equal groups.



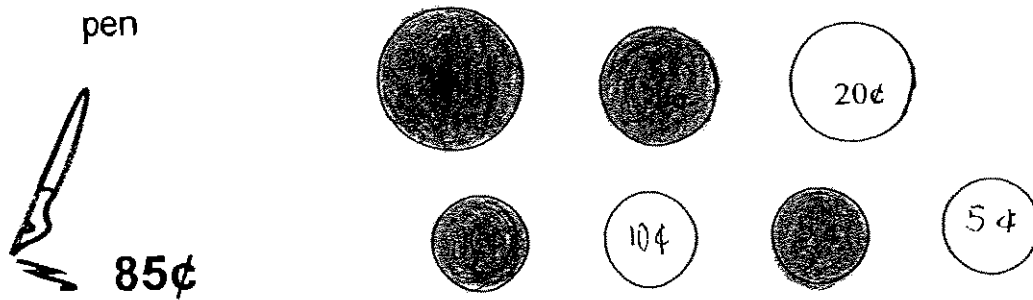
18)



Write the correct time in the blank .

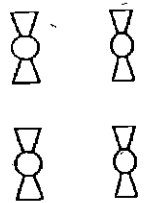
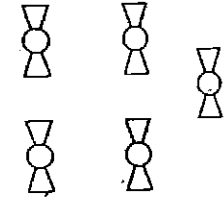

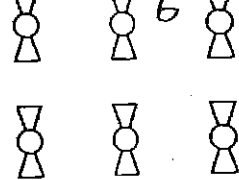
Answer : _____

19) Colour the correct amount of money Johari needs to buy the pen.



Fill in the blanks for questions 20 and 21.

The graph shows the number of sweets each girl eats.

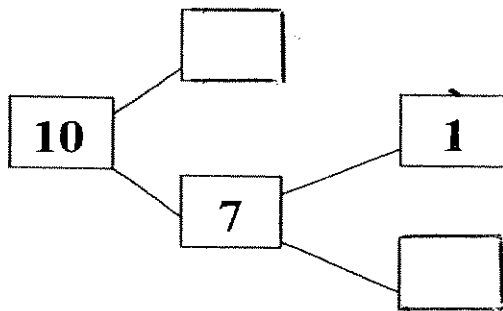
Number of Sweets			
			
Liming	Mary	Nora	Sheila

Each  stands for 1 sweet.

20) _____ eats the smallest number of sweets.

21) Liming and Sheila eat _____ sweets altogether.

22) Fill in the missing number bonds.



23) Which of the following is equal to 10?

Circle the correct answer.

$4 + 4$

$6 + 2$

$8 + 2$

24) There are 6 buns.
John eats 2 buns.
How many buns are left?

Answer : _____

25)



apple



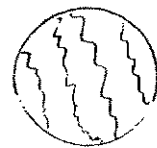
orange



pear



cheery



watermelon

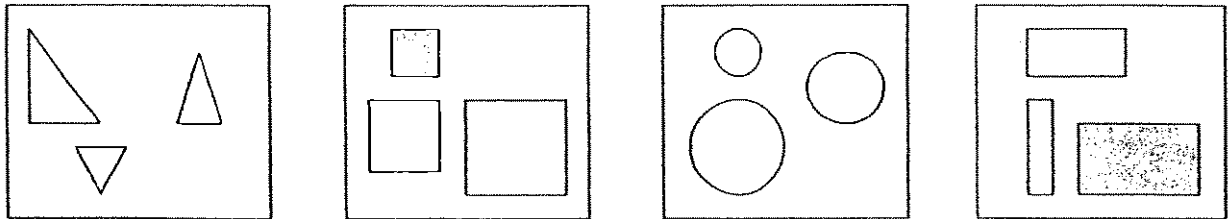


lemon

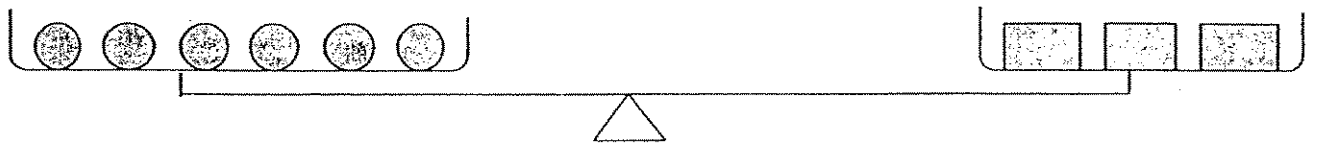
The _____ is 2nd from the left.



26) Circle the correct answer.

The 12 shapes are grouped by (size / shape / colour).





27)



6  are as heavy as 3 .

Circle the correct answer.


The lighter object is ( ).

28) 5 less than 98 is _____.

29) Jun Han had dinner at 7 o'clock.

Next, she brushed her teeth at 8 o'clock.

She went to bed at _____.



30) Fill in the blanks using the numbers below.

7

9

6

_____ is 1 less than _____.

31) There are 5 birds in the cage.

John puts another 5 birds into the cage.

How many birds are there in the cage now?

Answer : _____

32) Circle the greatest answer.

$17 - 9$

$16 - 7$

$14 - 8$

33) Leo has 5 erasers.

Andrew has 2 erasers less than Leo.

Paul has 3 erasers more than Andrew.

How many erasers does Paul have?

Answer : _____

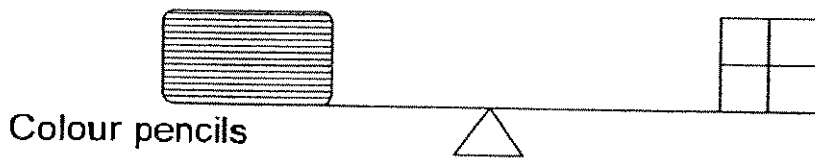
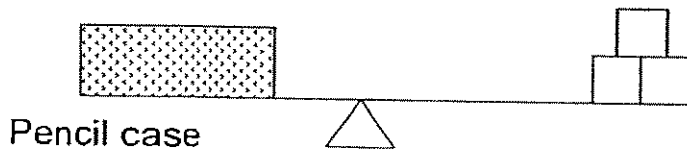
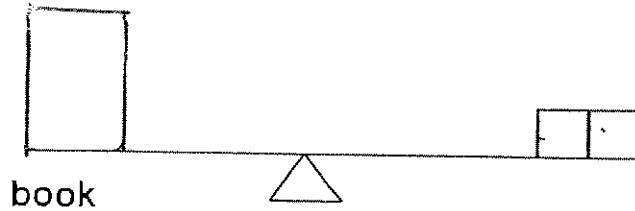
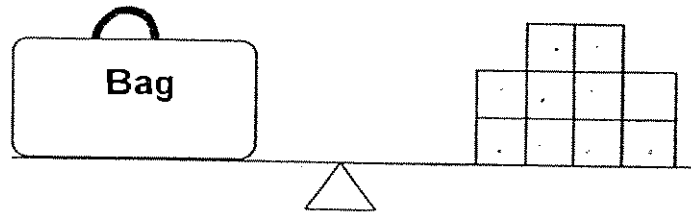
34) Subtract 4 tens 7 ones from 7 tens.

Answer : _____

35) Fill in the missing numbers in the boxes.

$$\begin{array}{r} 58 \\ \square 9 \\ \hline 1\square \end{array}$$

36)



stands for 1 unit.

The total mass of the bag and 2 other objects should be less than 16 units.

Which 2 objects should be put into the bag?

Answer : _____ and _____

Section C (7 x 4 = 28 marks)


Show your working clearly in the space provided below each question .

- 37) Mum uses 15 eggs to make cookies.
She uses 7 eggs to bake a cake.
How many more eggs does she use to make cookies than to bake a cake?



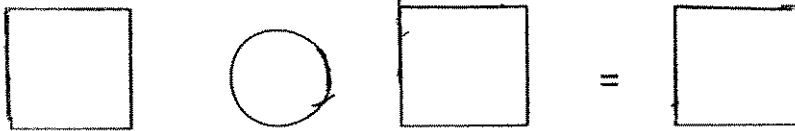
She uses _____ more eggs to make cookies than to bake a cake.

-
- 38) Leslie has 42 storybooks.
Raj has 17 more storybooks than Leslie.
How many storybooks does Raj have?



Raj has _____ storybooks.

- 39) There are 35 beads in the box.
Mrs Tan uses 16 beads to make a necklace.
How many beads are left in the box?

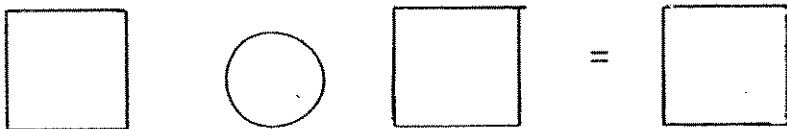


_____ beads are left in the box.

40)

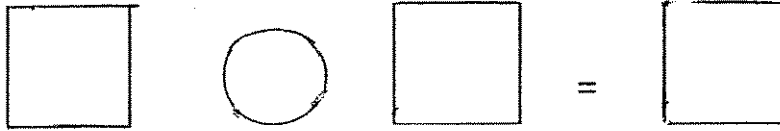


How many legs do 6 tortoises have?




6 tortoises have _____ legs altogether.

- 41) There are 3 cookies on each plate.
How many cookies are there on 5 such plates?



There are _____ cookies on 5 plates.

- 42) Tim has 18 stamps.
He puts **3 stamps in each row**.
How many rows of stamps are there?



There are _____ rows of stamps.


43)

\$35



bag

\$8



box of crayons

\$4



carton of milk

\$19



box of cookies

Sue spent \$54.

She bought a bag and one other item.


Which other item did she buy?

$$\square + \bigcirc = \square$$

She bought a _____

-----End of Paper-----

☺ Have you checked your work?



ANSWER SHEET

PEI HWA PRIMARY SCHOOL - PRIMARY 1 MATHEMATICS 2007
SEMESTRAL ASSESSMENT (2)

1. 1

2. 3

3. 4

4. 3

5. 2

6. 4

7. 2

8. 3

9. 4

10. 1



12. 9

13. 6 make 16

14. B

15. fifty-three

16. 99



18. 6.30

19. 50¢, 20¢, 10¢, 5¢

20. Nora

21. 10

22. 3, 6

23. $8+2$

24. 4

25. orange

26. shape

27. ○

28. 93

29) 9.30

30) 6, 7

31) 10

32) $16-7$

33) 6

34) 23

35) 58

-39

19

36) book and pencil case.

37) $15-7=8$

She uses 8 more eggs to make Cookies than to bake a cake.

38) $42+17=59$

Raj has 59 storybooks.

39) $35-16=19$

19 beads are left in the box

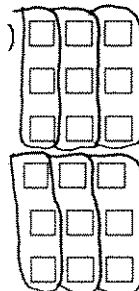
40) $6 \times 4 = 24$

6 tortoises have 24 legs altogether.

41) $3 \times 5 = 15$

There are 15 cookies on 5 plates.

42)



43) $\$54 - \$35 = \$19$