

Pei Chun Public School  
Continual Assessment 2 – 2004  
Mathematics  
Primary 1

Name: \_\_\_\_\_ ( )


Date: 24 August 2004

Class: Primary 1 \_\_\_\_\_

Parent's Signature: \_\_\_\_\_

Time: 1 h 15 min



Marks:



Maths Teacher: \_\_\_\_\_

Section A (42 x 2 marks)

Count and write the correct number in each box.

<p>1.</p>  <p><input type="text"/></p>	<p>2.</p>  <p><input type="text"/></p>
--	---

Write in numbers.

3. twenty-nine \_\_\_\_\_

4. forty \_\_\_\_\_


Write the numbers in words.

5. 35 \_\_\_\_\_

6. 15 \_\_\_\_\_

Arrange these numbers in order. Begin with the smallest number.

7.



\_\_\_\_\_ smallest

Do these sums.


8.  $17 + 16 =$

9.  $32 - 14 =$

10.  $12 + 3 + 8 =$

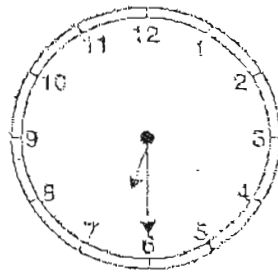
Fill in the missing numbers.

11.

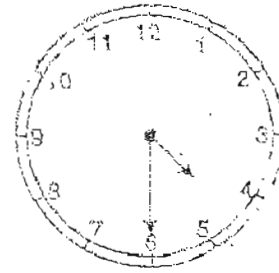


Write the correct time shown on each clock.

12.



13.



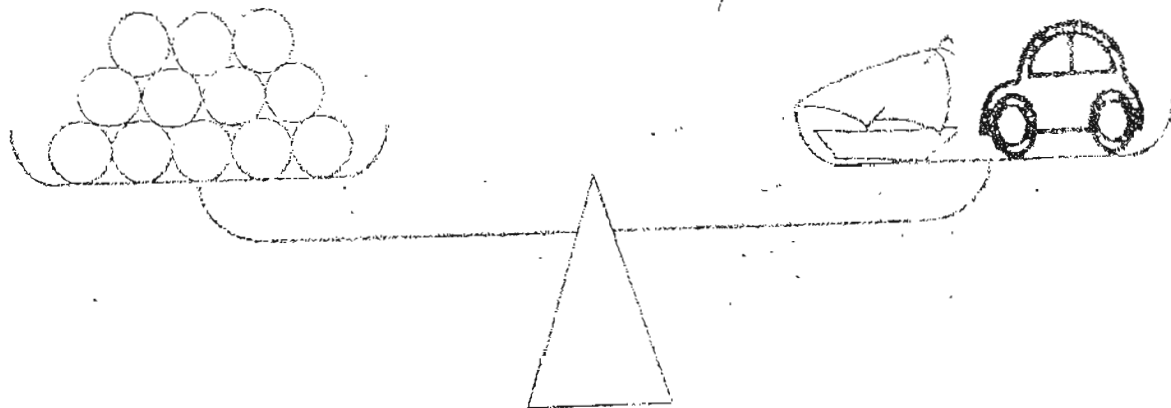
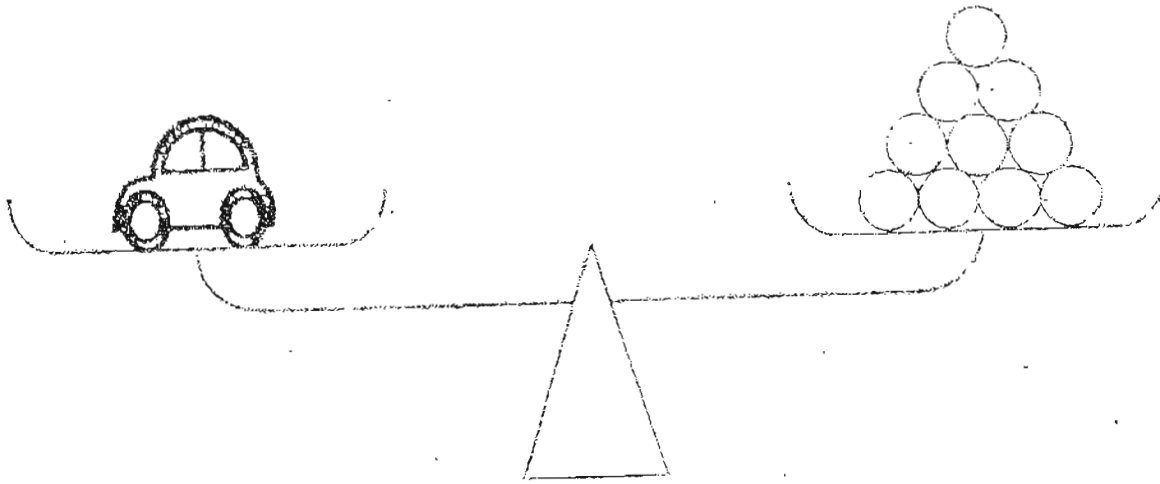
14.




15.



Study the pictures and fill in the blanks.



Each  stands for 1 unit.

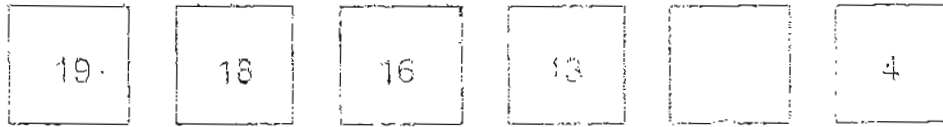
16. The mass of the toy car is \_\_\_\_\_ units.

17. The mass of the toy boat is \_\_\_\_\_ units.

18. The total mass of the toys is \_\_\_\_\_ units.


19. The toy \_\_\_\_\_ is heavier than the toy \_\_\_\_\_.

20. Study the pattern and write the missing number in the square below



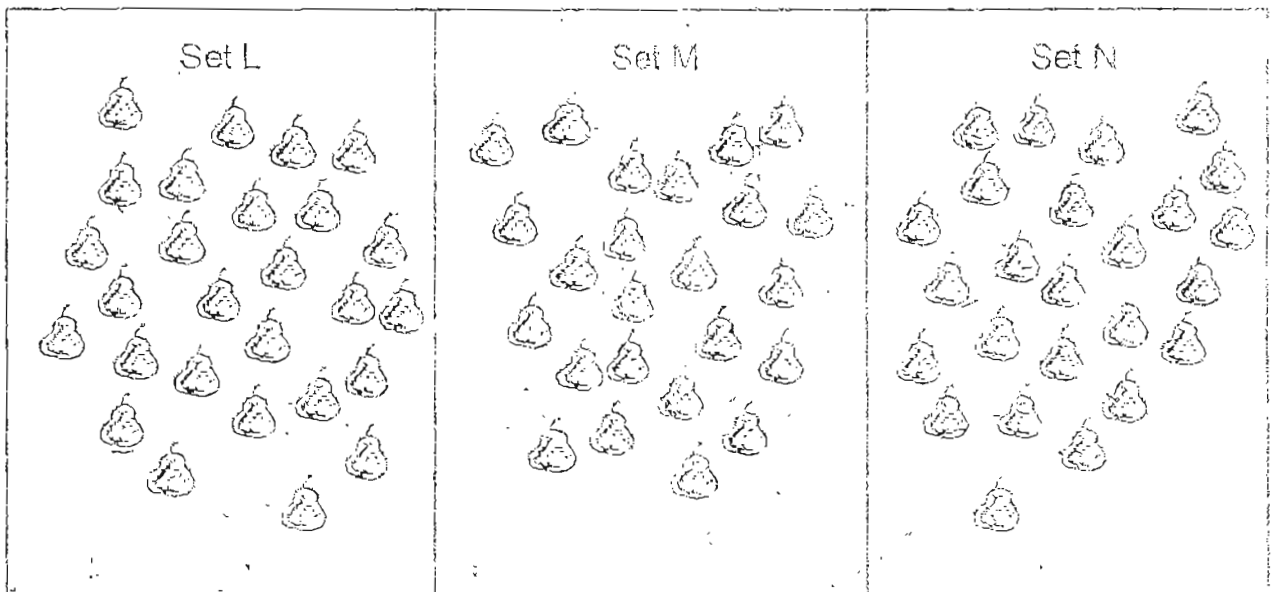
21.

$$\begin{array}{r}
 \heartsuit + \heartsuit + \heartsuit = 15 \\
 \heartsuit + \star = 14
 \end{array}$$

What number does  stand for?

It stands for \_\_\_\_\_

Look at the picture below and answer Question 22.



22. Set \_\_\_\_\_ has 2 fewer pears than Set \_\_\_\_\_.

Do these sums.

23.  is 12 more than 15.

24. 5 less than 28 is .

25. 30 comes between 31 and .

26.  comes just before 40.

27. 37 is 2 tens \_\_\_\_\_ ones.

28. Circle the stars that can make the story of 25.

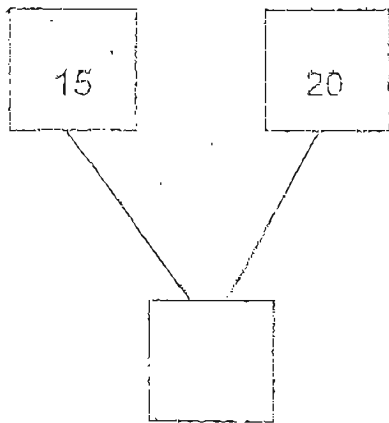


29. Colour the sums that make the story of 31.

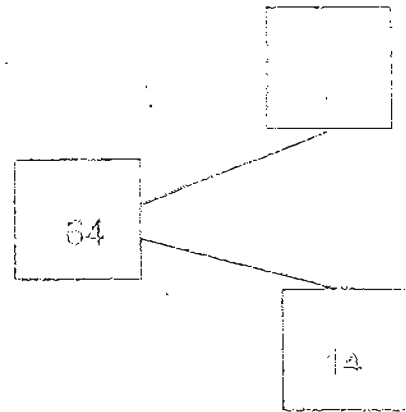
31	22 + 9	16 + 20	19 + 13	3 tens 1 one

Complete the number bonds.

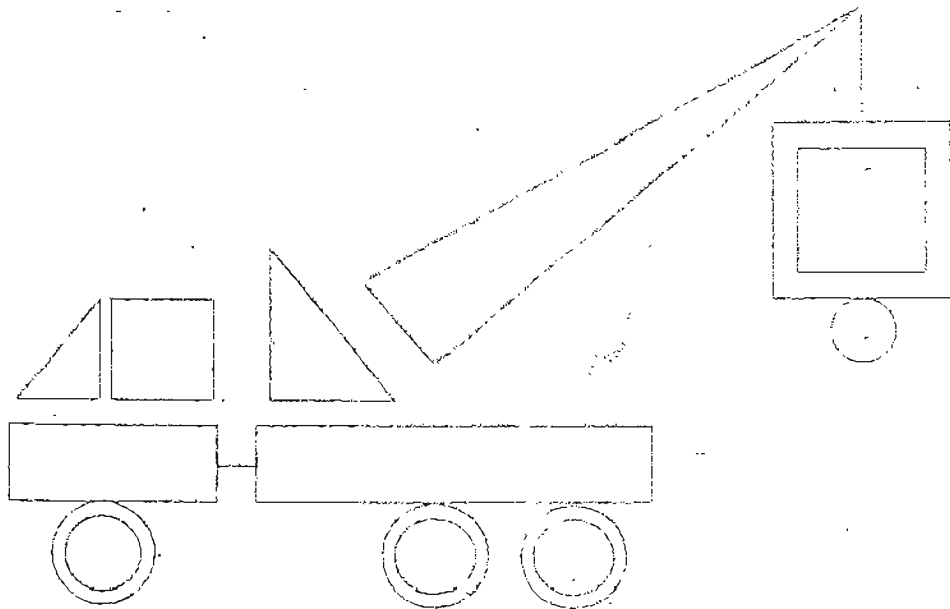
30.



31



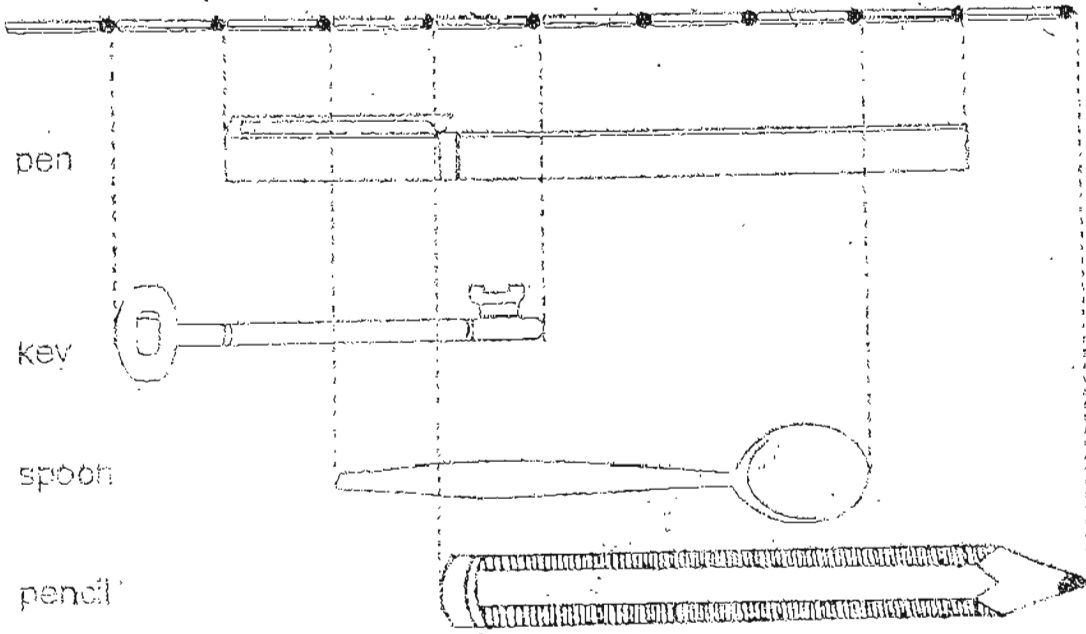
Look at the picture carefully and answer the questions below.



32. There are \_\_\_\_\_ triangles.

33. There are \_\_\_\_\_ more circles than squares.

Study the picture and answer questions 34, 35, 36 and 37.



34. The \_\_\_\_\_ is the shortest.

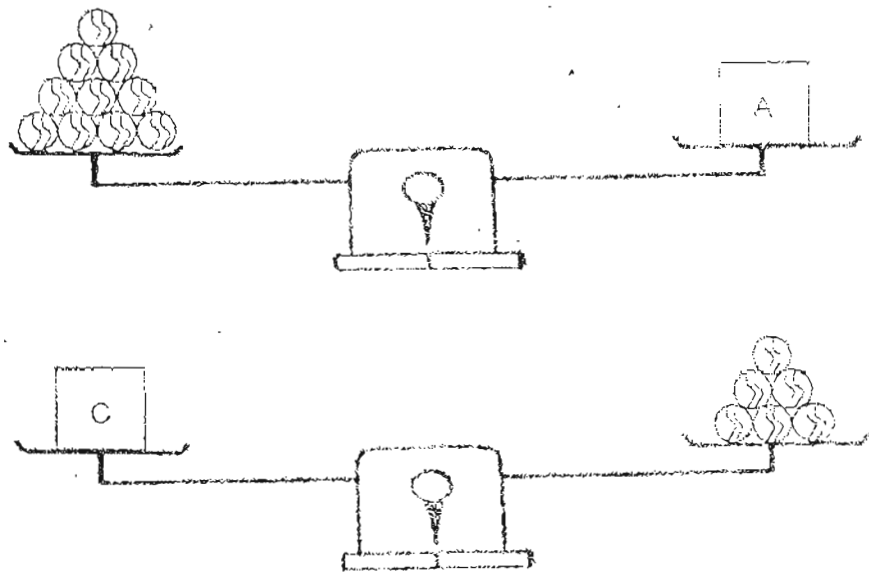
35. The \_\_\_\_\_ is the longest.

36. The pen is \_\_\_\_\_ longer than the spoon.

37. The total length of the key and the pencil is \_\_\_\_\_



38.



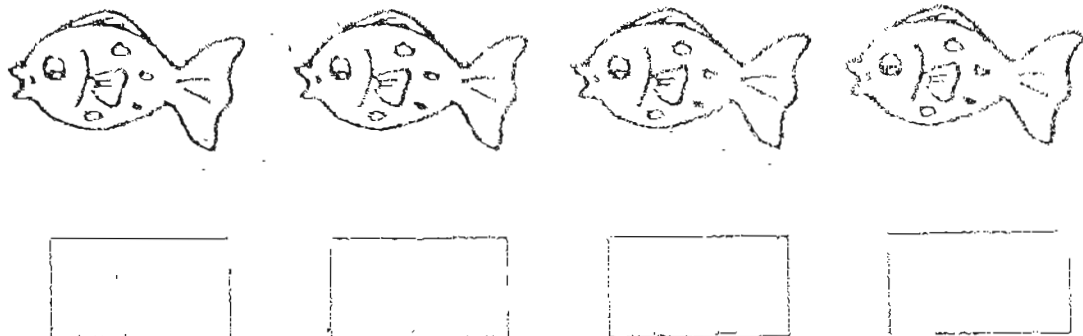
Box C is            lighter than Box A.

39. Fish B is 4<sup>th</sup> from the left.


Fish A is between Fish D and Fish C

Fish C is next to Fish B.

Fill in the boxes with the correct letters.

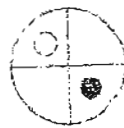
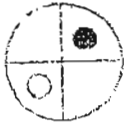


40. The picture below shows a folded strip of trees.



How many trees are there on the whole strip? \_\_\_\_\_

41. Study the pattern and tick (✓) the correct box to show what comes next.



	<input type="checkbox"/>
	<input type="checkbox"/>
	<input type="checkbox"/>

42. Fill in '+' or '-' in the boxes.

$$23 \boxed{\phantom{+}} 13 = 40 \boxed{\phantom{+}} 4$$

Section B ( 4 x 4 marks )

Work out the problem sums below. All working, statements and answers must be clearly shown.

43. Suping and Minah have 30 stickers.  
Suping has 18 stickers.  
How many stickers does Minah have ?

44. Jim has 21 sweets.  
He has 6 sweets fewer than Bala.  
How many sweets does Bala have ?

45. An orange weighs 14 marbles.

A papaya weighs 7 marbles more than the orange.

What is the total mass of the orange and the papaya?

46. A ruler is 23 units long.

A teaspoon is 15 units shorter.

What is the total length of the ruler and the teaspoon?


End of Paper

Set by : Mrs J. Leong

Visited by: P1 Maths Committee Teachers

PEI CHUN PUBLIC SCHOOL  
CONTINUAL ASSESSMENT 2 - 2004  
PRIMARY 1 MATHEMATICS

PAW

- |                          |   |
|--------------------------|---|
| 1) 27                    | 28) 12      13  |
| 2) 31                    | 29) 22 + 9      3 tens 1 one  |
| 3) 29                    | 30) 35  |
| 4) 40                    | 31) 50  |
| 5) thirty-five           | 32) 3 triangles   |
| 6) fifteen               | 33) 4   |
| 7) 8    15    26    34   | 34) key   |
| 8) 33                    | 35) pen   |
| 9) 18                    | 36) 2   |
| 10) 23                   | 37) 10  |
| 11) 70    72    73    75 | 38) 4   |
| 12) half-past 6          | 39) D    A    C    B  |
| 13) half-past 4          | 40) A   |
| 14) 12 o' clock          | 41)  |
| 15) 6 o' clock           | 42) +    -  |
| 16) 10                   | 43) 12 stickers   |
| 17) 2                    | 44) 17 sweets   |
| 18) 12                   | 45) 35 marbles  |
| 19) car    boat          | 46) 31 units  |
| 20) 9                    |   |
| 21) 8                    |   |
| 22) N    L               |   |
| 23) 27                   |   |
| 24) 22                   |   |
| 25) 29                   |   |
| 26) 30                   |   |
| 27) 17                   |   |