

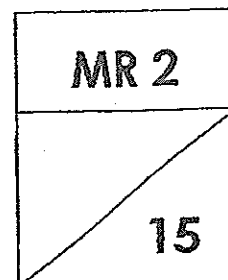
TAO NAN SCHOOL

HOLISTIC ASSESSMENT MATHEMATICS REVIEW (2) 2014

Name: _____ ()

Class: Pr 1 ()

Date: _____



Parent's signature: _____

Duration: 20 minutes

Section A (7 x 1 mark)

Choose the correct answer.

Write its number in the brackets provided.

1. Which is the greatest number ?

(1) twelve

(2) twenty

(3) fourteen

(4) eighteen

()

2. _____ = 13

(1) 1 + 3


(2) 10 - 3

(3) 20 - 3

(4) 10 + 3

()

3. Study the picture below carefully.



The cow is _____ from the left.

- (1) 1st
- (2) 2nd
- (3) 3rd
- (4) 4th

()


4. $10 + \square$ is the same as $15 - 3$.

The number in the \square is _____.

- (1) 5
- (2) 2
- (3) 12
- (4) 18

()

5. Study the picture below carefully.



The tallest boy is _____.

- (1) Johan
- (2) Weili
- (3) Raju
- (4) Ben

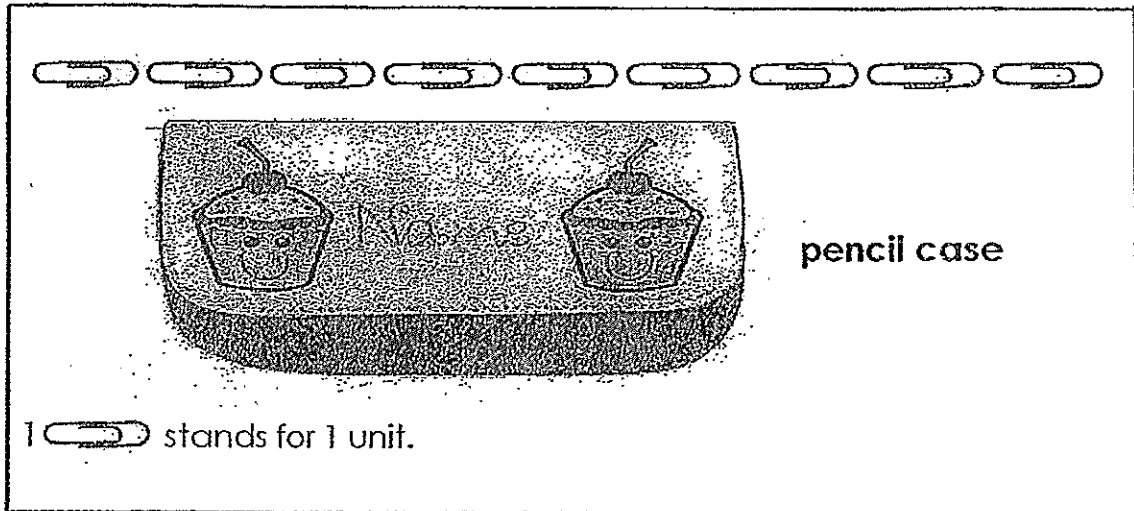
()

6. is greater than 1 ten 4 ones.

- (1) 16
- (2) 14
- (3) 10
- (4) 5

()

7. Study the picture below carefully.



The pencil case is about _____ units long.

(1) 5

(2) 6

(3) 8

(4) 9

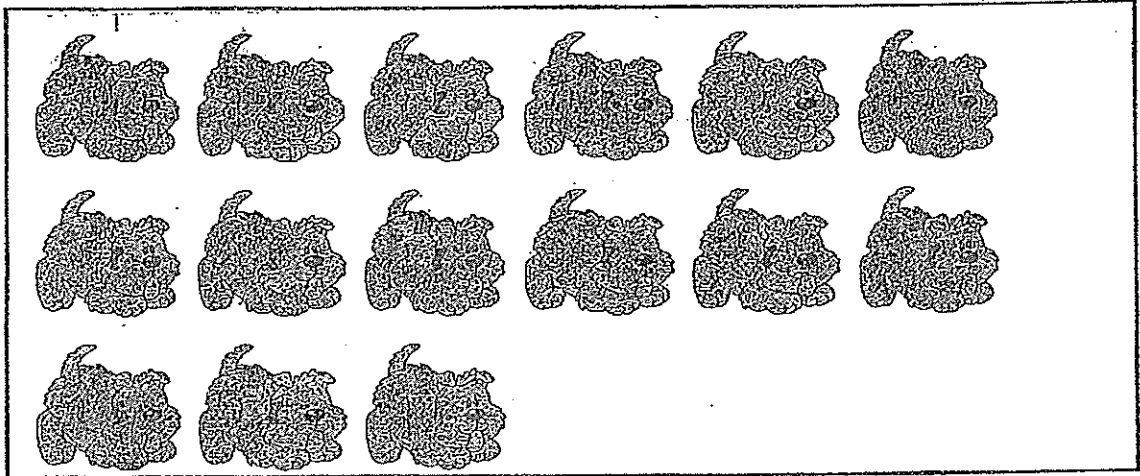
()

Section B (6 x 1 mark)

Read the questions carefully.

Write your answers in the space provided.


8. Count and write the number in **words**.



There are _____ dogs.

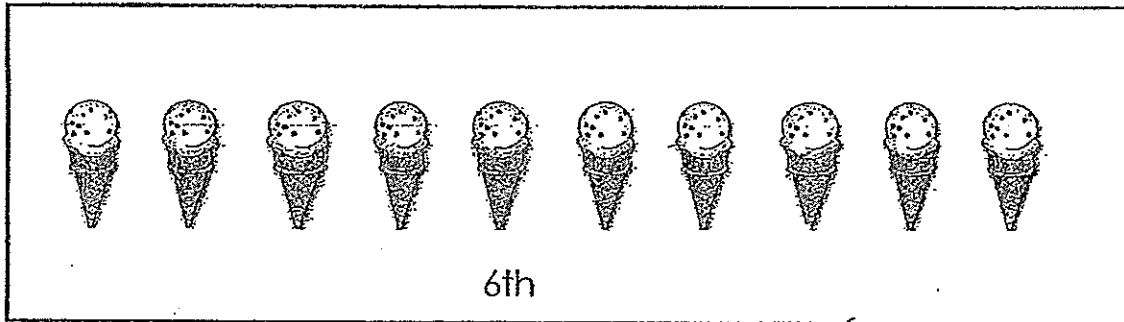
9. Look at the picture below.

Use 'before', 'after' or 'between' to tell the position of Yining.



Yining is _____ Ali.

10. Circle the 3rd ice-cream cone.




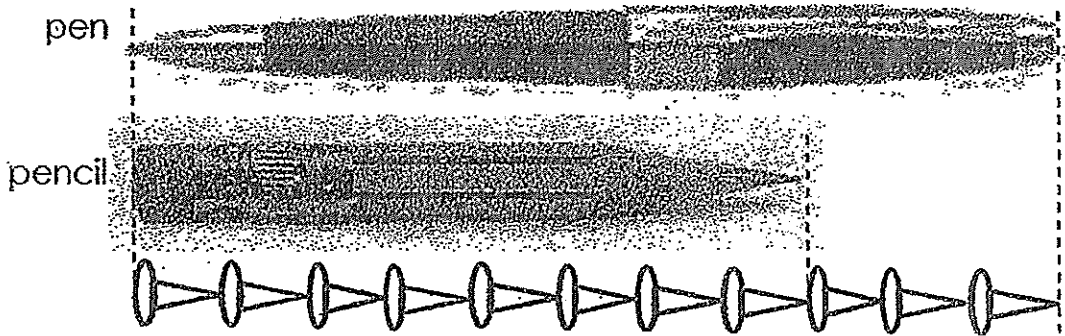
11. Arrange the following numbers in order, beginning with the greatest.



--	--	--	--



greatest


12. Each  stands for 1 unit.



The pencil is _____ units shorter than the pen.

13.  - 5 = 12

 -  = 7

 =


The missing number in the is _____.

Section C (1 x 2 marks)

Read the question carefully.

Write your answers in the spaces provided.

14. Rachel had 16 stickers. She gave some stickers to her brother and had 10 stickers left. How many stickers did Rachel give to her brother ?

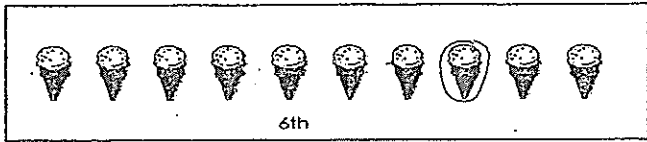


Rachel gave _____ stickers to her brother.

-End of Paper-

EXAM PAPER 2014

LEVEL : PRIMARY 1
SCHOOL : TAO NAN SCHOOL
SUBJECT : MATHEMATICS
TERM : REVIEW (2)

Q1	2
Q2	4
Q3	3
Q4	2
Q5	4
Q6	1
Q7	1
Q8	fifteen
Q9	before
Q10	
Q11	17, 15, 12, 9
Q12	3
Q13	10
Q14	$16 - 10 = 6$ Rachel gave 6 stickers to her brother.

