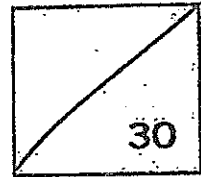


PAYA LEBAR METHODIST GIRLS' SCHOOL (PRIMARY)

Name : _____ ()

Class : Primary 1 _____

Date : _____



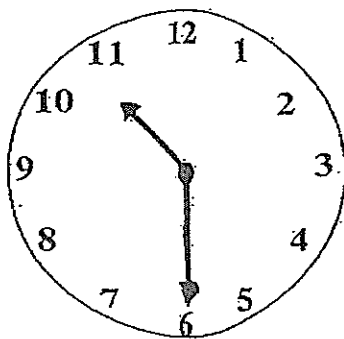
Parent's Signature: _____

Section A: (6 x 1 mark = 6 marks)Choose the correct answer and put a tick in the box .

1. $32 + 58 =$ _____

80	<input type="checkbox"/>
86	<input type="checkbox"/>
90	<input type="checkbox"/>

2. What is the time shown on the clock?



Half past 6	<input type="checkbox"/>
Half past 10	<input type="checkbox"/>
Half past 11	<input type="checkbox"/>

3. $23 + \underline{\hspace{2cm}} = 71$

48	
52	
94	

4. How much does the teddy bear cost?



\$10

\$5

\$2

\$1

\$1

\$17	
\$18	
\$19	

5. $57 = \underline{\hspace{1cm}}$ tens $\underline{\hspace{1cm}}$ ones

7 tens 5 ones	
5 tens 17 ones	
4 tens 17 ones	


6. 1 two-dollar note = $\underline{\hspace{1cm}}$ twenty-cent coins

2	
10	
20	

Section B: (6 x 2 marks = 12 marks)

Read each question carefully. Write your answers clearly in the given blanks. Marks will be given for the correct working.

This picture graph shows the different types of stickers Joyce has.



7a) Joyce has _____ Smurfs stickers.

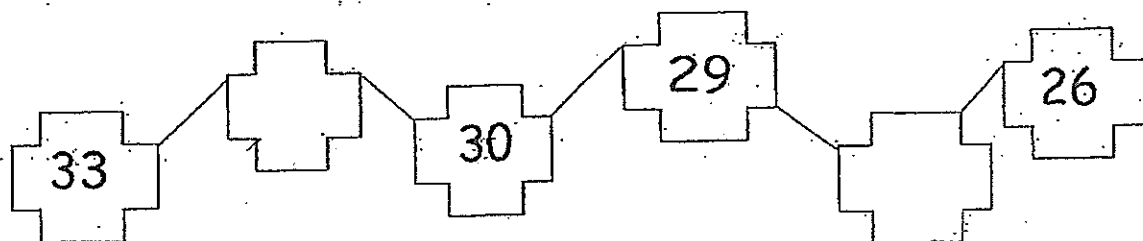
b) Joyce has _____ fewer Princess stickers than Rilakkuma stickers.

8a) Joyce has the most number of _____ stickers.

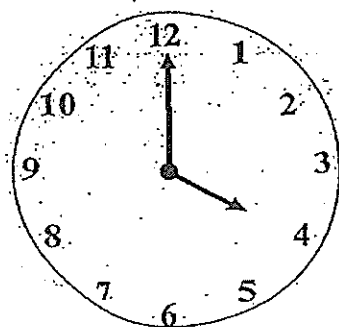
b) Joyce has _____ more Minion stickers than Rilakkuma stickers.

9) Joyce has a total of _____ stickers altogether.

10. Fill in the missing numbers.



11. Fill in the box with the correct time.



12. Arrange the numbers in order, starting from the greatest to the smallest.




greatest

Section D: (4 x 3 marks = 12 marks)

Read the question carefully. Write your answers clearly in the given blanks. Marks will be given for the correct equation.


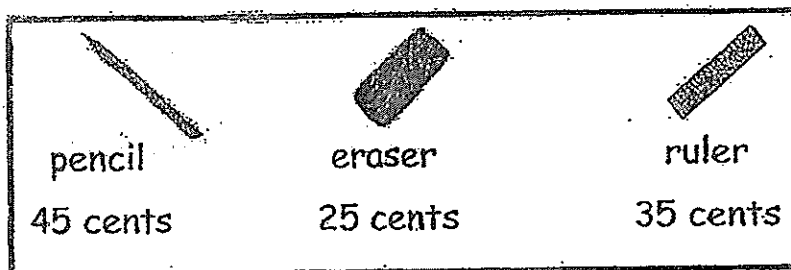
13. Joel scored 83 marks for his English test. He scored 15 marks more in his English test than his Mathematics test. How many marks did he score for his Mathematics test?



He scored _____ marks for his Mathematics test.

14. Hazel has 80 cents.

Which two things can she buy if she wants to use all the money she has?




She can buy the _____ and the _____.

15. Alice is taller than Charis.
Alice is shorter than Betty.
Daisy is shorter than Charis
Who is the tallest girl?

_____ is the tallest girl.

-
16. Mary has a pink blouse, a blue blouse and a yellow blouse.
In how many ways can she wear her blouse if she matches a white skirt or a black skirt with her blouse?



She has _____ different ways.

Year: 2014

Level: P1

School: Paya Lebar Methodist Girls' School

Subject: Mathematics

Semester: Revision 4

Q1) 90

Q2) Half past 10

Q3) 48

Q4) \$19

Q5) 4 tens 17 ones

Q6) 10

Q7a) 4

Q7b) 2

Q8a) Minion

Q8b) 3

Q9) 20

Q10) 32 27

Q11) 4 o' clock

Q12) 99, 89, 67, 38, 35

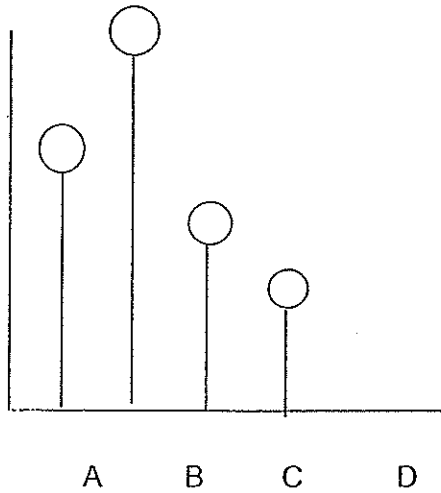
Q13) $83 - 15 = 68$

He scored 68 marks for his Mathematics test.

Q14) $45 + 35 = 80$

She can buy the pencil and the ruler.

Q15)



Betty is the tallest girl.

Q16)

No.	Pink Blouse	Blue Blouse	Yellow Blouse	White Skirt	Black Skirt
1	√			√	
2	√				√
3		√		√	
4		√			√
5			√	√	
6			√		√

She has 6 different ways.