

Parent's Signature:

ST. ANDREW'S JUNIOR SCHOOL
PRIMARY 1 MATHEMATICS 2014

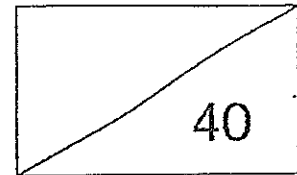
Topics: Numbers to 100, Addition and Subtraction within 100,
Picture Graphs
Topical Test 3

Name: _____ ()

Date: _____

Primary 1 - _____

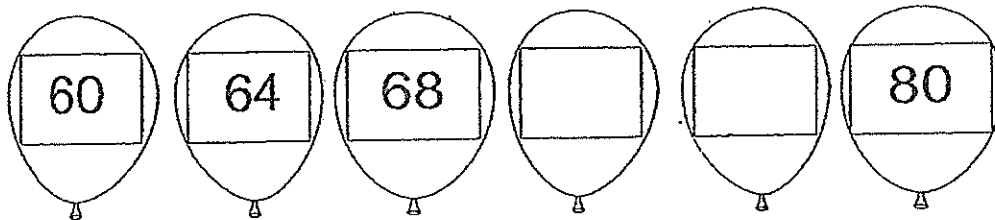
Marks:



Show your working in the space below each question clearly and write your answers in the spaces provided.

- 1) Write 95 in words. (2m)

- 2) Fill in the missing numbers. (2m)



- 3) 78 is _____ less than 90. (2m)

4) Complete the following questions. (6m)

$$\begin{array}{r} \text{a) } 5 \ 3 \\ + 2 \ 4 \\ \hline \\ \hline \end{array}$$

$$\begin{array}{r} \text{b) } 6 \ 8 \\ + 1 \ 7 \\ \hline \\ \hline \end{array}$$

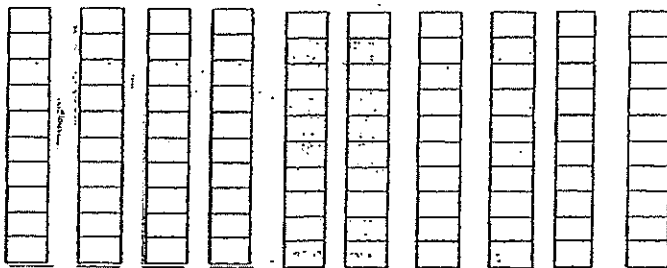
$$\begin{array}{r} \text{c) } 3 \ 9 \\ + 3 \ 2 \\ \hline \\ \hline \end{array}$$

$$\begin{array}{r} \text{d) } 8 \ 9 \\ - 4 \ 7 \\ \hline \\ \hline \end{array}$$

$$\begin{array}{r} \text{e) } 7 \ 4 \\ - 3 \ 8 \\ \hline \\ \hline \end{array}$$

$$\begin{array}{r} \text{f) } 9 \ 0 \\ - 4 \ 7 \\ \hline \\ \hline \end{array}$$

5) Show the following number statement by colouring the correct number of items and fill in the blank. (2m)



$$45 + 34 = \boxed{}$$

6) Circle two numbers that has a difference of 27. (2m)

23

87

50

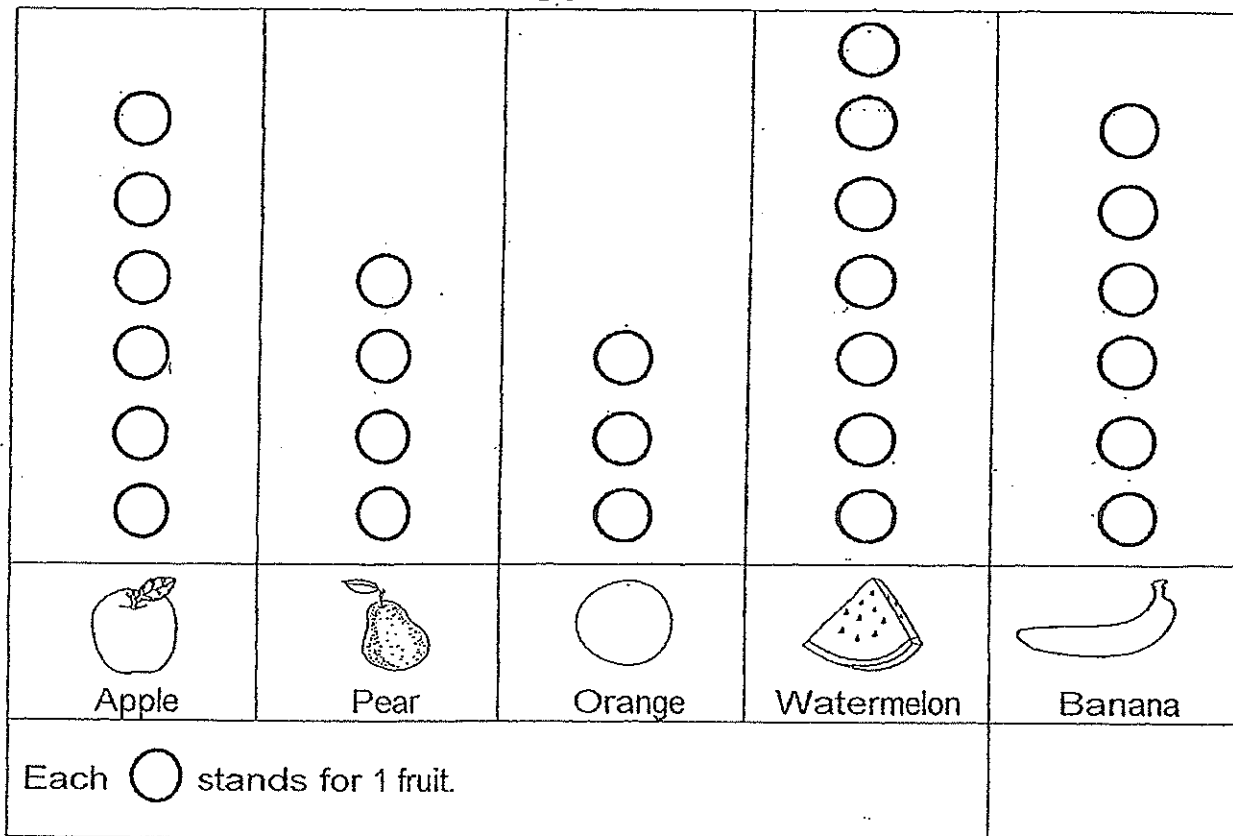
7) Fill in the blank. (4m)

a) - 15 = 55

b) 42 + = 92

The picture graph below shows the types of fruit in a shop. (8m)

Types of fruit

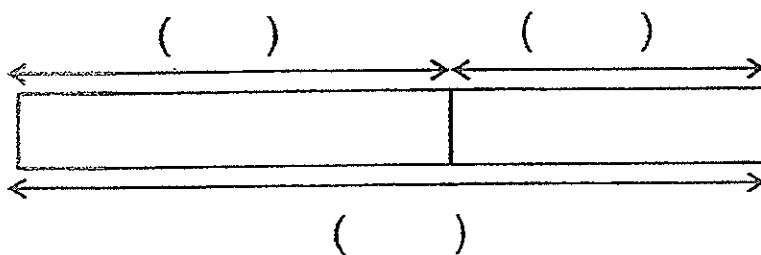


- 8) There are _____ bananas and watermelon altogether.
- 9) There are _____ more watermelons than oranges.
- 10) There are _____ fewer pears than apples.
- 11) There are _____ fruits altogether.

For questions 12 to 15, show your working clearly in the space below each question. (4 x 3 = 12 marks)

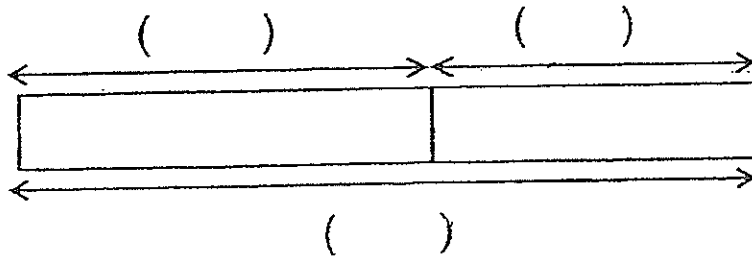
- Complete the given models by writing the correct number in the given bracket and label them.
- Write your number sentences and answers in the spaces provided.

12) There were 78 children at a carnival.
40 of them were girls and the rest were boys.
How many boys were there?



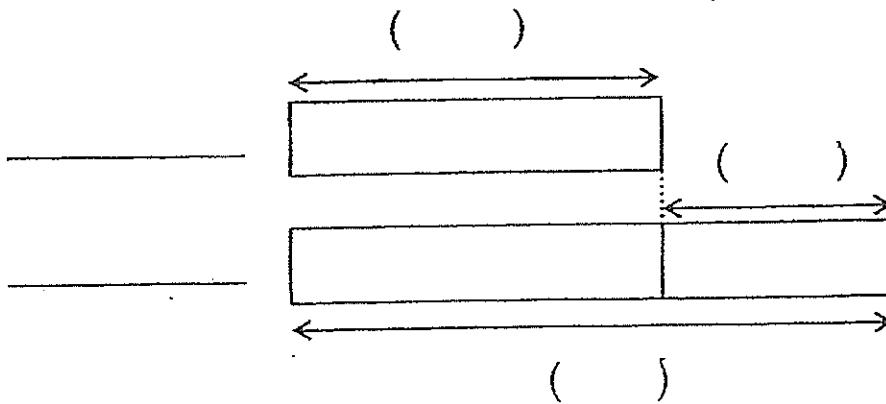
There were _____ boys.

- 13) Mrs Chan buys 45 apples.
She also buys 27 oranges.
How many fruits did she buy altogether?



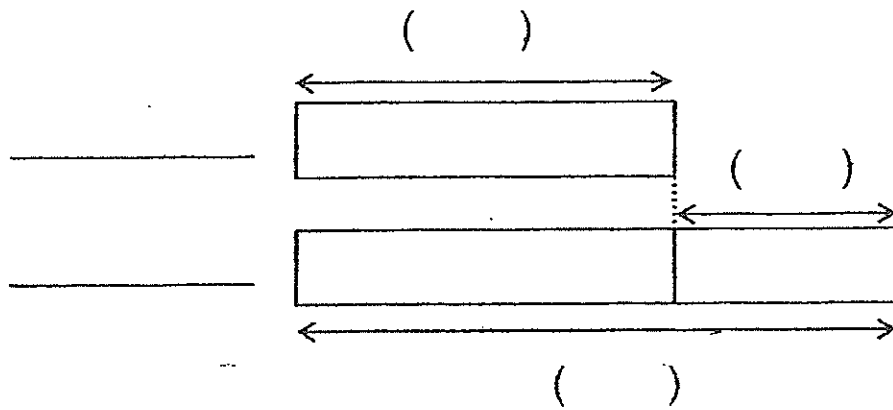
Mrs Chan bought _____ fruits altogether.

- 14) There are 46 flowers.
There are 16 more butterflies than flowers.
How many butterflies are there?



There are _____ butterflies.

- 15) Osman has 59 stamps.
 He has 12 more stamps than David.
 How many stamps does David have?



David has _____ stamps.

End of Paper
 Have you checked your work?

YEAR: 2014

LEVEL: P1

SCHOOL: ST ANDREWS

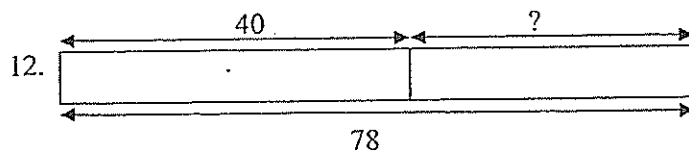
SUBJECT: MATHEMATICS

SEMESTER: TEST 3

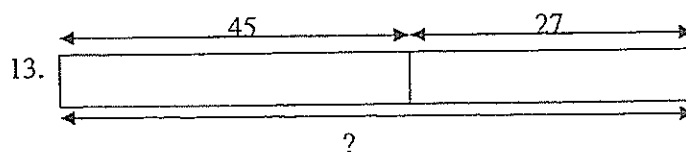
1. ninety- five
2. 72, 76
3. 12
4. a) 77
b) 85
c) 71
d) 42
e) 36
f) 43

5. 79
6. 50 & 23
7. a) 70
b) 50

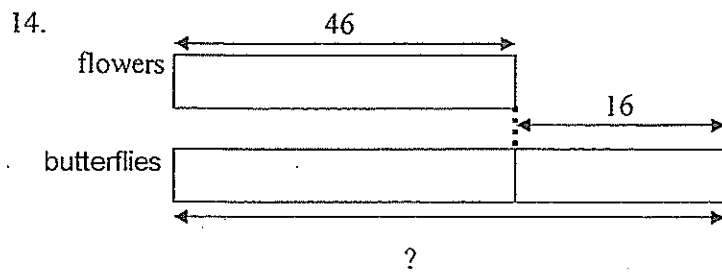
8. 13
9. 4
10. 2
11. 26



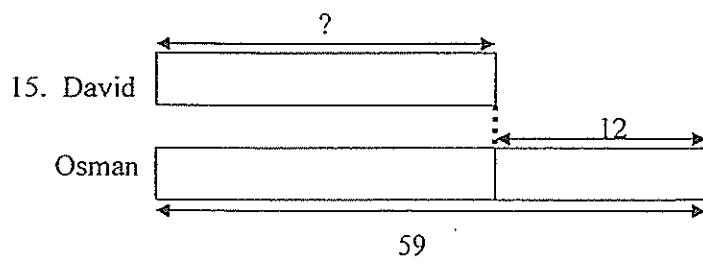
$$78 - 40 = 38$$



$$45 + 27 = 72$$



$$46 + 16 = 62$$



$$59 - 12 = 47$$