

TAO NAN SCHOOL

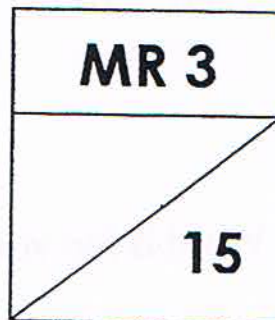
HOLISTIC ASSESSMENT MATHEMATICS REVIEW (3) 2011

Name: _____ ()

Class: Pr 1 ()

Date: _____

Parent's signature: _____



Section A (5 x 1 mark)

Question 1 to 5 carry 1 mark each.

For each question, four options are given.

One of them is the correct answer.

Make your choice (1, 2, 3 or 4) and write it in the brackets provided.

1. 58 is equal to 5 tens and _____ ones ?

(1) 5

(2) 8

(3) 13

(4) 50

()

2. What is $55 + 32$?


(1) 23


(2) 27

(3) 83

(4) 87

()

3. What is the value of  ?

$$7 + 7 + 7 + 7 + 7 = 5 \times \text{$$

(1) 5

(2) 7

(3) 12

(4) 35

()

4. What is 6 tens 12 ones ?

(1) 18

(2) 62

~~(3) 72~~

(4) 612

()

5. Which of the following is **not** equal to 2×5 ?

(1) 2 fives.

(2) $2 + 2$.

(3) $5 + 5$.

(4) 1 ten

()

Section B (5 x 1 mark)


Question 6 to 10 carry 1 mark each.

6. Put 21 cupcakes equally into 3 boxes.



There are _____ cupcakes in each box.

7. Mother picked 12 seashells and shared them equally among Sally and her 3 friends.



Sally received _____ seashells .

8. 69 is _____ less than 89.

9. 33 less than 96 is _____.

10.

$$\begin{array}{r} 9 \square \\ - 77 \\ \hline 19 \\ \hline \end{array}$$

The missing number in the box is _____.

Section C (Q11: 1 x 2 marks , Q12: 1 x 3 marks)

Solve these work problems.

11. There are 47 red apples.

There are 36 more green apples than red apples.

How many green apples are there ?

$$\square + \textcircled{+} \square = \square$$

There are _____ green apples.

12. Terry gave 15 sweets to each of his 2 friends.

He had 26 sweets left.

How many sweets did Terry have at first?

$$\square - \textcircled{-} \square = \square$$

$$\square + \textcircled{+} \square = \square$$

Terry had _____ sweets at first.



ANSWER SHEET

EXAM PAPER 2011

SCHOOL : TAO NAN
SUBJECT : PRIMARY 1 MATHEMATICS

TERM : REVIEW 3

Q1	Q2	Q3	Q4	Q5	Q6	Q7
2	4	2	3	2	7	3

8)20 9)63 10)6

11) $47 + 36 = 83$

There are 83 green apples.

12) $15 + 26 = 41$

$41 + 15 = 56$

Terry had 56 sweets at first.