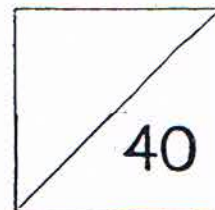


Henry Park Primary School

Primary 1

Mathematics Quiz

Multiplication, Division, Time and Money




Name : _____ () Class : 1 ()

Date : _____ Parent's signature: _

Section A : Multiple-Choice Questions (1 mark each)


Read the questions carefully. Choose the correct answer and put a tick in the correct box.

1. What is the time shown on the clock?



9 o'clock	
10 o'clock	
12 o'clock	

2. Ali goes home at half past _____.




Half past 4	
Half past 5	
Half past 6	

3. Which box has the greatest amount of money?

$50¢ + 10¢ + 10¢ + 5¢ + 5¢$	
$5¢ + 5¢ + 5¢ + 10¢ + 20¢$	
$50¢ + 20¢ + 10¢ + 5¢ + 5¢$	

4. Joseph wanted to buy a book but he found out that he did not have enough money. If he had only \$4, how much more did he need?



\$13

$\$2 + \$3 + \$5$	
$\$2 + \$2 + \$5$	
$\$1 + \$2 + \$10$	

5. Mrs Chua bakes 14 cupcakes. She divides the cupcakes equally into groups of 2. How many groups are there?




2	
5	
7	

6. Raymond has 7 jars of cherries. There are 5 cherries in each jar. How many cherries does Raymond have altogether?



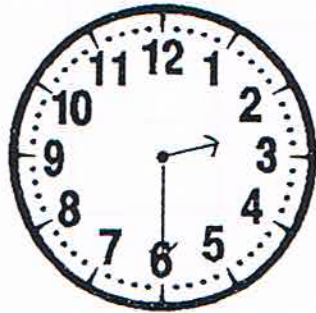
25	
35	
45	

7. There are 16 bananas. Put the bananas into 4 equal groups. How many bananas are there in each group?



3	
4	
5	

8. Nicholas left home at half past 2 in the afternoon. The journey from his home to the library is half an hour. What time will he reach the library?



1 o'clock	
3 o'clock	
5 o'clock	

9. 4 fives = _____

$6 + 5$	
$4 + 4 + 4 + 4 + 4$	
$5 + 5 + 5 + 5$	

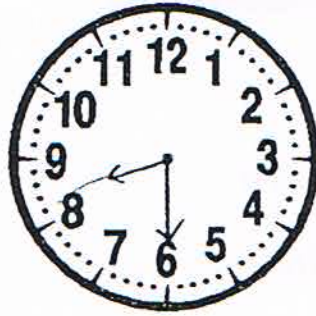
10. How many 20-cent coins are needed to make \$1?

5	
6	
7	

Section B: Fill in the blanks (2 marks each)


Read the questions carefully. Write your answers clearly in the blanks provided.

11. What is the time shown on the clock below?



The time is _____

12. What is the time shown on the clock below?



The time is _____


129

13. Mrs Ng went to a shop. She spent \$93.
Which 2 items did she buy?



clock

\$28



radio

\$65



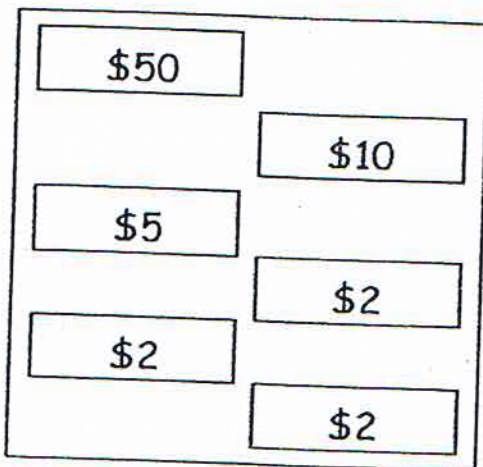
kettle

\$34

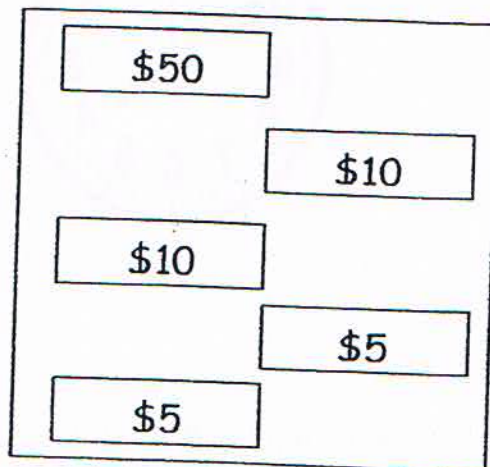
She bought a _____ and a _____.

14. $50¢ + 20¢ + 10¢ + 5¢ + 5¢ =$ _____

15. Look at the two sets of money. Which set has a greater amount?



Set A



Set B

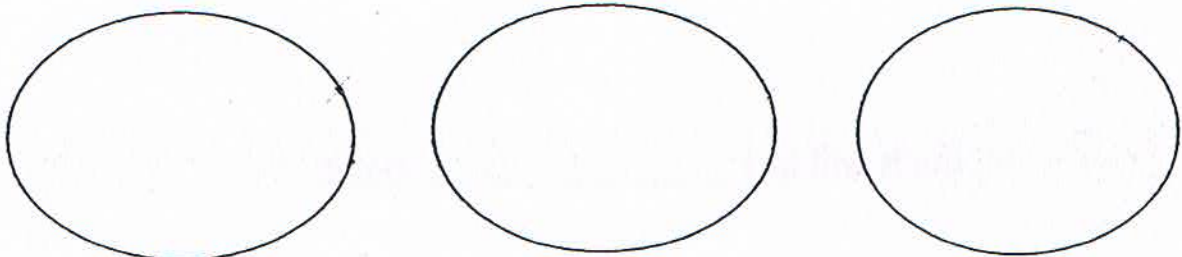
Set _____ has a greater amount.

16. A beetle has 6 legs. How many legs do 4 beetles have?




4 beetles have _____ legs.

17. Nicole wants to put 15 apples equally on 3 plates.
How many apples should she put on each plate?
Draw to show the number of apples on each plate.



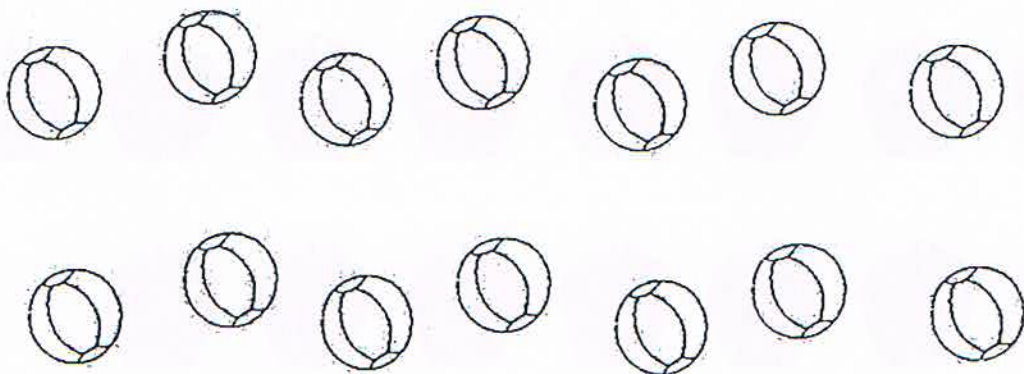
18. Ring the strawberries into groups of 6.



There are _____ groups.

19. Mickey and Goofy shared 14 balls equally.

Ring to show how many balls each of them will get.



Each will get _____ balls.

Section C: Problem Sums (4 marks each)

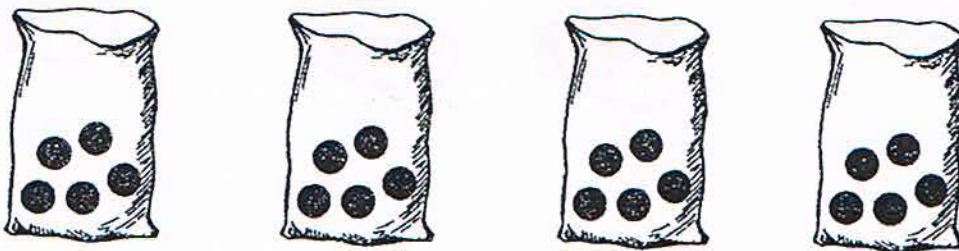
Read and solve the sums. Show all number and word sentences in your answer.

20. Ken had \$50. He bought a book that cost \$12. How much money did he have left?

| working


Ken had _____ left.

21. There are 5 marbles in each bag.
How many marbles are there in 4 bags?



There are _____ marbles in 4 bags.

22. The erasers shown below are sold in packets of 4.
How many packets of erasers are there?
(Ring to show the number of packets.)



There are _____ packets of erasers.

--- End of Paper ---

Did you check your work?



ANSWER SHEET

EXAM PAPER 2011

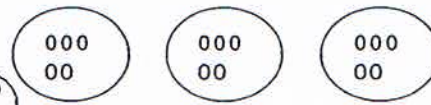
SCHOOL : HENRY PARK
 SUBJECT : PRIMARY 1 MATHEMATICS


TERM : SA2

1)10 o'clock 2)Half past 5 3) $50¢+20¢+10¢+5¢+5¢$ 4) $\$2+\$2+\$5$

5)7 6)35 7)4 8)3 o'clock 9) $5+5+5+5$ 10)5

11)The time is half past 8 12)The time is 4 o'clock 13)radio , clock

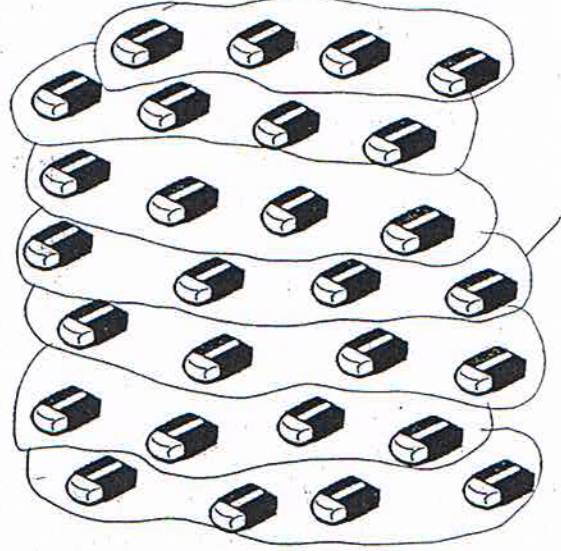
14)90¢ 15)B 16)24 legs 17) 

18)3 group 19) 

Each will get 7 balls.

20) $\$50 - \$12 = \$38$
 Ken had \$38 left.

21) $5 + 5 + 5 + 5 = 20$
 There are 20 marbles in 4 bags.

22) 

There are 7 packets of erasres.