



Pei Hwa Presbyterian Primary School
Topical Test 3 – 2011
Mathematics
Primary 1
(Time: 30 min)

Total	
-------	--

Name: _____ ()

Class: Integrity _____

Date: _____

Parent's Signature: _____

Section A (1 mark each)

Write the correct answer in the blanks provided. For questions that require working, show your working clearly in the space provided.

1. 7 less than 14 is _____.

2. 13 is between ¹²~~15~~ and _____.

3. _____ is 5 more than 12.

4. 8 is _____ less than 11.

Write in word.

5.

67	_____
----	-------

6.

93	_____
----	-------

7.

100	
-----	--

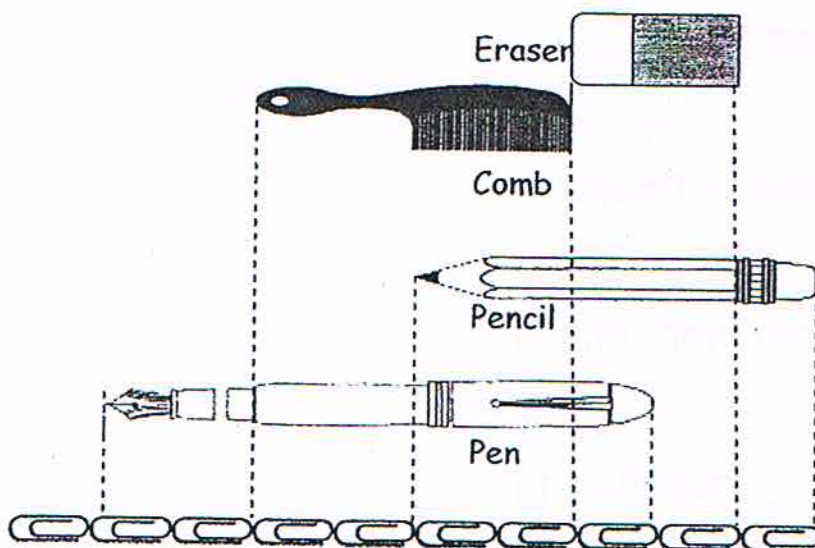
Fill in the blanks:

8. 50 and _____ make 56.

9. 70 and 4 make _____.

10. 5 tens and 12 ones = _____.

Study the picture carefully and answer questions 11 to 15.



11) The comb is _____  long.


12) The _____ is 2  long.

13) The _____ is longer than the pencil.

14) The comb is _____  longer than the eraser.

15) The _____ is the shortest.

Study the diagrams below and answer questions 16 to 18.



Each \bigcirc stands for 1 unit.

16) The jug weighs _____ \bigcirc .

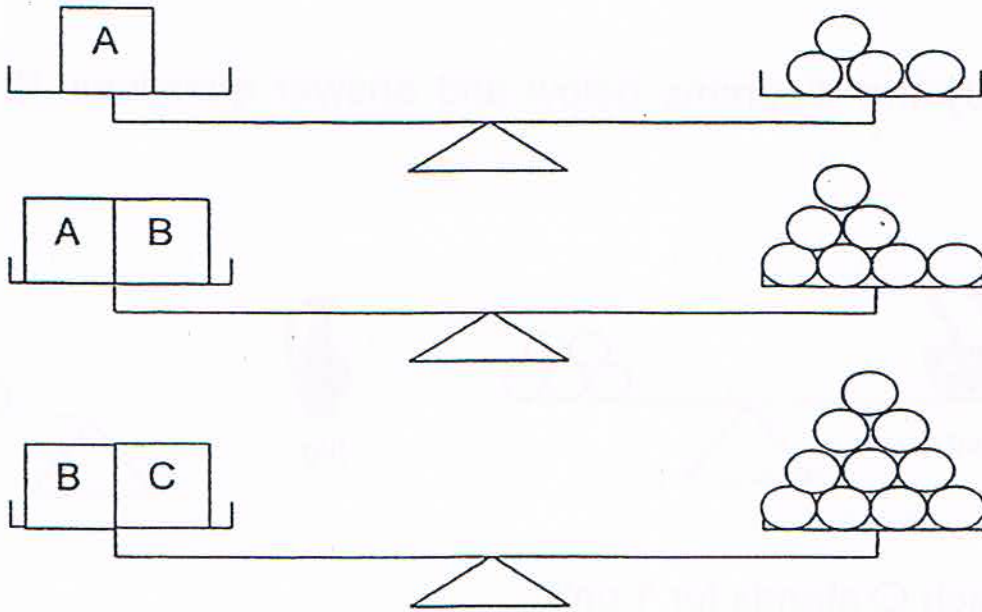
17) The bag is _____ \bigcirc lighter than the jug.

18) The total mass of the bag and the jug is _____ \bigcirc .

Section B (2 marks each)

Study the picture and answer questions 19 and 20.

Each ○ stands for 1 unit.



19) The mass of Box C is _____ units.

20) Arrange the boxes in order.



Section C (4 marks each)

Solve each of the following problem sums. Show all workings and statements clearly.

21. David has 45 stickers.

He gives 12 stickers to Johan and buys another 20 stickers.



How many stickers does David have now?

$$\square \ominus \square = \square$$

$$\square \oplus \square = \square$$

David has _____ stickers now.

22. There are 38 apples and oranges in a basket.
There are 13 oranges in the basket.
There are 5 red apples and the rest are green
apples.
How many green apples are there?



There are _____ green apples.



ANSWER SHEET

EXAM PAPER 2011

SCHOOL : PEI HWA
SUBJECT : PRIMARY 1 MATHEMATICS

TERM : Test 3

- 1)7 2)14 3)17 4)3 5)sixty-seven 6)ninety-three
7)one hundred 8)6 9)74 10)62 11)4 12)eraser
13)pen 14)2 15)eraser 16)7 17)2 18)12 19)7
20)C, A, B
21) $45 - 12 = 33$
 $33 + 20 = 53$
David has 53 stickers now.
22) $38 - 13 = 25$
 $25 - 5 = 20$
There are 20 green apples.