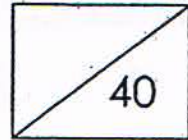


**KONG HWA SCHOOL
TOPICAL TEST THREE 2011
MATHEMATICS
PRIMARY ONE**

Name: _____ ()

Marks:



Class: Pr 1 (_____)

Date: 13 October 2011

Duration: 45 minutes

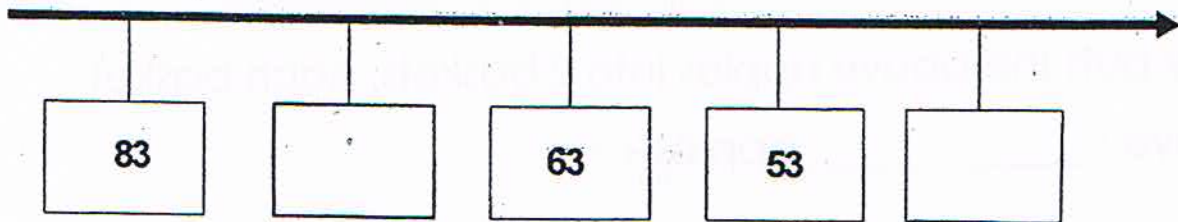
Parent's Signature: _____

Section A (14 x 2 marks)

Do Questions 1 to 15 carefully.

Fill in the blanks

1. Write the missing numbers on the number line.



2. Fill in the blanks.

a. $90 - \underline{\hspace{2cm}} = 49$

b. $35 + 48 = \underline{\hspace{2cm}}$ tens + 3 ones

3. Fill in the missing numbers in the boxes.

a.

$$\begin{array}{r} 3 \square \\ - \square 7 \\ \hline 1 3 \\ \hline \hline \end{array}$$

b.

$$\begin{array}{r} 8 \square \\ - \square 7 \\ \hline 2 5 \\ \hline \hline \end{array}$$

4.



a)

If Mary puts the above apples into 3 baskets, each basket will have _____ apples.

b)

If Mary puts the above apples into 2 baskets, each basket will have _____ apples.

5.

Cross out the box that is not equal to 24.

8 threes

4 X 6

7 + 7 + 7

2 groups of 12

6.

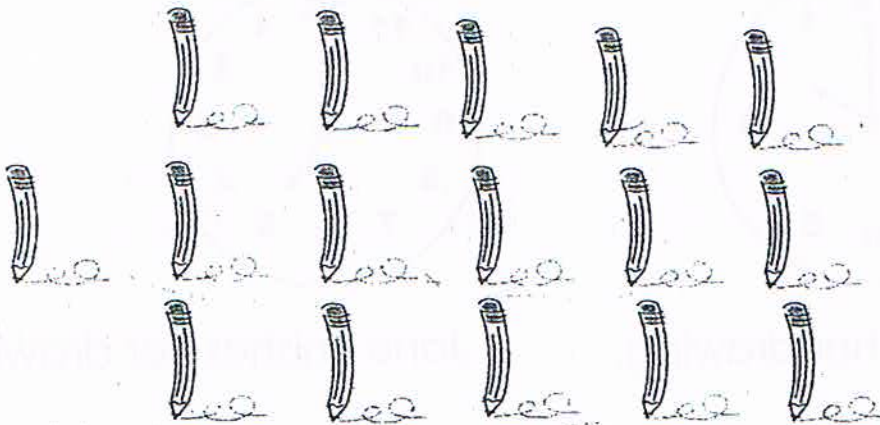


_____ more butterflies are needed to make
3 groups of 6.

7. There are 16 pencils.



There are 6 boys and 2 girls.

Ring the pencils to show how many pencils each child will get.




Each child will get _____ pencils.


8. Write the time shown on the clock.



9. The clock below shows the time Jane starts her drawing and finishes her drawing.



Jane starts her drawing.



Jane finishes her drawing.

a. Jane starts her drawing at _____.

b. She finishes her drawing at _____.

10. When I add two numbers, I get 18.
When I subtract the two numbers from each other,
I will get 4. What are the two numbers?

The two numbers are _____ and _____.

11. Colour 6 coins that add up to 95¢.



Look at the pictures below and answer the questions below.



\$5

eraser



\$1

book



\$13

tissue
box



\$4

2. May has 9 two-dollar notes.

If she spends all her money on buying 3 things, what can she buy?

She can buy _____, _____ and

_____.

3. The total cost of the tissue box, eraser and pen is \$ _____ less than the book.

14. Mary has **4 twenty-cent coins** in her pocket. She wants to buy a pencil.



- a. Mary has _____ ¢ at first.
- b. She will get _____ ¢ change after buying the pencil.

Section B (4 x 3 marks)

Do the sums below carefully. Show your working clearly.

15. Peter has \$65.

If Peter has \$27 more than his sister,
how much money does his sister have ?

$$\square \quad \bigcirc \quad \square = \square$$

His sister has \$ _____

16. Mary eats 3 slices of bread every morning.

How many slices of bread will she eat in a week?

$$\square \circ \square = \square$$

She will eat _____ slices of bread in a week.

17. I have 4 bags of marbles.

Each bag has 5 marbles.

How many marbles do I have ?


$$\square \circ \square = \square$$

I have _____ marbles

18. Ruth had 55 sweets.

She gave away some sweets and had 17 left.

How many sweets did she give away?



She gave _____ sweets away.

End - of - Paper

Please remember to check your answers.





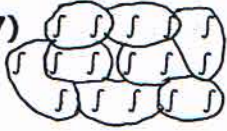
ANSWER SHEET

EXAM PAPER 2011

SCHOOL : KONG HWA
SUBJECT : PRIMARY 1 MATHEMATICS

TERM : TEST 3

1)73, 43 2)a)41 b)8 3)a)30 - 17 = 13 b)82 - 57 = 25

4)a)4 b)6 5)7+7+7 6)6 7)  Each child will get 2 pencils

8)a)half past 4 b)half past 7 9)a)2 o'clock b)5 o'clock 10)11 and 7

11)5c, 10c, 10c, 50c, 10c, 10c 12)she can buy book, tissue box and eraser.

13)\$3 14)a)80c b)45c

15)65 - 27 = 38
His sister has \$38.

16)7 x 3 = 21
She will eat 21 slices of bread in a week.

17)4 x 5 = 20
I have 20 marbles.

18)55 - 17 = 38
She gave 38 sweets away.