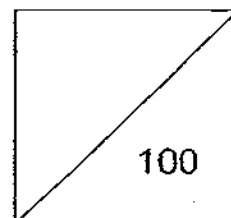




HENRY PARK PRIMARY SCHOOL  
2009 END OF YEAR REVIEW  
MATHEMATICS  
PRIMARY 1



Name: \_\_\_\_\_ ( ) Parent's Signature \_\_\_\_\_

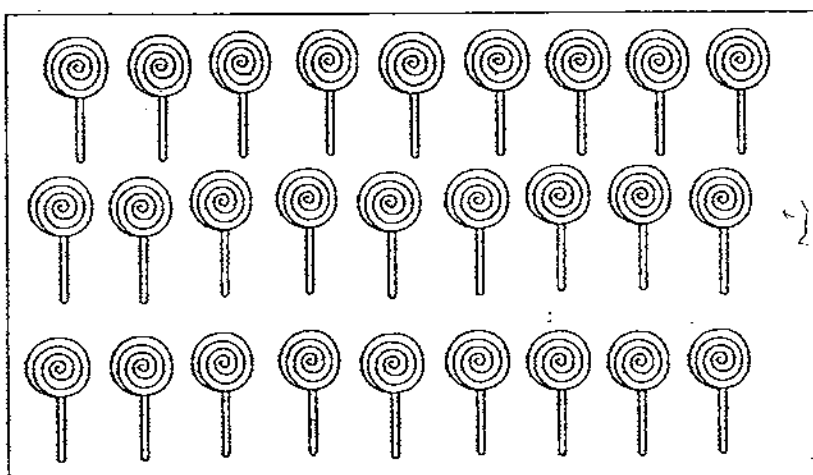
Class: Pr 1 \_\_\_\_\_

Duration of Paper: 1 h 30 min

Section A : (10 x 2 marks = 20 marks)

Choose the correct answer and write its number in the brackets provided.

1. How many lollipops are there in the box?



1) 26	
2) 27	
3) 28	
4) 29	( )

2.  $18 + 2 = \square$  tens

This missing number in the box is \_\_\_\_\_.

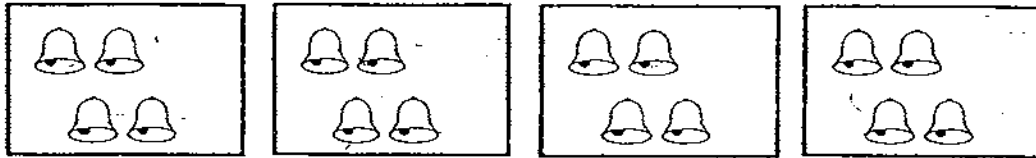
1) 1	
2) 2	
3) 18	
4) 20	( )

3. 7 twos = \_\_\_\_\_.

Which of the following is **not** correct?

1) $7 \times 2$	
2) $2 + 2 + 2 + 2 + 2 + 2 + 2$	
3) $7 + 7 + 7 + 7 + 7 + 7 + 7$	
4) 7 groups of 2	( )

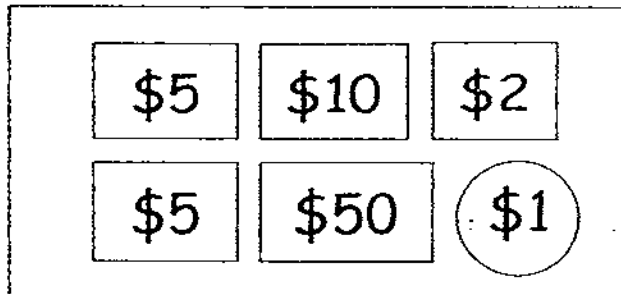
4.



Which number sentence can be used to represent the above pictures?

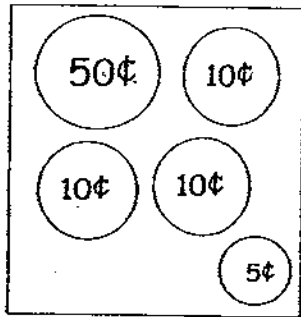
1) $4 + 4$	
2) $4 \times 4$	
3) $2 + 2$	
4) $2 \times 4$	( )

5. How much money is there in the box below?

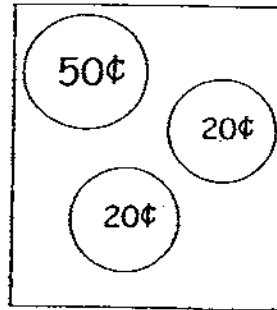


1) \$71	
2) \$73	
3) \$80	
4) \$83	( )

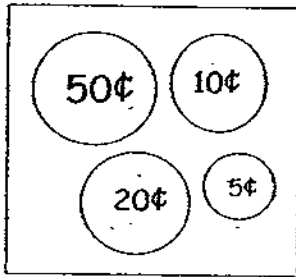
6. Which set has the greatest amount of money?



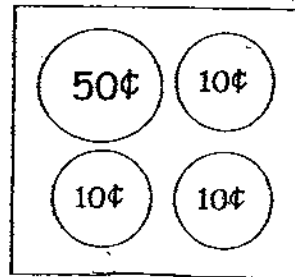
Set A



Set B



Set C



Set D

1) Set A	
2) Set B	
3) Set C	
4) Set D	( )

7.



The time shown on the clock is \_\_\_\_\_.

1) half past 6	
2) half past 11	
3) 6 o'clock	
4) 11 o'clock	( )

8.

$$62 - \square = 16.$$

What is the missing number in the box?

1) 46	
2) 54	
3) 58	
4) 78	( )

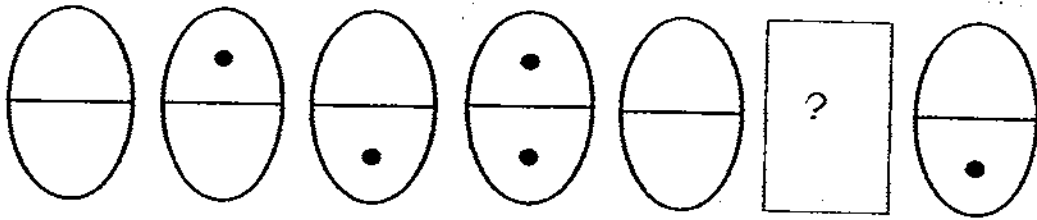
9.

Jane is third in the line. There are 6 people behind her.  
How many people are there in the line altogether?

1) 3	
2) 6	
3) 9	
4) 10	( )

10. Study the pattern carefully.

What is the missing shape in the pattern?



1)		
2)		
3)		
4)		( )

Section B : Open - ended Questions (30 x 2 marks = 60 marks)

Fill in your answers in the blanks and boxes provided.

11. Write the number in words.


48	
----	--

12.



Circle the fifth cone.

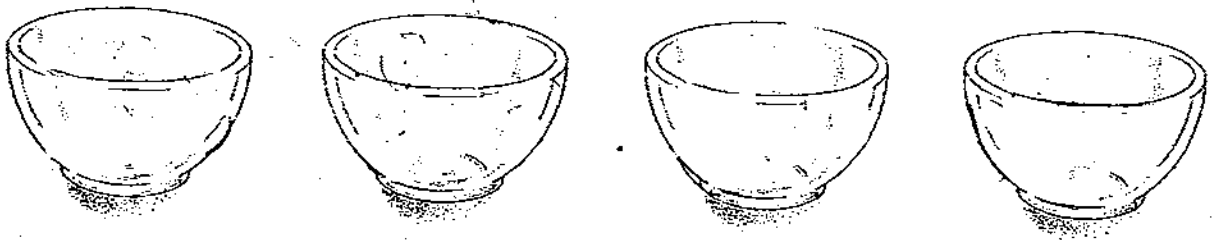
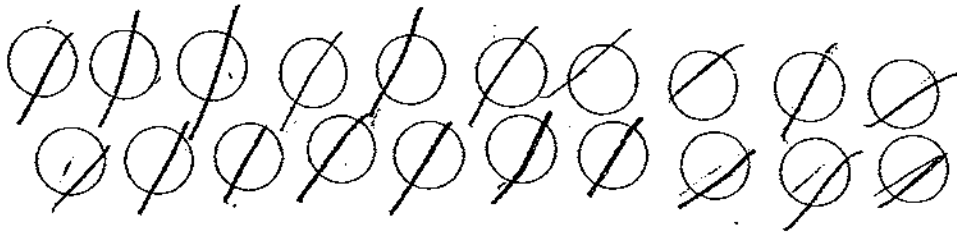
13. Ring the sheep in groups of 2.



There are \_\_\_\_\_ groups of sheep.


14. Walter wants to put 20 fishballs equally into 4 bowls.

How many fishballs are there in each bowl?



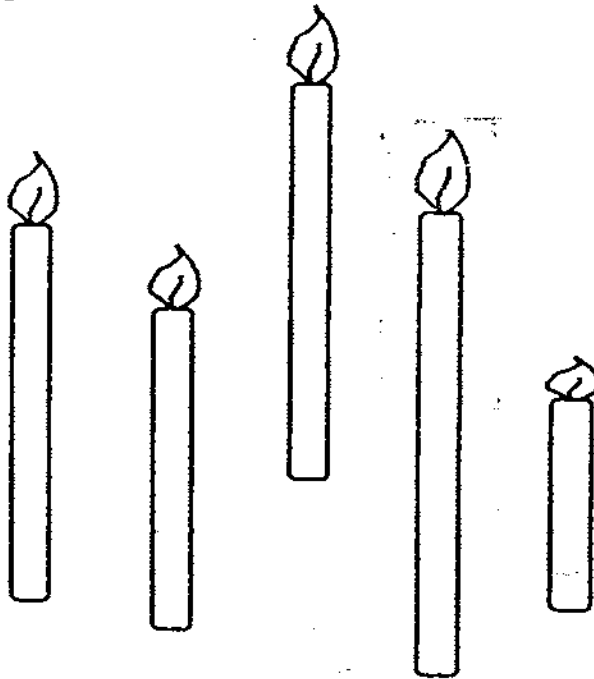
fishballs

15. The shape of the shaded part is a \_\_\_\_\_.






16. Ring the longest candle.



17. A cartoon show started at 10 a.m. and it lasted 1 hour. At what time did the show end?



--

a.m.

18. I am a whole number. I am 1 more than 19. I come just before 21.

What am I?

19. 8 less than 57 is




20. Write the numbers in order. Begin with the smallest number.

74, 39, 100, 14, 47

smallest


greatest

21. Write a multiplication sentence based on the pictures shown below.



$$\underline{\hspace{2cm}} \times \underline{\hspace{2cm}} = \underline{\hspace{2cm}}$$


22.



A spider has 8 legs.

4 spiders have \_\_\_\_\_ legs altogether.

23. Draw  s in the boxes to show 3 groups of 5.



24. Jason uses some sticks to form some squares as shown below.  
How many such squares can he make if he has ~~24~~ sticks?

25



\_\_\_\_\_ squares

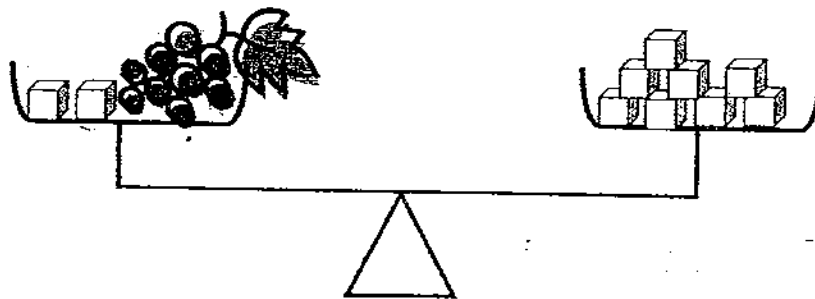
25. Jolene shares 15 ice creams equally with his 2 sisters.



Each of them receives \_\_\_\_\_ ice creams.

26. Study the diagram below carefully. The mass of the grapes is


\_\_\_\_\_



27. Ahsley is in Primary One and she is in the afternoon session.

What time will she leave for school?

Tick (✓) the box that shows the correct time.




A

B

C

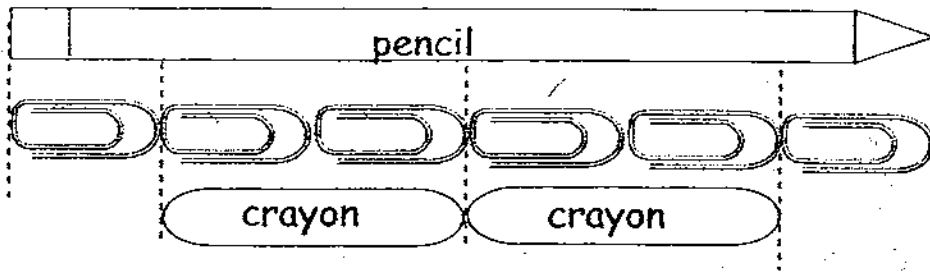
Look at the picture below carefully and answer questions 28 and 29.



28. There are \_\_\_\_\_ circles altogether.

29. There are \_\_\_\_\_ fewer triangles than circles.

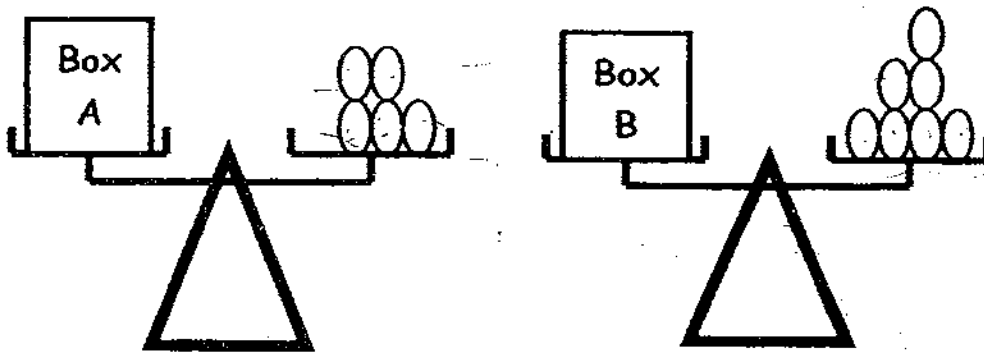
30. Study the picture below carefully and answer questions 30 (a) and 30 (b).



(a) The pencil is \_\_\_\_\_  long.

(b) The pencil is \_\_\_\_\_  longer than 2 crayons.

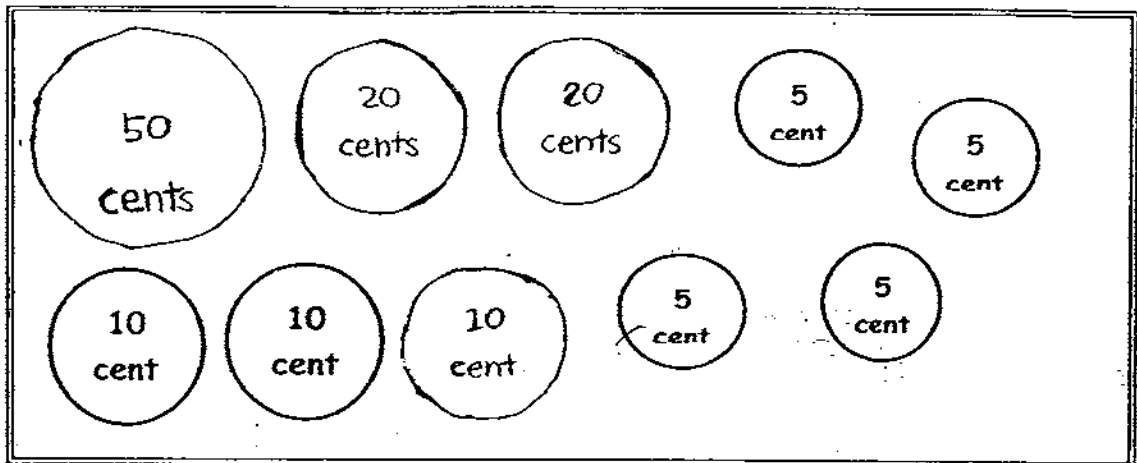
31.



Each  stands for 1 unit.

Box B is \_\_\_\_\_ units heavier than Box A.

32. Colour 5 coins in the box below that will make \$1.



33.



A calculator  
\$6



A book  
\$3



A pair of  
scissors  
\$2



A handbag  
\$7

Miss Sim bought 2 of the above items for exactly \$10.

She bought a \_\_\_\_\_ and a \_\_\_\_\_.

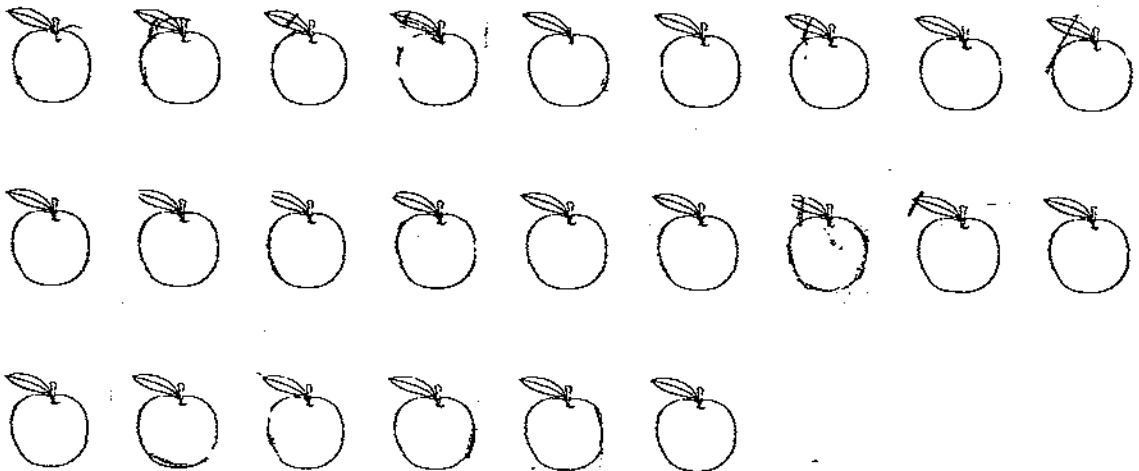




37. Apples were sold at 4 for \$1. Debbie bought 12 apples. How much did she pay for the apples?

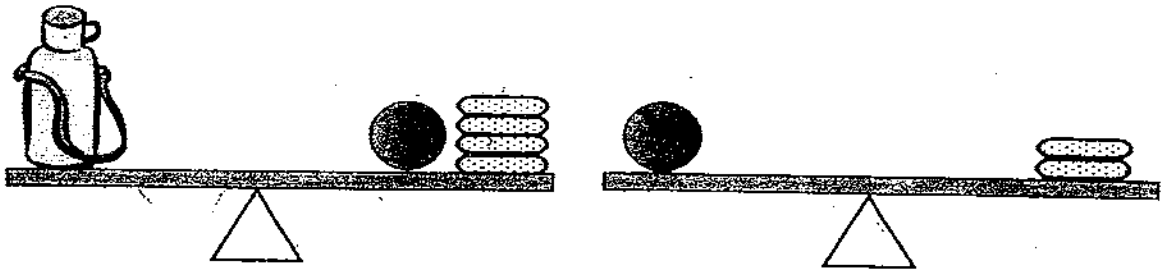
\$
----


38. Mrs Leong has 24 apples. She packs 3 apples in one basket. How many baskets does she need?




She needs \_\_\_\_\_ baskets.

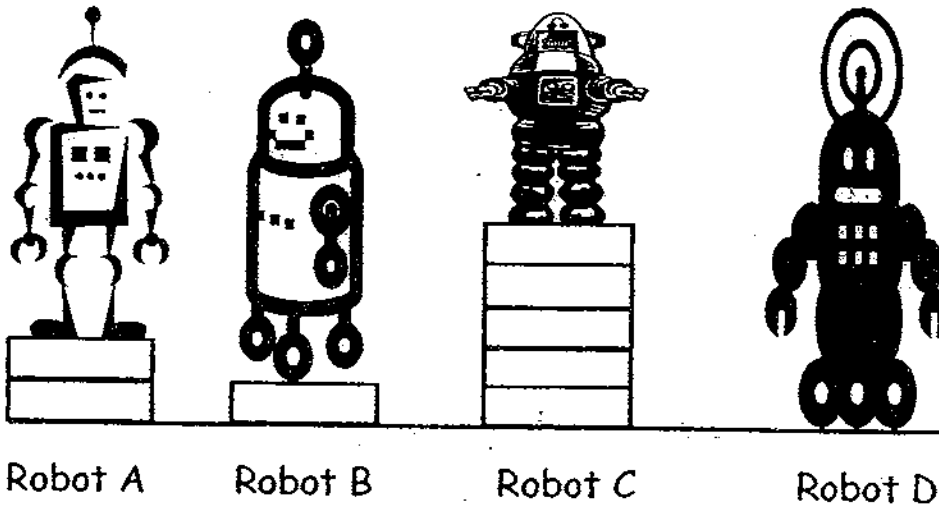
39. Study the diagrams below carefully.



Each  stands for 1 wooden block.

The mass of the  is \_\_\_\_\_ wooden blocks.

40.



The shortest robot is Robot \_\_\_\_\_.

NAME: \_\_\_\_\_ ( )

CLASS: \_\_\_\_\_

Section C ( 5 x 4 marks = 20 marks)

Read each question carefully. Show your working and statements clearly in the spaces provided.

41. Mdm Nor has 62 apples in a basket. She has 35 fewer apples than oranges. How many oranges does Mdm Nor have?

Working

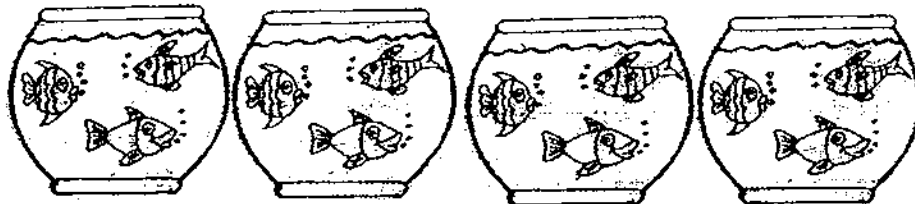
Mdm Nor has \_\_\_\_\_ oranges.

42. After giving 7 sweets to his brother and 8 sweets to his sister, James had 15 sweets left. How many sweets did James have at first?

Working

James had \_\_\_\_\_ sweets at first.

43. Mr Ho has 4 fish bowls.  
There are 3 fish in each bowl.  
How many fish does Mr Ho have altogether?




Working

Mr Ho bought \_\_\_\_\_ fish altogether.

44. Matthew and his 3 friends share 12 toy cars equally.

How many toy cars does each of them get?

*Ring to show answer*



Working

Each one gets \_\_\_\_\_ toy cars.

45. A story book cost \$2. Mrs Tan bought 3 such story books.

(a) How much did she spend altogether?

Working

Mrs Tan spent \_\_\_\_\_ altogether.

(b) The cashier gave her \$4 change.


How much did she give to the cashier at first?

She gave the cashier \$\_\_\_\_\_ at first.

---

-END OF PAPER-

Setter: Mdm Ong Li Ling




# ANSWER SHEET

**EXAM PAPER 2009**

**SCHOOL : HENRY PARK PRIMARY  
SUBJECT : PRIMARY 1 MATHEMATICS**

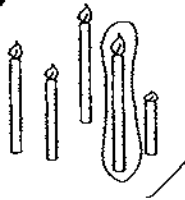
**TERM : SA2**



Q1	Q2	Q3	Q4	Q5	Q6	Q7	Q8	Q9	Q10
2	2	3	2	2	2	2	1	3	2

11) forty-eight      12) p o p p p p      13) 5      14) 5      15) triangle

16)      17) 11 a.m.      18) 20      19) 49      20) 14, 39, 47, 74, 100



21)  $3 \times 6 = 18$       22) 32      23) 

△△
△△
△

△△△
△△

△△△
△△

24) 8      25)

Each of them receives 5 ice creams.

26) 6      27) B      28) 12      29) 10      30) a) 6      b) 2      31) 2

32) 50c, 20c, 20c, 5c, 5c,      33) She bought a handbag and a book.

34) 34      35)  $62 + 13 = 75$       36) 14 legs      37) \$3      38) 8      39) 6      40) C

41)  $62 + 35 = 97$   
Mdm Nor has 97 oranges.

42)  $7 + 8 = 15$   
 $15 + 15 = 30$   
James has 30 sweets at first.

43)  $4 \times 3 = 12$   
Mr Ho bought 12 fish altogether.

44)  $12 \div 4 = 3$   
Each one gets 3 toy cars.

45) a)  $3 \times 2 = 6$   
Mrs Tan spent \$6 altogether.  
b)  $6 + 4 = 10$   
She gave the cashier \$10 at first.