


2020 Sec 4 Science Chemistry Prelim - East Spring Sec

2

- 21 Which of the following apparatus is most suitable to measure exactly 25.40 cm³ of aqueous sodium hydroxide into a beaker?




A



B



C



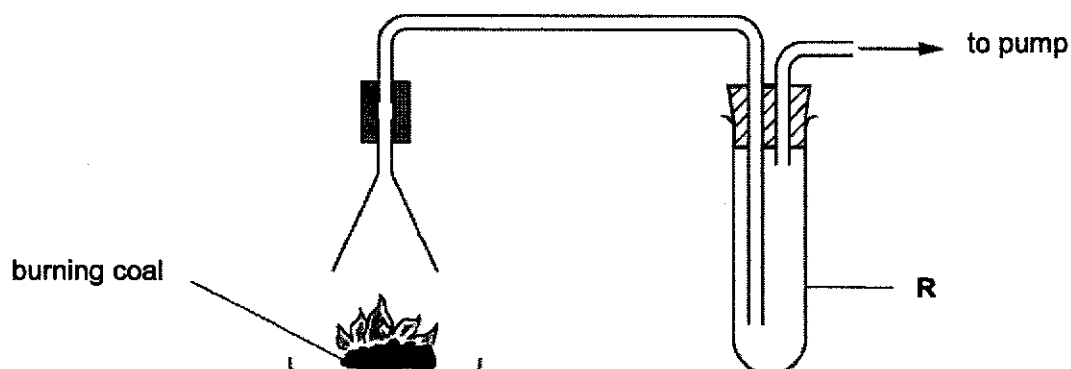
D

- 22 Mercury is a liquid at 25 °C.

What is the melting point and the boiling point for mercury?

	melting point/ °C	boiling point/°C
A	45	108
B	- 5	- 90
C	- 89	- 4
D	-39	357

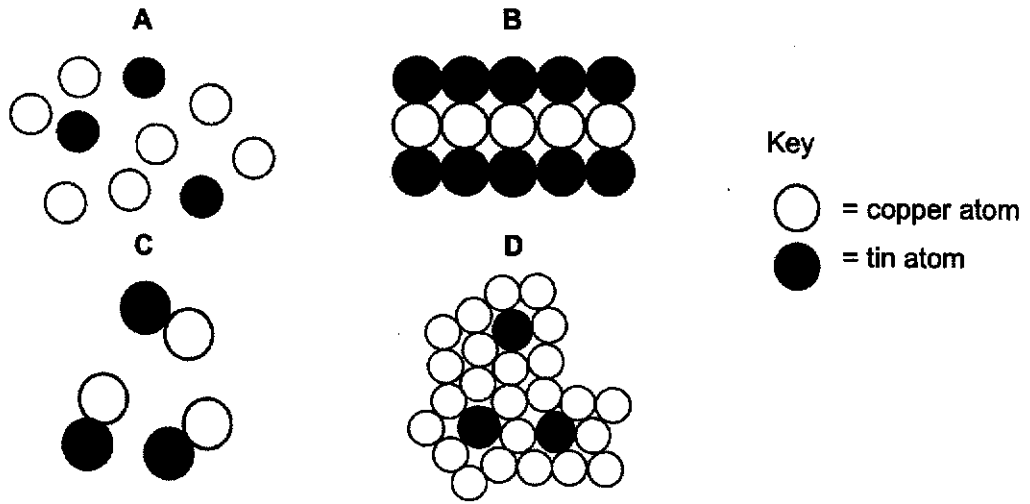
- 23 The diagram shows the apparatus used to test for the gases produced by burning coal.



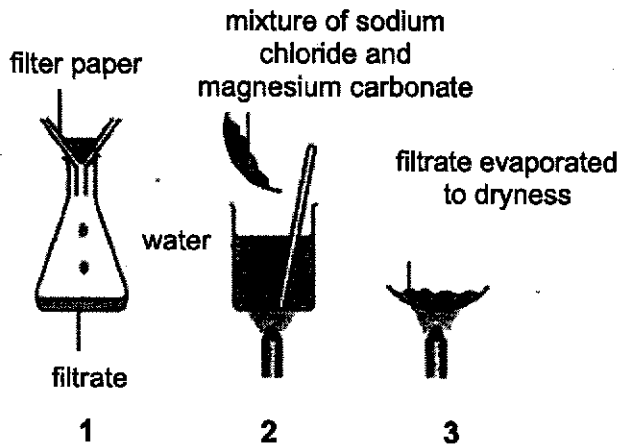
Which reagent should be placed in test tube R to show that sulfur dioxide is formed?

- A aqueous potassium iodide
- B acidified potassium manganate(VII)
- C aqueous calcium hydroxide
- D aqueous sodium hydroxide

24 Which diagram best shows the arrangement of atoms in bronze at room temperature?



25 A solid mixture of sodium chloride and magnesium carbonate is separated using the steps shown below.



In which order should the steps be carried out to separate the two chemicals?

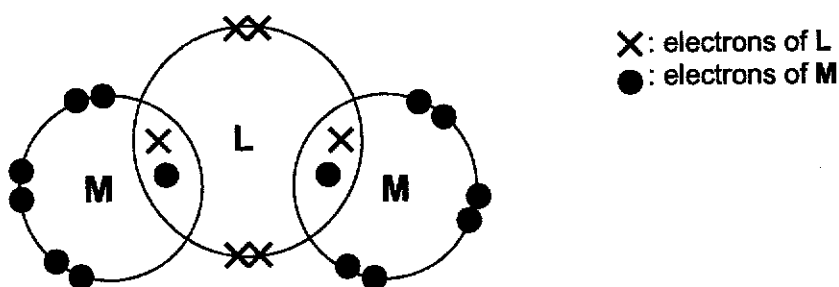
- A 2 → 1 → 3
- B 1 → 2 → 3
- C 3 → 1 → 2
- D 2 → 3 → 1

4

- 26 Two naturally occurring isotopes of uranium can be represented as ${}_{92}^{235}\text{U}$ and ${}_{92}^{238}\text{U}$.

Which of the following statements is correct?

- A They have the same number of electrons and protons.
 B They have the same number of neutrons and protons.
 C They have the same number of neutrons and electrons.
 D They have the same number of nucleons and electrons.
- 27 The diagram shows the arrangement of electrons in the valence shell of the atoms in the compound LM_2 .



Which of the following pairs of elements could L and M be?

	L	M
A	carbon	fluorine
B	fluorine	sulfur
C	sulfur	hydrogen
D	oxygen	chlorine

5

- 28 Metal **P** and non-metal **Q** react together to form an ionic compound P_3Q_2 .

Which of the following correctly describes the electrons gained and lost by each atom?

	electrons lost by each atom of P	electrons gained by each atom of Q
A	1	3
B	2	3
C	3	2
D	2	1

- 29 Sodium, aluminium and sulfur are in the same period of the Periodic Table.

Which trend in types of oxides occur across this period?

	left	→	right
A	acidic		basic
B	amphoteric		acidic
C	basic		acidic
D	basic		amphoteric

- 30 Four aqueous solutions, **J**, **K**, **L** and **M** have the pH values as shown in the table.

solution	J	K	L	M
pH	2	6	8	10

Which pair produces an alkaline solution when mixed?

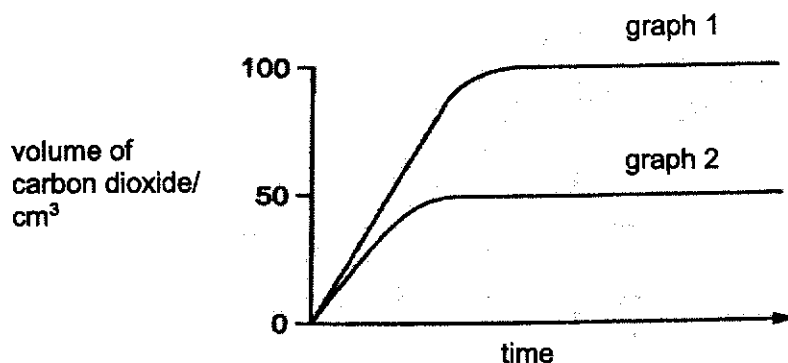
- A** J and K
B J and M
C K and L
D L and M
- 31 Which of the following salts can be prepared using titration?
- A** potassium chloride **B** copper (II) chloride
C calcium sulfate **D** silver nitrate

6

- 32 Some crystals of zinc carbonate were added to an excess of sulfuric acid at room temperature.

The volume of carbon dioxide produced was measured over a period of time. The results are shown in graph 1.

The experiment was repeated and graph 2 was obtained.



Which change was used to obtain the results shown in graph 2?

- A Acid of the same volume and half the original concentration was used.
 - B Larger pieces of zinc carbonate was used in the reaction.
 - C The mass of zinc carbonate used was decreased by half.
 - D A lower temperature was used.
- 33 Element G can form an ion G^+ which has an electronic structure of 2,8,8.

Which of the following statements about element G are correct?

- I G can be cut with a knife.
 - II G is a strong oxidising agent.
 - III G is in Period 4 of the Periodic Table.
 - IV G reacts with cold water.
- A I and II only
 - B I and III only
 - C I, III and IV only
 - D II, III and IV only

- 34 The results of three halogen displacement experiments are shown in the table.

experiment	halogen added	halide solution		
		Q ⁻	R ⁻	S ⁻
1	Q ₂	-	R ₂ displaced	S ₂ displaced
2	R ₂	no reaction	-	no reaction
3	S ₂	no reaction	R ₂ displaced	-

Which row correctly shows the identity of halogens Q, R and S?

	Q	R	S
A	Cl	I	Br
B	Cl	Br	I
C	Br	Cl	I
D	I	Br	Cl

- 35 Steel is an alloy of iron and carbon.

Which of the following statements is correct?

- A Steel cannot conduct electricity.
- B The iron in steel can react with hydrochloric acid.
- C Steel can be represented with a chemical formula.
- D Steel is formed by a chemical reaction between iron and carbon.

- 36 The table shows some reactions of metals **P**, **Q**, **R** and **S**.

metal	action of hydrochloric acid on metal	action of carbon on heated metal oxide	action of hydrogen gas on heated metal oxide
P	a lot of effervescence seen immediately	reduced	not reduced
Q	a lot of effervescence seen immediately	not reduced	not reduced
R	some effervescence after a long time	reduced	reduced
S	no reaction	reduced	reduced

What is the order of reactivity for metals **P**, **Q**, **R** and **S**?

	least reactive $\xrightarrow{\hspace{10em}}$ most reactive			
A	P	Q	R	S
B	Q	P	R	S
C	S	R	P	Q
D	S	R	Q	P

- 37 The following passage describes some reactions that take place during the extraction of iron in the blast furnace.

"An ore of iron, **W**, is mixed with coke and limestone, and added into a blast furnace.

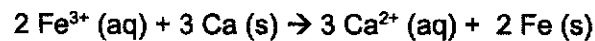
Hot **X** is blasted in through a ring of pipes from the bottom of the furnace.

The coke burns, producing gas **Y**, which is reduced by reaction with more coke to give gas **Z**. Gas **Z** then reduces the iron ore to iron."

Which row correctly shows the identity of substances **W**, **X**, **Y** and **Z**?

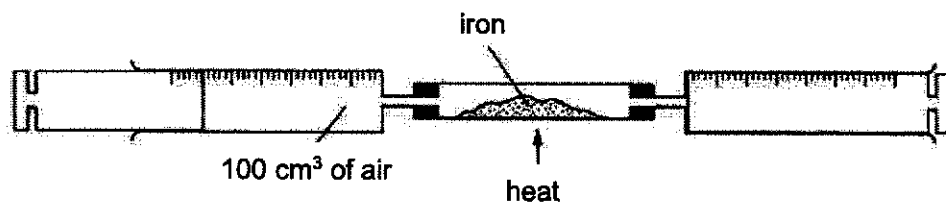
	W	X	Y	Z
A	haematite	air	carbon monoxide	carbon dioxide
B	haematite	air	carbon dioxide	carbon monoxide
C	carbon	carbon monoxide	carbon dioxide	oxygen
D	carbon	carbon monoxide	oxygen	carbon dioxide

- 38 Which statement is not a reason for recycling copper?
- A Recycling decreases the energy requirement to obtain metals.
 - B Recycling decreases the environmental damage due to mining.
 - C Recycling decreases the amount of natural resources available.
 - D Recycling decreases the amount of scrap metal accumulating in the environment.
- 39 The reaction between iron (III) ions and calcium metal is represented by the equation.



Which statement is correct?

- A Fe^{3+} ions are oxidised by loss of electrons.
 - B Fe^{3+} ions are reduced by gain of electrons.
 - C Calcium metal is reduced by loss of electrons.
 - D Calcium metal is oxidised by gain of electrons.
- 40 A 100 cm³ sample of air is trapped in a syringe. The air is slowly passed over heated iron in a tube until there is no further decrease in volume.



When cooled to the original temperature, what is the volume of gas that remains in the syringe?

- A 1 cm³
- B 21 cm³
- C 78 cm³
- D 100 cm³



East Spring Secondary School
Towards Excellence and Success

Name: _____ ()

Class: _____

Preliminary Examinations 2020
Secondary 4 Express / 5 Normal Academic

Science (Chemistry)
Paper 3

5076/03
5078/03

Monday
31 August 2020

1 hour 15 minutes
0800 - 0915

READ THESE INSTRUCTIONS FIRST

- Write your name, class and register number on the Question paper.
- This paper consists of 2 sections:
Section A [45 marks]
Answer **ALL** questions in the spaces provided on pages 2 to 8.
Section B [20 marks]
Answer **ALL** questions in the spaces provided on pages 9 to 11.
- The use of a calculator is allowed.
- A copy of the colours of common metal hydroxides is given on page 12.
- A copy of the Periodic Table is given on page 13.
- The number of marks is given in brackets [] at the end of each question or part question.

Section	Marks
Section A	45
Section B	20
Total	65

This question paper consists of **13** printed pages including the cover page.

Section A [45 marks]

Answer all questions in the spaces provided.

1 Fig. 1.1 shows a few types of reactions.

complete combustion	precipitation	displacement	neutralisation
incomplete combustion	decomposition	reduction	

Fig. 1.1

With reference to Fig. 1.1, state the reaction that best describes the following changes:

- (a) silver nitrate + potassium chloride \rightarrow silver chloride + potassium nitrate
 [1]
- (b) calcium carbonate \rightarrow calcium oxide + carbon dioxide
 [1]
- (c) magnesium hydroxide + sulfuric acid \rightarrow magnesium sulfate + water
 [1]
- (d) copper (II) sulfate + zinc \rightarrow zinc sulfate + copper
 [1]
- (e) methane + oxygen \rightarrow carbon monoxide + water
 [1]

[Total : 5]

2 Complete Table 2.1 to describe the composition and electron arrangement of the following particles.

symbol of particle	number of protons	number of neutrons	electron arrangement
$^{23}_{11}\text{Na}$		12	2.8.1
$^{19}_9\text{F}^-$			

Table 2.1

[Total : 4]

3 A student is asked to obtain water from aqueous iron (II) nitrate, using the following set-up as shown in Fig. 3.1.

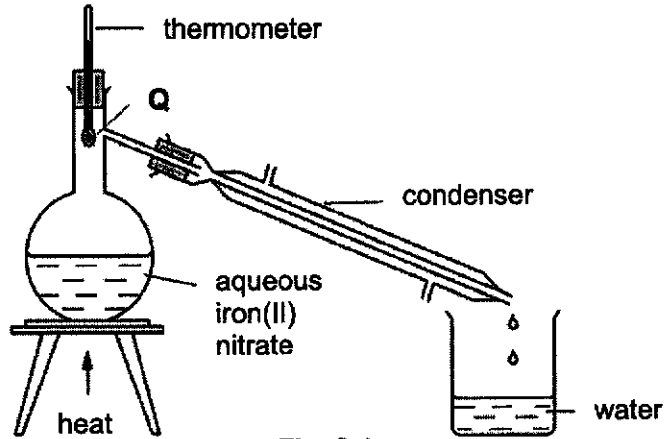


Fig. 3.1

- (a) State the name for this method of separation.
..... [1]
- (b) Explain why the thermometer is placed next to the opening of the condenser.
..... [1]
- (c) Explain why the thermometer shows a range of temperatures rather than at a single temperature as separation takes place.
..... [1]
- (d) Describe the arrangement and movement of particles at point Q.
.....
.....
..... [2]
- (e) Describe how water can be obtained from the above set-up.
.....
.....
..... [2]

[Total : 7]

4

- 4 Calcium metal reacts with chlorine to form calcium chloride, CaCl_2 .

Calcium chloride exists as a solid at room temperature and pressure, and is able to conduct electricity when molten.

- (a) Name the type of chemical bonding present in calcium chloride.

..... [1]

- (b) Draw a 'dot-and-cross' diagram to show the arrangement of the outer shell electrons in CaCl_2 .

[3]

- (c) Explain why calcium chloride is able to conduct electricity when molten.

.....
 [1]

- (d) Chlorine exists as a gas at room temperature and pressure. The chloride ion, Cl^- , is formed from a chlorine atom.

- (i) Write an ionic equation for the formation of a chloride ion, Cl^- , from a chlorine atom. State symbols are **not** required.

..... [1]

- (ii) Chlorine has a relative atomic mass of 35.5.

Explain why the relative atomic mass of chlorine is not a whole number.

.....
 [1]

[Total : 7]

5

- 5 Antacid tablets containing magnesium carbonate are used to relieve the stomach indigestion symptoms caused by excess hydrochloric acid in the stomach as shown in the following equation:



One may often experience some burping after consuming the antacid tablets containing magnesium carbonate.

- (a) A girl took some antacid tablets to relieve her stomach indigestion. Each tablet contains 0.21 g of magnesium carbonate.

It was discovered that her stomach contains 100 cm³ of excess hydrochloric acid with a concentration of 0.15 mol/dm³.

- (i) Calculate how many moles of hydrochloric acid are present in 100 cm³ of hydrochloric acid with a concentration of 0.15 mol/dm³.

number of moles of hydrochloric acid = [1]

- (ii) Calculate how many moles of magnesium carbonate are needed to neutralise the acid.

number of moles of magnesium carbonate = [1]

- (iii) Calculate the number of antacid tablets that the girl needs to take to neutralise the acid.

number of antacid tablets = [1]

6

- (b) Explain why one may experience some burping after consuming the antacid tablets containing magnesium carbonate.

.....
 [1]

[Total : 4]

- 6 When lead (II) oxide is heated with carbon, the following reaction takes place.



- (a) State, with a reason, which substance acts as the reducing agent.

reducing agent :
 reason :
 [2]

- (b) In the above reaction, lead is extracted from its oxide when heated with carbon.

- (i) Explain why carbon can be used to extract lead from lead (II) oxide, but not to extract magnesium from magnesium oxide.

.....

 [2]

- (ii) Suggest how magnesium is extracted from its compounds.

..... [1]

[Total : 5]

7 Emissions from coal fired power stations contain sulfur dioxide which causes acid rain.

(a) Suggest how sulfur dioxide gas is formed.

.....
..... [1]

(b) Acid rain causes soil to be acidic, and affects the growth of crops.

(i) Explain how the excess acidity in the soil can be removed, and how the pH of the soil changes during this removal.

.....
..... [2]

(ii) State one other effect of acid rain.

..... [1]

(c) Another air pollutant that can be produced from coal fired power stations is carbon monoxide. Explain why carbon monoxide can be dangerous to people.

.....
..... [2]

[Total : 6]

8 Fig. 8.1 shows a series of experiments carried out on green solid T.

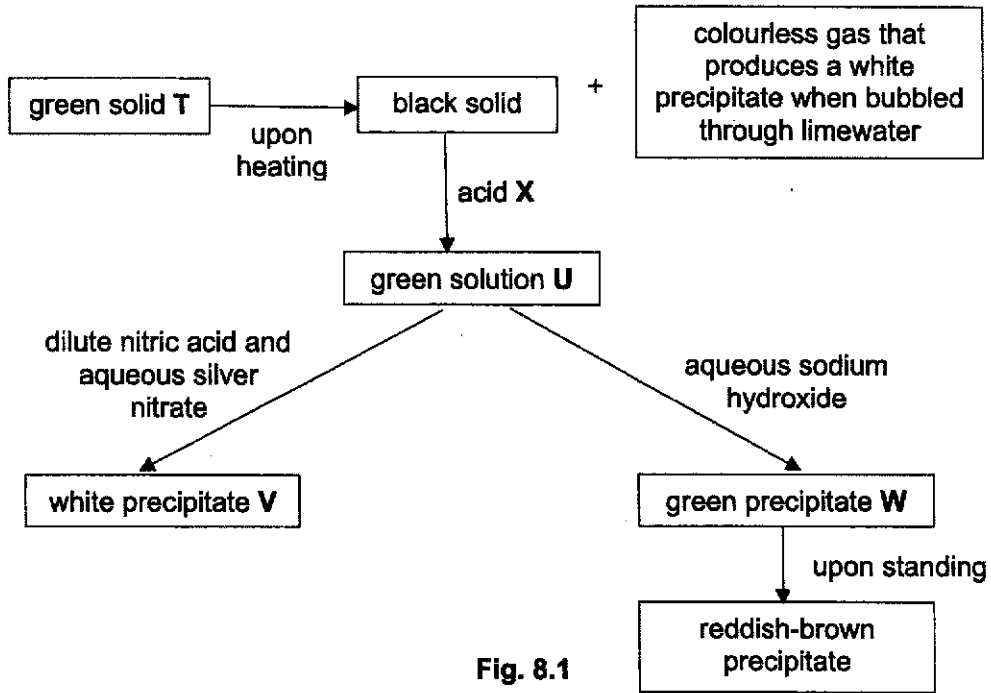


Fig. 8.1

(a) Name substances T, U, V, W and X.

(i) T :

(ii) U :

(iii) V :

(iv) W :

(v) X :

[5]

(b) Write an equation for any one of the reactions that are described within Fig. 8.1. State symbols are not required.

..... [2]

[Total : 7]

Section B [20 marks]

Answer **all** questions in this section in the spaces provided.


- 9 Pieces of magnesium ribbon was added to excess dilute nitric acid to produce a gas. This reaction completes in five minutes.

- (a) (i) List the measurements that you would make to determine the speed of this reaction.

.....

..... [2]

- (ii) On the axes below, label the axes and draw a graph for the measurements made in (a)(i) that would show how the speed of the reaction changes.



[2]

- (iii) Describe how you would use your graph in (a)(ii) to determine the speed of reaction at two minutes.

.....

.....

.....

..... [2]

- (b) On the same set of axes in the above graph, sketch another graph when the experiment is repeated at a lower temperature. Label your graph as "B". [1]

- (c) Using the Collision Theory, explain how and why the rate of reaction changed when nitric acid of a higher concentration was used.

.....
.....
.....
..... [2]

- (d) An increase in temperature of the resulting solution was also recorded.

Explain what this indicates about the reaction.

..... [1]

[Total : 10]

- 10 (a) Sodium and the element of proton number 18 are in the same period of the Periodic Table, but have very different chemical properties.

- (i) Explain why when moving across the Periodic Table from sodium to the element of proton number 18, the character of these elements changes from being metallic to non-metallic.

.....
..... [1]

- (ii) Explain why these two elements are placed in the same period of the Periodic Table.

.....
..... [1]

- (iii) Sodium and the element of proton number 18 have very different chemical properties. Use their electronic structures to explain this difference.

.....
.....
.....
..... [3]

(b) Metals can be placed in a reactivity series. Magnesium and zinc are listed in the reactivity series.

(i) Magnesium and zinc require different conditions to react with water. By referring to these reaction conditions, justify the relative positions of magnesium and zinc in the reactivity series.

.....
.....
.....
.....
..... [3]

(ii) Brass is an alloy made of zinc and copper.

Explain why brass is harder than either of the pure metals.

.....
.....
.....
..... [2]

[Total : 10]

- End of Paper -

Data Sheet**Colours of Some Common Metal Hydroxides**

calcium hydroxide	white
copper (II) hydroxide	light blue
iron (II) hydroxide	green
iron (III) hydroxide	red-brown
lead (II) hydroxide	white
zinc hydroxide	white

The Periodic Table of Elements

I		II										III										IV										V										VI										VII										0																			
												<div style="border: 1px solid black; padding: 2px; display: inline-block;"> 1 H hydrogen 1 </div>																																																																					
		<div style="border: 1px solid black; padding: 2px; display: inline-block;"> Key proton (atomic) number atomic symbol name relative atomic mass </div>																																																																															
3 Li 7	4 Be 9	11 Na 23	12 Mg 24	19 K 39	20 Ca 40	21 Sc 45	22 Ti 48	23 V 51	24 Cr 52	25 Mn 55	26 Fe 56	27 Co 59	28 Ni 59	29 Cu 64	30 Zn 65	31 Ga 70	32 Ge 73	33 As 75	34 Se 79	35 Br 80	36 Kr 84	37 Rb 85	38 Sr 88	39 Y 89	40 Zr 91	41 Nb 93	42 Mo 96	43 Tc 98	44 Ru 101	45 Rh 103	46 Pd 106	47 Ag 108	48 Cd 112	49 In 115	50 Sn 119	51 Sb 122	52 Te 128	53 I 127	54 Xe 131	55 Cs 133	56 Ba 137	57-71 lanthanoids	58 La 139	59 Pr 141	60 Nd 144	61 Pm —	62 Sm 150	63 Eu 152	64 Gd 157	65 Tb 159	66 Dy 163	67 Ho 165	68 Er 167	69 Tm 169	70 Yb 173	71 Lu 175																									
lithium		sodium		potassium		calcium		scandium		yttrium		lanthanoids		actinoids		francium		radium		lanthanoids		actinoids		lanthanoids		actinoids		lanthanoids		actinoids		lanthanoids		actinoids		lanthanoids		actinoids		lanthanoids		actinoids		lanthanoids		actinoids		lanthanoids		actinoids		lanthanoids		actinoids																											

The volume of one mole of any gas is 24 dm³ at room temperature and pressure (r.t.p.).

**East Spring Secondary School
4E5N Sc(Chem) Prelim 2020
Marking Scheme**

Paper 1 (20M)

21	22	23	24	25	26	27	28	29	30
B	D	B	D	A	A	D	B	C	D
31	32	33	34	35	36	37	38	39	40
A	C	C	A	B	C	B	C	B	C

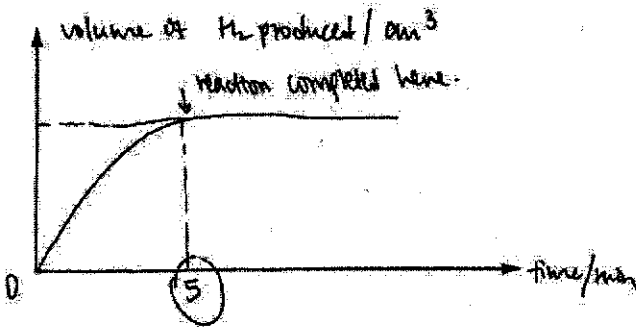

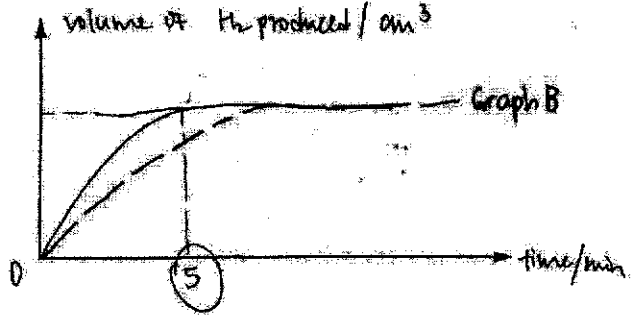
Paper 3 Section A (45m)

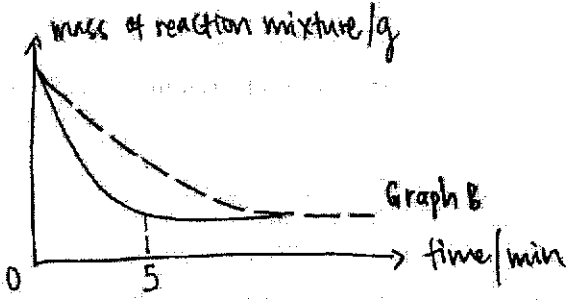
Qn. No	Answer				Marks
1a	Precipitation				1
1b	Decomposition				1
1c	Neutralisation				1
1d	Displacement				1
	REJECT: Reduction as reaction is a REDOX reaction. Reduction does not BEST describes the chemical change.				
1e	Incomplete combustion				1
	REJECT: Reduction as reaction is a REDOX reaction. Reduction does not BEST describes the chemical change.				
2	symbol of particle	number of protons	number of neutrons	electron arrangement	1M each Total 4M
	$^{23}_{11}\text{Na}$	11	12	2.8.1	
	$^{19}_9\text{F}^-$	9	10	2.8	
3a	Simple Distillation/ Distillation				1
3b	To ensure that the thermometer measures the boiling point of the substance being distilled.				1
3c	It is a mixture/ not pure.				1
3d	Particles are far apart in a random manner;				3c – 2M 1 – 2c – 1M
	And are moving at a high speed in random directions				
3e	Aqueous iron (II) nitrate / solution is heated. At 100°C, water boils ;				3c – 2M 1 – 2c – 1M
	Hot water vapour/steam enters the condenser;				

	Hot water vapour/steam is cooled / condenses into pure water, which is collected as the distillate.	
4a	Ionic bonding	1
4b	<p>Key ● Electrons of Ca X Electrons of Cl</p> <p>Penalise 1m if chloride ion has a repeated error (instead of 2m). Penalise 1m if charge for ions are written wrongly.</p>	Each ion – 1m Total 3M
4c	Giant ionic lattice structure breaks down, hence there are presence of free moving / mobile ions to carry electrical charges. REJECT: Charge carriers	1
4di	$Cl + e^- \rightarrow Cl^-$	1
4dii	There are presence of isotopes in different relative abundance.	1
5ai	No. of mol. of HCl/H^+ = $(100/1000) \times 0.15$ = 0.015 mol	1
5aii	No. of mol. of $MgCO_3$ required = $0.015 / 2$ = 0.0075 mol	1
5aiii	No. of mol. of $MgCO_3$ in one tablet = $0.21 / 84$ = 0.0025 mol No. of tablets = $0.0075 / 0.0025$ = 3	1
5b	The magnesium carbonate / antacid reacts with the acid to produce carbon dioxide gas , thus leading to the burping.	1
6a	Reducing agent : carbon/C	1

	Reason : It is oxidized as it gains oxygen to form carbon dioxide / The oxidation state of carbon increased from 0 to +4 in carbon dioxide / Lead (II) oxide is reduced as it loses oxygen to form lead / The oxidation state of lead decreased from +2 in lead (II) oxide to 0. / Lead (II) ion gained two electrons to form lead metal.	1
6b	Carbon is more reactive than lead , hence it can reduce lead (II) oxide to lead ; whereas carbon is less reactive than magnesium , hence it cannot reduce magnesium oxide .	4c – 2M 2 – 3c – 1M 1c – 0M
6bii	Electrolysis / By using electricity/By using a more reactive metal to displace the less reactive metal from its metal ore.	1
7a	Coal contains sulfur as an impurity, hence when coal is burnt, sulfur reacts with oxygen to form sulfur dioxide. Also accept: Volcanic eruptions	1
7bi	Add slaked lime / calcium hydroxide to neutralize the acidic soil/ neutralize acid in soil ; pH of soil increases Also accept: quicklime / calcium oxide.	1 1
7bii	Corrodes marble/limestone buildings OR Lakes become acidic, killing the fishes/marine life	Any 1 - 1
7c	Carbon monoxide is poisonous/toxic ; reacts with haemoglobin in the blood to form carboxyhaemoglobin , a stable compound which reduces the ability of blood to carry oxygen.	1 1
8ai	Iron (II) carbonate	1
8aii	Iron (II) chloride	1
8aiii	Silver chloride	1
8aiv	Iron (II) hydroxide	1
8av	Hydrochloric acid	1
8b	$\text{FeCO}_3 \rightarrow \text{FeO} + \text{CO}_2 /$ $\text{FeO} + 2\text{HCl} \rightarrow \text{FeCl}_2 + \text{H}_2\text{O} /$ $\text{FeCl}_2 + 2\text{AgNO}_3 \rightarrow \text{Fe}(\text{NO}_3)_2 + 2\text{AgCl} /$ $\text{FeCl}_2 + 2\text{NaOH} \rightarrow 2\text{NaCl} + \text{Fe}(\text{OH})_2$ $\text{Ca}(\text{OH})_2 + \text{CO}_2 \rightarrow \text{CaCO}_3 + \text{H}_2\text{O}$	corr. chemical formulas – 1M Balanced – 1M

Section B (20 M)

Qn. No	Answer	Marks
9ai	- volume of hydrogen gas produced over fixed intervals of time / mass of reaction mixture over fixed intervals of time - time taken for the reaction to complete	1 1
9aii	volume of gas produced method:  <p>OR</p> mass of reaction mixture method: 	1 – corr axes with units 1 – corr shape of graph
9aiii	Draw a tangent to the curve at 2 minutes . Measure/calculate the gradient/slope of the tangent to determine the speed of reaction.	1 1
9b	volume of gas produced method:  <p>OR</p>	1

	<p>mass of reaction mixture method:</p> 	
9c	<p>Speed of reaction increases / is higher;</p> <p>Because concentration of hydrochloric acid increases / is higher, therefore there are more reactant particles per unit volume;</p> <p>And thus there is a higher rate of collision and effective collisions between reactant particles.</p>	3c – 2M 1 – 2c – 1M
9d	Reaction is exothermic/reaction produce heat/gives out heat .	1
10ai	Moving from sodium to element with proton number 18 (argon), the atoms change from losing electrons to gaining electrons to achieve the stable noble gas electronic configuration .	1
10aii	Both have 3 electron shells .	1
10aiii	<p>The element with proton number 18 is chemically inert/ unreactive and potassium is reactive.</p> <p>This is because the element with proton number 18 has an electronic structure of 2.8.8, hence it has a completely filled valence shell. It does not need to lose, gain or share electrons with other elements.</p> <p>However, sodium has an electronic structure of 2.8.1/1 valence electron and it needs to lose 1 electron to achieve a stable electronic configuration of noble gas./need to lose 1 electron to achieve a completely filled valence shell.</p> <p>1m for e.c of both elements. 1m for discussing how argon has a completely filled shell. 1m for discussing how sodium needs to lose 1 electron.</p>	1 1 1
10bi	<p>Zinc does not react with cold water but reacts with steam;</p> <p>Magnesium reacts (slowly) with cold water;</p> <p>As zinc requires a higher temperature to react with water compared to magnesium; therefore magnesium is above zinc / zinc is below magnesium in the reactivity series;</p>	1 1 1

10bii	<p>In brass, the <u>atoms are of different sizes.</u></p> <p>This disrupts the <u>orderly arrangement of the zinc/pure metal atoms</u> and it is <u>difficult for the layers of atoms to slide over each other</u> when a force is applied.</p> <p>This makes brass harder than pure zinc and pure copper.</p>	3c – 2m 2c – 1m 0-1c -0m
-------	--	--------------------------------

