

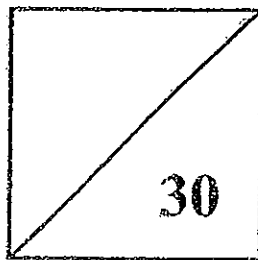


# RULANG PRIMARY SCHOOL

A Gallery of Scholars, A Vibrant Community of Wholesome Individuals

Name : \_\_\_\_\_ (    )  
Level : Primary One  
Class : Primary 1 \_\_\_\_\_  
Date : 30 October 2012  
Setter : Mdm Chng Hui Fen

## MINI-TEST (TERM 4) MATHEMATICS

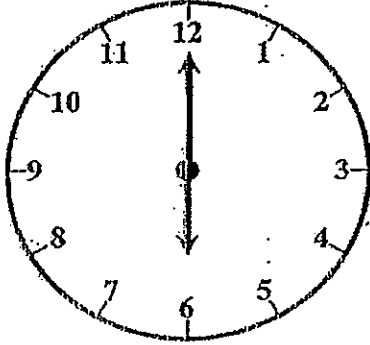


TOTAL TIME: 50 minutes  
14 questions  
30 marks

- DO NOT OPEN THIS BOOKLET UNTIL YOU ARE TOLD TO DO SO.
- READ ALL THE INSTRUCTIONS CAREFULLY.
- ANSWER ALL THE QUESTIONS.

Questions 1 to 4 carry 1 mark each. For each question, four options are given. One of these is the correct answer. Choose the correct answer and write its number (1, 2, 3 or 4) in the bracket provided. (4 marks)

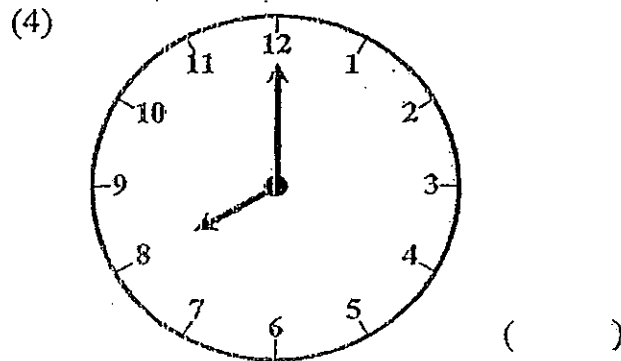
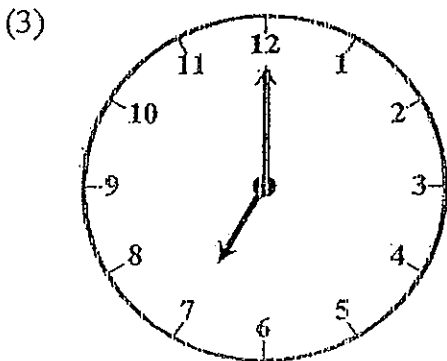
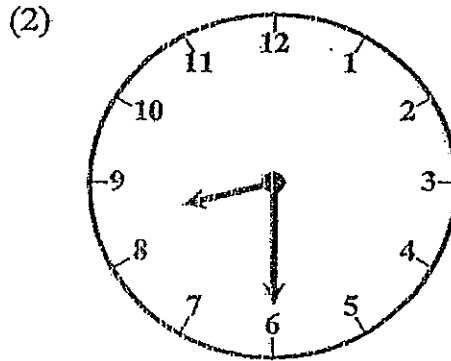
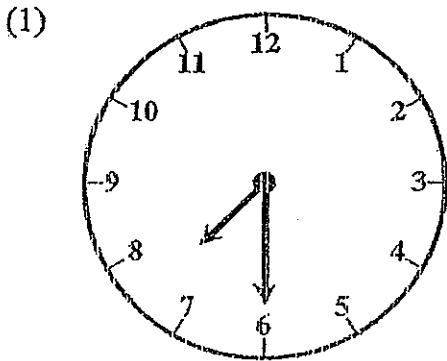
1. Look at the clock shown below.



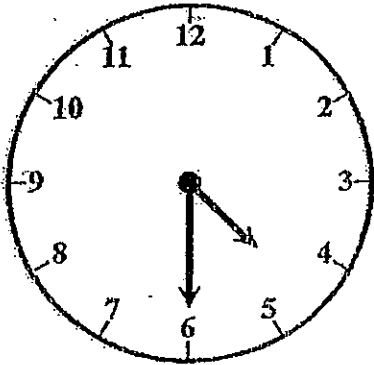
What is the time shown on the clock?

- (1) 6:00                                      (2) 6:30  
 (3) 12:00                                      (4) 12:30                                      (      )

2. Mary goes to bed at half past 8 every night. Which one of the following clocks shows the correct time when she goes to bed?



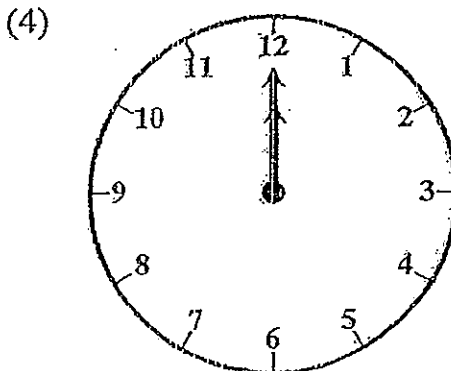
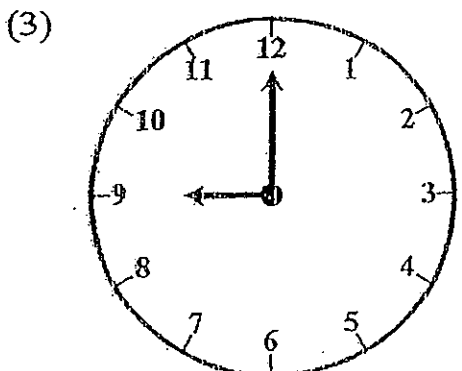
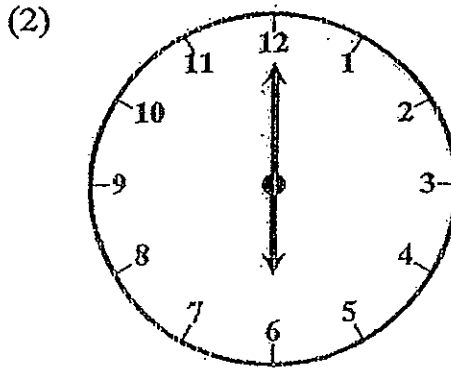
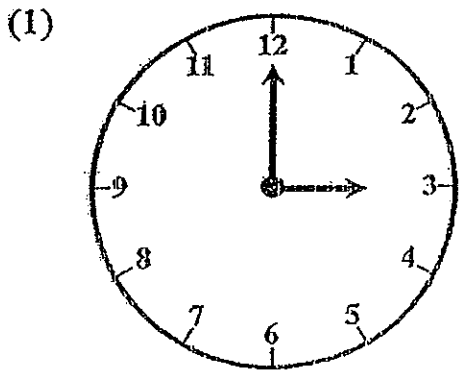
3. Look at the clock shown below.



What is the time shown on the clock?

- (1) half past 6                      (2) half past 4  
(3) 5 o'clock                        (4) 4 o'clock                      (     )

4. Jane has her lunch at 12 o'clock every day.  
Which one of the following clocks shows the correct time when she has her lunch?

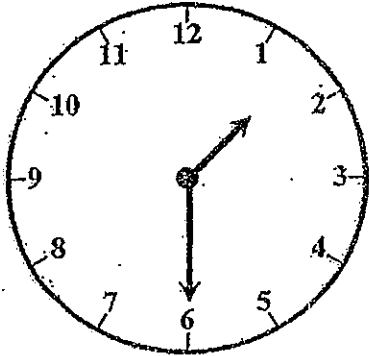


(     )

Questions 5 to 8 carry 2 marks each. Show your working clearly in the space below each question and write your answers in the spaces provided. For questions which require units, give your answers in the units stated. (8 marks)

---

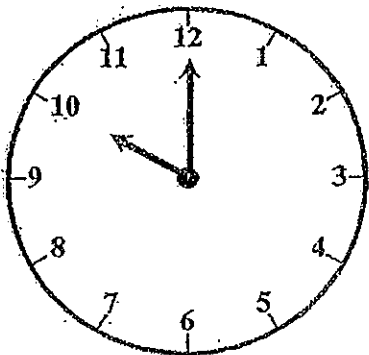
5. What is the time shown on the clock below?



Ans: \_\_\_\_\_

---

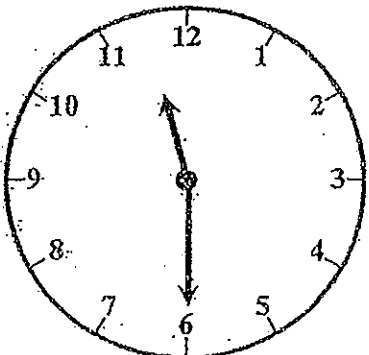
6. What is the time shown on the clock below?



Ans: \_\_\_\_\_

---

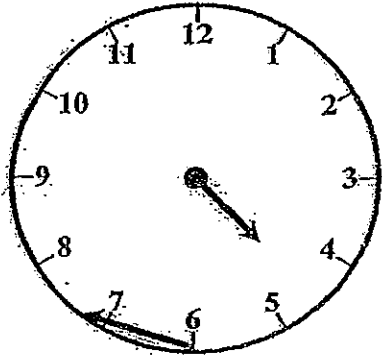
7. What is the time shown on the clock below?  
Give your answer in terms of o'clock or half past.



Ans: \_\_\_\_\_

---

8. The minute hand of the clock shown below is loose and has dropped off. The hour hand is still working. What time will the clock show if the minute hand has not dropped off? Give your answer in terms of o'clock or half past.

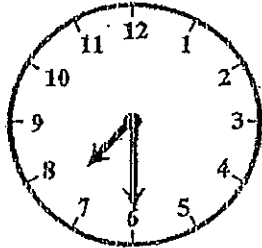


Ans: \_\_\_\_\_

---

Questions 9 to 14 carry 3 marks each. Answer each question in the space provided. Show your working clearly as marks will be awarded for relevant statements and correct answers. **(18 marks)**

9. The time on the clocks below shows Amy's activities for the day but they are not in order.  
Write the time and the order of the activities below each clock.

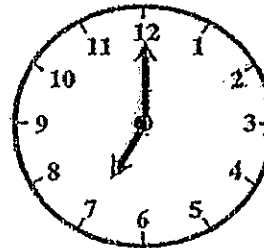


Amy had her breakfast in school.

Time:

Order:

(1<sup>st</sup>, 2<sup>nd</sup>, 3<sup>rd</sup> or 4<sup>th</sup>)

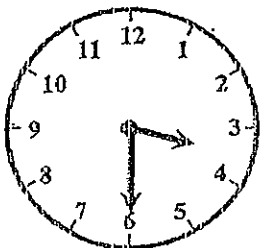


Amy went to school in the morning.

Time:

Order:

(1<sup>st</sup>, 2<sup>nd</sup>, 3<sup>rd</sup> or 4<sup>th</sup>)

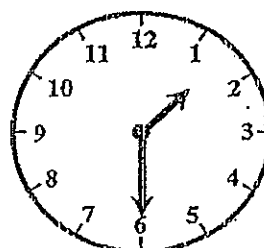


Amy went shopping with her mother.

Time:

Order:

(1<sup>st</sup>, 2<sup>nd</sup>, 3<sup>rd</sup> or 4<sup>th</sup>)



Amy was dismissed from school.

Time:

Order:

(1<sup>st</sup>, 2<sup>nd</sup>, 3<sup>rd</sup> or 4<sup>th</sup>)

10. Uncle Joe has 34 oranges.  
He has 22 more oranges than apples.  
How many apples does Uncle Joe have?

Uncle Joe has \_\_\_\_\_

---

11. At a bookshop, the total cost of 1 ruler, 1 pen and 1 eraser is \$5.  
The total cost of 4 rulers and 1 eraser is \$5.  
The ruler costs \$1.  
What is the cost of 1 pen?

1 pen costs \_\_\_\_\_

---

12. Caili has 17 cards.  
Ali has 5 fewer cards than Caili.  
The total number of cards Ali and Bala have is 30.

(a) How many cards does Ali have? [1 mark]

Ali has \_\_\_\_\_

(b) How many cards does Bala have? [1 mark]

Bala has \_\_\_\_\_

(c) Who has more cards? Bala or Caili? [1 mark]

\_\_\_\_\_ has more cards.



13. Heidi put 14 apples into 10 plastic bags.  
One of the plastic bags had 3 apples in it.  
The rest of the plastic bags had 1 or 2 apples in them.

(a) How many plastic bags had 1 or 2 apples in them? [1 mark]

\_\_\_\_\_ had 1 or 2 apples in them.

(b) How many plastic bags had 2 apples in them? [1 mark]

\_\_\_\_\_ had 2 apples in them.

(c) How many plastic bags had only 1 apple in them? [1 mark]

\_\_\_\_\_ had only 1 apple in them.

---

14. There were some balls in a box at first.  
Sally put 7 more balls into the box.  
John took out 5 balls from the box.  
There were 18 balls left in the box.

(a) How many balls were there in the box before John took out 5 balls from it? [1 mark]

There were \_\_\_\_\_ in the box before John took out 5 balls from it.

(b) How many balls were there in the box before Sally put 7 balls into it? [1 mark]

There were \_\_\_\_\_ in the box before Sally put 7 balls into it.

(c) How many more balls were there in the box in the end than at first? [1 mark]

There were \_\_\_\_\_ in the box in the end than at first.

---

End of Paper

# ANSWER SHEET

## EXAM PAPER 2012

SCHOOL : RULANG PRIMARY SCHOOL

SUBJECT : PRIMARY 1 - MATHEMATICS

TERM : SA2

Q1	Q2	Q3	Q4
1	2	2	4

Q5. half past 1

Q6. 10 o'clock

Q7. half past 11

Q8. half past 4

Q9.

Time: half past 7
-------------------

Order: 2 <sup>nd</sup>
------------------------

Time: 7 o'clock
-----------------

Order: 1 <sup>st</sup>
------------------------

Time: half past 3
-------------------

Order: 4 <sup>th</sup>
------------------------

Time: half past 1
-------------------

Order: 3 <sup>rd</sup>
------------------------

Q10. 12 apples

Q11. \$3

Q12. a) 12 cards

b) 18 cards

c) Bala has more cards

Q13. a) 9 plastic bags

b) 2 plastic bags

c) 7 plastic bags

Q14. a) 23 balls

b) 16 balls

c) 2 balls

