

Pei Hwa Presbyterian Primary School
Mini Test 4 - 2012
Mathematics
Primary 1

Total	
	40

Name: _____ ()

Class: Integrity ()

Date: 23rd August 2012

Parent's Signature: _____


Read and answer all the questions carefully. Fill in the blanks or boxes provided and show all workings. (Questions 1 to 10 are 2 marks each.)

1.



3 groups of 4 = _____

2.



(a) There are _____ groups of 2 ice creams.

(b) There are _____ ice creams altogether.

3. Write a multiplication sentence for the picture shown below.



$$\square \circ \square = \square$$

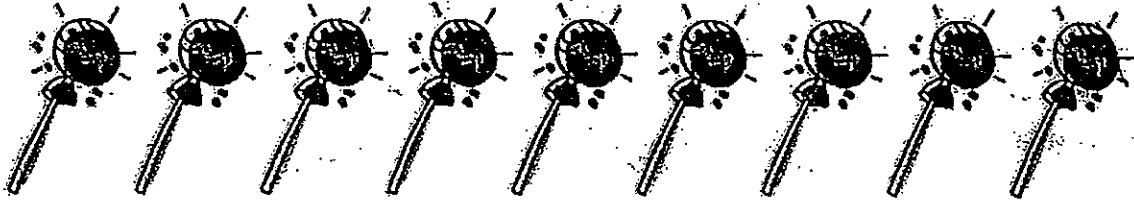
4.



$$4 \text{ twos} = \underline{\hspace{2cm}}$$


5. $5 + 5 + 5 + 5 + 5 + 5 = \underline{\hspace{2cm}} \times 5$

6. Divide 9 sweets equally among 3 children.



Each child gets sweets.

7.




(a) There are rulers altogether.

(b) Ali gives all the rulers to 5 friends. Each friend gets the same number of rulers. How many rulers does each friend get?


Each friend gets rulers.

8. Circle the doughnuts in groups of 4.



There are _____ groups of 4 doughnuts.

9.

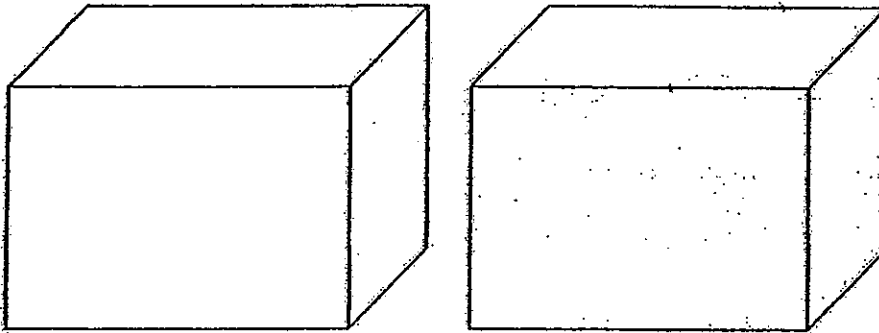


Peggy bakes 12 gingerbread men.

She puts _____ gingerbread men on each tray.

She has _____ trays.

10. Mr Lee buys 10 apples and puts them equally into 2 boxes.
Draw the apples in the two boxes.




There are _____ apples in each box.

Solve each of the following problem sums.

Show all workings and statements clearly. (Questions 11 to 15 are 4 marks each.)

11. Mrs Wong placed 3 groups of 2 cupcakes on the table. How many cupcakes were there on the table altogether?




$$\square \times \square = \square$$

There were _____ cupcakes altogether.

12. There are 4 rows of shelves.

There are 5 teddy bears on each shelf.

How many teddy bears are there altogether?




$$\square \times \square = \square$$

There are _____ teddy bears altogether.

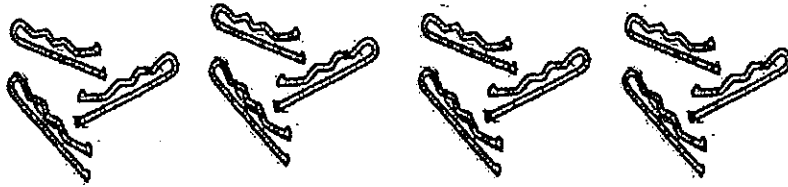
13. Sarah has 18 stamps.
She gives 3 stamps to each friend.
How many friends does she give her stamps to?

Circle the stamps below to show your answer.




She gives her stamps to _____ friends.

14. Lisa has 12 hair clips.
She puts them into 6 groups equally.
How many hair clips are there in each group?



There are _____ hair clips in each group.

15. Kumar has less than 20 marbles.
If he puts them in groups of 3, find the most number of marbles he can have.
(Hint: Draw marbles to find out the answer.)



The most number of marbles Kumar can have is _____

ANSWER SHEET

EXAM PAPER 2012

SCHOOL : PEI HWA
SUBJECT : PRIMARY 1 MATHEMATICS

TERM : CA2

1) 3 group of 4 = 12

2) a) 8 b) 16

3) $3 \times 7 = 21$


4) 4 twos = 8

5) 6

6) 3

7) a) 10 b) 2

8)



They are 6 group of 4 doughnuts.

9) 3 , 4

10) There are 5 apples in each box.

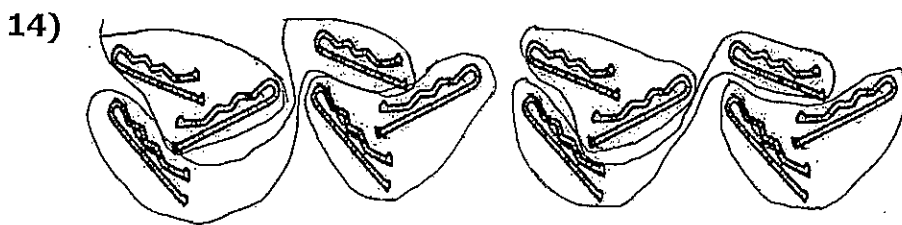
11) $3 \times 2 = 6$

There were 6 cupcakes altogether.

12) $4 \times 5 = 20$

There are 20 teddy bears altogether.

13) She give her stamps to 6 friends.



There are 2 hair clips in each group.

15) $3 \times 6 = 18$

The most number of marbles Kumar can have is 18.