

SINGAPORE CHINESE GIRLS' SCHOOL (PRIMARY)
PRIMARY 1 MATHEMATICS
TOPICAL TEST 1
UNIT 1 – NUMBERS TO 10

Name: _____ ()

Date: _____

Class: Primary 1 SY / C / G / SE / P / GR



Parent's Signature

For each question, four options are given.
Choose the correct answer and write its number in the brackets
provided.

1. _____ comes *just before* 5.

- 1) 7
- 3) 3

- 2) 6
- 4) 4

()

2. Which one is the *smallest* number?

- 1) eight
- 3) six

- 2) two
- 4) nine

()

3. Which one of these numbers is *greater than* 8?

- 1) 10
- 3) 7

- 2) 6
- 4) 4

()

4. _____ is 1 *less than* 6.

- 1) 8
- 3) 5

- 2) 7
- 4) 4

()

5. I am *greater than* 4 but *smaller than* 6.
What number am I?

- 1) 10
- 3) 3

- 2) 2
- 4) 5

()

Read the questions carefully.
Write the correct answers in the space given.


6. Write the numbers *in words*.

a. (3) →

b. (7) →



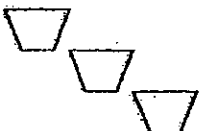

7. Arrange the numbers in order, *beginning with the greatest*.

3 8 4 6 10



greatest

8. Colour the *two sets* which have the *same number* of shapes.

			
---	---	--	---

Count and fill in the blanks for questions 9 and 10.



9. There are _____  and _____ 

10. There are _____ fruits altogether.

ANSWER SHEET

EXAM PAPER 2012

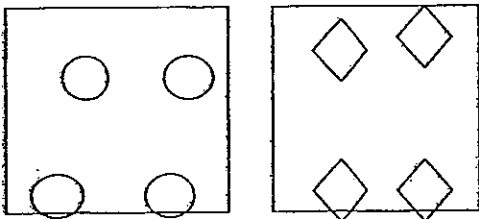
SCHOOL : SINGAPORE CHINESE GIRLS' SCHOOL

SUBJECT : PRIMARY 1 - MATHEMATICS

TERM : TOPICAL TEST 1

Order : MR GAN 8606 5443 . 9299 8971 . 8181 9329

1. 4
2. 2
3. 1
4. 3
5. 4
6. a) three
b) seven
7. 10, 8, 6, 4, 3
- 8.



9. 4, 2
10. 6

