

METHODIST GIRLS' SCHOOL (PRIMARY)

Founded in 1887



PRELIMINARY EXAMINATION 2014 PRIMARY 6 MATHEMATICS

PAPER 1 (BOOKLET A)

Total Time for Booklets A and B: 50 minutes

INSTRUCTIONS TO CANDIDATES

Do not turn over this page until you are told to do so.

Follow all instructions carefully.

Answer all questions.

Shade your answers in the Optical Answer Sheet (OAS) provided.

The use of calculators is **NOT** allowed.

Name: _____ ()

Class: Primary 6. _____

Date: 26 August 2014

This booklet consists of 9 printed pages including this page.

Questions 1 to 10 carry 1 mark each. Questions 11 to 15 carry 2 marks each.
For each question, four options are given. One of them is the correct answer.
Make your choice (1, 2, 3 or 4). Shade the correct oval (1, 2, 3 or 4) on the
Optical Answer Sheet. (20 marks)

1. Which of the following is the same as $\frac{3}{50}$ m?

- (1) 0.06 cm
- (2) 0.6 cm
- (3) 6 cm
- (4) 60 cm

2. Which of the following fraction is the smallest?

- (1) $\frac{7}{9}$
- (2) $\frac{9}{11}$
- (3) $\frac{5}{7}$
- (4) $\frac{7}{11}$

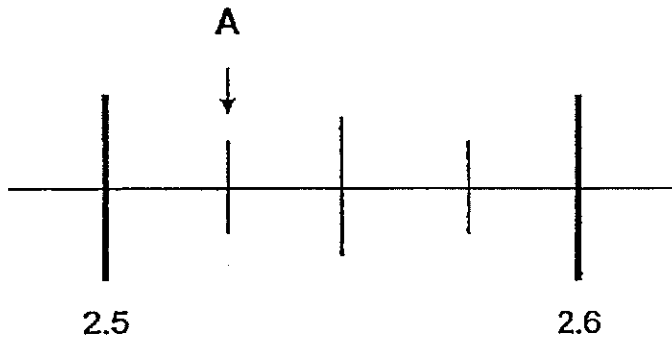
3. Rani took 18 min to jog 3 km. What was her average speed in km/h?

- (1) 6 km/h
- (2) 10 km/h
- (3) 54 km/h
- (4) 60 km/h

4. En Yang bought 10 pens. He gave the cashier \$50 and received a change of \$ p . Express the cost of one pen in terms of p .

- (1) $\$(50 + p)$
- (2) $\$(500 - 10p)$
- (3) $\$(\frac{50 - p}{10})$
- (4) $\$(\frac{50 - 10}{p})$

5. Part of the scale is shown below. What is the value of A?



- (1) 2.025
- (2) 2.525
- (3) 2.550
- (4) 2.750

6. $\frac{1}{4}$ of Siti's money was equal to $\frac{2}{3}$ of Jason's money.

Express Siti's money as a fraction of ^{the} total sum of money they had.

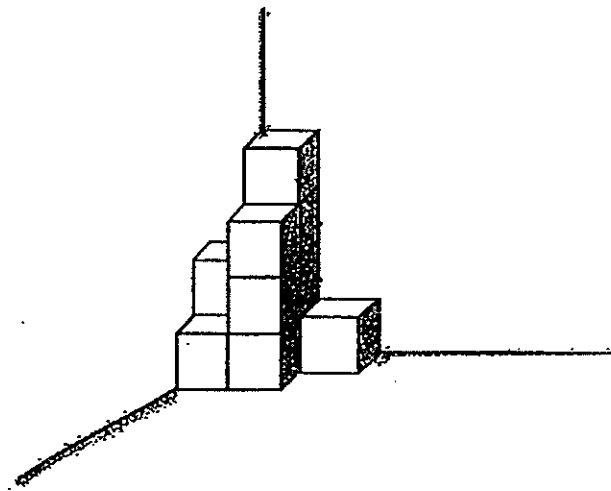
(1) $\frac{3}{7}$

(2) $\frac{3}{8}$

(3) $\frac{4}{11}$

(4) $\frac{8}{11}$

7. The figure below shows a solid that is made up of 2-cm cubes. The cubes are stacked on top of one another. How many more such cubes are required to form a larger solid with a volume of 192 cm^3 ?



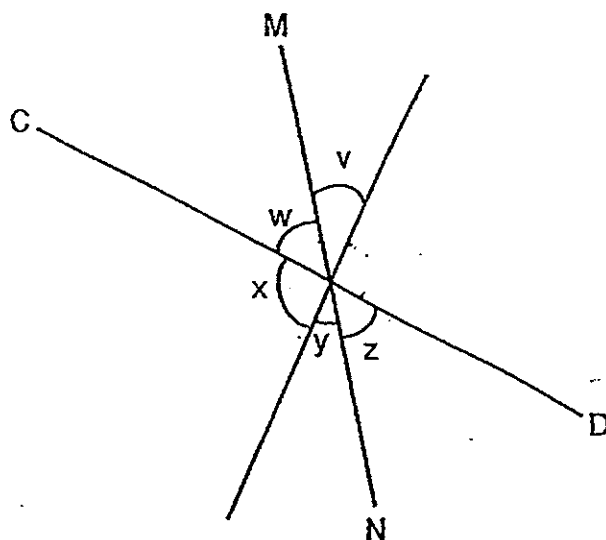
(1) 11

(2) 13

(3) 24

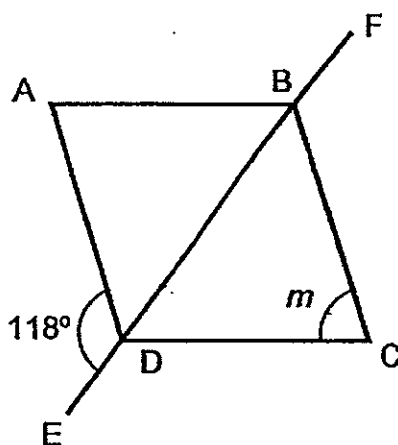
(4) 35

8. In the figure below, CD and MN are straight lines. Which two angles add up to 90° ?



- (1) $\angle w$ and $\angle x$
- (2) $\angle w$ and $\angle y$
- (3) $\angle v$ and $\angle z$
- (4) $\angle y$ and $\angle z$

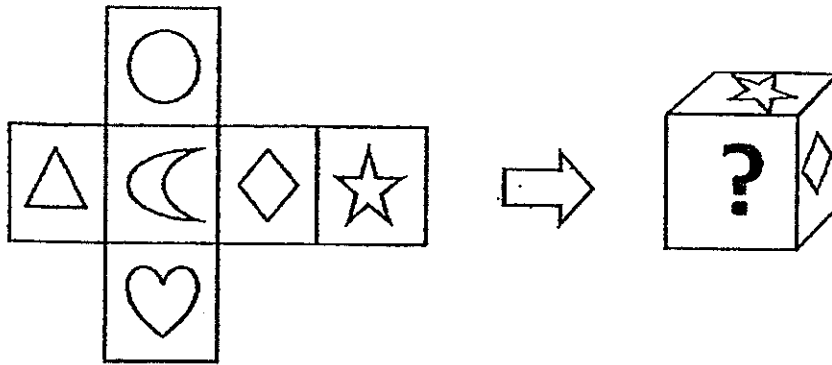
9. In the figure below, ABCD is a rhombus and EF is a straight line. Find $\angle m$.



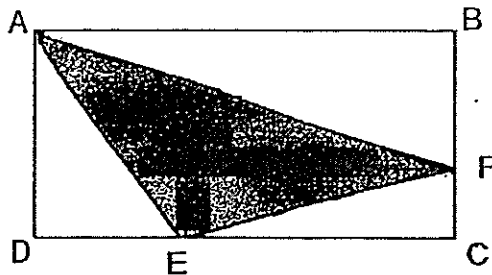
- (1) 31°
- (2) 56°
- (3) 62°
- (4) 112°

10. Six different designs are shown in the net of a cube.

Which option shows the face marked "?" when a cube is formed?



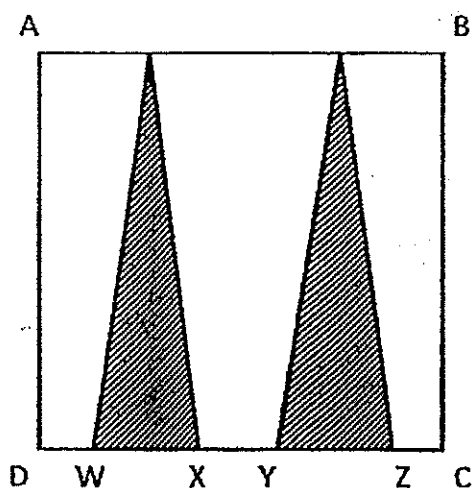
11. In the figure, the area of rectangle ABCD is 72 cm^2 .
The ratio of $DE : EC$ is $1 : 2$ and $BF : FC$ is $2 : 1$.
Find the area of the shaded region.



- (1) 24 cm^2
(2) 28 cm^2
(3) 36 cm^2
(4) 44 cm^2
12. Debbie spent 40% of her money on a pair of shoes and $\frac{1}{6}$ of the remainder on a drink. She then had \$30 left. How much did she spend on the pair of shoes?
- (1) \$10
(2) \$24
(3) \$36
(4) \$60

13. ABCD is a square. The length of WX is $\frac{1}{4}$ of the length of DC and $WX = YZ$.

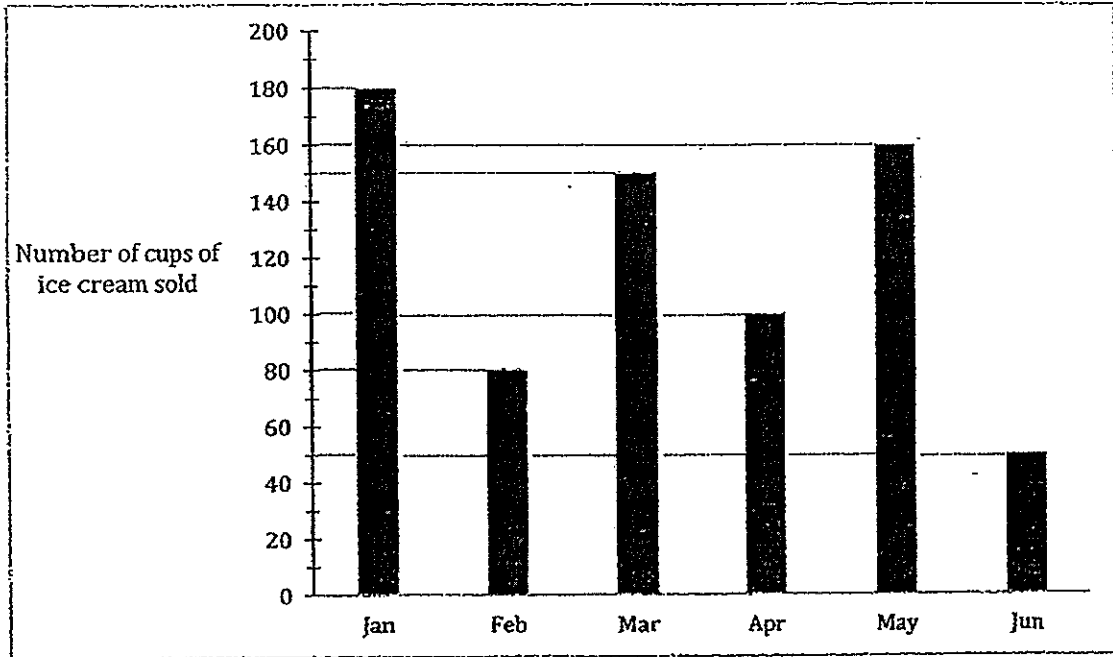
What fraction of the area of square is unshaded?



- (1) $\frac{1}{6}$
- (2) $\frac{1}{5}$
- (3) $\frac{1}{4}$
- (4) $\frac{3}{4}$
14. Xaxier sold 50% of the tickets. Yi Ren and Zana sold the remaining tickets in the ratio 2 : 3. If Xavier sold 24 tickets more than Zana, how many tickets were sold altogether?

- (1) 72
- (2) 120
- (3) 300
- (4) 360

15. The bar graph shows the number of cups of ice-cream sold over 6 months. A total of \$1800 was collected. How much does each cup of ice-cream cost?



- (1) \$1.50
- (2) \$2.00
- (3) \$2.50
- (4) \$3.00

METHODIST GIRLS' SCHOOL (PRIMARY)

Founded in 1887



PRELIMINARY EXAMINATION 2014 PRIMARY 6 MATHEMATICS

PAPER 1 (BOOKLET B)

Total Time for Booklets A and B: 50 minutes

INSTRUCTIONS TO CANDIDATES

Do not turn over this page until you are told to do so.

Follow all instructions carefully.

Answer all questions.

Write your answers in this booklet.

The use of calculators is **NOT** allowed.

Name: _____ ()

Class: Primary 6. _____

Date: 26 August 2014

Paper 1 Booklet A	/ 20
Paper 1 Booklet B	/ 20
Paper 2	/ 60
TOTAL	/ 100

This booklet consists of 7 printed pages including this page.

Questions 16 to 25 carry 1 mark each. Write your answers in the spaces provided. For questions which require units, give your answers in the units stated. (10 marks)

Do not write in this space

- 16 A total of \$10 985 was collected for a Flag Day last Saturday. Express this amount to the nearest hundred dollars.

Ans: \$ _____

- 17 Express $\frac{4}{7}$ as a decimal correct to 2 decimal places.

Ans: _____

- 18 The table shows the amount of rain water collected over a 5-day period.

Day	Amount of rainfall (mm)
Monday	13.5
Tuesday	9
Wednesday	0
Thursday	10.5
Friday	7

What is the average rain water collected over the 5-day period?

Ans: _____ mm

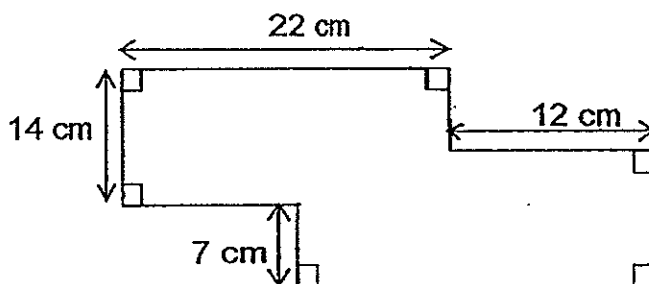
Do not write
in this space

19 $4 : 10 = \square : 25$

What is the missing number in the box?

Ans: _____

20 In the figure below, what is the perimeter of the figure?



Ans: _____ cm

21 Express 2.8% as a fraction in its simplest form.

Do not write
in this space

Ans: _____

22 Find the value of 0.24×30

Ans: _____

23 The table shows the number of residents from Maple Estate with social media accounts.

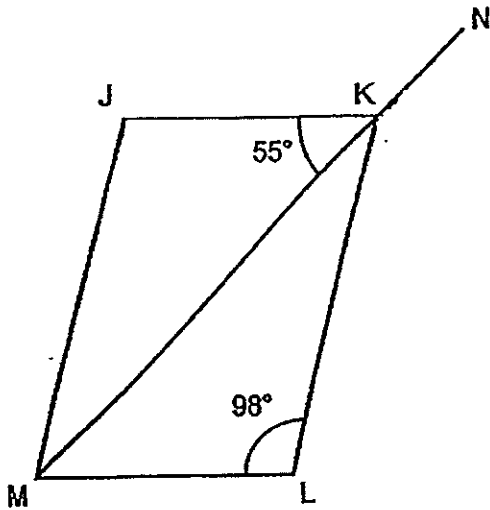
Type of social media	Number of residents
Instagram	45
Facebook	90
Youtube	30
Twitter	55

Express the ratio of the number of residents with Instagram and Twitter accounts to the total number of residents from Maple Estate with social media accounts. Give your answer in the simplest form.

Ans: _____

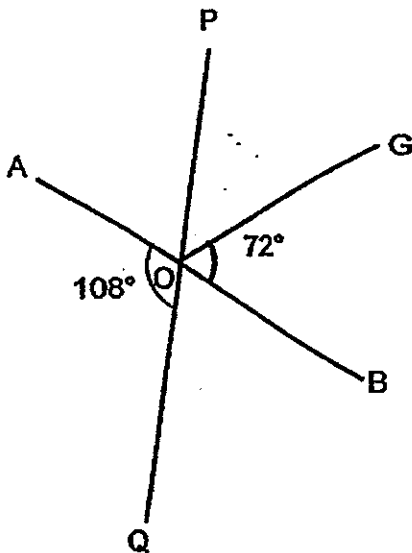
Do not write
in this space

- 24 In the figure below, not drawn to scale, JKLM is a parallelogram. MKN is a straight line. Find the value of $\angle LKN$.



Ans: _____°

- 25 In the figure below, AB and PQ are straight lines. Given that $\angle BOG = 72^\circ$ and $\angle AOQ = 108^\circ$, find $\angle POG$.

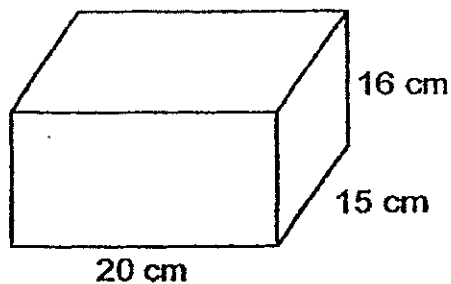


Ans: _____°

Questions 26 to 30 carry 2 marks each. Show your working clearly and write your answers in the spaces provided. For questions which require units, give your answers in the units stated. (10 marks)

Do not write in this space

- 26 A rectangular block of wood is 20 cm by 15 cm by 16 cm.
What is the greatest number of 2-cm cube that can be cut from it?



Ans: _____

- 27 Mr Lim was asked to form a square with 56 pots of orchids placed at equal distance from each other. How many pots of orchids should he place on any one side of the square such that each side contains an equal number of pots?

Ans: _____

28 Sue had 50 more badges than Jeya at first. Jeya gave 8 of her badges to Sue. Sue now has 3 times as many badges as Jeya. How many badges did Sue have at first?

Do not write
in this space

Ans: _____

29 When Terence was 9 years old, his father was 4 times his age. In how many years' time would his father be twice Terence's age?

Ans: _____

30 For every \$30 a shop keeper earned, he donates \$2 to charity. A total of \$170 was donated to charity at the end of the month. How much did the shop keeper earn?

Ans: \$ _____

END OF PAPER

METHODIST GIRLS' SCHOOL (PRIMARY)

Founded in 1887



PRELIMINARY EXAMINATION 2014 PRIMARY 6 MATHEMATICS

PAPER 2

Duration: 1h 40 min

INSTRUCTIONS TO CANDIDATES

Do not turn over this page until you are told to do so.
Follow all instructions carefully.

Answer all questions.

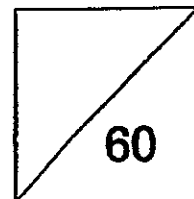
Write your answers in this booklet.

The use of an approved calculator is expected, where appropriate.

Name: _____ ()

Class: Primary 6. _____

Date: 26 August 2014



This booklet consists of 15 printed pages including this page.

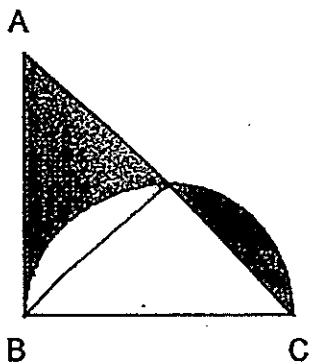
Questions 1 to 5 carry 2 marks each. Show your working clearly and write your answers in the spaces provided. For questions which require units, give your answers in the units stated. (10 marks)

Do not write in this space

- 1 A confectionary sells fruit tarts at \$1.20 each. When a customer buys 4 tarts, she is entitled to buy another one at $\frac{1}{3}$ the price. What is the greatest number of fruit tarts a customer can buy with \$100?

Ans: _____

- 2 The figure below is made up of a semicircle and a right-angled isosceles triangle ABC. $AB = BC$ and the diameter of the semicircle is 28 cm. Find the area of the shaded part of the figure.



Ans: _____ cm²

- 3 The table shows the postage charges for sending letters to Japan.

Mass	Cost
First 20 g	\$1.10
Every additional 10 g or part thereof	35 cents

Victoria posted a letter with a mass of 83 g.
How much did she pay for the postage?

Do not write
in this space

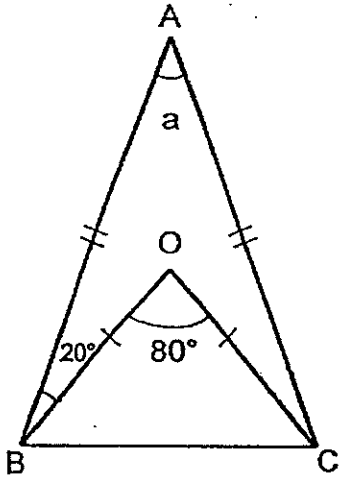
Ans: \$ _____

- 4 8 cups of water ^{filled} can fill $\frac{4}{5}$ of a jug.

When 4 cups of water are poured out, what fraction of the jug is not filled with water?

Ans: _____

- 5 ABC and OBC are isosceles triangles. $AB = AC$, $OB = OC$, $\angle ABO = 20^\circ$ and $\angle BOC = 80^\circ$. Find $\angle a$.



Do not write
in this space

Ans: _____ °



For Questions 6 to 18, show your working clearly and write your answers in the spaces provided. The number of marks available is shown in brackets [] at the end of each question or part-question. (50 marks)

Do not write in this space

- 6 Andy has k stamps.
Muthu has thrice as many stamps as Andy but 8 stamps fewer than James.
- How many stamps do they have altogether?
(express your answer in terms of k).
 - If $k = 9$, how many stamps do the three children have altogether?

Ans: (a) _____ [2]

(b) _____ [1]

- 7 A contest consisted of 30 questions.
For each correct answer, 3 points were awarded.
For each wrong answer, 1 point was deducted.
Mei Ling scored 54 points.
How many questions did she answer wrongly?


Ans: _____ [3]

- 8 The average of 4 numbers A, B, C and D was 61.
After A was decreased by 32, B was increased by 35, C was tripled,
and D was halved, the four numbers became equal.
Find the value of D. ~~at first~~

Do not write
in this space

Ans: _____ [3]

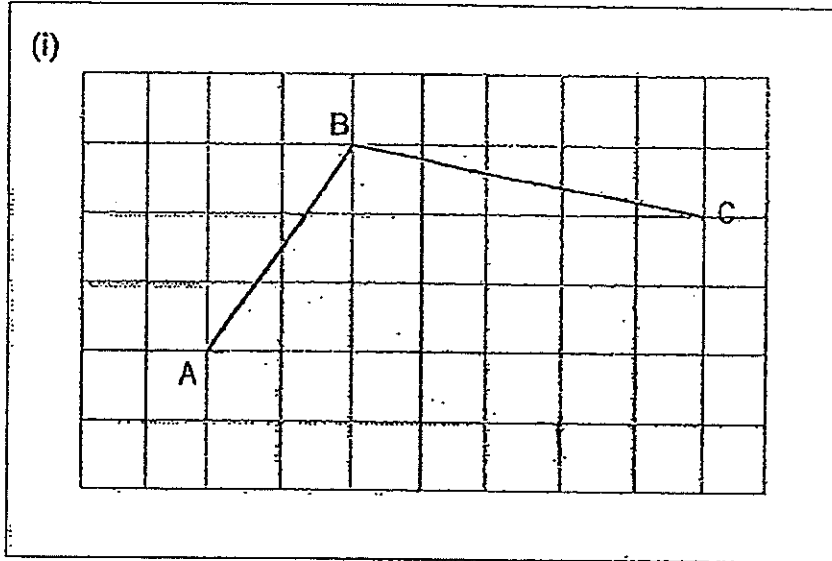
- 9 The figure below is formed by 5 identical squares with 3 similar semi-circles cut out from it. Each square has a side of 14 cm.
Find the perimeter of the shaded figure.
Leave your answer in terms of π .



Ans: _____ [3]

- 10 AB and BC are two sides of a parallelogram.
- (i) Complete the parallelogram ABCD by drawing the other two sides in the square grid below.
- (ii) Measure and write down the size of $\angle BAD$:

Do not write
in this space



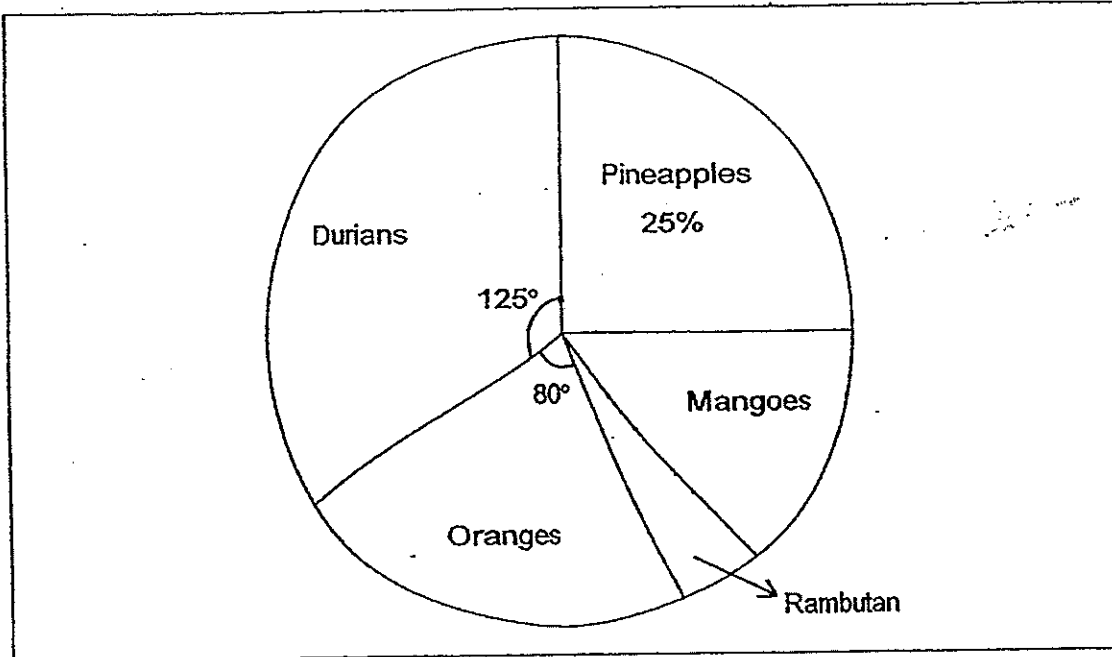
[2]

Ans: (ii) $\angle BAD =$ _____ [1]



- 11 The pie chart represents the number of fruits sold at a fruit stall.
There are 1 080 fruits sold at the stall.

Do not write
in this space



- (a) Express the number of durians and pineapples as a fraction of the total number of fruits sold at the stall.
- (b) Given that there are 48 rambutans, find the number of mangoes sold.

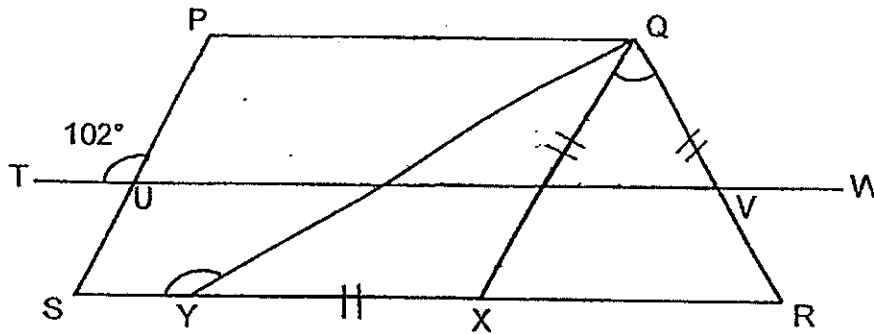
Ans: (a) _____ [2]

(b) _____ [2]



- 12 The figure below is not drawn to scale. PQXS is a parallelogram, QRX and QXY are isosceles triangles, $TW \parallel PQ$ and $\angle PUT = 102^\circ$. SXR is a straight line.
- (a) Find $\angle RQX$
- (b) Find $\angle SYQ$

Do not write
in this space



Ans: (a) _____ [2]

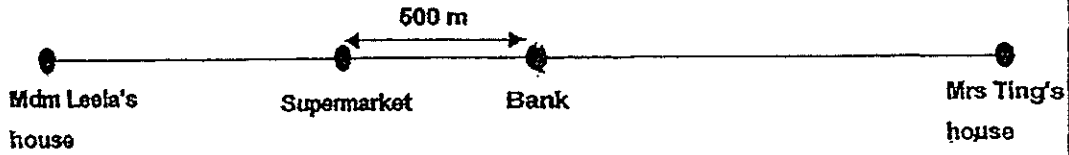
(b) _____ [2]



13

A supermarket and a bank, 500 m apart, are situated between Mrs Ting's house and Mdm Leela's house, as shown below.

Do not write
in this space



The bank is half-way between the two houses.

Mrs Ting and Mdm Leela left their homes at the same time and arrived at the supermarket at the same time. Mrs Ting drove at a speed of 65 km/h while Mdm Leela drove at a speed 10 km/h slower than Mrs Ting.

- (a) How much further did Mrs Ting travel than Mdm Leela?
- (b) How far is Mdm Leela's house from the bank?

Ans: (a) _____ [1]

(b) _____ [3]

- 14 Mrs Tan bought 3 pens and 2 calculators from a book store during a sale. She spent a total of \$68.40 altogether. She spent \$32.40 more on the pens than the calculators. The total discount for all the items was \$18.60 and she was given a 25% discount for the calculators.
- (a) What was her savings on the 3 pens?
 - (b) What was the percentage discount given for the pens?

Do not write
in this space

Ans: (a) _____ [2]

(b) _____ [2]

15 There are a total of 510 purple and red ribbons.

After $\frac{2}{3}$ of the purple ribbons and 25% of the red ribbons were used to decorate the school hall, there were twice as many red ribbons as purple ribbons.

- (a) How many more purple ribbons than red ribbons were used?
- (b) How many ribbons were left in the end?

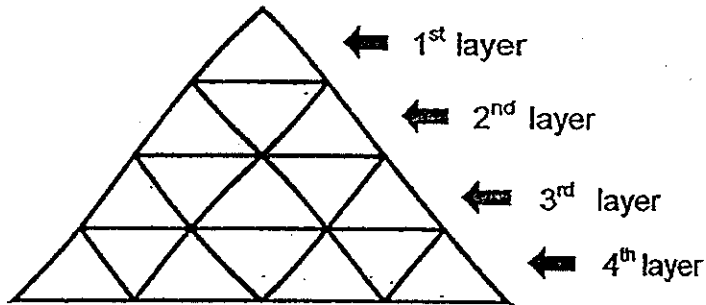
Do not write
in this space

Ans: (a) _____ [3]

(b) _____ [1]

16 The figure is made up of identical triangles.

Do not write
in this space



(a) Complete the table for layers 5 and 10.


Layer	Number of Triangles
1	1
2	3
3	5
4	7
5	(i)
.	.
.	.
10	(ii)

(b) Each small triangle has a base of 4 cm and a perpendicular height of 3 cm. Find the area of all the triangles at the 30th layer.

Ans: (a) (i) _____ [1]

(ii) _____ [1]

(b) _____ [3]




- 17 Mei Ling had some red beads and green beads in 2 boxes.
In box A, the ratio of the number of red beads to the number of green beads was 5 : 4.
In box B, the number of red beads was twice the number of green beads.
Mei Ling transferred $\frac{3}{4}$ of the green beads from Box A to Box B.
The number of beads in Box A became 126 and the ratio of the number of red beads to the number of green beads in Box B became 5 : 6.
- (a) How many green beads were transferred from Box A to Box B?
(b) What was the number of beads in Box B after the transfer?

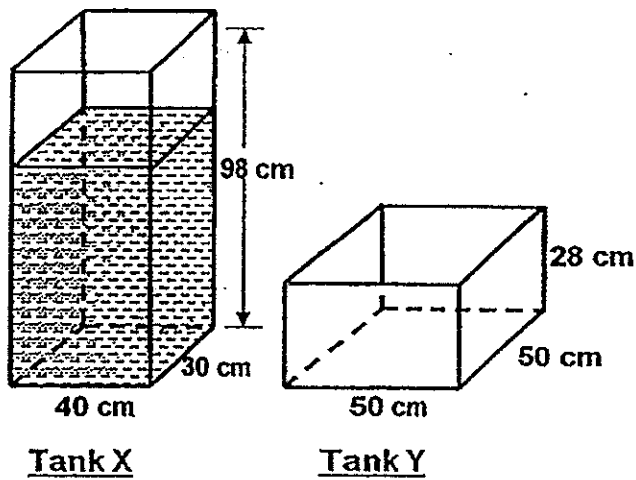
Do not write
in this space

Ans: (a) _____ [2]

(b) _____ [3]



- 18 Tank X, measuring 40 cm by 30 cm by 98 cm, is $\frac{3}{4}$ - filled with water.
Tank Y, with a square base of side 50 cm, is empty.
Water from Tank X is slowly poured into Tank Y until the water level in Tank X is 2 times the height of the water level in Tank Y.
What is the height of the water level in Tank X?



Do not write
in this space

Ans: _____ [5]



END OF PAPER



ANSWER SHEET

EXAM PAPER 2014

SCHOOL : MGS

PRIMARY : P6

SUBJECT : MATHEMATICS

TERM : SA2

Q1	Q2	Q3	Q4	Q5	Q6	Q7	Q8	Q9	Q10	Q11	Q12	Q13	Q14	Q15
3	4	2	3	2	4	2	3	2	2	2	2	4	2	3

16)\$11000

17)0.57

18)8 mm

19)10

20)110 cm

21)7/250

22)7.2

23)5:11

24)153°

25)36°

26)560

27)15

28)91

29)18

30)\$2550

Paper 2

1) $4 \times \$1.20 = \4.80

$\frac{1}{3} \times \$1.20 = \0.40

$\$4.80 + \$0.40 = \$5.20$

$\$100 \div \$5.20 = 19 \text{ R } \$1.20$

$(19 \times 5) + 1 = 96$

2) $\frac{1}{2} \times 28 \times 14 = 196 \text{ cm}^2$

3) $83 - 20 = 63$

$63 \div 10 = 6 \text{ R } 3$

$7 \times 0.35 = 2.45$

$2.45 + 1.10 = \$3.55$

$$4) 4/5 \div 2/1 = 2/5$$

$$1 - 2/5 = 3/5$$

$$5) (180 - 80) \div 2 = 50$$

$$50 + 20 = 70$$

$$70 \times 2 = 140$$

$$180 - 140 = 40^\circ$$

$$6) a) \left. \begin{array}{l} A \rightarrow K \\ M \rightarrow J k \\ J \rightarrow J k + 8 \end{array} \right\} 7K + 8$$

$$b) 7 \times 9 \times 8 = 6J + 8 = 71$$

$$7) 30 \times 3 = 90$$

$$90 - 54 = 36$$

$$1 + 3 = 4$$

$$36 \div 4 = 9 \text{ question}$$

$$8) 61 \times 4 = 244$$

$$13u \rightarrow 244 + 35 - 32 = 247$$

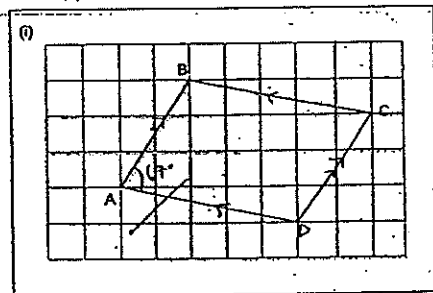
$$1u \rightarrow 247 \div 13 = 19$$

$$19 \times 6 = 114$$

$$9) 3/2 \times \Pi \times 14 = 21 \Pi$$

$$21 \Pi + (14 \times 7) = 21 \Pi + 98 \text{ cm}$$

10)i)



ii) 67°

$$11) a) 1080 \div 360 = 3$$

$$125 + 90 = 215$$

$$3 \times 215 = 645$$

$$645/1080 = 43/72$$

11)b) $3 \times 80 = 240$
 $145 \times 3 = 435$
 $435 - 240 - 48 = 147$

12)a) $180^\circ - 102^\circ = 78^\circ$
 $78^\circ \times 2 = 156^\circ$
 $\angle RQX \rightarrow 180^\circ - 156^\circ = 24^\circ$

b) $180^\circ - 78^\circ = 102^\circ$
 $(180^\circ - 102^\circ) \div 2 = 39^\circ$
 $\angle SYQ \rightarrow 180^\circ - 39^\circ = 141^\circ$

13)a) $500 \times 500 = 1000$

b) $10\text{km} \rightarrow 1\text{h}$
 $1\text{km} \rightarrow 1/10\text{h}$
 $55 \times 1/10 = 5.5$
 $5.5 + 0.5 = 6\text{ km}$

14)a) $\$68.40 - \$50.40 = \$18$

$\$18 \div 75 = \0.24

$\$0.24 \times 25 = \6

$\$18.60 - \$6 = \$12.60$

b) $12.60/63 \times 100 = 20\%$

15)a) $1\text{u} \rightarrow 510 \div 17 = 30$

$6 - 2 = 4$

$30 \times 4 = 120$

b) $30 \times 9 = 270$

16)a) i) 9

ii) 19

b) $1/2 \times 4 \times 3 = 6$

$2 \times 30 = 60$

$60 - 1 = 59$

$59 \times 6 = 354\text{ cm}^2$

17)a) $126 \div 6 = 21$

$21 \times 3 = 63$

b) $7\text{p} \rightarrow 63$

$1\text{p} \rightarrow 7$

$22\text{p} \rightarrow 22 \times 9 = 198\text{ beads}$

$$18)40 \times 30 = 1200$$

$$1200 \times 2 = 2400$$

$$50 \times 50 = 2500$$

$$2500 + 2400 = 4900$$

$$\frac{3}{4} \times 98 \times 40 \times 30 = 88200$$

$$88200 \div 4900 = 18$$

$$18 \times 2 = 36 \text{ cm}$$