

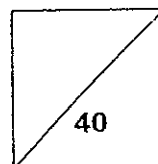


**HENRY PARK PRIMARY SCHOOL  
2014 SEMESTRAL EXAMINATION 1  
MATHEMATICS  
PRIMARY 6**

**PAPER 1**

Name: \_\_\_\_\_ ( )

Class: Primary 6 \_\_\_\_\_



**30 Questions  
40 Marks**

**Total Time for Booklet A and B: 50 min**

**DO NOT OPEN THIS BOOKLET UNTIL YOU ARE TOLD TO DO SO.**

**READ AND FOLLOW INSTRUCTIONS CAREFULLY.**

**YOU ARE NOT ALLOWED TO USE A CALCULATOR.**

Booklet A:

Questions 1 to 10 carry 1 mark each. Questions 11 to 15 carry 2 marks each.

For each of the questions, four options are given. One of them is the correct answer. Choose the correct answer (1, 2, 3 or 4). Shade the correct oval on the Optical Answer Sheet provided. (20 marks)

1. The value of  $3 + 4 \times 6 - 6 \div 3$  is \_\_\_\_\_.

- (1) 7
- (2) 12
- (3) 3
- (4) 25

( )

2. How many eighths are there in  $3\frac{1}{2}$ ?


- (1) 7
- (2) 14
- (3) 24
- (4) 28

( )

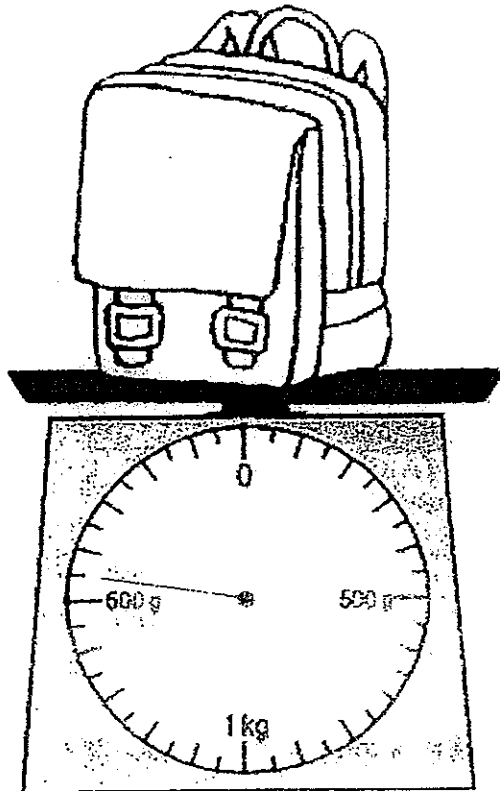
3. Which of the following is the same as 8 050 ml?

- (1) 8 l 5 ml
- (2) 8 l 50 ml
- (3) 80 l 5 ml
- (4) 80 l 50 ml

( )



4. The mass of the bag shown below is \_\_\_\_\_.



- (1) 550 g
- (2) 600 g
- (3) 1550 g
- (4) 1600 g

( )

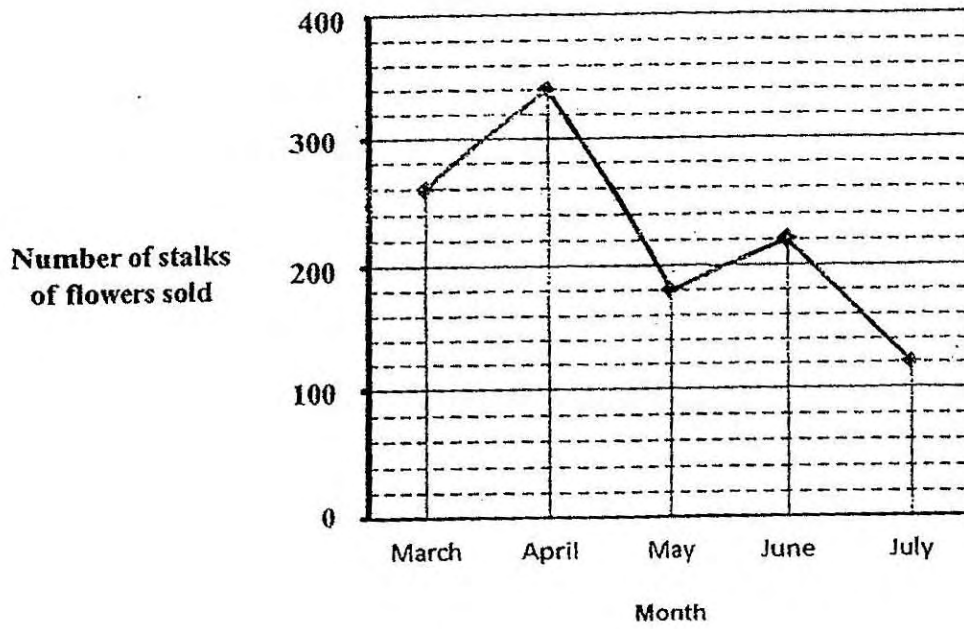
5. The average of five numbers is 265. What is the sum of the five numbers?

- (1) 51
- (2) 53
- (3) 1025
- (4) 1325

( )



6. The line graph shows the number of stalks of flowers sold over 5 months.



What was the difference in the number of stalks of flowers sold in March and May?


- (1) 80
- (2) 90
- (3) 120
- (4) 440

( )




7. Which figure below has a line of symmetry?

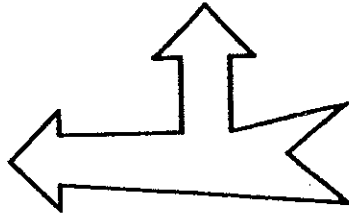
(1)




(2)



(3)



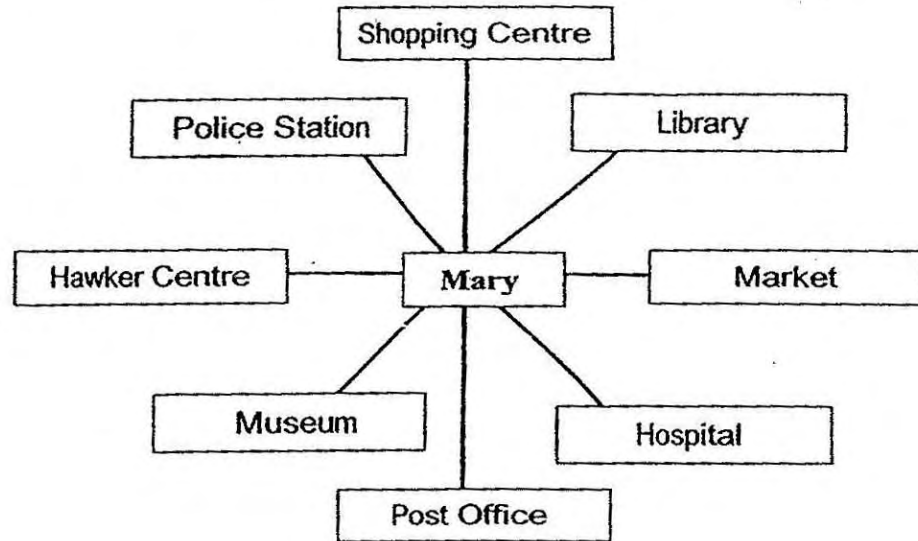
(4)



( )



8. Look at the figure shown below. Mary is facing the hawker centre at first. She then turned  $225^\circ$  anti-clockwise. Which one of the following places will she be facing now?



- (1) Library  
 (2) Hospital  
 (3) Shopping Centre  
 (4) Post Office

( )

9. There are 40 pupils in a Science Enrichment class. 30% of the pupils are girls. How many boys are there in the Science Enrichment class?

- (1) 10  
 (2) 12  
 (3) 28  
 (4) 37

( )

10. Simplify  $9p + 14 - 3p - 6$ .

- (1)  $6p + 8$   
 (2)  $6p - 8$   
 (3)  $12p + 8$   
 (4)  $12p + 20$

( )

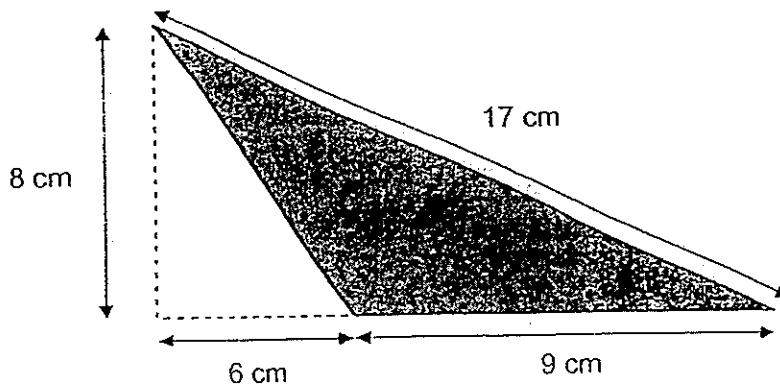


11. Find the difference between 6 tenths and 88 hundredths. Round off your answer to the nearest tenth.

- (1) 0.2
- (2) 0.3
- (3) 0.5
- (4) 0.6

( )

12. What is the area of the shaded triangle shown below?



- (1)  $24 \text{ cm}^2$
- (2)  $36 \text{ cm}^2$
- (3)  $60 \text{ cm}^2$
- (4)  $68 \text{ cm}^2$

( )

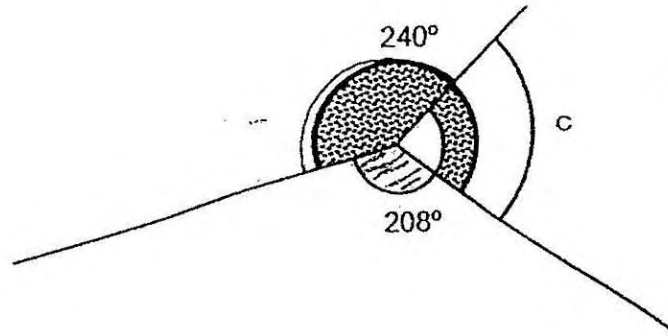
13. The mass of Box A is 36 kg. The total mass of Box B and C is 3 times the mass of Box A. What is the average mass of the three boxes?

- (1) 16 kg
- (2) 48 kg
- (3) 84 kg
- (4) 144 kg

( )



14. Study the figure below. Find  $\angle c$ .



- (1)  $32^\circ$   
(2)  $88^\circ$   
(3)  $120^\circ$   
(4)  $152^\circ$

( )

15. Jiamin saved \$30.15 from Monday to Wednesday. She saved 3 times as much money on Thursday than the total amount saved from Monday to Wednesday. How much money did she save for the 4 days?

- (1) \$10.05  
(2) \$40.20  
(3) \$90.45  
(4) \$120.60

( )





**Booklet B:**

Questions 16 to 25 carry 1 mark each. Write your answers in the spaces provided. For questions which require units, give your answers in the units stated. (10 marks)

16. Find the difference in values of the digit 9 in 293 967.

Ans: \_\_\_\_\_

17. What is the missing fraction in the box? Give your answer in the simplest form.

$$280 = \boxed{?} \times 350$$

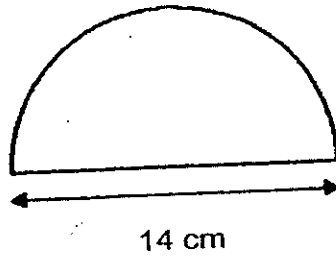
Ans: \_\_\_\_\_

18. 3 h 15 min = \_\_\_\_\_ min

Ans: \_\_\_\_\_ min



19. Find the perimeter of the semicircle shown below. (Take  $\pi = \frac{22}{7}$ )



Ans: \_\_\_\_\_ cm

20. 287 900 m = \_\_\_\_\_ km.

Ans: \_\_\_\_\_ km



21. Mrs Tan sold a total of 552 muffins from Tuesday to Friday. What was the average number of muffins Mrs Tan sold each day?

Ans: \_\_\_\_\_

22. The table shows the number of television sets each family in Katong housing estate has. There are 150 families in the housing estate.

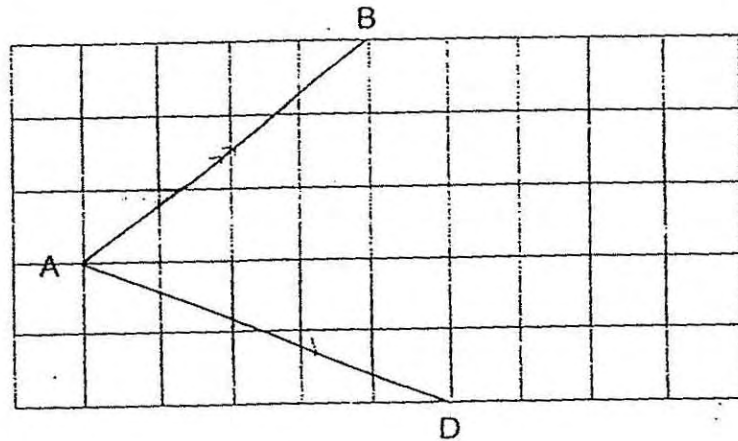
<b>Number of television sets per family</b>	0	1	2	3
<b>Number of families</b>	16	29	75	30

What percentage of the families has **at least** 2 television sets?

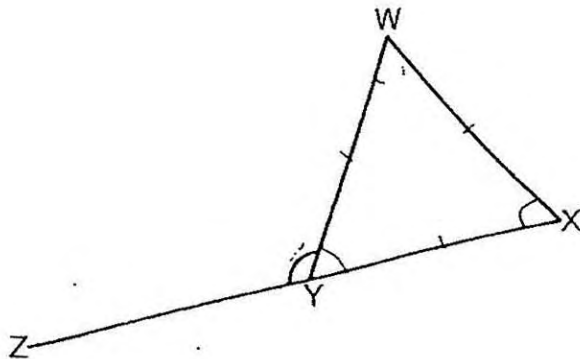
Ans: \_\_\_\_\_ %




23. AB and AD are two sides of a parallelogram. Complete the parallelogram by drawing the other two sides in the square grid below.



24. In the figure, WXY is an equilateral triangle and XYZ is a straight line. Find  $\angle WYZ$ .




Ans: \_\_\_\_\_ °



25. Express 4.05 as a percentage.

Ans: \_\_\_\_\_ %



Questions 26 to 30 carry 2 marks each. Show your working clearly in the space provided for each question and write your answers in the spaces provided. For questions which require units, give your answers in the units stated. (10 marks)

26. Find the average of 0.2, 0.02 and 0.002.

Ans: \_\_\_\_\_

27. Sam and Taufiq shared some stickers in the ratio of 5 : 2. Sam gave  $\frac{1}{4}$  of his stickers to Taufiq. What was the new ratio of the number of Sam's stickers to the number of Taufiq's stickers?

Ans: \_\_\_\_\_



28. Given that  $\frac{5}{8}$  of a number is 80, what is the number?

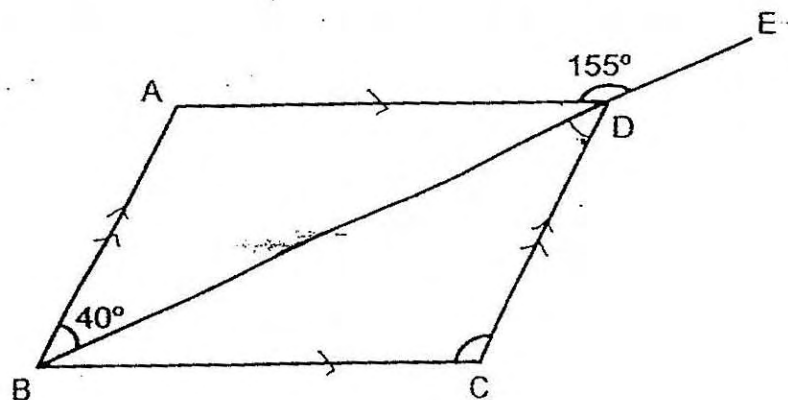
Ans: \_\_\_\_\_

29. The capacity of a pail is 4.5 ℓ. Jane uses 12 such pails of water to fill 5 identical tanks completely. What is the capacity of each tank?

Ans: \_\_\_\_\_ ℓ



30. In the figure, ABCD is a parallelogram and BDE is a straight line. Find  $\angle BCD$ .



Ans: \_\_\_\_\_<sup>o</sup>

END OF PAPER

Setters: Mr Bernard Li  
Mrs Josephine Lai  
Mdm Norah Idil

Mrs Priscilla Heng  
Ms Yew Hew Mei





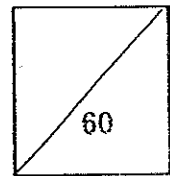


HENRY PARK PRIMARY SCHOOL  
2014 SEMESTRAL EXAMINATION 1  
MATHEMATICS  
PRIMARY 6

PAPER 2

Name: \_\_\_\_\_ ( )

Class: Primary 6 \_\_\_\_\_



18 Questions  
60 Marks

Total Time for Paper 2: 1 h 40 min

DO NOT OPEN THIS BOOKLET UNTIL YOU ARE TOLD TO DO SO.

READ AND FOLLOW INSTRUCTIONS CAREFULLY.

YOU ARE ALLOWED TO USE A CALCULATOR.

Questions 1 to 5 carry 2 marks each. Show your working clearly in the space provided for each question and write your answers in the space provided. For questions which require units, give your answers in the units stated. (10 marks)

1. A square has an area of  $36 \text{ cm}^2$ . Find its perimeter.

Ans: \_\_\_\_\_ cm

2. The figure below shows a prism.  
(a) How many corners does it have?  
(b) How many faces does it have?



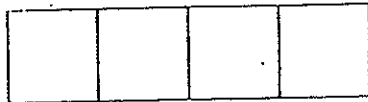
Ans:(a) \_\_\_\_\_ [1]

(b) \_\_\_\_\_ [1]

3. Tin A contained 6 times as many biscuits as Tin B. Jennifer added 150 biscuits to Tin B. The 2 tins then had the same number of biscuits. Find the total number of biscuits in the 2 tins at first.

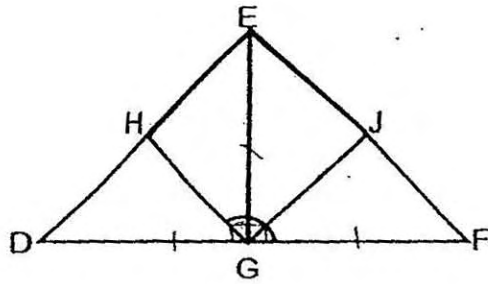
Ans: \_\_\_\_\_

4. In the figure below, 4 identical squares have been placed side by side to form a rectangle of perimeter 50 m. Find the area of each square.



Ans: \_\_\_\_\_ m<sup>2</sup>

5. In the figure,  $\triangle DEG$  and  $\triangle GEF$  are identical right-angled isosceles triangles.  $H$  and  $J$  are the mid-points of  $DE$  and  $EF$  respectively. Find  $\angle FGH$ .



Ans: \_\_\_\_\_<sup>o</sup>

For questions 6 to 18, show your working clearly in the space provided for each question and write your answers in the spaces provided.

The number of marks available is shown in brackets [ ] at the end of each question or part-question. (50 marks)

6. There were 3 220 spectators at a stadium.  $\frac{3}{7}$  of the male and  $\frac{3}{4}$  of the female spectators did not wear sunglasses. The number of male spectators who wore sunglasses was the same as the number of female spectators who wore sunglasses. How many spectators wore sunglasses altogether?

Ans: \_\_\_\_\_ [3]

7. A 0.75-m long ribbon is used to tie a cubic box as shown in the picture. The tying of the bow used up 0.11 m of the ribbon. Find the length of each side of the box in metres.



Ans: \_\_\_\_\_ [3]

8. Figure A is made up of a rectangle and a triangle. Figure B is a rectangle. Figures A and B have the same area. Find the perimeter of Figure B.

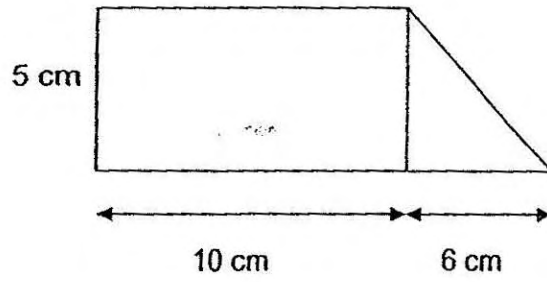


Figure A

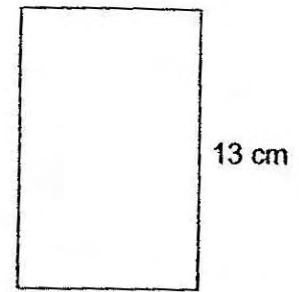


Figure B

Ans: \_\_\_\_\_ [3]

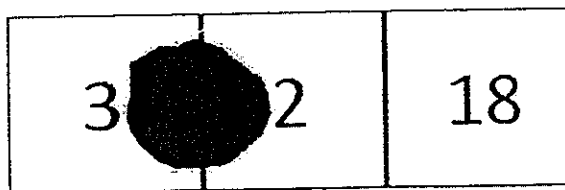
9. Alice decided to save part of her pocket money every day for a year. She saved \$3 on the first day of the year. She continued to save \$y more each day than the day before.

- (a) What was her total savings for the first 4 days of the year?  
(b) How much did she save on the 234<sup>th</sup> day itself?

Ans: (a) \_\_\_\_\_ [2]


(b) \_\_\_\_\_ [1]

10. Three 2-digit numbers were written on a piece of paper. The average of the three numbers was 42. A digit of two of the numbers was covered by a stain. What were the two 2-digit numbers?



Ans: \_\_\_\_\_ and \_\_\_\_\_ [3]

11. The figure below shows a right-angled triangle inside a circle. The longest side of the triangle is the diameter of the circle. Given that the diameter of the circle is 10 cm, find the area of the shaded portion. (Take  $\pi = 3.14$ )



Ans: \_\_\_\_\_ [4]

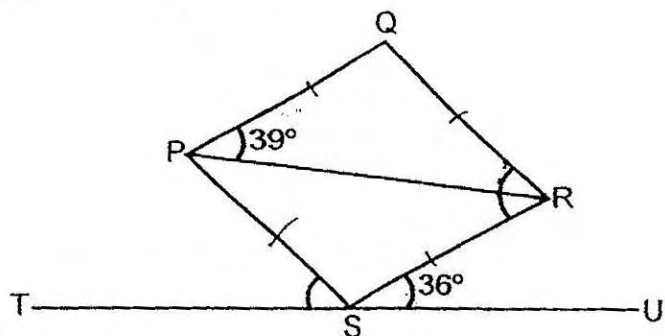


12. Mrs Bala had a total of 128 apples, oranges and mangoes in the ratio of 7 : 5 : 4 respectively. After she gave away some apples and 15 mangoes, the ratio of the number of oranges to the total number of fruits left became 1 : 2. How many apples did Mrs Bala give away?

Ans: \_\_\_\_\_ [4]

13. In the figure, PQRS is a rhombus. TSU is a straight line.  $\angle RPQ = 39^\circ$  and  $\angle RSU = 36^\circ$ .

- (a) Find  $\angle QRS$ .  
(b) Find  $\angle PST$ .



Ans: (a) \_\_\_\_\_ [1]

(b) \_\_\_\_\_ [3]

14. Mrs Wong was paid \$5 for every cooking pot she sold. She was paid a bonus of \$20 for every 8 cooking pots she sold. She earned \$500 for all the cooking pots she sold. How many cooking pots did she sell?

Ans: \_\_\_\_\_ [4]

15. Mr Lin always saves 30% of his monthly salary. When his salary increased by 10%, his savings increased by \$189. Find Mr Lin's salary before the increase.

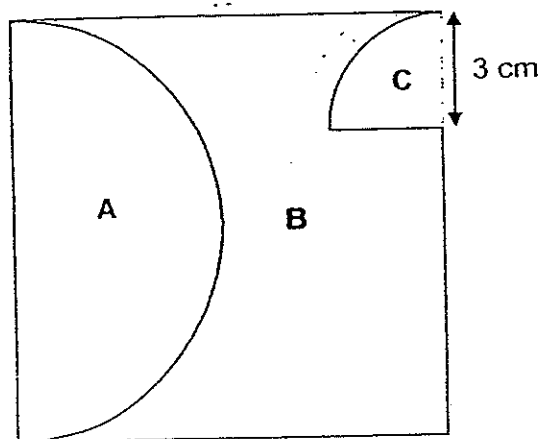
Ans: \_\_\_\_\_ [4]

16. The figure below shows semi-circle A and quarter-circle C inside a square of side 12 cm. B is the remaining portion of the square not covered by A and C.

(a) Find the perimeter of B.

(b) Find the area of B.

(Take  $\pi = 3.14$ )



Ans: (a) \_\_\_\_\_ [3]

(b) \_\_\_\_\_ [2]

17. At a fruit stall, the number of watermelons was  $\frac{3}{5}$  of the number of pineapples.

In the morning,  $\frac{1}{3}$  of the watermelons and  $\frac{1}{3}$  of the pineapples were sold.

In the afternoon, 8 watermelons and 8 pineapples were sold.

The number of watermelons left was  $\frac{1}{2}$  of the number of pineapples.

(a) What was the ratio of the number of watermelons left to the number of pineapples left after they were sold in the morning?

(b) How many watermelons were there at the stall at first?

Ans: (a) \_\_\_\_\_ [2]


(b) \_\_\_\_\_ [3]

18. There were 20 questions in a quiz.  
For each question answered correctly, 6 points were awarded.  
For each question answered incorrectly, 4 points were deducted.  
For each question left blank, no points were awarded or deducted.
- (a) Ben answered all the questions in the quiz but obtained a score of zero. How many questions did Ben answer correctly?
- (b) Ray scored 16 points for the quiz. The number of questions he answered correctly was the same as the number of questions he answered incorrectly. How many questions did he leave blank?

Ans: \_\_\_\_\_ [5]

END OF PAPER

Setters:	Mr Bernard Li	Mrs Priscilla Heng
	Mrs Josephine Lai	Ms Yew Hew Mei
	Mdm Norah Idil	





**EXAM PAPER 2014**

**LEVEL : PRIMARY 6**  
**SCHOOL : HENRY PARK**  
**SUBJECT : MATHS**  
**TERM : SA1**

Q1	Q2	Q3	Q4	Q5	Q6	Q7	Q8	Q9	Q10	Q11	Q12	Q13	Q14	Q15
4	4	2	3	4	1	4	1	3	1	2	2	2	2	4

Q16 89100

Q17  $\frac{4}{5}$

Q18 195 min

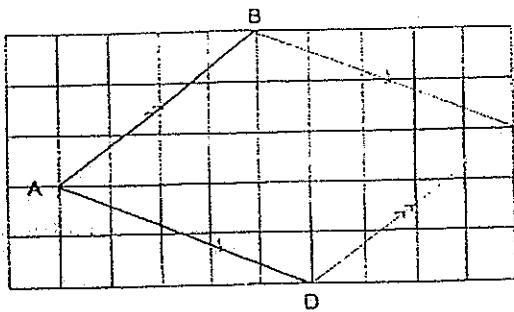
Q19 36 cm

Q20 287.9 km

Q21 138 muffins

Q22 70%

Q23



Q24  $120^\circ$

Q25 405%

Q26 0.074

Q27 15 : 13

Q28 128

Q29 10.8L

Q30  $115^\circ$

PAPER 2

Q1  $\sqrt{36} = 6$   
 $6 \times 4 = 24$

**Its perimeter is 24 cm.**

Q2 (a) 6 corners  
(b) 5 faces

Q3  $6 - 1 = 5$   
5 units  $\rightarrow$  150  
1 unit  $\rightarrow$  30  
7 units  $\rightarrow$  210

**The total number of biscuits is 210.**

Q4 10 units  $\rightarrow$  50 m  
1 unit  $\rightarrow$  5 m  
 $5 \times 5 = 25$

**The area is 25m<sup>2</sup>.**

Q5  $90 \div 2 = 45$   
 $45 \times 3 = 135$   
 $\angle FGH$  is  $135^\circ$

Q6  $1 - \frac{3}{7} = \frac{4}{7}$   
 $1 - \frac{3}{4} = \frac{1}{4}$   
 $\frac{1}{4}F = \frac{4}{7}M$   
 $\frac{4}{16}F = \frac{4}{7}M$   
 $16 + 7 = 23$   
23 units  $\rightarrow$  3220  
1 unit  $\rightarrow$  140  
 $4 \times 2 = 8$   
 $140 \times 8 = 1120$

**1120 spectators wore glasses altogether.**

Q7  $0.75 - 0.11 = 0.64$   
 $0.64 \div 8 = 0.08$  (8 sides)

**The length is 0.08m.**

Q8  $6 \times 5 \times 0.5 = 15$   
 $10 \times 5 = 50$   
 $50 + 15 = 65$   
 $65 \div 13 = 5$   
 $2(13 + 5) = 36$   
**The perimeter is 36 cm.**

Q9  $3 + y + 3 + y + y + 3 + y + y + y + 3 = 6y + 12$

a. Her total savings is  $\$(6y+12)$ .

$$234 - 1 = 233$$

$$233 \times y = 233y$$

$$233y + 3 \rightarrow 234^{\text{th}} \text{ day}$$

b. She saved  $\$(233y + 3)$ .

Q10  $42 \times 3 = 126$

$$126 - 18 - 2 - 30 = 76$$

$$70 + 6 = 76$$

$$70 + 2 = 72$$

$$30 + 6 = 36$$

The digits are 36 and 72.

Q11  $10 \div 2 = 5$

$$5 \times 10 \times 0.5 = 25$$

$$5 \times 5 \times 3.14 = 78.5$$

$$78.5 - 25 = 53.5$$

The area is  $53.5 \text{ cm}^2$ .

Q12

A : O : M

7 : 5 : 4

-?      -15 (gave away)

---

left : orange

2 : 1 (x5)

10 : 5 (Orange unchanged)

$$7 + 5 + 4 = 16$$

$$16 \text{ units} \rightarrow 128$$

$$1 \text{ unit} \rightarrow 8$$

$$10 \text{ units} \rightarrow 80 \text{ (fruits left)}$$

$$128 - 80 = 48 \text{ (gave away apples + 15 mangoes)}$$

$$48 - 15 = 33$$

She gave away 33 apples.

Q13 (a)  $\angle QPR = \angle QRP = \angle PRS$   
 $39 \times 2 = 78$

$$\angle QRS = 78^\circ$$

(b)  $180 - 78 = 102$   
 $\angle PSR = 102^\circ$   
 $180 - 102 - 36 = 42$

$$\angle PST = 42^\circ$$

Q14  $8 \times 5 = 40$   
 $40 + 20 = 60$   
 $500 \div 60 = 8R20$   
 $20 \div 5 = 4$   
 $8 \times 8 = 64$   
 $64 + 4 = 68$

She sold 68 cooking pots.

Q15  $\frac{10}{100} \times 30 = 3$   
 $3\% \rightarrow 189$   
 $1\% \rightarrow 63$   
 $100\% \rightarrow 6300$

Mr Lin's salary is \$6300.

Q16 (a)  $12 \times 3.14 \times \frac{1}{2} = 18.84$   
 $3 \times 2 = 6$   
 $6 \times 3.14 \times \frac{1}{4} = 4.71$   
 $12 - 3 = 9$   
 $9 + 3 + 12 + 12 + 18.84 + 4.71 = 59.55$

The perimeter of B is 59.55cm.

(b)  $12 \times 12 = 144$   
 $12 \div 2 = 6$   
 $6 \times 6 \times 3.14 \times \frac{1}{2} = 56.52$   
 $3 \times 3 \times \frac{1}{4} \times 3.14 = 7.065$   
 $144 - 56.52 - 7.065 = 80.415$

The area of B is 80.415cm<sup>2</sup>.

Q17

W : P

$$3u : 5u \text{ (x3)}$$

$$9u : 15u$$

$$\text{(morning)} \quad \underline{3u : 5u \text{ (}\frac{1}{3}\text{ sold)}}$$

$$6u : 10u \text{ (left)}$$

$$\text{(afternoon)} \quad \underline{-8 \quad -8 \text{ (sold)}}$$

$$1u : 2u$$

$$4u : 8u \text{ (left)}$$

Diff

$$4u$$

$$1u \text{ (x4)}$$

(a) The ratio is 3 : 5

(b)  $10u - 8u = 2u$

$$2u \rightarrow 8$$

$$9u \rightarrow 36$$

**There were 36 watermelons at first.**

Q18

Assume Ben answered all the questions correctly.

$$20 \times 6 = 120$$

$$6 + 4 = 10$$

$$120 \div 10 = 12$$

$$20 - 12 = 8$$

**Ben answered 8 questions correctly.**

Assume Ben answered all the questions

$$20 \div 2 = 10$$

$$10 \times 6 = 60$$

$$10 \times 4 = 40$$

$$60 - 40 = 20$$

$$20 - 16 = 4$$

**He left 4 questions blank.**

