



**CHIJ PRIMARY (TOA PAYOH)  
WEIGHTED ASSESSMENT (TERM 2)  
TOPICAL REVIEW 2022**

NAME

REGISTER  
NUMBER

FORM CLASS

**MATHEMATICS  
PRIMARY THREE**

**10 May 2022**  
Time: 50 min

**INSTRUCTIONS TO CANDIDATES**

1. Do not turn over this page until you are told to do so.
2. Follow all instructions carefully.
3. Answer all questions.

<b>Section A</b>		<b>14</b>
<b>Section B</b>		<b>16</b>
<b>Section C</b>		<b>10</b>
<b>Total</b>		<b>40</b>

Parent's / Guardian's Signature: \_\_\_\_\_

---

This booklet consists of [ 10 ] printed pages including this cover page.



**Section A**  
**Multiple Choice Questions (7 x 2m)**

Choose the correct answer and write 1, 2, 3 or 4 in the brackets provided.

1. The digit 3 in 8034 is in the \_\_\_\_\_ place.

(1) ones

(2) tens

(3) hundreds

(4) thousands

( )

2. The sum of 7856 and 97 is \_\_\_\_\_

(1) 7759

(2) 7841

(3) 7843

(4) 7953

( )

3.  $7213 - 6508 =$  \_\_\_\_\_


(1) 605

(2) 615

(3) 705

(4) 715

( )



3

4. What is the product of 8 and 7?

- (1) 64
- (2) 56
- (3) 54
- (4) 15

( )

5. What is the missing number in the box?

$$9 + \boxed{\phantom{00}} = 48 + 3$$


- (1) 7
- (2) 9
- (3) 16
- (4) 25

( )

6. There are 612 erasers altogether. Sam packs them equally into 6 boxes. How many erasers are there in each box?

- (1) 12
- (2) 66
- (3) 102
- (4) 606

( )



7. What is the difference between the values of digit '5' and digit '7' in 5370?
- (1) 430  
 (2) 4300  
 (3) 4930  
 (4) 4993

**Section B**

**Fill in the blanks with the correct answers.**

- 8a. Write four thousand and sixty-three in numerals

Ans: \_\_\_\_\_ [1]

- 8b. Arrange the numbers in order, beginning with the **greatest**.

2785,	7258,	2587,	7528
-------	-------	-------	------

Ans : \_\_\_\_\_ , \_\_\_\_\_ , \_\_\_\_\_ , \_\_\_\_\_  
 (greatest)

[1]



5

9. Multiply 439 by 9.

The answer is \_\_\_\_\_.

Ans: \_\_\_\_\_ [2]

10. Find the quotient when 362 is divided by 5.

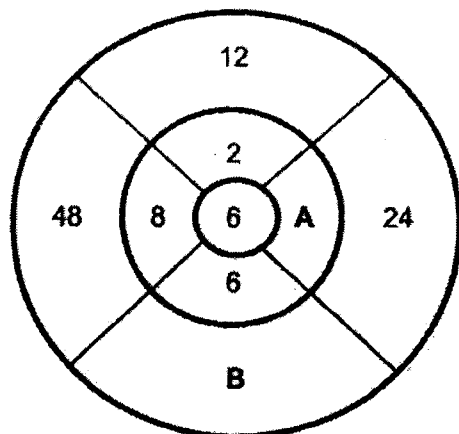
Ans: \_\_\_\_\_ [2]



6

11. The numbers in the diagram below follow a pattern.

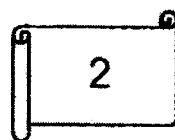
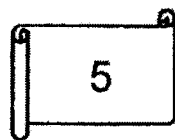
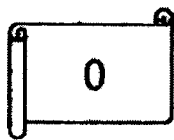
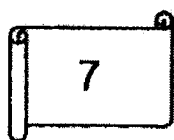
Find the value of A and B.



Ans A: \_\_\_\_\_ [1]

Ans B: \_\_\_\_\_ [1]

12.



a) Using the digits above, form the

i) greatest 4-digit number


Ans: \_\_\_\_\_ [1]

ii) smallest 3-digit number

Ans: \_\_\_\_\_ [1]

b) Find the sum of the above two numbers.

Ans: \_\_\_\_\_ [2]



13. Michelle is 27 years old this year. Kenneth will be 26 years old in 10 years' time. How much older is Michelle than Kenneth?

Ans: \_\_\_\_\_ [2]

14. Form the smallest 3-digit odd number and divide it by 4. What answer will you get?

Ans: \_\_\_\_\_ [2]



**Section C**

**Solve the following problem sums. Show your working clearly in the space provided and write your answers in the blanks.**

15. There were 187 adults at a food fair.

There were 58 more adults than children at the food fair.

How many people were there at the food fair altogether?

Ans : \_\_\_\_\_ [3m]

16. Rita and Don have \$5010 altogether.  
Yvonne and Rita have \$8273 altogether.  
If Yvonne has \$3958, how much does Don have?

Ans : \_\_\_\_\_ [3m]

17. Asha had some beads. She used 35 beads to make a necklace. Then, she bought another 42 beads and had 105 beads left.


- a) How many beads will Asha need to make 2 similar necklaces?
- b) How many beads did Asha have at first?

Ans (a): \_\_\_\_\_ [1m]

Ans (b): \_\_\_\_\_ [3m]

Setter: Ms Rajini

**End of paper**





YEAR : 2022  
 LEVEL : PRIMARY 3  
 SCHOOL : CHIJ PRIMARY (TOA PAYOH)  
 SUBJECT : MATHEMATICS  
 TERM : WEIGHTED ASSESSMENT (TERM 2)

Q1	2	Q2	4	Q3	3	Q4	2	Q5	1
Q6	3	Q7	3						

Q8	a. 4063 b. 7528, 7258, 2785, 2587	Q9	$439 \times 9 = 3951$
Q10	72	Q11	Ans A: 4 Ans B: 36
Q12	a) i) 7520 ii) 205 b) 7725	Q13	$26 - 10 = 16$ $27 - 16 = 11$ years
Q14	$101 \div 4 = 25$ R1	Q15	$187 - 58 = 129$ $187 + 129 = 316$ There were 316 people at the food fair altogether.
Q16	$8273 - 3958 = 4315$ $5010 - 4315 = \$695$	Q17	$35 \times 2 = 70$ $105 - 42 = 63$ $63 + 35 = 98$ (a): 70 (b): 98

