



NANYANG PRIMARY SCHOOL

**SECOND SEMESTRAL EXAMINATION
2017**

**PRIMARY 3
MATHEMATICS**

DURATION: 1 HOUR 45 MINUTES

Section A	/ 40
Section B	/ 40
Section C	/ 20

Total:	/ 100
---------------	--------------

Name: _____ ()

Class: Primary 3 ()

Date: _____

Any query on marks awarded should be raised by 8 November 2017.
We seek your understanding in this matter as any delay in the
confirmation of marks will lead to delays in the generation of results.

Parent's Signature: _____

**DO NOT OPEN THIS BOOKLET UNTIL YOU ARE TOLD TO DO SO.
FOLLOW ALL INSTRUCTIONS CAREFULLY.
ANSWER ALL QUESTIONS.**

5. What is the remainder when 703 is divided by 9?

- (1) 1
(3) 3

- (2) 5
(4) 7

6. Which one of the following fractions is equivalent to $\frac{3}{5}$?


(1) $\frac{2}{4}$

(2) $\frac{3}{10}$

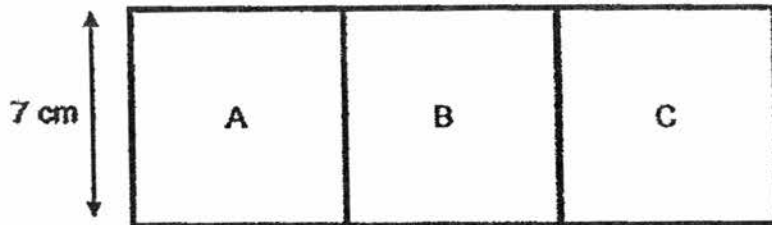
(3) $\frac{4}{6}$

(4) $\frac{6}{10}$

7. Which one of the following marked angles is a right angle?

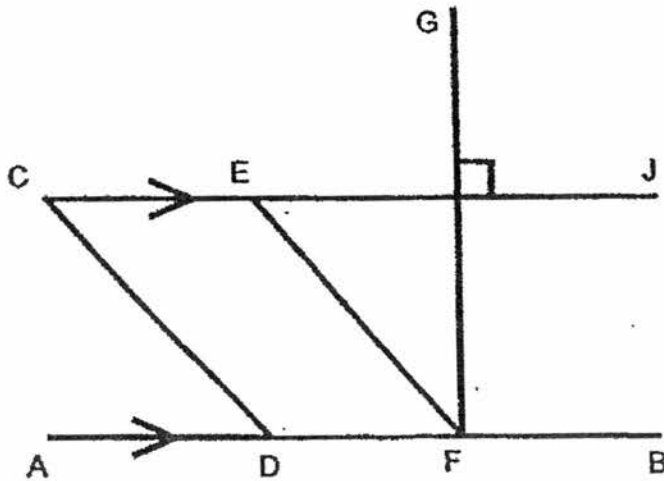


16. The figure below is made up of three identical squares A, B and C. The length of each square is 7 cm.



What is the area of the figure?

- (1) 49 cm^2 (2) 56 cm^2
(3) 70 cm^2 (4) 147 cm^2
17. Look at the figure below.
Lines CJ, AB, CD, EF and GF are straight lines.



Name the line that is perpendicular to AB.

- (1) Line CD (2) Line EF
(3) Line FG (4) Line CJ

18. The calendar below shows the month of August 2017.

AUGUST 2017						
Sun	Mon	Tue	Wed	Thur	Fri	Sat
		1	2	3	4	5
6	7	8	9	10	11	12
13	14	15	16	<u>17</u>	18	19
20	21	22	23	24	25	26
27	28	29	30	31		

Alison underlined her birthday on the calendar.
Her birthday party is 2 days later.

What is the date of her birthday party?

- (1) 3 August 2017 (2) 15 August 2017
(3) 19 August 2017 (4) 31 August 2017

19. The sum of two numbers is
The greater number is 3478.
What is the difference between the two numbers?

- (1) 1379 (2) 2099
(3) 6236 (4) 8335

20. A factory produced 216 blouses on Monday
The number of blouses produced on Tuesday was $\frac{1}{3}$ the number
of blouses produced on Monday.
How many blouses did the factory produce on both days



- (1) 54 (2) 648
(3) 864 (4) 1080

Section B

Questions 21 to 40 carry 2 marks each. Show your working clearly in the space below each question and write your answers in the spaces provided. For questions which require units, give your answers in the units stated.


(Total: 40 marks)

21. Arrange the numbers below from the smallest to the greatest.



Answer: _____, _____, _____

22. There are 21 flowers. Circle them to show groups of 7.



23. Arrange the following fractions from the greatest to the smallest.



Answer: _____, _____, _____

24. What is the missing number?

$$\frac{2}{3} = \frac{8}{\boxed{?}}$$

Answer: _____

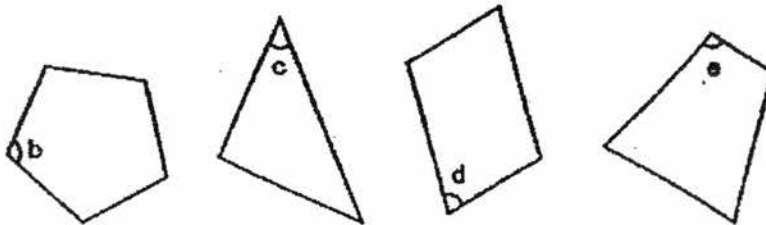
25. Convert $5/32$ ml into millilitres.

Answer: _____ ml

26. Write 228 minutes in hours and minutes.

Answer : _____ h _____ min

27. Look at the given angles b, c, d, e and answer the following questions.



(a) Which angles are acute angles?

Answer: Angle _____ and Angle _____

(b) Which angles are obtuse angles?

Answer: Angle _____ and Angle _____

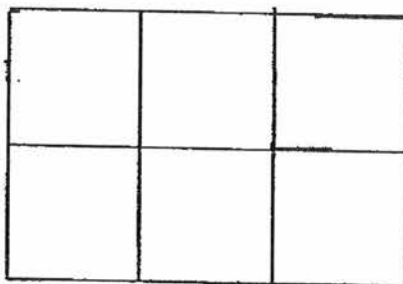
28. Edward walked 4200 steps on the first day. 4900 steps on the second day, 5600 steps on the third day 6300 steps on the fourth day and so on.
Given that the pattern continued, how many steps did he walk on the sixth day?

Answer: _____

29. Mrs Kingston baked 188 cupcakes.
She had 4 cupcakes for tea.
She then gave the remaining cupcakes equally to her 8 children.
How many cupcakes did each child get?

Answer : _____

30. Study the figure given below.



Shade $\frac{1}{4}$ of the figure.


31. A toy robot \$37.50
 Mdm Nurul wanted to buy 2 such toy robots.
 The amount of money which she found in her purse is shown in the box below.



How much more money did she need to buy the 2 toy robots?

Answer : \$ _____

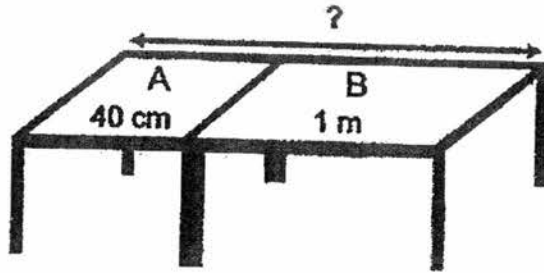
32. There are three beakers of water as shown below.



What is the _____ of water in _____
 Give your answer in _____

Answer : _____ litres _____ millilitres .

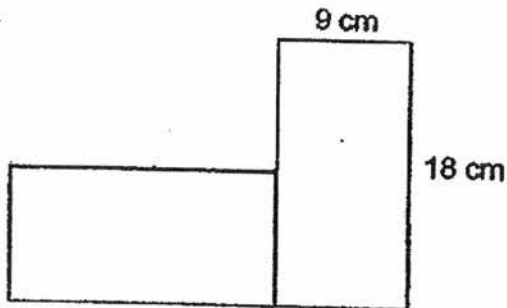
33. Mr Tan bought 2 tables as shown below.
 The length of the Table A is 40 cm.
 The length of Table B is 1 m.



What is the total length of the two tables when placed together side by side as shown above?
 Write your answer in centimetres.

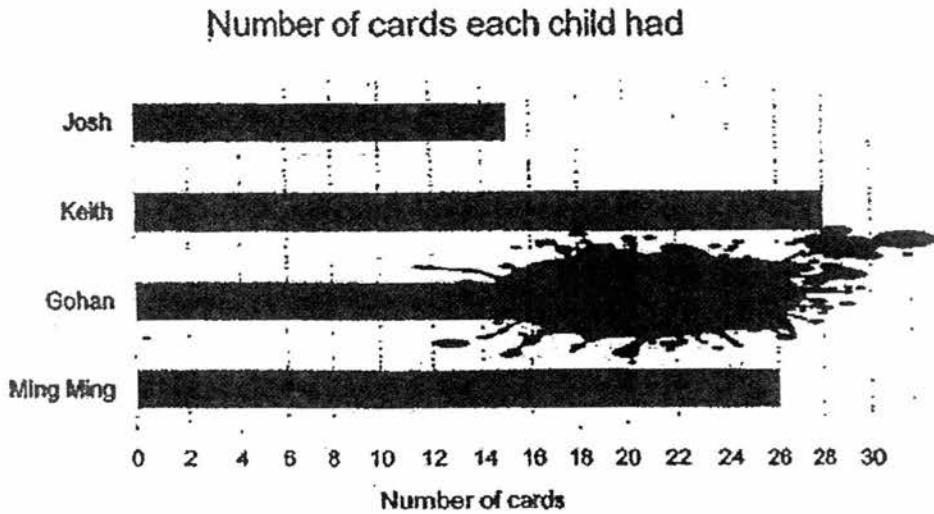
Answer : _____ cm

34. The figure below is made up of two identical rectangles.
 Find the perimeter of the figure.



Answer : _____ cm

35. The bar graph below shows the number of cards each child had. An ink blob covered the bar showing the number of cards Gohan had. Keith and Gohan had 53 cards in all.



How many cards did Gohan have?

Answer : _____

36. Hassan had some pots in his shop.
He bought another 4293 pots on Saturday.
He sold 2148 pots on Sunday and was left with 4645 pots.
How many pots did he have at first?

Answer: _____



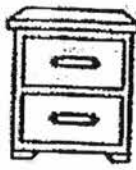


37. Aloysius had 128 eggs.
He put 6 eggs into each tray.
How many more eggs were needed to make up one more tray of 6 eggs?

Answer : _____

38. Amos and Balakrishnan had a total of 612 stickers.
They had the same number of stickers.
Amos put his stickers equally into 9 boxes.
How many stickers were there in each box?

Answer : _____

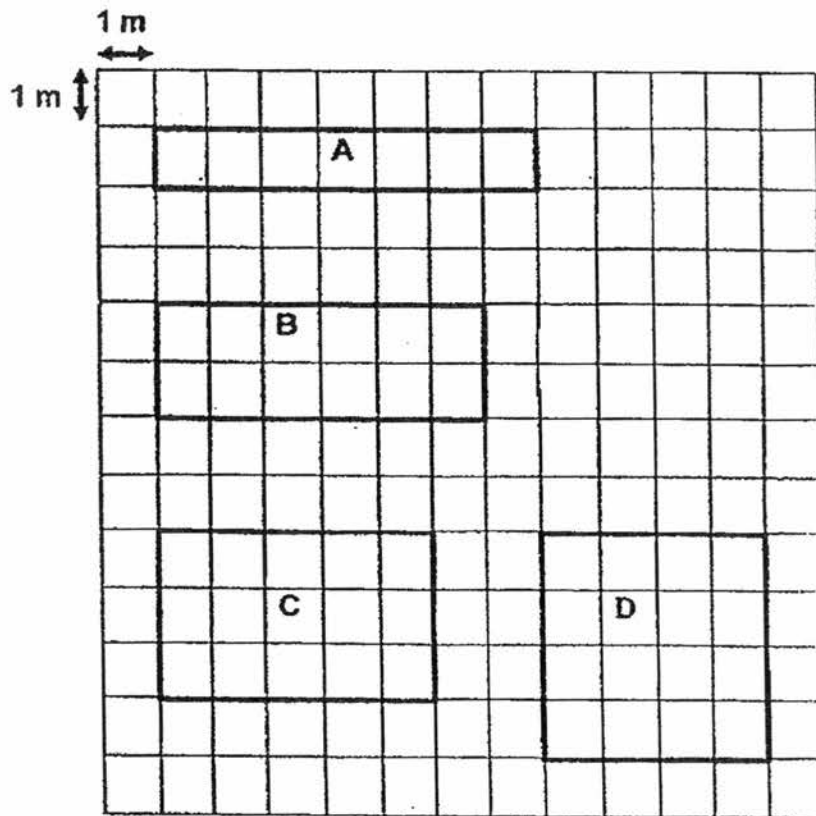
39. Mike had \$100 to buy 3 of the items shown below.
The prices of the items are shown below.

				
Vase	Telephone	Drawer	Clock	Headphones
\$32.45	\$42.50	\$79.80	\$20	\$48

After buying the vase, which two different items could he buy?

Answer : _____ and _____

- 40 Mr Tan built an enclosure for his little ducklings. He used 16m of fencing to build the enclosure. The enclosure he built had the greatest area. Which enclosure did Mr Tan build?



Answer : _____

Section C

Questions 41 to 45 carry 4 marks each. Do these word problems carefully. Show your working clearly in the space provided below each question and write your answers in the spaces provided.

(Total: 20 marks)

41. Bobby had 346 red buttons.
He had 8 times as many blue buttons as red buttons.

(a) How many blue buttons did he have?

- (b) Bobby used 209 red buttons for an Art project.
How many red buttons were left?

42. Halim has 2 jugs of fruit punch.
Jug A contains 1830 ml of fruit punch.
Jug B contains 1780 ml of fruit punch.

(a) How much more millilitres of fruit punch does Jug A contain than Jug B?

(b) How much fruit punch must Halim pour Jug A into Jug B so that both jugs have an equal amount of fruit punch?

43. Mr Tan, Mrs Wong and Mr Seet took part in a cycling competition.
The three of them started racing at 6.20 a.m.
Mr Tan completed the race in 1 h 6 min .
Mrs Wong completed the race 12 min earlier than him.

(a) At what time did Mrs Wong complete the race?






- (b) The total time Mr Tan and Mr Seet took to complete the race was 123 min.
How long did Mr seet take to complete the race?


44. Dushen has 10 tokens that add up to 440 points.
Some of them are 50 point token and the rest are 20 point token.

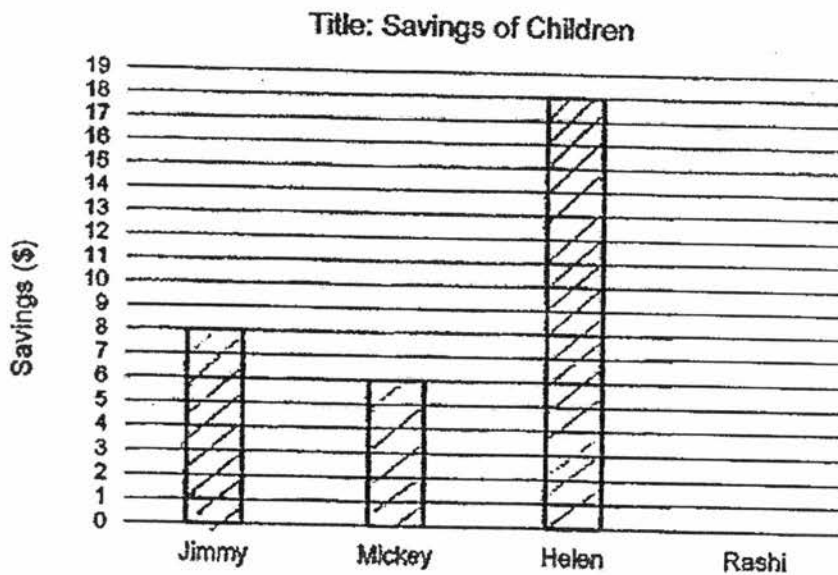
(a) How many 20-point tokens does he have?

(b) Dushen wants to exchange for a water bottle that
points.
How many more points does he need to exchange for it ?

45. The picture graph below shows the savings of 4 children.
The data in the picture graph is used to create the bar graph below.

Jimmy	
Mickey	
Helen	
Rashi	
Each  represents (?)	

- (a) Using the information from the bar graph below, how much does each  represent?
- (b) Who has twice as much money as Mickey?
- (c) The bar graph created below is incomplete.
Complete the bar graph by drawing the bar to show Rashi's savings.



⊙ End of Paper ⊙
Please Check Carefully

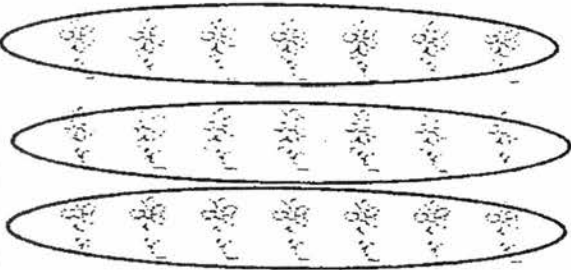
SCHOOL : NANYANG PRIMARY SCHOOL
 LEVEL : PRIMARY 3
 SUBJECT : MATH
 TERM : 2017 SA2

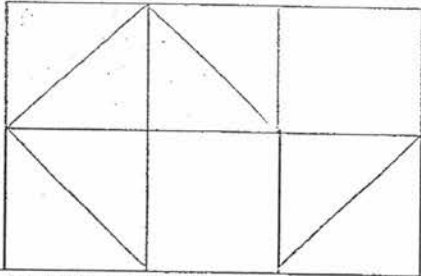
SECTION A

Q 1	Q2	Q3...	Q4	Q5	Q6	Q7	Q8	Q9	Q10
2	4	1	2	2	4	3	3	1	3


Q 11	Q12	Q13	Q14	Q15	Q16	Q17	Q18	Q19	Q20
4	3	1	4	4	4	3	3	2	4

SECTION B

Q21)	7666, 7669, 7696, 7666
Q22)	
Q23)	$7/8, \frac{1}{2}, \frac{1}{4}$
Q24)	12
Q25)	5032
Q26)	3 h 48 min
Q27)	(a) C, D (b) b, e
Q28)	7700
Q29)	$188 - 4 = 184$ $184 \div 8 = 23$

Q30)	
Q31)	$\$37.50 + \$37.50 = \$75$ $\$75 - \$30.30 = \underline{\$44.70}$
Q32)	$850\text{ml} + 700\text{ml} + 400\text{ml} = 1950\text{ml}$ $= \underline{1 \text{ litre } 950 \text{ ml}}$
Q33)	$1\text{m} = 100 \text{ cm}$ $100 \text{ cm} + 40 \text{ cm} = \underline{140 \text{ cm}}$
Q34)	$18 \text{ cm} + 9\text{cm} = 27\text{cm}$ $27 \text{ cm} + 27 \text{ cm} + 18\text{cm} + 18\text{cm} = \underline{90 \text{ cm}}$
Q35)	$53 - 28 = \underline{25}$
Q36)	$4645 + 2148 = 6793$ $6793 - 4293 = \underline{2500}$
Q37)	$128 \div 6 = 21 \text{ R } 2$ $6 - 2 = \underline{4}$
Q38)	$612 \div 2 = 306$ $306 \div 9 = \underline{34}$
Q39)	$\$100 - \$32.45 = \$67.55$ $\$42.50 + \$20 = \$62.50$ <u>Telephone and clock</u>
Q40)	<u>D</u>

SECTION C

Q41)	<p>(a) 1 unit \rightarrow 346 8 units \rightarrow $346 \times 8 = \underline{2768}$ (b) Left \rightarrow $347 - 209 = \underline{137}$</p>																												
Q42)	<p>(a) Difference \rightarrow $1830 \text{ ml} - 1780 \text{ ml} = \underline{50 \text{ ml}}$ (b)</p>  <p>$50 \text{ ml} \div 2 = \underline{25 \text{ ml}}$</p>																												
Q43)	<p>(a) $66 \text{ min} - 12 \text{ min} = 54 \text{ min}$ He finished at <u>7.14 am</u>. (b) $123 \text{ min} - 66 \text{ min} = \underline{57 \text{ min}}$</p>																												
Q44)	<p>(a)</p> <table border="1" data-bbox="316 1171 1289 1485"> <thead> <tr> <th>No. of 20-points token</th> <th>No. of 50-points token</th> <th>Total No. of Token</th> <th>Total No. of Points (20-point token)</th> <th>Total No. of Points (20-point token)</th> <th>Total No. of Points</th> <th>Check</th> </tr> </thead> <tbody> <tr> <td>5</td> <td>5</td> <td>10</td> <td>$5 \times 20 = 100$</td> <td>$50 \times 5 = 250$</td> <td>$250 + 100 = 350$</td> <td>X</td> </tr> <tr> <td>4</td> <td>6</td> <td>10</td> <td>$4 \times 20 = 80$</td> <td>$50 \times 6 = 300$</td> <td>$300 + 80 = 380$</td> <td>X</td> </tr> <tr> <td>2</td> <td>8</td> <td>10</td> <td>$2 \times 20 = 40$</td> <td>$8 \times 50 = 400$</td> <td>$400 + 40 = 440$</td> <td>✓</td> </tr> </tbody> </table> <p>(b) More Points needed to redeem a water bottle \rightarrow $2000 - 440 = \underline{1560}$</p>	No. of 20-points token	No. of 50-points token	Total No. of Token	Total No. of Points (20-point token)	Total No. of Points (20-point token)	Total No. of Points	Check	5	5	10	$5 \times 20 = 100$	$50 \times 5 = 250$	$250 + 100 = 350$	X	4	6	10	$4 \times 20 = 80$	$50 \times 6 = 300$	$300 + 80 = 380$	X	2	8	10	$2 \times 20 = 40$	$8 \times 50 = 400$	$400 + 40 = 440$	✓
No. of 20-points token	No. of 50-points token	Total No. of Token	Total No. of Points (20-point token)	Total No. of Points (20-point token)	Total No. of Points	Check																							
5	5	10	$5 \times 20 = 100$	$50 \times 5 = 250$	$250 + 100 = 350$	X																							
4	6	10	$4 \times 20 = 80$	$50 \times 6 = 300$	$300 + 80 = 380$	X																							
2	8	10	$2 \times 20 = 40$	$8 \times 50 = 400$	$400 + 40 = 440$	✓																							
Q45)	<p>(a) $8 \div 4 = \underline{2}$ (b) <u>Rashi</u> (c) {Draw the bar chart up to the point 12}</p>																												