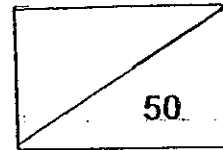


Henry Park Primary School
Mathematics Common Test 1
Primary 3
Units 1, 2, 3 and Process skills

Name : _____ ()



Date: _____ March 2010

Class: Pr 3 _____

Parent's Signature: _____

Duration of Paper: 45 min

Section A: (10 x 2 marks = 20 marks)

Choose the correct answer and write its number in the brackets provided.

1. In 4982, the digit 4 is in the _____ place.

- (1) thousands
- (2) hundreds
- (3) tens
- (4) ones

()

2. In 7150, the value of the digit 1 is _____.

- (1) 1
- (2) 10
- (3) 100
- (4) 1000

()

3. Look at the following number pattern.

1285, 1295, 1315, _____, 1385, 1435.

The missing number in the pattern is _____.

- (1) 1325
- (2) 1335
- (3) 1345
- (4) 1355

()

4. The difference between 2739 and 1853 is _____.

- (1) 886
- (2) 986
- (3) 1126
- (4) 4592

()

5. 2 thousands + 12 hundreds + 5 tens = _____.

What is the missing number?

- (1) 2017
- (2) 2170
- (3) 2125
- (4) 3250

()

6. Arun baked 250 cupcakes. His brother, Benjamin baked 40 cupcakes more than Arun. How many cakes did the two brothers bake altogether?

- (1) 250
- (2) 290
- (3) 460
- (4) 540

()

7. The cost of a doll is \$6. Amy spent \$42 buying a few of these dolls. How many dolls did she buy?

- (1) 7
- (2) 6
- (3) 5
- (4) 4

()

8. I think of a number and I multiply it by 7. The answer is 35.
What is the number?

- (1) 7
- (2) 6
- (3) 5
- (4) 4

()

9. Bala gave 8 stickers to each of his 7 friends. Then he found that he had 6 stickers left for himself. How many stickers did Bala have at first?

- (1) 21
- (2) 50
- (3) 56
- (4) 62

()

10. $9 \times 7 = \underline{\quad\quad} - 1$

- (1) 62
- (2) 63
- (3) 64
- (4) 65

()

Section B: Open-Ended (9 x 2 marks = 18 marks)

Read the following questions carefully and write your answers in the boxes provided.

Show all your workings clearly.

11. $3709 = 3000 + \underline{\hspace{2cm}} + 9$

12. Find the value of A and B in the following number pattern.

35, 37, 41, A, 55, 65, B

13. $3869 + 375 = \underline{\hspace{2cm}}$

14. Subtract 2773 from 4125. The digit is the tens place.

15. Fill in the missing blanks.

5	4	6	4
1	A	7	6
<hr/>			
4	1	B	8
<hr/>			

A =

B =

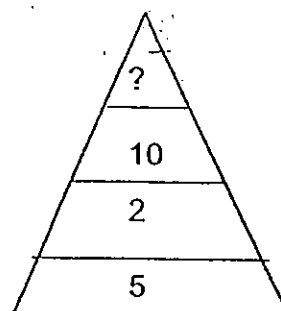
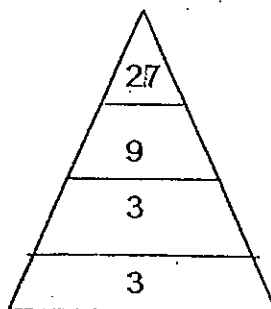
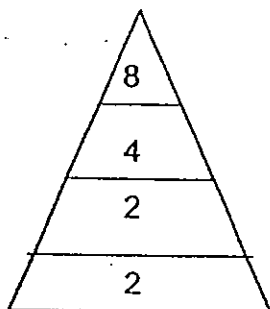
16. Arun is 19 cm shorter than Ben. Chris is 35 cm taller than Ben. Find the difference in height between Arun and Chris.

cm

17. Emily and Faran have 30 sweets altogether. Emily has 12 sweets more than Faran. How many sweets does Faran have?

18. $42 \div 7 = \underline{\quad} \times 2$

19. Look at the pattern below. What is the missing number?



Section C: Problem Sums (3 x 4 marks = 12 marks)

Read the problem sums carefully before solving it. Show all your workings clearly in the space provided.

20. Adrian had 2089 stamps. After giving Ben and Crystal some stamps, he had 950 stamps left. If 544 ~~marbles~~ were given to Ben, how many stamps were given to Crystal? ~~stamps~~


21. A pair of pants cost \$8. 6 belts cost as much as 3 pairs of pants. What is the cost of a belt?

22. Mr Samad has 17 birds and cats in total. If he counted 44 legs in all, how many birds are there?

A bird has 2 legs. A cat has 4 legs.

-END OF PAPER-

Setters: Mdm Lim Yeow Khim & Mr Tseng Lin Fang




ANSWER SHEET

EXAM PAPER 2010

SCHOOL : HENRY PARK PRIMARY
SUBJECT : PRIMARY 3 MATHEMATICS

TERM : CA1



Q1	Q2	Q3	Q4	Q5	Q6	Q7	Q8	Q9	Q10
1	3	3	1	4	4	1	3	4	3

11) 700

12) A= 47, B= 77

13) 4244

14) 5

15) A= 2, B= 8

16) 54

17) 9

18) 3

19) 20

20) $1089 - 950 = 1139$
 $1139 - 544 = \underline{595}$

21) $\$8 \times 3 = \24
 $\$24 \div 6 = \underline{\$4}$

22) There are 12 birds.

