

Maha Bodhi School
2019 Topical Review 3
P2 Mathematics

Name: _____ ()

Class: Primary 2 _____

Duration: 45 minutes

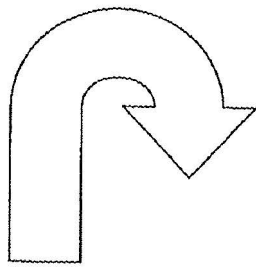
Date: _____

Parent's Signature: _____

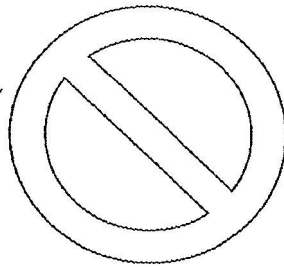
Section A: Multiple Choice Questions

Fill in the correct option (1, 2, 3 or 4) in the brackets provided.


1. Which figure below has curves only and does not have straight lines?




A



B



C

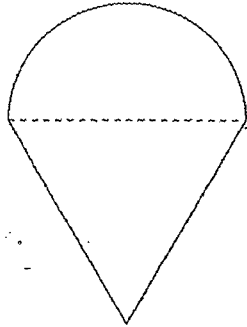


D

- (1) A
(2) B
(3) C
(4) D

()

2. The figure below is made up of a _____ and
a _____.



- (1) circle, triangle
(2) circle, square
(3) semi-circle, triangle
(4) semi-circle, square

()

3. Count the amount of money shown by the coins below.

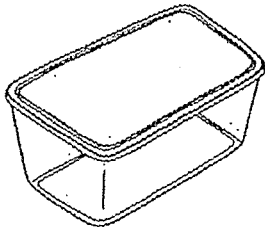


The total amount of money is _____.


- (1) \$1.90
(2) \$1.95
(3) \$2.00
(4) \$2.05

()

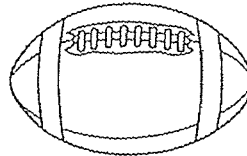
4. Which of the objects have flat surfaces?



A



B



C

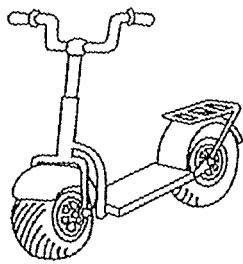


D


- (1) A and C
- (2) A and D
- (3) B and C
- (4) B and D

()

5. What is the total cost of the skate scooter and the bicycle?



Skate scooter
\$84

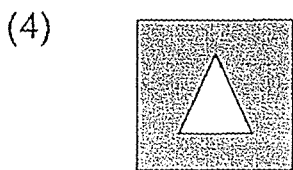
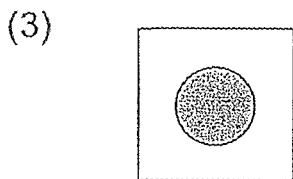
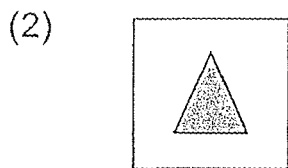
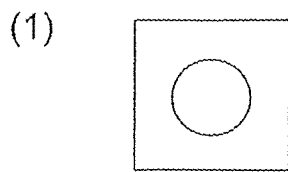
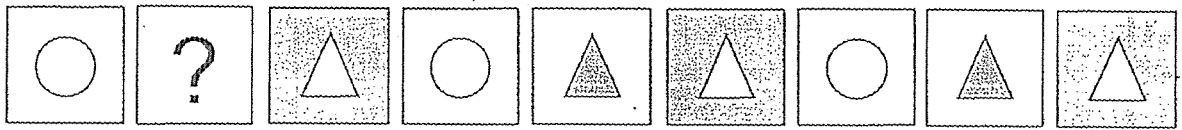


Bicycle
\$193

- (1) \$277
- (2) \$177
- (3) \$111
- (4) \$109

()

6. What is the missing figure in the pattern below?

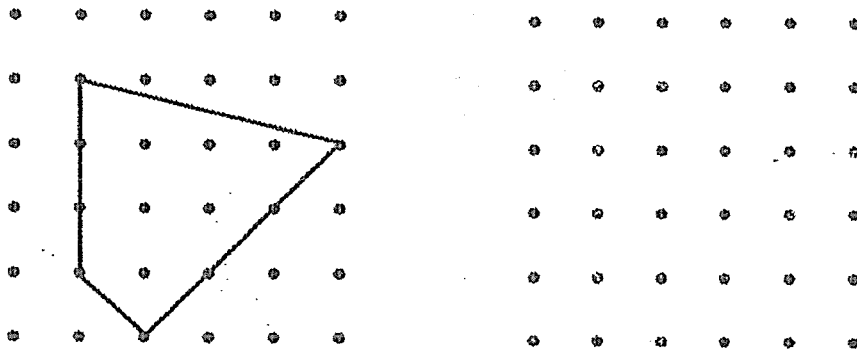


()

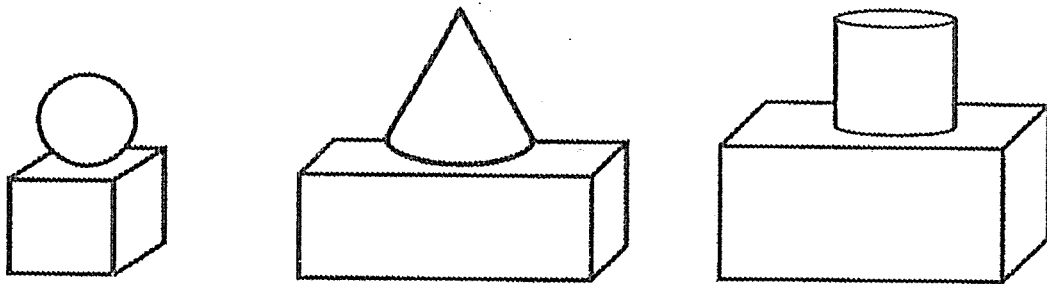
Section B: Short-Answer Questions

Write your answers in the spaces provided.

7. Copy the figure exactly onto the dot grid on the right.




8. Keming used a cuboid and a cone to make a 3D figure.
Circle the correct figure that he had made.



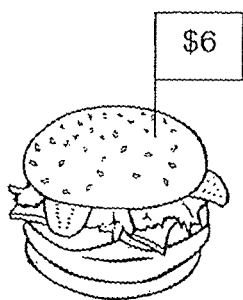
9. Write the amount in dollars.

$$605\text{¢} = \$ \boxed{}$$

10. Circle the figure that is made up of 1 curve and 3 straight lines.



11. A burger cost \$6.
Andy bought 4 similar burgers.
How much did he pay altogether?



Answer: \$ _____

12. Ali wants to buy a toy that costs \$18.

He saves \$2 every day, starting on 12 August.

What is the earliest date that he will be able to buy the toy?

August 2019						
Sun	Mon	Tue	Wed	Thu	Fri	Sat
				1	2	3
4	5	6	7	8	9	10
11	12	13	14	15	16	17
18	19	20	21	22	23	24
25	26	27	28	29	30	31

Answer: _____ August

Section C: Word Problem

Show your number equations clearly and complete the answer statements.

13. Mrs Tan paid \$32 for a few bottles of cooking oil.

Each bottle costs \$4.

How many bottles of cooking oil did she buy?

She bought _____ bottles of cooking oil.

14. Siti saved 50¢ on Monday.

She saved 30¢ more on Tuesday.

(a) How much did she save on Tuesday?

She saved _____ ¢ on Tuesday.


(b) How much did she save altogether? Give your answer in dollars.

She saved \$ _____ altogether.

15. Amy had \$70.
She bought a doll for \$27.
Her mother then gave her another \$16.
How much money did Amy have in the end?

Amy had \$ _____ in the end.

----- The End -----



Remember to check your work!

*This is the property of Maha Bodhi School.
No part of this should be duplicated without the permission of Maha Bodhi School.*



Maha Bodhi School
2019 Topical Review 4
P2: Mathematics

Name: _____ ()

Class: Primary 2 _____

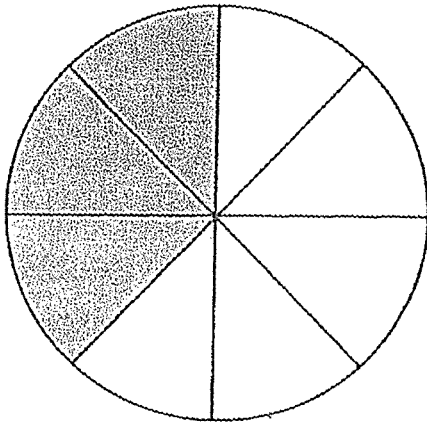
Duration: 45 minutes

Date: _____ Parent's signature: _____

Section A: Multiple Choice Questions

Fill in the correct option 1, 2, 3 or 4 in the brackets provided.

1. What fraction of the circle is shaded?



(1) $\frac{2}{5}$


(2) $\frac{3}{5}$

(3) $\frac{3}{8}$

(4) $\frac{5}{8}$

()

2. The picture graph below shows the number of points awarded to 3 groups of pupils.

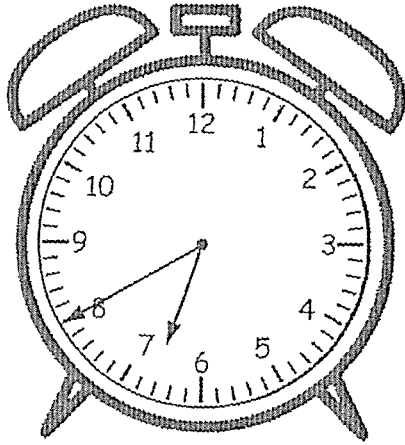


How many points does group C have?

- (1) 5
(2) 9
(3) 12
(4) 20

()

3.



What is the time shown on the clock?

- (1) 6.40 p.m.
- (2) 7.40 p.m.
- (3) 8.30 p.m.
- (4) 8.35 p.m.

()

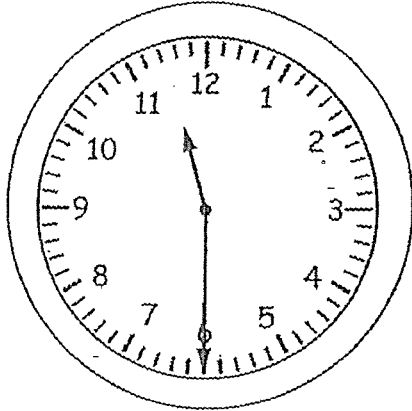
4. $1 - \frac{2}{9} =$?

What is the missing fraction in the box?

- (1) $\frac{1}{9}$
- (2) $\frac{3}{9}$
- (3) $\frac{7}{9}$
- (4) $\frac{8}{9}$

()

5. The time now is 11.30 a.m.
What will the time be half an hour later?



- (1) 11.00 a.m.
- (2) 11.00 p.m.
- (3) 12.00 a.m.
- (4) 12.00 p.m.

()

Section B: Short Answer Questions

Write your answers in the spaces provided.

6. Arrange the fractions from the greatest to the smallest.

$$\frac{1}{6}, \frac{1}{2}, \frac{1}{3}$$

_____ , _____ , _____
greatest

7. Which one of the following figures has half of its shape shaded?

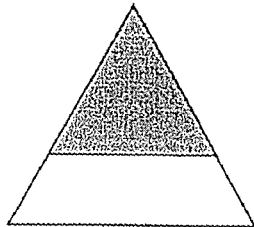


Figure A

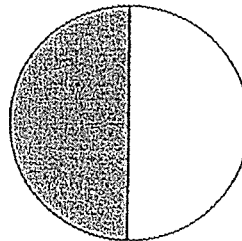


Figure B

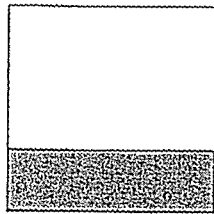


Figure C

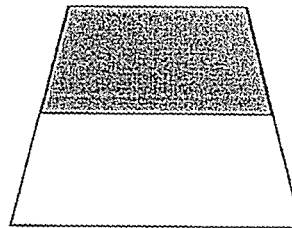



Figure D

Answer: Figure _____

8. $\frac{4}{7} + \frac{2}{7} =$?

Answer: _____

9. The picture graph shows the favourite sport of the pupils in Primary 2 Love.



How many more pupils chose frisbee than soccer as their favourite sport?

Answer: _____


10. Write the correct time with a.m. or p.m.

The recess chime will sound 20 minutes after 9 o'clock.

The time will be _____.

Answer: _____

11. How many more stars must Nancy colour so that $\frac{1}{2}$ of the stars are coloured?



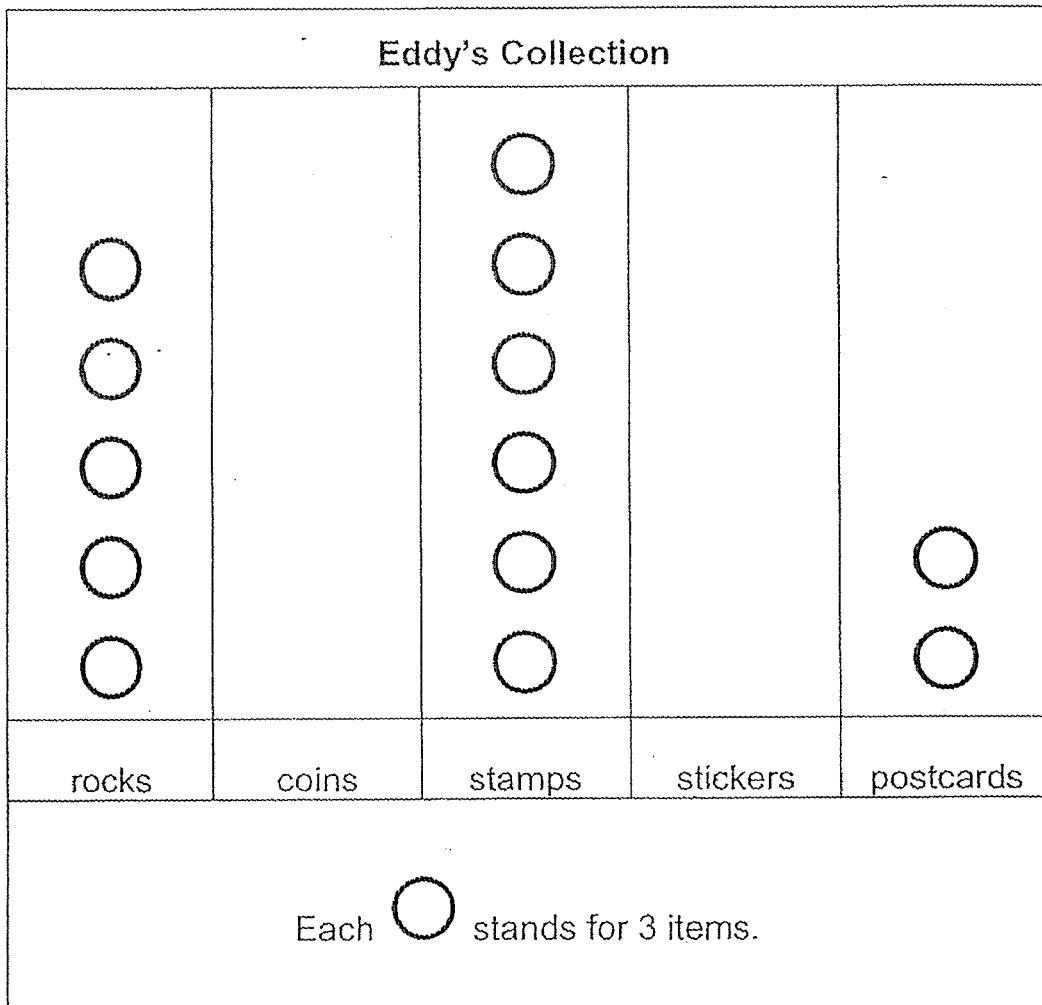
Answer: _____

12. The picture graph shows the number of items Eddy has.

He has the same number of coins and stickers.

He has 6 more coins than postcards.

Draw circles to show the number of coins and the number of stickers in the graph below.



Section C: Word Problem

Show your number equations clearly in the space below each question and complete the answer statements.

13. Cindy had 327 stickers.

She gave 75 stickers to her friends and 54 stickers to her sisters.

How many stickers had she left?

Cindy had _____ stickers left.

14. Timothy has 98 marbles.

He has 27 fewer marbles than Susan.

How many marbles do they have altogether?

They have _____ marbles altogether.

15. Sam, David and Roy played a game.

Sam scored 342 points.

David scored 278 points.

Roy scored 36 fewer points than Sam.

a) How many points did Sam and David score altogether?

Sam and David scored _____ points altogether.

b) How many points did Roy score in the game?

Roy scored _____ points in the game.



Remember to check your work!
~ End of Paper ~

This is the property of Maha Bodhi School.
No part of this should be duplicated without the permission of Maha Bodhi School.

ANSWER KEY

YEAR : 2019
LEVEL : PRIMARY 2
SCHOOL : MAHA BODHI SCHOOL
SUBJECT : MATHEMATICS
TERM : TOPICAL REVIEW 3, 4

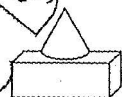
TOPICAL REVIEW 3

SECTION A

Q1	Q2	Q3	Q4	Q5	Q6
4	3	3	2	1	2


SECTION B

Q8)



Q9) $605 \text{ ¢} = \$ 6.05$

Q10)



Q11) $6 \times 4 = 24$

Q12) 20 August

Q13) $32 \div 4 = 8$

Q14. a) $50\text{¢} + 30\text{¢} = 80\text{¢}$

b) $80\text{¢} + 50\text{¢} = \1.30

Q15) $70 - 27 = 43$

$43 + 16 = 59$

TOPICAL REVIEW 4

SECTION A

Q1	Q2	Q3	Q4	Q5
3	4	1	3	4

SECTION B

Q6) $\frac{1}{2}, \frac{1}{3}, \frac{1}{6}$

greatest

Q7) Figure B

Q8) $\frac{6}{7}$

Q9) 12

Q10) 9:20 a.m.

Q11) 3

Q12)

○ ○ ○ ○ ○	○ ○ ○ ○	○ ○ ○ ○ ○ ○	○ ○ ○ ○	○ ○
rocks	coins	stamps	stickers	postcards

Each ○ stands for 3 items.

SECTION C

Q13) $75 + 54 = 129$

$327 - 129 = 198$

Q14) $98 + 27 = 125$

$98 + 125 = 223$

Q15. a) $342 + 278 = 620$

b) $342 - 36 = 306$

THE END

2

END