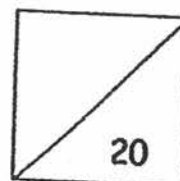


Anglo-Chinese School (Junior)  
 Mathematics  
 Bite-sized Assessment 2

Name: \_\_\_\_\_ ( )

6 April 2017

Class: P2. \_\_\_\_\_



Parent's signature: \_\_\_\_\_

Questions	Skills and Concepts
1, 2, 3, 5, 6, 7, 8	Addition & Subtraction within 1000
4, 9, 10, 11, 12	Word problems

A. Choose the correct answer.  
 Write its number in the brackets provided.

1. The sum of 481 and 299 is \_\_\_\_\_.

- (1) 182                      (2) 218  
 (3) 670                      (4) 780


2. Subtract 17 tens from 899.

- (1) 882                      (2) 829  
(3) 729                      (4) 722

3.  $600 - 324 = \square + 24$

- (1) 252                      (2) 276  
(3) 300                      (4) 324                      (     )

4. Leslie has 156 stickers.  
Melvin has 209 stickers.  
How many more stickers has Melvin than Leslie?



- (1) 50                      (2) 53  
(3) 355                      (4) 365                      (     )

B. Read the questions carefully.  
Write your answers in the spaces provided.

5. 
$$\begin{array}{r} 546 \\ + 363 \\ \hline \\ \hline \end{array}$$

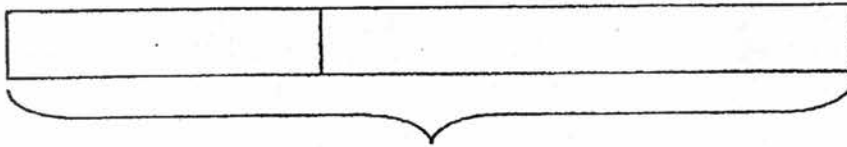
6. 
$$\begin{array}{r} 907 \\ - 709 \\ \hline \\ \hline \end{array}$$

7. 
$$\begin{array}{r} 286 \\ + 3\boxed{\phantom{0}}7 \\ \hline 663 \\ \hline \end{array}$$

8. 
$$\begin{array}{r} \boxed{\phantom{0}}45 \\ - 149 \\ \hline 196 \\ \hline \end{array}$$

C. Read the questions carefully.  
Write your answers in the spaces provided.


9. Joel read 262 pages of his book in January  
He read 339 pages of his book in February.  
How many pages did he read in all?



$$\square \bigcirc \square = \square$$

He read \_\_\_\_\_ pages in all.

10. Mother sold 128 eggs and had 264 eggs left.  
How many eggs did Mother have at first?



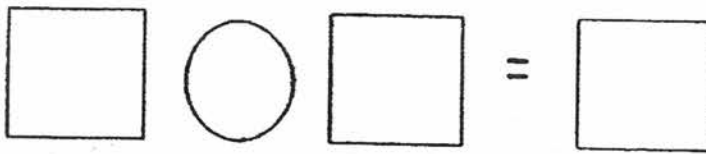
$$\square \bigcirc \square = \square$$

Mother had \_\_\_\_\_ eggs at first.

11. There are altogether 847 tourists at the zoo.

538 of them are children.

How many adults are there?

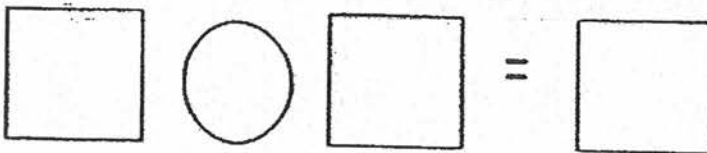



There are \_\_\_\_\_ adults.

12. April made 417 bookmarks.

She made 138 more bookmarks than Beth.

How many bookmarks did Beth make?

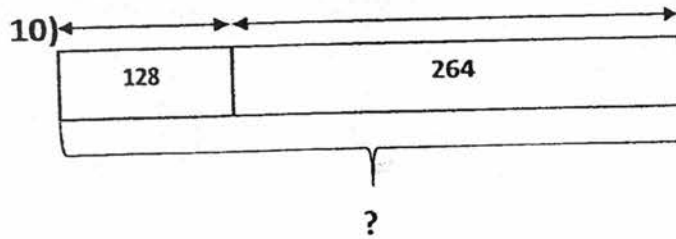


Beth made \_\_\_\_\_ bookmarks.

End of Paper

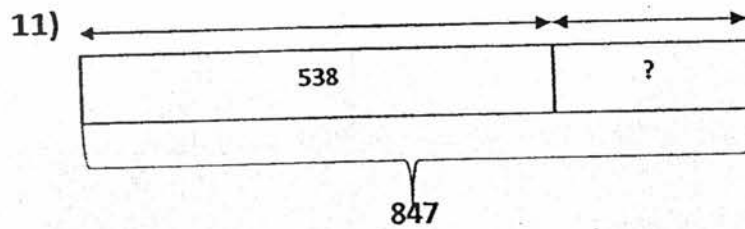








$$264 + 128 = 392$$

Mother had 392 eggs at first.



$$847 - 538 = 309$$

There are 309 adults.



$$417 - 138 = 279$$

Beth made 279 bookmarks.