

Ai Tong School
Formative Assessment 2015
Term 1 Topical Review (1)
Topic: Numbers to 1 000

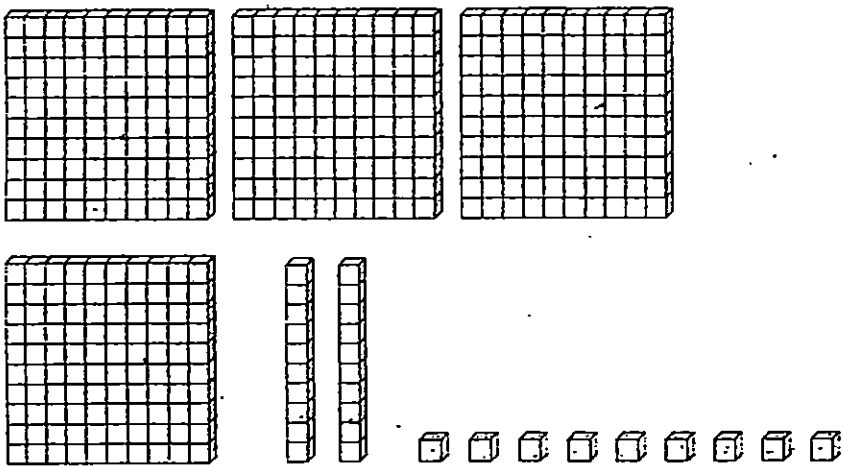
Name: _____

Date: _____

Class: P2 _____

1. Count and write the **number** in the box.

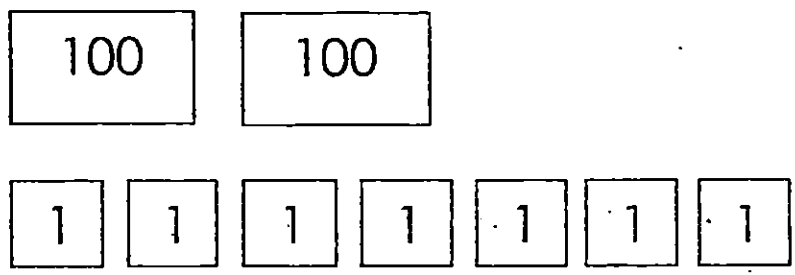
(a)



The diagram shows three hundred blocks (each a 10x10 grid), two ten blocks (each a 1x10 grid), and eight one blocks (each a 1x1 grid).

Answer:

(b)



The diagram shows two hundred blocks (each labeled '100') and seven one blocks (each labeled '1').

Answer:

2. Fill in the blanks.

(a) In 643, the digit **6** is in the _____ place.

(b) In 910, the **value** of the digit **1** is _____

(c) 8 ones + 2 tens + 5 hundreds = _____

3 (a) Write the **numeral**.

Four hundred and sixty-eight

3 (b) Write in **words**.

519

3 (c) Fill in the missing numbers.

459 = tens + 59 ones

4. Fill in the blanks with **greater than** or **smaller than**.

(a) 500 is _____ 15 tens.

(b) 9 tens is _____ 100.

5. Use the digits below to form:

8 4 9

(a) the greatest **even** number

(b) the smallest **odd** number

6 (a) Arrange these numbers in order. Begin with the **greatest**.

758²

587³

789

5794

greatest

6 (b) Arrange the numbers from the **smallest to the greatest**.

623

462

436

642

smallest

7. Fill in the blanks.

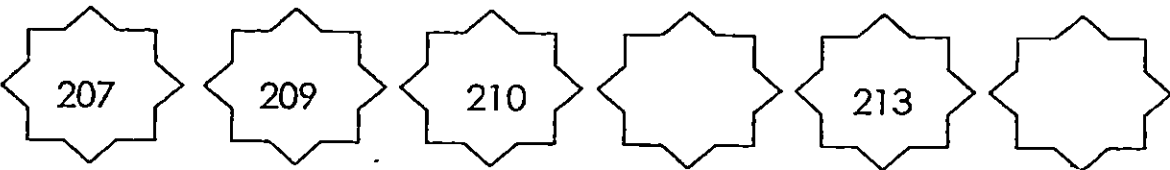
(a) 1 more than 909 is


(b) is 10 more than 225.

(c) 100 less than is 750.

(d) 500 is tens less than 700.

8. Study each number pattern and fill in the missing numbers.

(a) 

(b) 

Check your work carefully 😊



EXAM PAPER 2015

LEVEL : PRIMARY 2

SCHOOL : AI TONG SCHOOL

SUBJECT : MATHEMATICS

TERM : TERM 1 TOPICAL REVIEW 1

Q1. a) 429 b) 207

Q2. a) hundreds b) 10 c) 528

Q3. a) 468 b) Five Hundred And Nineteen c) 40

Q4. a) greater than b) smaller than

Q5. a) 984 b) 489

Q6. a) 789 (greatest), 758, 587, 579 b) 436 (smallest); 462, 623, 642

Q7. a) 910 b) 235 c) 850 d) 20

Q8. a) 212, 215 b) 99, 139