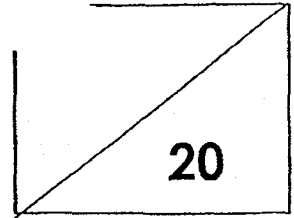


TAO NAN SCHOOL
MATHEMATICS HOLISTIC ASSESSMENT 2019
REVIEW 2

Name: _____ ()

Class: Pr 1 ()

Date: 21 August 2019




Parent's signature: _____

Duration: 45 minutes

Read the questions carefully.

Write the answer in the space provided.

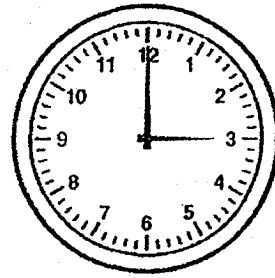

1. Count the slices of watermelon below and write your answer in **words**.



There are





slices of watermelon.

2. The clock shows the time Jane has her piano lesson.



Jane has her piano lesson at

3. Look at the numbers below.




The smallest number is


4.



$$29 - 16 =$$

5. $16 + 34 = \square$ tens

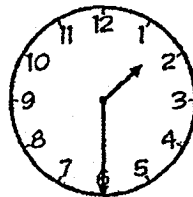
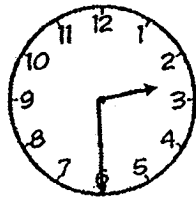
6. Each  stands for 1 unit.




The length of the bookmark is units.

7. It is half past 2.

Tick the clock below that shows the correct time.




8. Arrange the numbers below from the **greatest** to the **smallest**.



greatest


9. At a flower shop, there are some roses and tulips as shown in the picture below.



There are

flowers altogether.

10. Circle the shortest boy.





11. 7 tens 4 ones is 16 more than

12. Complete the number pattern below:

98, 95, 92, _____, 86, 83

13. Ali does his homework at

every evening.




14.

4 3

+ 5 6

--	--

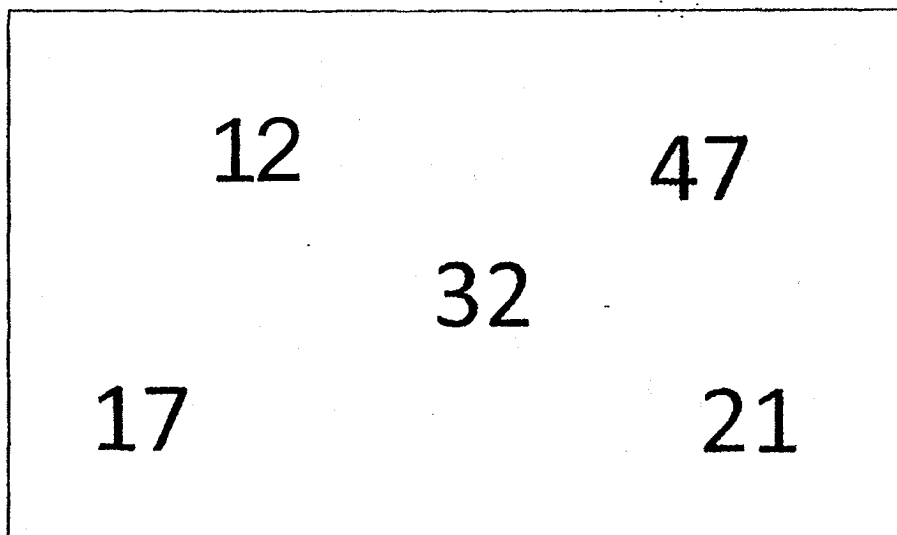
15. Fill in the blanks with 'taller' or 'shorter'.



The horse is _____ than the giraffe.

The horse is _____ than the monkey.

16. **Circle the greatest** number and **cross out** the **smallest** number in the box below.



17. Eddy has 24 game cards. He has 8 fewer game cards than Fred. How many game cards does Fred have?

$$\square \ominus \square = \square$$


Fred has game cards.

18. Mrs Wong has 33 stamps.
She has 15 stamps left after giving some to Mrs Lee.
How many stamps does she give to Mrs Lee?

$$\square \ominus \square = \square$$


She gives stamps to Mrs Lee.

19. Bala and Irwan have 39 toy blocks altogether.
Bala has 17 toy blocks. How many toy blocks does
Irwan have?



Irwan has toy blocks.

20. Susan gave 22 stickers to her brother.
Then she had 14 stickers left.
How many stickers did she have at first?



She had stickers at first.

End of Paper

SCHOOL : TAO NAN PRIMARY SCHOOL

LEVEL : PRIMARY 1

SUBJECT : MATH

TERM : 2019 REVIEW (2)

Q1) forty - eight

Q2) 30 o'clock

Q3) 37

Q4) 13

Q5) 5

Q6) 9


Q7)



Q8) 79 , 65 , 56 , 38

Q9)30

Q10)



Q11) 58

Q12) 89

Q13) Half past 6

Q14) 99

Q15) Shorter , Taller

Q16) 47

Q17) $24 + 8 = 32$

Q18) $33 - 15 = 18$

Q19) $39 - 17 = 22$

Q20) $22 + 14 = 36$