


Red Swastika School  
Primary 1  
Milestone Check 3  
Mathematics



Name: \_\_\_\_\_ ( ) Date: \_\_\_\_\_

Class: 1

Duration: 40 minutes



Fill in the blanks with the correct answers. (2 marks each)



Complete the number equations below.



1.  $14 + 2 =$  \_\_\_\_\_

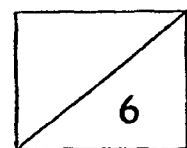
2.  $12 -$  \_\_\_\_\_  $= 9$

3. The symbols,  and  represent a number each.

If  +  = 16

and  -  = 5

then  = 



4. The symbol ☺ represents a number.

$$\text{If } 15 - \text{☺} = 11$$

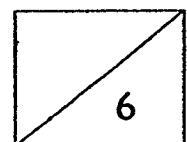
$$\text{Then } \text{☺} + \text{☺} = \boxed{\phantom{00}}$$

Do the following sums. Show your workings and number equations clearly. (4 marks each)

5. Mr Tan sold 9 bottles of chocolate milk and 4 bottles of banana milk. How many bottles of milk did he sell altogether?

He sold \_\_\_\_\_ bottles of milk altogether.

---



6. Mrs Wang bought 15 tarts. She gave away 8 tarts to her friends. How many tarts had she left?

She had \_\_\_\_\_ tarts left.

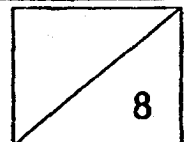
7. Mary baked some cookies. She sold 14 cookies and had 6 cookies left. How many cookies did she bake at first?

She baked \_\_\_\_\_ cookies at first.



**END OF PAPER**

Have you checked your work?





SCHOOL : RED SWASTIKA PRIMARY SCHOOL

LEVEL : PRIMARY 1



SUBJECT : MATH



TERM : 2019 MILESTONE CHECK ( 3 )


---

Q1) 16

Q2) 3

Q3) IF  +  = 16

And  -  = 5

Then  = 3

Q4) 8

Q5)  $9 + 4 = 13$

Q6)  $15 - 8 = 7$

Q7)  $6 + 14 = 20$

