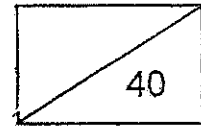


CHIJ ST NICHOLAS GIRLS' SCHOOL
PRIMARY ONE
REVISION PAPER 3
MATHEMATICS
2018



Name : _____ ()

Date : _____

Duration: 50 min

Class : Primary 1 ()


Parent's Signature: _____

Section A (5 x 1 mark and 2 x 2 marks – Total 9 marks)

Read each question carefully and choose the correct answer.

Write the number of the correct answer (1, 2, 3 or 4) in the brackets provided.

1. Yanni has 12 bottles of water.
She puts 3 bottles of water into a box.
How many boxes does she need?



(1) 36

(2) 15

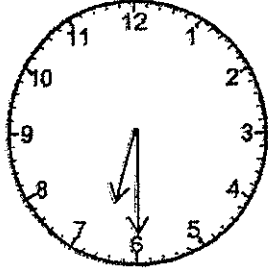
(3) 9

(4) 4

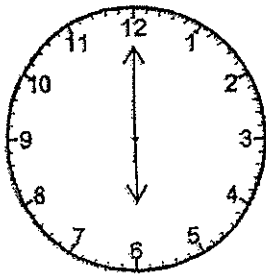
()

2. Which clock shows half past 6?

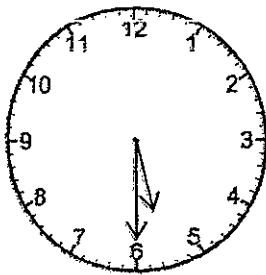
(1)



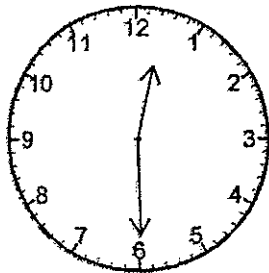
(2)



(3)

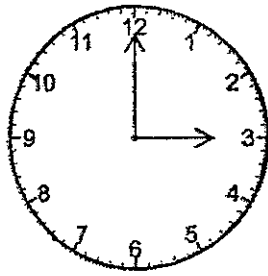


(4)



()

3. The clock shows the time Joshua has his snack.



Joshua has his snack at _____.

- (1) 12 o'clock
- (2) 2 o'clock
- (3) 3 o'clock
- (4) 4 o'clock

()

4.

1 ten-dollar note







= two-dollar notes

- (1) 1
- (2) 2
- (3) 5
- (4) 10

()

5. Jenny bought a doll with all the notes below.
How much did the doll cost?



(1) \$15

(2) \$17

(3) \$19

(4) \$21

()

6. $53 - 1 \text{ ten} = \boxed{?}$

(1) 40

(2) 43

(3) 52

(4) 54

()

7. Mrs Singh baked 20 cupcakes.
She gave the cupcakes equally to 4 children.
How many cupcakes did each child have?



(1) 24

(2) 16

(3) 5


(4) 4

()

Section B (11 x 2 marks = 22 marks)

Write your answers in the space provided. Show all mathematical working clearly.

8. There are 15 stars.

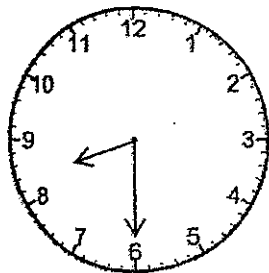


a) Circle the stars into groups of 5.

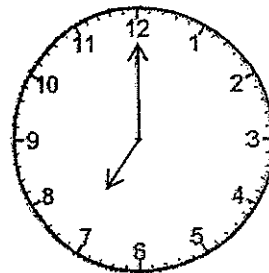
b) There are _____ groups of 5 stars.

9. Which clock shows the correct time?

Put a ✓ in the .



half past 8



12 o'clock

10. Fill in the boxes with the missing numbers.

a) 70 and 8 make

b) 5 tens 6 ones =

11. Fill in the boxes with the missing numbers.

a) $32 + 6 =$

b) $36 + 22 =$

12. Circle the box that gives the answer 67.

13. Fill in the boxes with the missing numbers.

a) $69 - 15 =$


b) $40 - 34 =$

14. Count the amounts of money in the two purses.
Then compare the amounts of money.

Purse A




Purse B



The amount of money in Purse _____ is smaller than the
amount of money in Purse _____

15. Circle 4 coins to show 60¢.




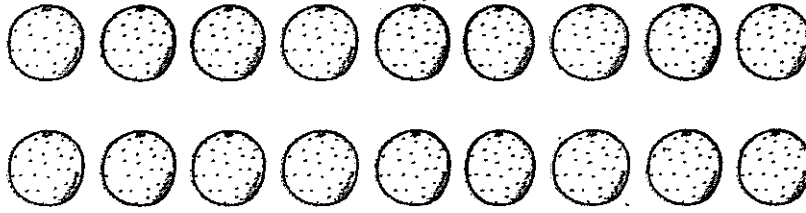
16. Look at the numbers.
Then fill in the blanks.



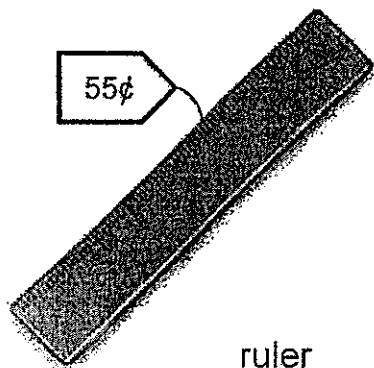
a) The smallest number is _____

b) _____ is greater than 73 but smaller than 90.

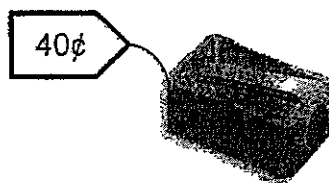
17. Miss Ho had 18 oranges.
She packed the oranges equally into 3 bags.
In each bag, draw an equal number of oranges.



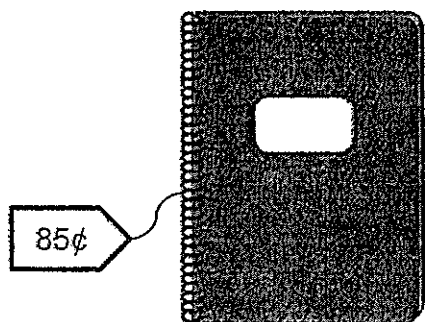
18. Look at the pictures.



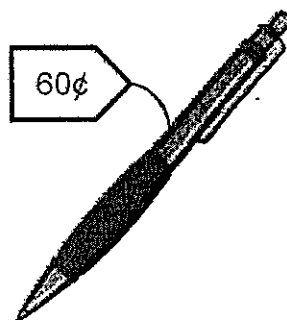
ruler



sharpener



notebook



pen

Rosli spent \$1.
Which two items did he buy?

_____ and _____

Section C (3 x 3 marks = 9 marks)

Solve the following problems. All number equations must be shown clearly.

19. Julian has 16 cookies.
He gives 9 cookies to his sister.
How many cookies does Julian have left?

$$\square \ominus \square = \square$$

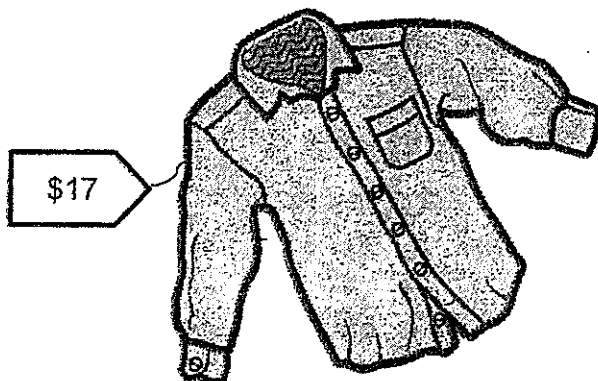
Julian has _____ cookies left.

20. Juliet has 8 files.
Mingjie has 7 files.
How many files do they have altogether?

$$\square \oplus \square = \square$$

They have _____ files altogether.

21. Mr Hassan has \$13.
He wants to buy the shirt.
How much more money does he need?



□ ○ □ □

He needs _____ more.

END OF PAPER

