


SINGAPORE CHINESE GIRLS' SCHOOL (PRIMARY)
PRIMARY 1 MATHEMATICS
TEST 2

Name: _____ ()

Date: _____

Class: Primary 1 SY/C/G/SE/P/GR



Parent's Signature


Choose the correct answer. Write its number in the brackets given.

1. Which shape is 3rd from the left?



- 1) circle
 - 2) rectangle
 - 3) square
 - 4) triangle
- ()


2. Which goat is 5th from the right?




- 1) A
 - 2) B
 - 3) C
 - 4) D
- ()

Read the questions carefully.
Write the correct answers in the space given.

3. The spider that is 4th from the right is also _____ from the left.

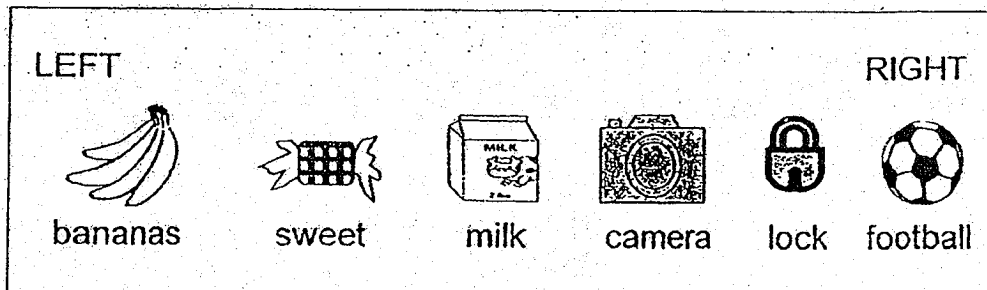


4. Colour the 5th smiley face.

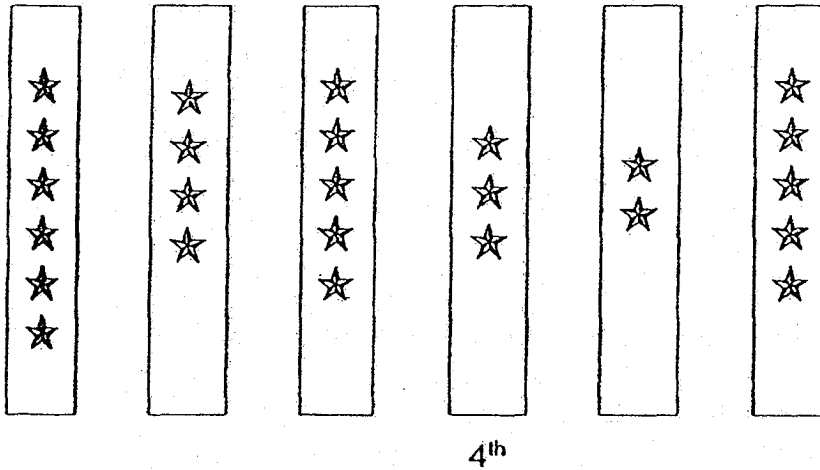


5. Look at the pictures below.
Circle the 3rd object from the right.

Cross out the last object from the left.



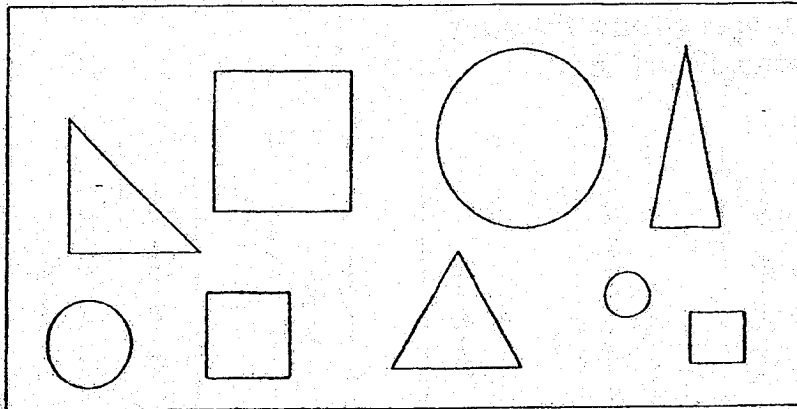
Look at the cards and count the stars.
Then answer questions 6 to 9.



6. There are _____ stars on the first card.
7. There are _____ stars on the fifth card.
8. The _____ card has only four stars.
9. The _____ card and the _____ card have the same number of stars.

Choose the correct answer. Write its number in the brackets given.

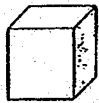
10.



Which shape is not found in the set above?

- 1) circle
 - 2) square
 - 3) rectangle
 - 4) triangle
- ()

11. Which object has the shape of a triangle?



(1)



(2)




(3)




(4)

()

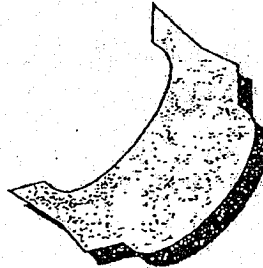
12. Which of the following has only straight lines?




A



B



C



D

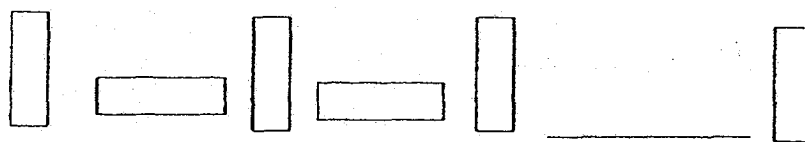
- 1) A
 - 2) B
 - 3) C
 - 4) D
- ()

Read the questions carefully.
Draw the correct answers in the space given.

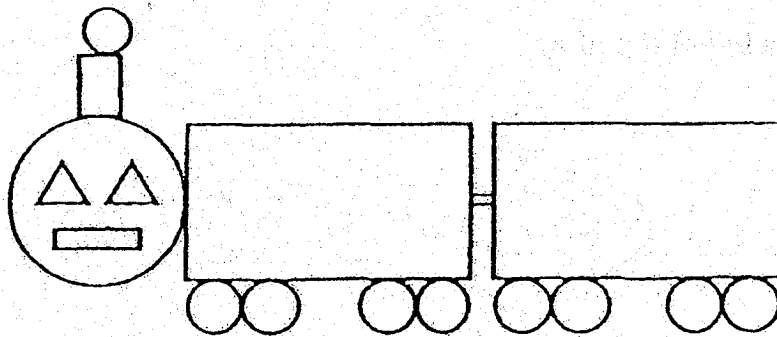
13. Complete the pattern.



14. Complete the pattern.



15. Look at the picture below and answer questions (a) to (e).



- a. There are _____ circles.
- b. There are _____ rectangles.
- c. There are _____ triangles.
- d. There are _____ more circles than rectangles.
- e. There are _____ fewer triangles than circles.

EXAM PAPER 2018 (P1)

SCHOOL : SCGS

SUBJECT : MATHEMATICS

TERM : TEST 2

Q1	Q2
3	2

Q3) 7 th

Q4)



Q5) circle – camera

cross out – football

Q6) 6

Q7) 2

Q8) 2 nd

Q9) 3 rd , 6 th

Q10) 3

Q11) 4

Q12) 1

Q13)



Q14)



Q15) a) 10

b) 5

c) 2

d) 5

e) 8