

**Nanyang Primary School**  
**Primary 1**  
**Mathematics**  
**Combined Topical Test 1**

Name: \_\_\_\_\_ ( )

Marks:

/30

Class: Primary 1 ( )

Date: 1 March 2018

Parent's Signature: \_\_\_\_\_

Duration: 45 minutes

**Section A**

Questions 1 to 8 carry 1 mark each.


For each question, four options are given.

One of them is the correct answer.

Make your choice (1, 2, 3 or 4) and write your answer (1, 2, 3 or 4) in the bracket ( ) provided.

(8 marks)

1.



How many lollipops are there in the picture above?

- (1) six  
 (3) eight

- (2) seven  
 (4) nine


( )

2. Which one of the numbers below is more than 4 but less than 7?

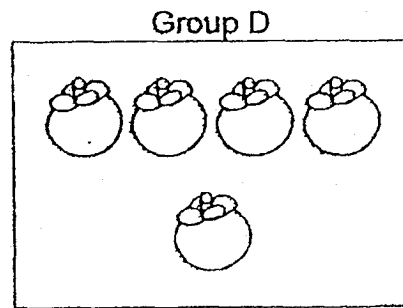
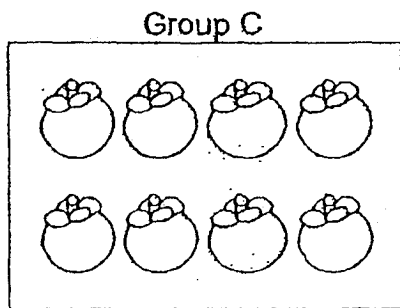
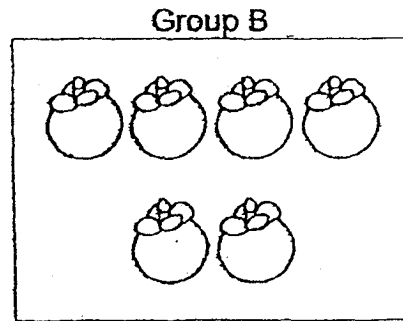
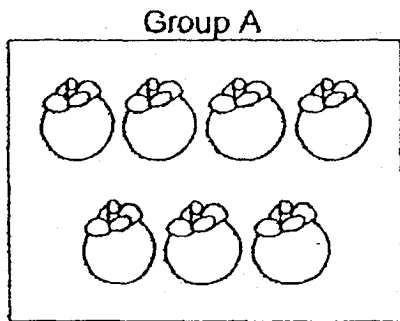
- (1) 6  
 (3) 3

- (2) 9  
 (4) 4

( )



3. Which group has the greatest number of objects?



- (1) Group A
- (3) Group C

- (2) Group B
- (4) Group D ( )

4. What is 2 less than 6?

- (1) 6
- (3) 3

- (2) 8
- (4) 4 ( )

5. 0 and ? make 2.

What is the missing number?

(1) 1

(2) 2

(3) 3

(4) 0

( )

6. Which of the following has an answer less than 8?

(1)  $2 + 6$

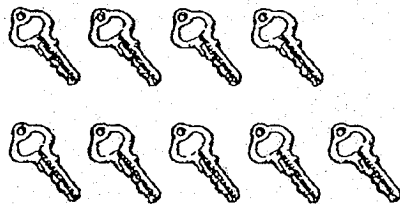
(2)  $6 + 4$

(3)  $3 + 2$

(4)  $4 + 5$

( )

7. Mrs Lee had 4 keys.  
Mrs Chan had 5 keys.  
How many keys did they have altogether?



(1) 1

(2) 8

(3) 9

(4) 10

( )

8. I am thinking of a number.  
I add 3 to the number, I get 6.  
What is the number?

(1) 8

(2) 2

(3) 3

(4) 9

( )

**Section B**

Questions 9 to 13 carry 2 marks each.

Show your working clearly and write your answers in the spaces provided.

For questions which require units, give your answers in the units stated.

(10 marks)

---

9. Write the numbers in words.

a) 3 \_\_\_\_\_

b) 5 \_\_\_\_\_

---

10. Arrange the numbers in order.



Begin with the smallest number.

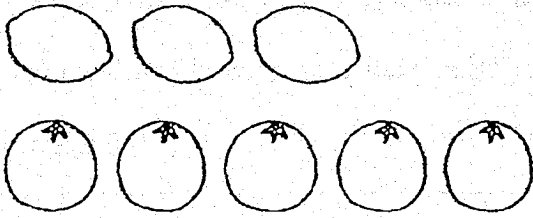
\_\_\_\_\_ , \_\_\_\_\_ , \_\_\_\_\_ , \_\_\_\_\_ , \_\_\_\_\_  
smallest

---

11. Circle 3 numbers to make 7.

2      4      3      1      5


12. Look at the pictures.  
Fill in the blank.




There are \_\_\_\_\_ fewer lemons than oranges.

---

13. Sally and Jack bought 6 balloons.  
Sally bought 2 fewer balloons than Jack.  
Draw the balloons each person bought in the boxes provided.



Sally



Jack

---

**Section C**

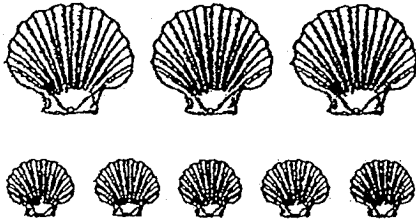
For questions 14 to 17, show your working clearly and write your answers in the spaces provided.

Only use numbers from each question to write your equation.

The number of marks available is shown in brackets [ ] at the end of each question or part-question.

(12 marks)

14. There are 3 big seashells and 5 small seashells.  
How many seashells are there altogether?



There are \_\_\_\_\_ seashells altogether.

[3]

15. Sue has 4 blocks as shown below.  
Lisa has 6 more blocks than Sue.  
How many blocks does Lisa have?



Lisa has \_\_\_\_\_ blocks.

[3]

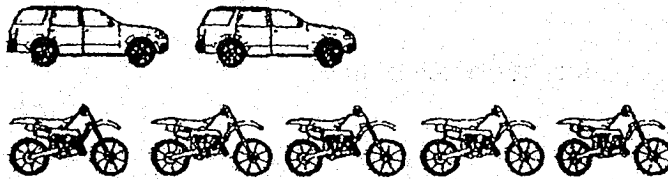
16. Ravi buys 8 cupcakes.  
Ahmad buys 1 more cupcake than Ravi.  
How many cupcakes does Ahmad buy?



Ahmad buys \_\_\_\_\_ cupcakes.

[3]

17. There are 2 cars and 5 motorbikes in a car park.  
How many cars and motorbikes are there altogether?



There are \_\_\_\_\_ cars and motorbikes altogether.

[3]

End of Paper



**EXAM PAPER 2018 (P1)**

**SCHOOL : NANYANG**

**SUBJECT : MATHEMATICS**

**TERM : Combined Topical Test 1**

Q1	Q2	Q3	Q4	Q5	Q6	Q7	Q8
3	1	3	4	2	3	3	3

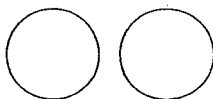
Q9) a) three


b) five

Q10) 0, 2, 4, 6, 9

Q11) 2, 4, 1

Q12) 2

Q13) Sally : 

Jack : 

Q14)  $3 + 5 = 8$

Q15)  $4 + 6 = 10$

Q16)  $8 + 1 = 9$

Q17)  $2 + 5 = 7$