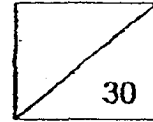




Maha Bodhi School
2018 Topical Review 1
P1 Mathematics




Name: _____ ()

Class: Primary 1 _____ Duration: 50 minutes

Date : 9 May 2018 Parent's Signature : _____


Questions 1 to 8 carry 1 mark each.
Questions 9 to 19 carry 2 marks each.
Write your answers in the boxes provided.

1. Count and write the number.


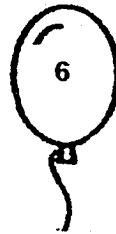


There are presents.

Marks:



2. Arrange the numbers in order. Begin with the greatest number.



greatest

3. $4 + 13 =$

4. $16 - 7 =$

5. I am greater than 13 but smaller than 17. What number can I be?

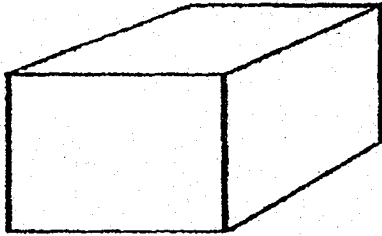
I am

6.

$$\boxed{?} + 8 = 20$$

The missing number is

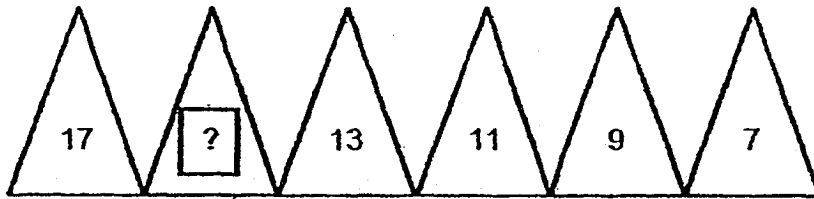
7. There are 11 cups inside the box.
How many cups are there altogether?



There are

cups altogether.

8. Complete the number pattern.

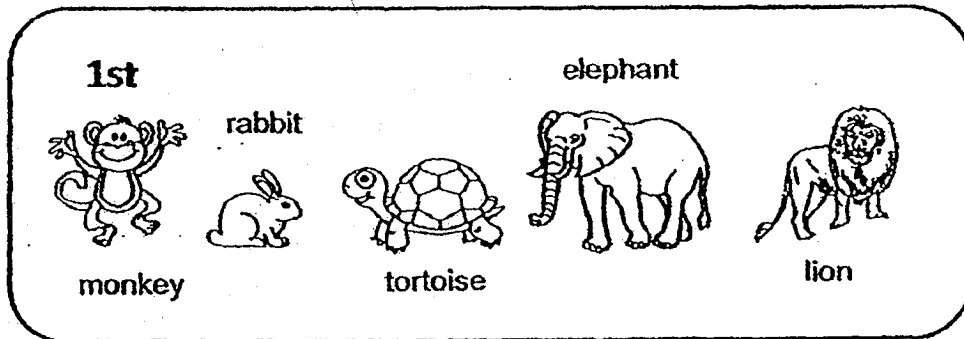


The missing number is

9. Fill in the missing numbers.



19 = ten ones

10. Look at the animals given below:



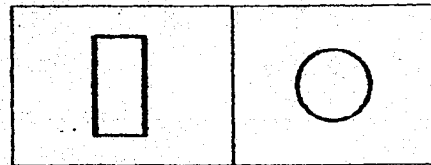
The lion is in the position.

11. Jim has 5 stamps. His cousin has 8 stamps.
How many stamps do they have altogether?



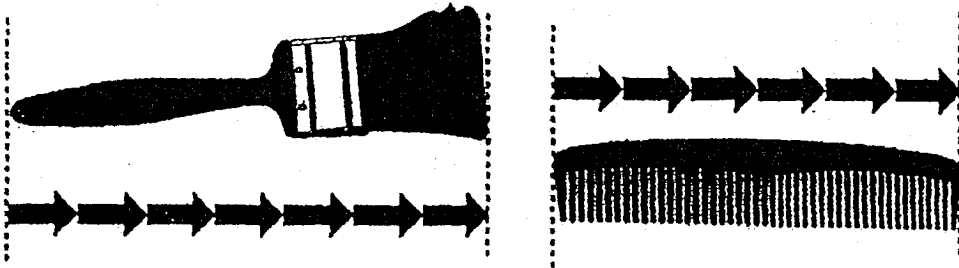
They have stamps altogether.

12. Complete the pattern. Circle the missing shape.

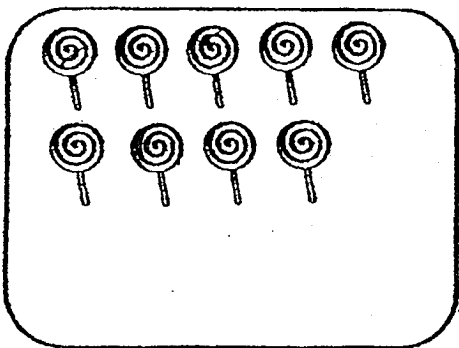


13. Each  stands for 1 unit.

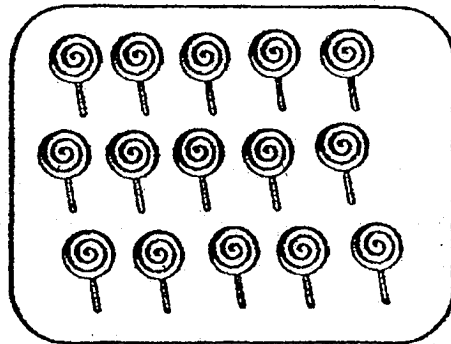
The total length of the brush and the comb is units.



14. Tom and Jerry have some lollipops.




Tom



Jerry


Tom has fewer lollipops than Jerry.

15. Four children are competing in a race.
Alex runs in front of Sam.
Dan is behind Sam.
John is last in the race.



is first in the race.


16. Use the following numbers to make a subtraction equation.
Each number can only be used once.




17. Fill in each box with the correct name.

Amy is taller than Kim.

Pam is the shortest.



18. Count the shapes in the picture. Then fill in the blanks.



There are more circles than squares.

19. Jen baked 15 cupcakes on Thursday.
She baked 4 more cupcakes on Thursday than on Friday.
How many cupcakes did Jen bake on Friday?
Complete the equation to show the answer.



$$\square \quad \bigcirc \quad \square = \square$$

— End of Paper —

Remember to check your work! Every mark counts.

EXAM PAPER 2018 (P1)

SCHOOL : MAHA BODHI

SUBJECT : MATHEMATICS

TERM : Topical Review 1

Q1) 19

Q2) 15 , 11 , 8 , 6

Q3) 17

Q4) 9

Q5) 14 / 15 / 16

Q6) 12

Q7) 14

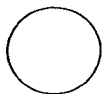
Q8) 15

Q9) $19 = 1 \text{ ten } 9 \text{ ones}$

Q10) 5th

Q11) 14

Q12)




Q13) 13

Q14) 6

Q15) Alex

Q16) $20 - 7 = 13$

Q17)



Q18) 5

Q19) $15 - 4 = 11$